

Planar Turán Number of Double Stars

Debarun Ghosh^{1,2}

Ervin Győri^{1,2}

Addisu Paulos^{1,2}

Chuanqi Xiao^{1,2}

¹Central European University, Budapest

ghosh_debarun@phd.ceu.edu, xiao_chuanqi@outlook.com, addisu_2004@yahoo.com

²Alfréd Rényi Institute of Mathematics, Budapest

gyori.ervin@renyi.hu

Abstract

Given a graph F , the planar Turán number of F , denoted by $\text{ex}_{\mathcal{P}}(n, F)$, is the maximum number of edges in an n -vertex F -free planar graph. Such an extremal graph problem was initiated by Dowden while determining the sharp upper bound for $\text{ex}_{\mathcal{P}}(n, C_4)$ and $\text{ex}_{\mathcal{P}}(n, C_5)$, where C_4 and C_5 are cycles of length four and five, respectively. In this paper, we determine the upper bounds for $\text{ex}_{\mathcal{P}}(n, S_{2,2})$, $\text{ex}_{\mathcal{P}}(n, S_{2,3})$, $\text{ex}_{\mathcal{P}}(n, S_{2,4})$, $\text{ex}_{\mathcal{P}}(n, S_{2,5})$, $\text{ex}_{\mathcal{P}}(n, S_{3,3})$ and $\text{ex}_{\mathcal{P}}(n, S_{3,4})$, where $S_{m,n}$ is a double star with m and n leaves. Moreover, the bounds for $\text{ex}_{\mathcal{P}}(n, S_{2,2})$ and $\text{ex}_{\mathcal{P}}(n, S_{2,3})$ are sharp.

1 Introduction

One of the famous problems in extremal graph theory is determining the number of edges in an n -vertex graph to force a particular graph structure. The well-known result of Turán's [9] gives the maximum number of edges in an n -vertex graph containing no complete graph of a given order. The *Turán number* of a graph H , denoted by $\text{ex}(n, H)$, is the maximum number of edges in an n -vertex graph that does not contain H as a subgraph. Let $\text{EX}(n, H)$ denote the set of extremal graphs, that is the set of all n -vertex, H -free graph G such that $e(G) = \text{ex}(n, H)$. Erdős, Stone and Simonovits [3, 2] gave a more generalized result where they determined the asymptotics of $\text{ex}(n, F)$ for all non-bipartite graphs F . They proved that $\text{ex}(n, F) = (1 - \frac{1}{\chi(F)-1})\binom{n}{2} + o(n^2)$, where $\chi(F)$ denotes the chromatic number of F .

Over the last decade, a considerable amount of research work has been carried out on Turán type problems. For example, when the host graphs are K_n , k -uniform hypergraphs, and k -partite graphs, see [2, 10]. In 2015, Dowden [1] initiated the study of Turán-type problems when the host graph is planar graph, that is, how many edges a planar graph on n vertices can have without

containing a given smaller graph? The planar Turán number of a graph F , denoted by $\text{ex}_{\mathcal{P}}(n, F)$, is the maximum number of edges in a planar graph on n vertices containing no F as a subgraph. Dowden [1] determined a sharp upper bound for $\text{ex}_{\mathcal{P}}(n, C_4)$ and $\text{ex}_{\mathcal{P}}(n, C_5)$, where C_4 and C_5 are a cycle of length four and five respectively. Very recently, Ghosh et al. [4] obtained a sharp upper bound for $\text{ex}_{\mathcal{P}}(n, C_6)$, where C_6 is a cycle of length six.

The analog to Turán's theorem in the case of planar graphs is fairly trivial. Since K_5 is not planar, there are only two meaningful cases. For the K_3 , the extremal number of edges is $2n - 4$, and the extremal graph is $K_{2, n-2}$ (since all faces have size four when drawn in the plane). Note that there exist planar triangulations not containing K_4 (e.g., take a cycle of length $n - 2$ and then add two new vertices which are adjacent to all those in the cycle). Thus, the extremal number in the case of K_4 is $3n - 6$. The planar Turán number when the forbidden subgraph is a star is also fairly trivial. The authors in [7] proved that $\text{ex}_{\mathcal{P}}(n, H) = 3n - 6$ for all H with $n > |H| + 2$ and either $\chi(H) = 4$ or $\chi(H) = 3$ and $\Delta(H) > 7$. They also completely determined $\text{ex}_{\mathcal{P}}(n, H)$ when H is a wheel or a star, and the case when H is a (t, r) -fan, that is, H is isomorphic to $K_1 + tK_{r-1}$, where $t > 2$ and $r > 3$ are integers. The next most natural type of graph to investigate is perhaps a path. For extremal planar Turán number for paths of length $\{6, 7, 8, 9, 10, 11\}$, we refer the reader to [6] and [7]. Planar Turán number of other graphs, for instance, wheels and Theta graphs also be considered. We refer the reader to [5, 6, 8] for detailed results. The next natural extension of the topic is considering double stars as the forbidden graph.

Definition 1. *An (m, n) -double star, denoted by $S_{m, n}$, is the graph obtained by taking an edge, say xy , and joining one of its end vertices, say x , with m vertices and the other end vertex, y , with n vertices which are different from the m vertices. The edge xy is called the backbone of the double star. The vertices adjacent to an end vertex of the backbone are called the leaf-sets of the double star. Figure 1 shows an m - n double star such that the backbone is xy and the leaf-sets are $\{x_1, x_2, \dots, x_m\}$ and $\{y_1, y_2, \dots, y_n\}$, respectively.*

In this paper, we address the upper bounds of planar Turán number of the following double stars: $S_{2,2}$, $S_{2,3}$, $S_{2,4}$, $S_{2,5}$, $S_{3,3}$ and $S_{3,4}$. Moreover, the bound for $\text{ex}_{\mathcal{P}}(n, S_{2,2})$ and $\text{ex}_{\mathcal{P}}(n, S_{2,3})$ is sharp. The bound for $\text{ex}_{\mathcal{P}}(n, S_{3,3})$ is sharp up-to a linear term. Before proceeding to our results, we mention notations and terminologies to be used in next.

All the graphs we consider in this paper are simple and finite. Let G be a graph. We denote the vertex and edge set of G by $V(G)$ and $E(G)$, respectively. Let $e(G)$ and $v(G)$ denote the number of

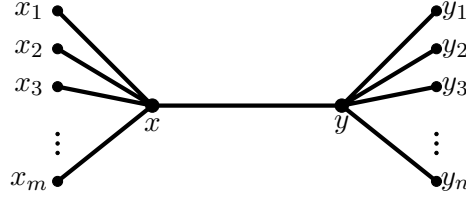


Figure 1: A double star $S_{m,n}$ with m and n leaves.

edges and vertices, respectively. We denote the degree of a vertex v by $d(v)$, the minimum degree in graph G by $\delta(G)$ and the maximum degree in graph G by $\Delta(G)$. The subgraph induced by $S \subseteq V(G)$, is denoted by $G[S]$. Moreover, $N(v)$ denotes the set of vertices in G adjacent to v . Let A and B be disjoint subsets of $V(G)$. Let $e(A, B)$ denote the number of edges in G , that joins a vertex in A and a vertex in B . An m - n edge is an edge such that the end vertices of the edge are with degree m and n . The join $G = G_1 + G_2$ of graphs G_1 and G_2 with disjoint vertex sets V_1 and V_2 and edge sets X_1 and X_2 is the graph union $G_1 \cup G_2$ together with all the edges joining V_1 and V_2 .

The following theorem summarizes the main results:

Theorem 1. *Estimates on the planar Turán number of double stars $S_{m,n}$ for given values of $\{m, n\}$ are as follows:*

(i) For any $n \geq 16$, $\text{ex}_{\mathcal{P}}(n, S_{2,2}) = 2n - 4$.

(ii) For any $n \geq 1$, $\text{ex}_{\mathcal{P}}(n, S_{2,3}) = 2n$.

(iii) For any $n \geq 1$, $\frac{15}{7}n \leq \text{ex}_{\mathcal{P}}(n, S_{2,4}) \leq \frac{8}{3}n$.

(iv) For $n \geq 1$, $\frac{5}{2}n \leq \text{ex}_{\mathcal{P}}(n, S_{2,5}) \leq \frac{20}{7}n$.

(v) For $n \geq 3$, $\frac{5}{2}n - 5 \leq \text{ex}_{\mathcal{P}}(n, S_{3,3}) \leq \frac{5}{2}n - 2$.

(vi) For $n \geq 1$, $\frac{9}{4}n \leq \text{ex}_{\mathcal{P}}(n, S_{3,4}) \leq \frac{20}{7}n$.

2 Planar Turán number of $S_{2,2}$

We start by proving the following weaker bounds:

Lemma 1. *Let G be an $S_{2,2}$ -free plane graph on n ($n \neq 5$) vertices, then $e(G) \leq 2n - 2$.*

Proof. Suppose that G contains 6 vertices. There are only two 6-vertex maximal planar graphs M_1 and M_2 as shown in Figure 2. It can be checked that M_1^- and M_2^- both contain an $S_{2,2}$. Thus, $e(G) \leq 10 = 2n - 2$, when $n = 6$. Now let G be an $S_{2,2}$ -free planar graph on 7 vertices. If G

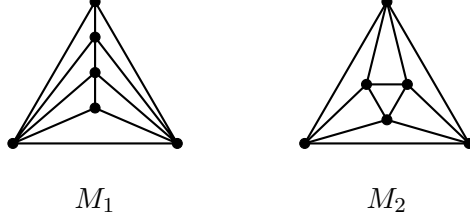


Figure 2: The two 6-vertex maximal planar graphs.

contains a vertex of degree at most 2, we are done by induction. Moreover, there is no vertex of degree at least 5 in G . Suppose there is a vertex $x \in V(G)$ such that $d(x) = k$, where $k \geq 5$. In this case, each vertex in $N(x)$ must be of degree at most 2. Otherwise, it is easy to find an $S_{2,2}$ in G , which is a contradiction.

Assume that $\Delta(G) \leq 4$. Let the number of vertices in G with degree at most 3 be k . Hence, G contains at least $n - k$ vertices of degree 4, which implies

$$e(G) \leq \frac{4(n - k) + 3k}{2} = 2n - \frac{k}{2}.$$

If there are at least 4 vertices of degree at most 3, then $e(G) \leq 2n - \frac{4}{2} = 2n - 2$. Let v be a degree 4 vertex in G . If each vertex in $N(v)$ is of degree at most 3, then $e(G) \leq 2n - 2$. So, there is a vertex $u \in N(v)$, such that uv is a 4-4 edge in G . Since G is an $S_{2,2}$ -free plane graph, uv must be contained in 3 triangles. Let $N(u) \cap N(v) = \{x_1, x_2, x_3\}$ and $S = V(G) \setminus \{u, v, x_1, x_2, x_3\}$. Observe that no vertex in S is adjacent to a vertex in $\{x_1, x_2, x_3\}$. Deleting the vertices $\{u, v, x_1, x_2, x_3\}$. We deleted at most $3 \cdot 5 - 6 = 9$ edges. Therefore, $e(G) = e(G - \{u, v, x_1, x_2, x_3\}) + 9 \leq 2(n - 5) - 2 + 9 \leq 2n - 2$. Hence, we are done by induction. \square

Lemma 2. *Let G be an $S_{2,2}$ -free plane graph on n ($n \geq 8$) vertices. If there is a vertex with degree at least 5, then $e(G) \leq 2n - 4$.*

Proof. Let $x \in V(G)$ such that $d(x) = k \geq 5$. Let $N(x) = \{x_1, x_2, x_3, \dots, x_k\}$, and S be the set of vertices in $V(G) \setminus N(x)$. Each vertex in $N(x)$ is adjacent to at most one other vertex in $N(x)$. Otherwise, it is easy to show that G contains an $S_{2,2}$. Similarly, for an edge $x_i x_j$, where $x_i, x_j \in N(x)$, there is no vertex in S which is adjacent to either x_i or x_j . Thus, the number

of edges joining a vertex in $N(x)$ and a vertex in S is at most k . If $|S| \neq 5$, using Lemma 1, $e(G[S]) \leq 2(n - k - 1) - 2$. Therefore, $e(G) \leq 2(n - k - 1) - 2 + k + k = 2n - 4$, and we are done. Let $|S| = 5$. Let the graph induced by S be a K_5^- . Since G is an $S_{2,2}$ -free plane graph, no vertex in $N(x)$ is adjacent to any vertex in S . This implies that $e(G[S]) = 9$ and $e(G[N(x)]) \leq \frac{k}{2}$. Hence, $e(G) \leq k + \frac{k}{2} + 9$. Since $n = k + 6$, we have $e(G) \leq (n - 6) + \frac{n-6}{2} + 9 = \frac{3n}{2} \leq 2n - 4$ for $n \geq 8$. \square

Proof of Theorem 1(i). The lower bound is attained by considering the graph $K_{2,n-2}$, which is $S_{2,2}$ -free and contains $2n - 4$ edges. From Lemma 2, we may assume that $\Delta(G) \leq 4$. Let k be the number of vertices in G whose degree is at most 3. Then $e(G) \leq \frac{4(n-k)+3k}{2} = 2n - \frac{k}{2}$. If $k \geq 8$, then we are done. We may assume that the number of degree 4 vertices in G is at least 9, since $n \geq 16$. We start by proving the following claims:

Claim 1. *There is no degree 4 vertex in G such that all its neighbors are of degree at most 3.*

Proof. Suppose not. Let x be a degree 4 vertex in G , such that $d(y) \leq 3$ for all $y \in N(x)$. It is easy to check that for each $y \in N(x)$, if y is adjacent to any vertex in $V(G) \setminus (\{x\} \cup N(x))$, then $d(y) = 2$. Otherwise, G contains an $S_{2,2}$. Therefore, using Lemma 1, $e(G) = e(G[S]) + 4 + 4 \leq 2(n - 5) - 2 + 8 = 2n - 4$. Assume that for each $y \in N(x)$, y is not adjacent to any vertex in $V(G) \setminus (\{x\} \cup N(x))$. Then $e(G[x \cup N(x)]) \leq 8$. Therefore, using Lemma 1, $e(G) = e(G[S]) + 8 \leq 2(n - 5) - 2 + 8 = 2n - 4$. \square

Claim 2. *The number of 4-4 edges in a matching in G is at least 3.*

Proof. Suppose not. Let the number of 4-4 edges in a matching in G be 2. Denote the 4-4 edges in the matching by uv and xy . Each of the edges is contained in 3 triangles. Let $N(u) \cap N(v) = \{u_1, u_2, u_3\}$ and $N(x) \cap N(y) = \{x_1, x_2, x_3\}$. Since G is an $S_{2,2}$ -free plane graph, no vertex in $\{u_1, u_2, u_3\}$ is adjacent to a vertex in $V(G) \setminus \{x, y, x_1, x_2, x_3\}$ and no vertex in $\{x_1, x_2, x_3\}$ is adjacent to a vertex in $V(G) \setminus \{u, v, u_1, u_2, u_3\}$. Moreover, at least two vertices in $\{x_1, x_2, x_3\}$ and in $\{u_1, u_2, u_3\}$ are of degree at most three. The number of degree 4 vertices in G is at least 9. Thus, there is a degree 4 vertex, say z , in $V(G) \setminus \{x, y, u, v, x_1, x_2, x_3, u_1, u_2, u_3\}$ such that $d(t) \leq 3$ for each $t \in N(z)$. This contradicts Claim 1. A similar argument can be given, if we assume that the number of 4-4 edges in a matching in G is 1. \square

From now on, suppose that the number of 4-4 edges in a matching in G is at least 3. We distinguish the following two cases:

Case 1: The number of 4-4 edges in a matching in G is at least 4. Denote the 4-4 edges in the matching in G by x_1x_2 , x_3x_4 , x_5x_6 and x_7x_8 , respectively. Recall that each edge is contained in 3 triangles. Moreover, at least two vertices in $N(x_i) \cap N(x_{i+1})$ are of degree at most 3, for each $i \in \{1, 3, 5, 7\}$. Thus, we have at least 8 vertices in G whose degree is at most 3. Hence, we are done in this case.

Case 2: The number of 4-4 edges in a matching in G is 3. Denote the 4-4 edges in the matching in G by x_1x_2 , x_3x_4 and x_5x_6 , respectively. At least two vertices in $N(x_i) \cap N(x_{i+1})$ are of degree at most 3, for $i \in \{1, 3, 5\}$. This implies that G contains at least 6 vertices whose degree is at most 3. Moreover, if a vertex in $N(x_i) \cap N(x_{i+1})$ is of degree at most 2, for some $i \in \{1, 3, 5\}$, then the remaining two vertices are of degree at most 3. Observe that in this case, $e(G) \leq \frac{4(n-7)+3 \cdot 6+2}{2} = 2n - 4$ and we are done.

So, we assume exactly two vertices in $N(x_i) \cap N(x_{i+1})$ are of degree 3, for each $i \in \{1, 3, 5\}$. In this case, the remaining vertex in $N(x_i) \cap N(x_{i+1})$ is of degree 4. Thus, the vertices $\{x_i, x_{i+1}\} \cup \left(N(x_i) \cap N(x_{i+1})\right)$, for each $i \in \{1, 3, 5\}$, induce a K_5^- , and it is a component in G . If $n = 16$, then there is an isolated vertex. In this case, $e(G) = 27 < 2n - 4$. If $n > 17$, it is easy to find 2 more vertices of degree at most 3 since the number of 4-4 edges in a matching in G is 3. Thus, there are at least 8 degree 3 vertices in G . This completes the proof of Theorem 1(i). \square

3 Planar Turán number of $S_{2,3}$

Proof of theorem 1(ii). Let G be an $S_{2,3}$ -free plane graph on n vertices. Since the graph $S_{2,3}$ contains 7 vertices, a maximal planar graph with $n \leq 6$ vertices does not contain an $S_{2,4}$. Thus, the lower bound is attained by considering disjoint copies of the maximum planar graphs on 6 vertices, i.e., M_1 or M_2 (see Figure 2). If the maximum degree in G is at most 4, then $e(G) \leq 2n$. Now we separate the rest of the proof into 2 cases:

Case 1: There exists a vertex $v \in V(G)$, such that $d(v) \geq 6$. It is easy to check that for each $u \in N(v)$, $d(u) \leq 2$, otherwise, we find a copy of $S_{2,3}$ in G . Delete a vertex $u \in N(v)$, then the number of deleted edges is at most 2. By the induction hypothesis, we get $e(G - \{u\}) \leq 2(n - 1)$. Hence, $e(G) = e(G - \{u\}) + d(u) \leq 2(n - 1) + 2 = 2n$.

Case 2: There exists a vertex $v \in V(G)$, such that $d(v) = 5$. It is easy to check that for each $u \in N(v)$, if u is adjacent to any vertex in $V(G) \setminus (\{v\} \cup N(v))$, then $d(u) = 2$. Otherwise, G contains an $S_{2,3}$. As in Case 1, we are done by induction. Assume that for each $u \in N(v)$, u is not

adjacent to any vertex in $V(G) \setminus (\{v\} \cup N(v))$. Then $e(G[v \cup N(v)]) \leq 3 \cdot 6 - 6 = 12$. By the induction hypothesis, $e(G - \{v \cup N(v)\}) \leq 2(n - 6)$. Therefore, $e(G) = e(G - \{v \cup N(v)\}) + e(G[v \cup N(v)]) \leq 2n$. \square

4 Planar Turán number of $S_{2,4}$

Let G be an $S_{2,4}$ -free plane graph on n vertices. Since $S_{2,4}$ contains 8 vertices, a maximal planar graph with $n \leq 7$ vertices, does not contain an $S_{2,4}$. Let $7|n$. Consider the plane graph consisting of $\frac{n}{7}$ disjoint copies of maximal planar graphs on 7 vertices. This graph does not contain an $S_{2,4}$. Hence, $\text{ex}_{\mathcal{P}}(n, S_{2,4}) \geq \frac{15}{7}n$.

Claim 3. *Let G be an $S_{2,4}$ on n ($1 \leq n \leq 18$) vertices. The number of edges in G is at most $\frac{8}{3}n$.*

Proof. Recall that, an n -vertex maximal planar graph contains $3n - 6$ edges. Since $3n - 6 \leq \frac{8}{3}n$ for $n \leq 18$, $e(G) \leq \frac{8}{3}n$ holds for all n , $1 \leq n \leq 18$. \square

Lemma 3. *If G contains a vertex of degree greater than or equal to 7, then $e(G) \leq \frac{8}{3}n$.*

Proof. Let $v \in V(G)$, such that $d(v) \geq 7$. It is easy to check that for each $u \in N(v)$, $d(u) \leq 2$, otherwise, we find a copy of $S_{2,4}$ in G . Delete a vertex $u \in N(v)$, then the number of deleted edges is at most 2. By the induction hypothesis, we get $e(G - \{u\}) \leq \frac{8}{3}(n - 1)$. Hence, $e(G) = e(G - \{u\}) + d(u) \leq \frac{8}{3}(n - 1) + 2 \leq \frac{8}{3}n$. \square

Lemma 4. *If G contains a vertex of degree 6, then $e(G) \leq \frac{8}{3}n$.*

Proof. Let $v \in V(G)$, such that $d(v) = 6$ and let $H = N(v) \cup \{v\}$. It is easy to check that for each $u \in N(v)$, if u is adjacent to any vertex in $V(G) \setminus H$, then $d(u) = 2$. Otherwise, G contains an $S_{2,4}$. We are done by induction in this case. Assume that for each $u \in N(v)$, u is not adjacent to any vertex in $V(G) \setminus H$. Then $e(G[H]) \leq 3 \cdot 7 - 6 = 15$. Hence, $e(G) = e(G - H) + e(G[H]) \leq \frac{8}{3}(n - 7) + 15 \leq \frac{8}{3}n$. We are done by induction. \square

Proof of Theorem 1(iii). If G contains a vertex of degree at least 6, we are done by Lemmas 3 and 4. Hence, we can assume that $\Delta(G) \leq 5$.

Claim 4. *If G contains a 5 - 5 edge, then $e(G) \leq \frac{8}{3}n$.*

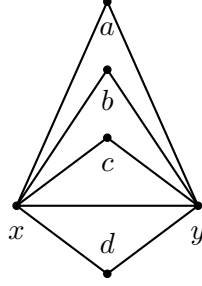


Figure 3: The graph G has a $5 - 5$ edge xy , with 4 triangles sitting on the edge xy .

Proof. Let $xy \in E(G)$ be a $5 - 5$ edge. There are at least 3 triangles sitting on the edge xy , otherwise G contains an $S_{2,4}$. We subdivide the cases based on the number of triangles sitting on the edge xy .

1. **There are 4 triangles sitting on the edge xy .** Let a, b, c and d be the vertices in G which are adjacent to both x and y (see Figure 3). Let $S_1 = \{a, b, c, d\}$ and $H = \{x, y, a, b, c, d\}$. Delete the vertices in H . The vertices in S_1 can have at most one neighbor in $V(G) \setminus H$ each and can form a path of length 3 in S_1 . Hence, the number of edges be deleted is at most $9 + 4 + 3 = 16$. Using the induction hypothesis, $e(G) \leq e(G - H) + 16 \leq \frac{8}{3}(n - 6) + 16 = \frac{8n}{3}$.
2. **There are 3 triangles sitting on the edge xy .** Let a, b and c be the vertices in G which are adjacent to both x and y . Let d be the vertex adjacent to x but not adjacent to y , and e be the vertex adjacent to y but not adjacent to x . Let $S_1 = \{a, b, c\}$ and $H = \{x, y, d, e\} \cup S_1$. Delete the vertices in H . The vertices d and e can have at most one neighbor in $V(G) \setminus H$ each. We distinguish the cases as follows:
 - (a) **The vertices d and e have no neighbors in S_1 ,** see Figure 4(i). The vertices in S_1 can have at most one neighbor in $V(G) \setminus H$ each and can form a path of length 2 in S_1 . If the vertices d and e are adjacent, they cannot have a neighbor in $V(G) \setminus H$. Otherwise, we have an $S_{2,4}$ with dx (or ey) as the backbone. Thus, the number of edges deleted is at most $9 + 2 + 3 + 2 = 16$.
 - (b) **One of the vertices d or e has one neighbor in S_1 , and the other has none.** Without loss of generality, suppose a is the neighbor of d , see Figure 4(ii). Note that a cannot have a neighbor in $V(G) \setminus H$. Otherwise, we have an $S_{2,4}$ with ay as the backbone. If the vertices d and e are adjacent, they cannot have a neighbor in $V(G) \setminus H$. Similarly,

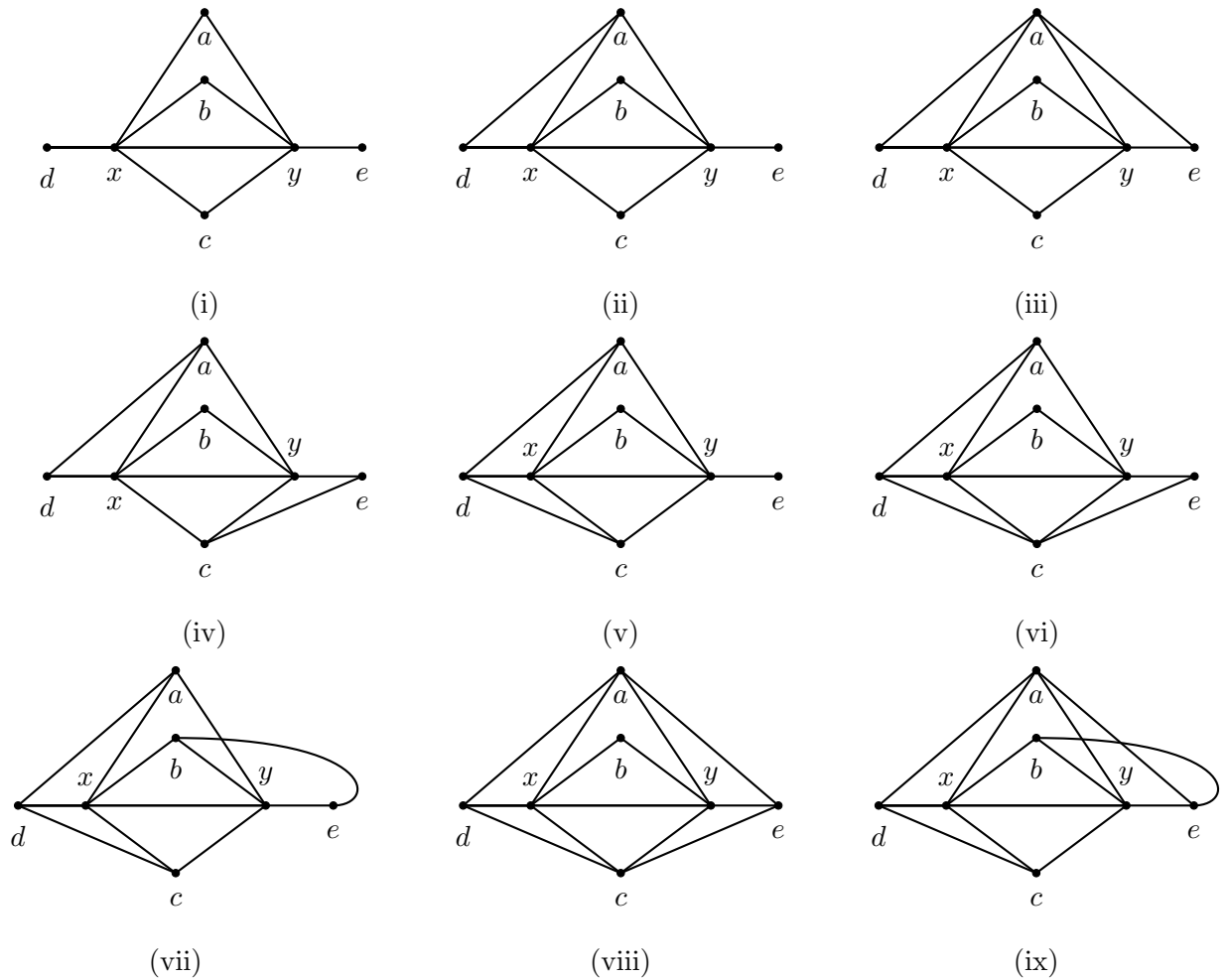


Figure 4: The graph G has a $5 - 5$ edge xy , with 3 triangles sitting on the edge xy .

- (i) The vertices d and e have no neighbors in S_1 .
- (ii) The vertex d has one neighbor in S_1 , and e has none.
- (iii) The vertices d and e have one common neighbor in S_1 .
- (iv) The vertices d and e have one distinct neighbor in S_1 .
- (v) The vertex d has two neighbors in S_1 , while e has none.
- (vi) The vertex d is the neighbor of a and c , and while e is the neighbor of c .
- (vii) The vertex d is the neighbor of a and c , while e is the neighbor of b .
- (viii) The vertices d and e are neighbors of a and c both.
- (ix) The vertex d is the neighbor of a and c , while e is the neighbor of a and b .

as before, the vertices b and c can have at most one neighbor in $V(G)\setminus H$ each and the vertices $\{a, b, c\}$ can form a path of length 2 in S_1 . Thus, the number of edges deleted is at most $10 + 2 + 2 + 2 = 16$.

- (c) **The vertices d and e have one neighbor in S_1 .** There are two possibilities. In the first case, without loss of generality, suppose a is the common neighbor of d and e , see Figure 4(iii). Similarly, as before, a cannot have a neighbor in $V(G)\setminus H$. If the vertices d and e are adjacent, they cannot have a neighbor in $V(G)\setminus H$. The vertices b and c can have at most one neighbor in $V(G)\setminus H$ each, and the vertices $\{a, b, c\}$ can form a path of length 2 in S_1 . Thus, the number of edges deleted is at most $11 + 2 + 2 + 2 = 17$.

Without loss of generality, suppose a is the neighbor of d while c is the neighbor of e , see Figure 4(iv). Similarly, as before, the vertices a and c cannot have a neighbor in $V(G)\setminus H$. The vertex b can have at most one neighbor in $V(G)\setminus H$ and the vertices $\{a, b, c\}$ can form a path of length 2 in S_1 . Thus, the number of edges deleted is at most $11 + 2 + 1 + 2 = 16$. (If the vertices d and e are adjacent, there can only be a path of length 1 inside S_1 . Again, this precision is unnecessary. We skip this in the following cases also.)

- (d) **One of the vertices d or e has two neighbors in S_1 , while the other has none.** Without loss of generality, suppose d is the neighbor of a and c , see Figure 4(v). Similarly, as before, the vertices a and c cannot have a neighbor in $V(G)\setminus H$. The vertex b can have at most one neighbor in $V(G)\setminus H$ and the vertices $\{a, b, c\}$ can form a path of length 2 in S_1 . If the vertices d and e are adjacent, they cannot have a neighbor in $V(G)\setminus H$. Thus, the number of edges deleted is at most $11 + 2 + 1 + 2 = 16$.

- (e) **One of the vertices d or e has two neighbors in S_1 , while the other has one neighbor.** There are two possibilities. In the first case, without loss of generality, suppose d is the neighbor of a and c , and e is the neighbor of c (see Figure 4(vi)). Similarly, as before, the vertices a and c cannot have a neighbor in $V(G)\setminus H$. The vertex b can have at most one neighbor in $V(G)\setminus H$ and the vertices $\{a, b, c\}$ can form a path of length 2 in S_1 . If the vertices d and e are adjacent, they cannot have a neighbor in $V(G)\setminus H$. Thus, the number of edges deleted is at most $12 + 2 + 1 + 2 = 17$.

In the other case, without loss of generality, assume that d is the neighbor of a and c , and e is the neighbor of b (see Figure 4(vii)). The vertices a, b and c cannot have a

neighbor in $V(G)\setminus H$, but they can form a path of length 2 in S_1 . Thus, the number of edges deleted is at most $12 + 2 + 2 = 16$.

- (f) **Both the vertices d and e have two neighbors in S_1 .** There are two possibilities. In the first case, without loss of generality, suppose d and e are the neighbors of a and c both (see Figure 4(viii)). Similarly, as before, the vertices a and c cannot have a neighbor in $V(G)\setminus H$. The vertex b can have one neighbor in $V(G)\setminus H$. The vertices $\{a, b, c\}$ can form a path of length 2 in S_1 . If the vertices d and e are adjacent, they cannot have a neighbor in $V(G)\setminus H$. Thus, the number of edges deleted is at most $13 + 1 + 2 + 2 = 18$. On the other hand, without loss of generality, assume d is the neighbor of a and c , while e is the neighbor of a and b (see Figure 4(ix)). The vertices a, b and c cannot have a neighbor in $V(G)\setminus H$, but they can form a path of length 2 in S_1 . Thus, the number of edges deleted is at most $13 + 2 + 2 = 17$.

Using the induction hypothesis,

$$e(G) \leq e(G - H) + 18 \leq \frac{8}{3}(n - 7) + 18 = \frac{8}{3}n.$$

This completes the proof. □

Take $x, y \in V(G)$. By the previous claims, if $d(x) + d(y) \geq 10$, we are done by induction. Assume that $d(x) + d(y) \leq 9$. Summing it over all the edge pairs in G , we have $9e \geq \sum_{xy \in E(G)} (d(x) + d(y)) = \sum_{x \in V(G)} (d(x))^2 \geq n\bar{d}^2 = n(\frac{2e}{n})^2$, where \bar{d} is the average degree in G . This gives us $e \leq \frac{9}{4}n \leq \frac{8}{3}n$ for $n \geq 1$. □

5 Planar Turán number of $S_{2,5}$

Let G be an $S_{2,5}$ -free plane graph on n vertices. Let $12|n$. Consider the plane graph consisting of $\frac{n}{12}$ disjoint copies of 5-regular maximal planar graphs with 12 vertices, see Figure 5. This graph does not contain an $S_{2,5}$, since it is a 5-regular graph. Hence, $\text{exp}_{\mathcal{P}}(n, S_{2,4}) \geq \frac{5}{2}n$.

Claim 5. *Let G be an $S_{2,5}$ on n ($1 \leq n \leq 42$) vertices. The number of edges in G is at most $\frac{20}{7}n$.*

Proof. Recall that, an n -vertex maximal planar graph contains $3n - 6$ edges. Since $3n - 6 \leq \frac{20}{7}n$ for $n \leq 42$, we get $e(G) \leq \frac{20}{7}n$ holds for all n , when $1 \leq n \leq 42$. □

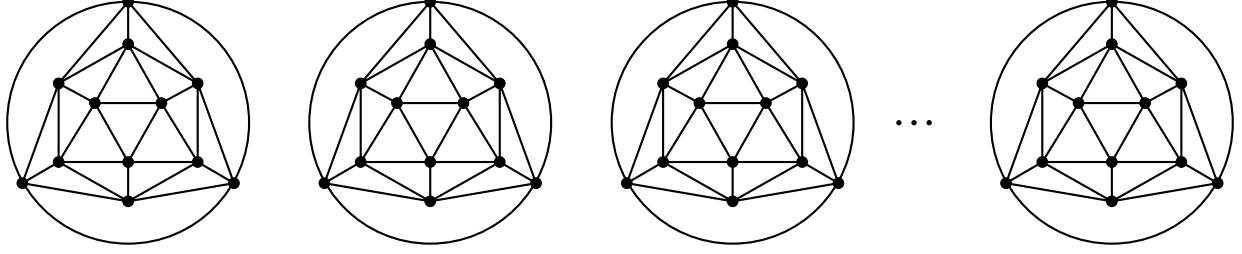


Figure 5: $(n/12)$ -disjoint copies of 5-regular maximal planar graphs with 12 vertices.

Lemma 5. *If G contains a vertex v of degree greater than or equal to 8, then $e(G) \leq \frac{20}{7}n$.*

Proof. Let $v \in V(G)$, such that $d(v) \geq 8$. It is easy to check that for each $u \in N(v)$, $d(u) \leq 2$. Otherwise, we find a copy of $S_{2,5}$ in G . Delete a vertex $u \in N(v)$, then the number of deleted edges is at most 2. By the induction hypothesis, we get $e(G - \{u\}) \leq \frac{20}{7}(n - 1)$. Hence, $e(G) = e(G - \{u\}) + d(u) \leq \frac{20}{7}(n - 1) + 2 \leq \frac{20}{7}n$. \square

Lemma 6. *If G contains a vertex v of degree equal to 7, then $e(G) \leq \frac{20}{7}n$.*

Proof. Let $v \in V(G)$, such that $d(v) = 7$ and let $H = N(v) \cup \{v\}$. It is easy to check that for each $u \in N(v)$, if u is adjacent to any vertex in $V(G) \setminus H$, then $d(u) = 2$. Otherwise, G contains an $S_{2,5}$. We are done by induction in this case. In the other case, assume that for each $u \in N(v)$, u is not adjacent to any vertex in $V(G) \setminus H$. Then $e(G[H]) \leq 3 \cdot 8 - 6 = 18$. Hence, $e(G) = e(G - H) + e(G[H]) \leq \frac{20}{7}(n - 8) + 18 = \frac{20}{7}n$. We are done by induction. \square

Proof of Theorem 1(iv). If G contains a vertex of degree at least 7, we are done by Lemmas 5 and 6. Hence, we can assume $\Delta(G) \leq 6$.

Claim 6. *If G contains a 6-6 edge, then $e(G) \leq \frac{20}{7}n$.*

Proof. Let $xy \in E(G)$ be a 6-6 edge. There are at least 4 triangles sitting on the edge xy , otherwise G contains an $S_{2,5}$. We subdivide the cases based on the number of triangles sitting on the edge xy .

1. **There are 5 triangles sitting on the edge xy .** Let a, b, c, d and e be the vertices in G which are adjacent to both x and y (see Figure 6). Let $S_1 = \{a, b, c, d, e\}$ and $H = \{x, y, a, b, c, d, e\}$. Delete the vertices in H . The vertices in S_1 can have at most one neighbor in $V(G) \setminus H$ each and can form a path of length 4 in S_1 . Hence, the number of edges deleted is at most $11 + 5 + 4 = 20$. Using the induction hypothesis, $e(G) \leq e(G - H) + 20 \leq \frac{20}{7}(n - 7) + 20 = \frac{20}{7}n$.

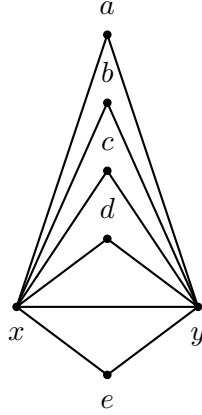
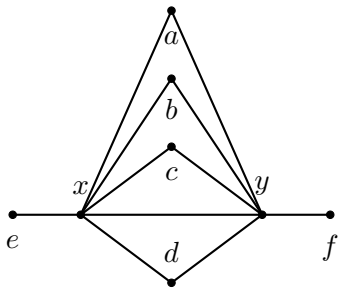


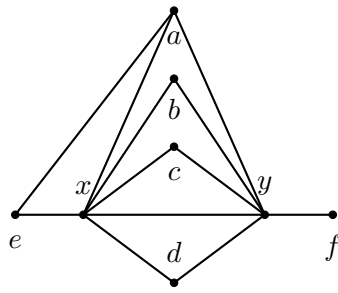
Figure 6: The graph G has a $6-6$ edge xy , with 5 triangles sitting on the edge xy .

2. **There are 4 triangles sitting on the edge xy .** Let a, b, c and d be the vertices in G which are adjacent to both x and y . Let e be the vertex adjacent to x but not adjacent to y , and f be the vertex adjacent to y but not adjacent to x . Let $S_1 = \{a, b, c, d\}$ and $H = \{x, y\} \cup S_1 \cup \{e, f\}$. Delete the vertices in H . The vertices e and f can have at most one neighbor in $V(G) \setminus H$ each. We distinguish the cases based on the neighbors of e and f as follows:

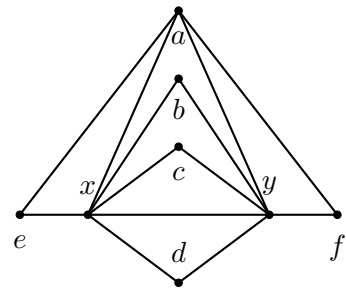
- (a) **The vertices e and f have no neighbors in S_1 ,** see Figure 7(i). The vertices in S_1 can have at most one neighbor in $V(G) \setminus H$ each and can form a path of length 3 in S_1 . If the vertices e and f are adjacent, then they cannot have a neighbor in $V(G) \setminus H$. Otherwise, we have an $S_{2,5}$ with ex (or fy) as the backbone. Thus, the number of edges deleted is at most $11 + 3 + 4 + 2 = 20$.
- (b) **One of the vertices e or f has one neighbor in S_1 , and the other has none.** Without loss of generality, suppose a and e are adjacent (see Figure 7(ii)), then a cannot have a neighbor in $V(G) \setminus H$. Otherwise, we have an $S_{2,5}$ with ay as the backbone. If the vertices e and f are adjacent, then they cannot have a neighbor in $V(G) \setminus H$. Similarly, as before, the vertices b, c and d can have at most one neighbor in $V(G) \setminus H$ each and the vertices $\{a, b, c, d\}$ can form a path of length 3 in S_1 . Thus, the number of edges deleted is at most $12 + 3 + 3 + 2 = 20$.
- (c) **The vertices e and f have one neighbor in S_1 .** There are two possibilities. In the first case, without loss of generality, suppose a is the common neighbor of e and f , see



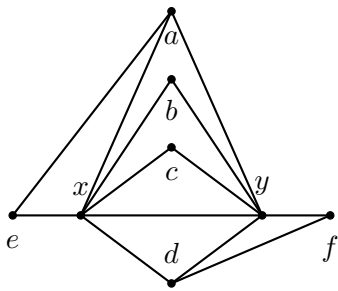
(i)



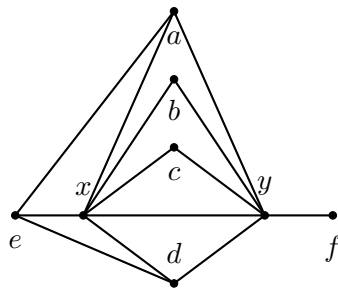
(ii)



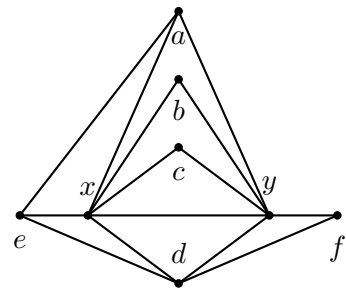
(iii)



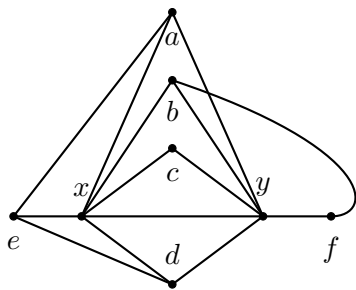
(iv)



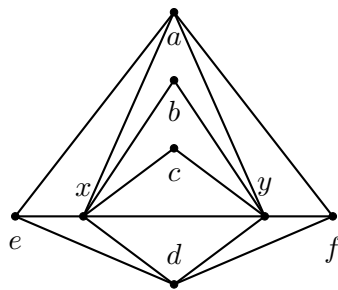
(v)



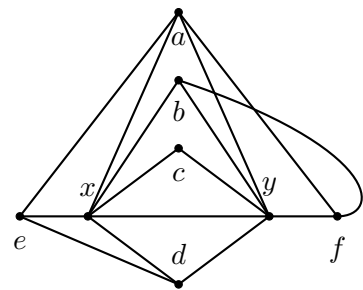
(vi)



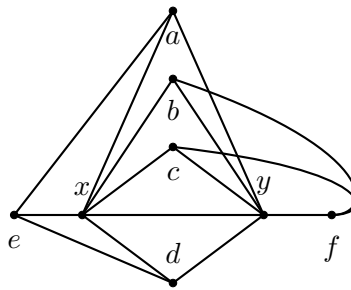
(vii)



(viii)



(ix)



(x)

Figure 7: The graph G has a 6 – 6 edge xy , with 4 triangles sitting on the edge xy .

- (i) the vertices e and f have no neighbors in S_1 .
- (ii) The vertex e has one neighbor in S_1 and f has none.
- (iii) The vertices e and f have one common neighbor in S_1 .
- (iv) The vertices e and f have one distinct neighbor in S_1 .
- (v) The vertex e has two neighbors in S_1 and f has none.
- (vi) The vertex e is the neighbor of a and d , and f is the neighbor of d .
- (vii) The vertex e is the neighbor of a and d , and f is the neighbor of b .
- (viii) The vertices e and f are neighbors of both a and d .
- (ix) The vertex e is the neighbor of a and d , while f is the neighbor of a and b .
- (x) The vertex e is the neighbor of a and d , while f is the neighbor of b and c .

Figure 7(iii). Similarly, as before, a cannot have a neighbor in $V(G)\setminus H$. If the vertices e and f are adjacent, they cannot have a neighbor in $V(G)\setminus H$. The vertices b, c and d can have at most one neighbor in $V(G)\setminus H$ each, and the vertices $\{a, b, c, d\}$ can form a path of length 3 in S_1 . Thus, the number of edges deleted is at most $13 + 3 + 3 + 2 = 21$. Without loss of generality, suppose a is the neighbor of e while d is the neighbor of f , see Figure 7(iv). Similarly, as before, the vertices a and d cannot have a neighbor in $V(G)\setminus H$. The vertex b and c can have at most one neighbor in $V(G)\setminus H$ each, and the vertices $\{a, b, c, d\}$ can form a path of length 3 in S_1 . If the vertices e and f are adjacent, then they cannot have a neighbor in $V(G)\setminus H$. Thus, the number of edges deleted is at most $13 + 3 + 2 + 2 = 20$. (In fact, it can be shown that if the vertices w and f are adjacent, there can only be a 2-path inside S_1 . However, this precision is unnecessary. We skip this in the following cases also.)

- (d) **One of the vertices e or f has two neighbors in S_1 , while the other has none.** Without loss of generality, suppose e is the neighbor of a and d , see Figure 7(v). Similarly, as before, the vertices a and d cannot have a neighbor in $V(G)\setminus H$. The vertices b and c can have at most one neighbor in $V(G)\setminus H$ each, and the vertices $\{a, b, c, d\}$ can form a path of length 3 in S_1 . If the vertices e and f are adjacent, then they cannot have a

neighbor in $V(G)\setminus H$. Thus, the number of edges deleted is at most $13 + 3 + 2 + 2 = 20$.

- (e) **One of the vertices e or f has two neighbors in S_1 , while the other has one neighbor.** There are two possibilities. In the first case, without loss of generality, suppose e is the neighbor of a and d , and f is the neighbor of d (see Figure 7(vi)). Similarly, as before, the vertices a and d cannot have a neighbor in $V(G)\setminus H$. The vertices b and c can have at most one neighbor in $V(G)\setminus H$ each, and the vertices $\{a, b, c, d\}$ can form a path of length 3 in S_1 . If the vertices e and f are adjacent, then they cannot have a neighbor in $V(G)\setminus H$. Thus, the number of edges deleted is at most $14 + 3 + 2 + 2 = 21$. In the other case, without loss of generality, assume that e is the neighbor of a and d , and f is the neighbor of b (see Figure 7(vii)). The vertices a, b and d cannot have a neighbor in $V(G)\setminus H$, but they along with c can form a path of length 3 in S_1 . The vertex c can have at most one neighbor in $V(G)\setminus H$. Thus, the number of edges deleted is at most $14 + 3 + 1 + 2 = 20$.

- (f) **Both the vertices e and f have two neighbors in S_1 .** There are three possibilities. In the first case, without loss of generality, suppose e and f are neighbors of both a and d , see Figure 7(viii). Similarly, as before, the vertices a and d cannot have a neighbor in $V(G)\setminus H$. The vertices b and c can have at most one neighbor in $V(G)\setminus H$ each. The vertices $\{a, b, c, d\}$ can form a path of length 3 in S_1 . If the vertices e and f are adjacent, then they cannot have a neighbor in $V(G)\setminus H$. Thus, the number of edges deleted is at most $15 + 3 + 2 + 2 = 22$.

On the other hand, without loss of generality, assume e is the neighbor of both a and d , while f is the neighbor of a and b (see Figure 7(ix)). The vertices a, b and d cannot have a neighbor in $V(G)\setminus H$, but they along with c can form a path of length 3 in S_1 . The vertex c can have at most one neighbor in $V(G)\setminus H$ each. Thus, the number of edges deleted is at most $15 + 3 + 1 + 2 = 21$.

In the last case, without loss of generality, assume e is the neighbor of a and d both, while f is the neighbor of b and c (see Figure 7(x)). The vertices a, b, c and d cannot have a neighbor in $V(G)\setminus H$, but they can form a path of length 3 in S_1 . Thus, the number of edges deleted is at most $15 + 3 + 2 = 20$.

Using the induction hypothesis,

$$e(G) \leq e(G - H) + 22 \leq \frac{20}{7}(n - 8) + 22 = \frac{20}{7}n - \frac{6}{7}.$$

This completes the proof of the claim. \square

Consider $x, y \in V(G)$. By the previous claims, if $d(x) + d(y) \geq 12$, we are done by induction. Assume that $d(x) + d(y) \leq 11$. Summing it over all the edge pairs in G , we have $11e(G) \geq \sum_{xy \in E(G)} (d(x) + d(y)) = \sum_{x \in V(G)} (d(x))^2 \geq n\bar{d}^2 = n(\frac{2e(G)}{n})^2$, where \bar{d} is the average degree in G . This gives us $e(G) \leq \frac{11}{4}n \leq \frac{20}{7}n$, for $n \geq 1$. \square

6 Planar Turán number of $S_{3,3}$

We show that for infinitely many integer values of n , we can construct an n -vertex $S_{3,3}$ -free plane graph G_n with $\frac{5}{2}n - 5$ edges. This is to verify that the bound we have is best up to the linear term. Consider a plane graph G_n which is obtained by joining every vertex of the maximal matching on $n - 2$ vertices with two vertices. Constructions of G_n when n is even or odd is shown in Figure 8. Each edge in G_n has a degree 3 end vertex. Thus, G_n is an $S_{3,3}$ -free planar graph. Moreover, $e(G_n) = \lfloor \frac{5}{2}n \rfloor - 5$.

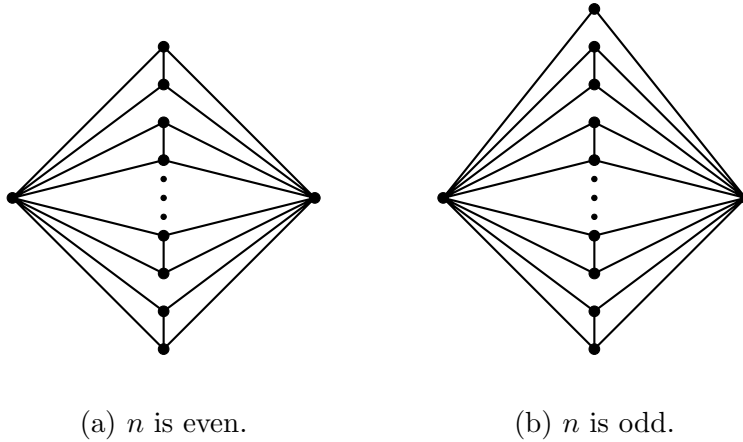


Figure 8: Extremal Constructions for the lower bound of planar Turán number of $S_{3,3}$.

Claim 7. Let G be an $S_{3,3}$ on n ($1 \leq n \leq 8$) vertices. The number of edges in G is at most $\frac{5}{2}n - 2$.

Proof. Recall that, an n -vertex maximal planar graph contains $3n - 6$ edges. Since $3n - 6 \leq \frac{5}{2}n - 2$ for $n \leq 8$, $e(G) \leq \frac{5}{2}n - 2$ holds for all n , $1 \leq n \leq 8$. \square

Let u be a vertex in G with degree at most 2. By the induction hypothesis, we get $e(G - \{u\}) \leq \frac{20}{7}(n - 1)$. Hence, $e(G) = e(G - \{u\}) + d(u) \leq \frac{5}{2}(n - 1) - 2 + 2 < \frac{5}{2}n - 2$. Similarly, if we have a 3-3 edge in G , we can finish the proof by induction. From now on, we may assume that G contains no vertex of degree at most 2 and no 3-3 edge. The following claims deal with the different cases of degree pairs in G :

Claim 8. *No vertex in G with degree at least 7 is adjacent to a vertex of degree at least 4.*

Proof. Suppose not. Let xy be an edge in G such that $d(x) \geq 7$ and $d(y) \geq 4$. Obviously, there are three vertices in $V(G) \setminus \{x\}$, say y_1, y_2 and y_3 , which are adjacent to y . Since $|N(x) \setminus \{y\}| \geq 6$, there are three vertices x_1, x_2 and x_3 , not in $\{y, y_1, y_2, y_3\}$ which are adjacent to x . This implies that we got an $S_{3,3}$ in G with backbone xy and leaf-sets $\{x_1, x_2, x_3\}$ and $\{y_1, y_2, y_3\}$, respectively, which is a contradiction. This completes the proof of Claim 8. \square

Claim 9. *If there is a 6-6 edge in G , then $e(G) \leq \frac{5}{2}n - 2$.*

Proof. Let $xy \in E(G)$ be a 6-6 edge. Since G is an $S_{3,3}$ -free plane graph, xy must be contained in 5 triangles, see Figure 9. Let a, b, c, d and e be the vertices in G which are adjacent to both x

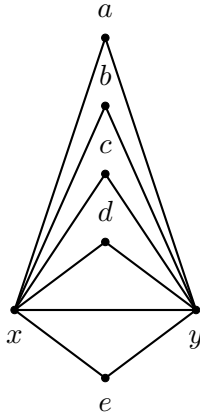


Figure 9: The graph G has a 6 – 6 edge xy .

and y . Let $S_1 = \{a, b, c, d, e\}$ and $H = \{x, y, a, b, c, d, e\}$. Delete the vertices in H . Suppose a has two neighbors in $V(G) \setminus H$. We immediately get an $S_{3,3}$ with xa or ya as the backbone. Thus, any vertex in the set S_1 can have at most 1 neighbor in $V(G) \setminus H$. If there are no edges between the vertices in S_1 , we deleted at most $11 + 5 = 16$ edges. Assume that there is an edge between the vertices in S_1 , say ab . If a (or b) has a neighbor in $V(G) \setminus H$, xa (or xb) is the backbone of an $S_{3,3}$.

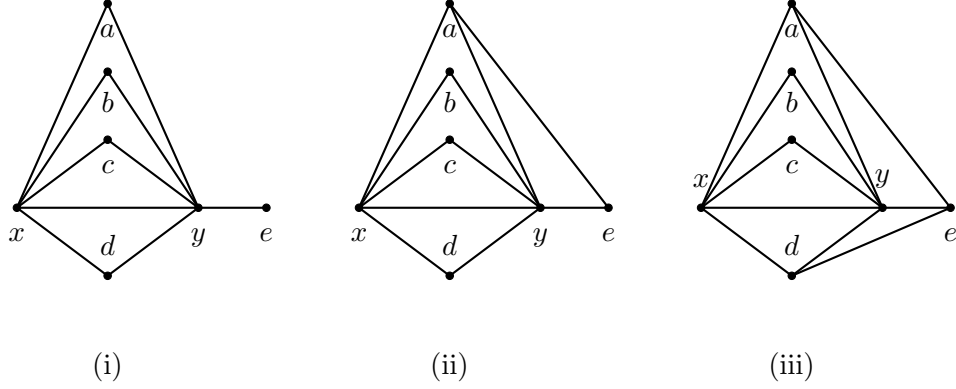


Figure 10: The graph G has a 5-6 edge xy .

- (i) The vertex e has no neighbors in S_1 .
- (ii) The vertex e has one neighbor in S_1 .
- (iii) The vertex e has two neighbors in S_1 .

Similarly, for the other edges in S_1 , both vertices cannot have a neighbor in $V(G)\setminus H$. Thus, if there is an edge joining any two vertices in S_1 , the number of edges deleted is at most $11 + 4 = 15$. Using the induction hypothesis,

$$e(G) \leq e(G - H) + 16 \leq \frac{5}{2}(n - 7) - 2 + 16 = \frac{5}{2}n - 3.5 < \frac{5}{2}n - 2.$$

This completes the proof. □

Claim 10. *If there is a 5-6 edge in G , then $e(G) \leq \frac{5}{2}n - 2$.*

Proof. Let xy be a 5-6 edge in G . Since G is an $S_{3,3}$ -free plane graph, xy must be contained in 4 triangles, see Figure 10. Let a, b, c and d be the vertices in G which are adjacent to both x and y . Let e be the vertex adjacent to y but not adjacent to x . Let $S_1 = \{a, b, c, d\}$ and $H = \{x, y, a, b, c, d, e\}$. Delete the vertices in H . Any vertex in S_1 can have at most 1 neighbor in $V(G)\setminus H$. If there is an edge joining any two vertices in S_1 , say ab . Similarly, as before, the vertices a and b cannot have a neighbor in $V(G)\setminus H$. We further distinguish the cases based on the number of edges from e as follows:

1. **The vertex e has no neighbors in S_1** , see Figure 10(i). Clearly, the vertex e can have at most 2 neighbors in $V(G)\setminus H$. If there are no edges between the vertices in S_1 , we deleted at

most $10 + 2 + 4 = 16$ edges. If there is an edge joining any two vertices in S_1 , the number of edges deleted is at most $10 + 2 + 3 = 15$.

2. **The vertex e has one neighbor in S_1 .** Without loss of generality, suppose a is the neighbor of e , see Figure 10(ii). The vertex e can have at most one neighbor in $V(G)\setminus H$. If the vertex a has a neighbor in $V(G)\setminus H$, we have an $S_{3,3}$ with xa as the backbone. If there are no edges between the vertices in S_1 , we have deleted at most $11 + 3 + 1 = 15$ edges. If there is an edge joining any two vertices in S_1 , the number of edges deleted is at most $11 + 3 + 1 = 15$.
3. **The vertex e has two neighbors in S_1 .** Without loss of generality, suppose e is the neighbor of a and d , see Figure 10(iii). The vertex e cannot have a neighbor in $V(G)\setminus H$, otherwise we have an $S_{3,3}$ with ye as the backbone. If either a or d has a neighbor in $V(G)\setminus H$, we have an $S_{3,3}$ with xa or xd as the backbone, respectively. Suppose there is no edge between the vertices in S_1 . The total number of edges deleted is at most $12 + 2 = 14$. Suppose a and b are adjacent, then b cannot have a neighbor in $V(G)\setminus H$. Similarly, for the other edges in S_1 except ad , which is still possible without any extra restrictions. If there is an edge joining any two vertices in S_1 , the total number of edges deleted is at most $12 + 3 = 15$.

Thus, by induction

$$e(G) = e(G - H) + 16 \leq \frac{5}{2}(n - 7) - 2 + 16 < \frac{5}{2}n - 2,$$

and we are done. □

Claim 11. *If there is a 4-6 edge in G , then $e(G) \leq \frac{5}{2}n - 2$.*

Proof. Let xy be a 4-6 edge in G . Since G is an $S_{3,3}$ -free plane graph, xy must be contained in 3 triangles, see Figure 11. Let a, b and c be the vertices in G which are adjacent to both x and y . Let d and e be the vertices adjacent to y but not to x . Let $S_1 = \{a, b, c\}$ and $H = \{x, y, a, b, c, d, e\}$. Delete the vertices in H . The vertices d and e can have at most two neighbors in $V(G)\setminus H$ each. The vertices in S_1 can have at most one neighbor in $V(G)\setminus H$ each. If there is an edge joining any two vertices in S_1 , say ab . Similarly, as before, the vertices a and b cannot have a neighbor in $V(G)\setminus H$. We distinguish the cases based on the neighbors of d and e as follows:

1. **The vertices d and e have no neighbors in S_1 ,** see Figure 11(i). If the vertices d and e are adjacent, they can have at most one neighbor in $V(G)\setminus H$ each. Otherwise, we have an

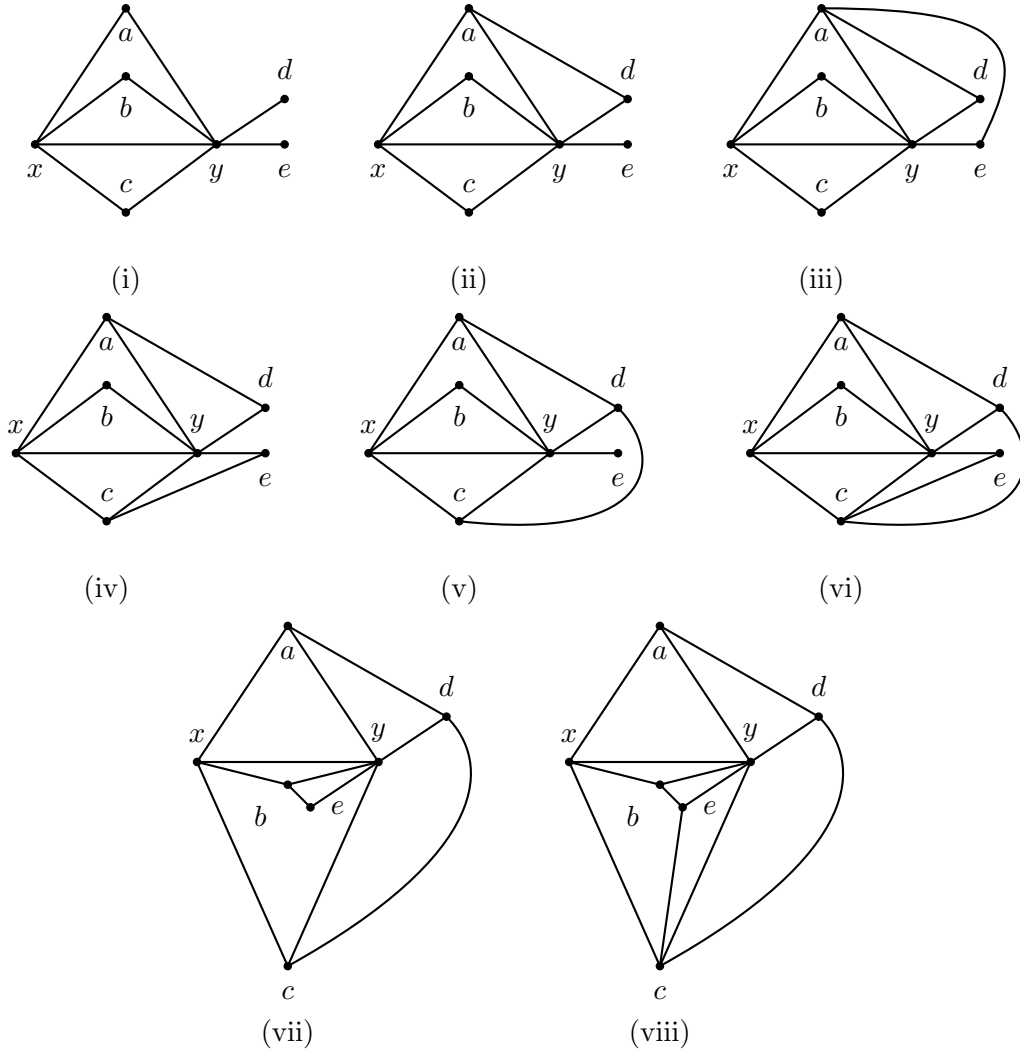


Figure 11: The graph G has a 4 – 6 edge xy .

- (i) The vertices d and e have no neighbors in S_1 .
- (ii) The vertex d has one neighbor in S_1 , and f has none.
- (iii) Both the vertices d and e have one common neighbor in S_1 .
- (iv) The vertices d and e have one distinct neighbor in S_1 .
- (v) The vertex d has two neighbors in S_1 , while e has none.
- (vi) The vertex d is the neighbor of a and c , while e is the neighbor of c .
- (vii) The vertex d is the neighbor of a and c , while e is the neighbor of b .
- (viii) Both the vertices d and e have two neighbors in S_1 .

$S_{3,3}$ with dy (or ey) as the backbone. If there are no edges between the vertices in S_1 , the number of edges deleted is at most $9 + 3 + 4 = 16$. If there is an edge joining any two vertices in S_1 , the number of edges deleted is at most $9 + 2 + 4 = 15$.

2. **One of the vertices d or e has one neighbor in S_1 , while the other has none.** Without loss of generality, suppose the vertices a and d are adjacent (see Figure 11(ii)). The vertex a cannot have a neighbor in $V(G)\setminus H$, and d can have at most one neighbor in $V(G)\setminus H$. If the vertices d and e are adjacent, then d cannot have a neighbor in $V(G)\setminus H$ and e can have at most one neighbor in $V(G)\setminus H$. Otherwise, we have an $S_{3,3}$ with dy (or ey) as the backbone. If there are no edges between the vertices in S_1 , the number of edges deleted is at most $10 + 2 + 3 = 15$. If there is an edge joining any two vertices in S_1 , the number of edges deleted is at most $10 + 2 + 3 = 15$.
3. **Both the vertices d and e have one neighbor in S_1 .** There are two possibilities. In the first case, without loss of generality, suppose a is the common neighbor of d and e (see Figure 11(iii)). Similarly, as before, a cannot have a neighbor in $V(G)\setminus H$, and d and e can have at most one neighbor in $V(G)\setminus H$ each. If the vertices d and e are adjacent, they cannot have a neighbor in $V(G)\setminus H$. If there are no edges between the vertices in S_1 , the number of edges deleted is at most $11 + 2 + 2 = 15$. If there is an edge joining any two vertices in S_1 , the number of edges deleted is at most $11 + 2 + 2 = 15$.

Without loss of generality, suppose a is the neighbor of d while c is the neighbor of e (see Figure 11(iv)). Similarly, as before, the vertices a and c cannot have a neighbor in $V(G)\setminus H$, and d and e can have at most one neighbor in $V(G)\setminus H$ each. If the vertices d and e are adjacent, they cannot have a neighbor in $V(G)\setminus H$. If there are no edges between the vertices in S_1 , the number of edges deleted is at most $11 + 1 + 2 = 14$. If a and b are adjacent, then b does not have a neighbor in $V(G)\setminus H$. Similarly, for the edge bc . The vertices a and c can be adjacent without any constraints. Thus, if there is an edge joining any two vertices in S_1 , the number of edges deleted is at most $11 + 2 + 2 = 15$.

4. **One of the vertices d or e has two neighbors in S_1 , while the other has none.** Without loss of generality, suppose d is the neighbor of a and c , while e has no neighbors in S_1 (see Figure 11(v)). The vertex d cannot have a neighbor in $V(G)\setminus H$. Similarly, as before, the vertices a and c cannot have a neighbor in $V(G)\setminus H$, whereas e can have at most

two neighbors in $V(G)\setminus H$. If d and e are adjacent, then e can have at most one neighbor in $V(G)\setminus H$. If there are no edges between the vertices in S_1 , the number of edges deleted is at most $11 + 1 + 2 = 14$. If a and b are adjacent, then b does not have a neighbor in $V(G)\setminus H$. Similarly, for the edge bc . The vertices a and c can be adjacent without any constraints. Thus, if there is an edge joining any two vertices in S_1 , the number of edges deleted is at most $11 + 2 + 2 = 15$.

5. **One of the vertices d or e has two neighbors in S_1 , while the other has one.** There are two possibilities. In the first case, without loss of generality, suppose d is the neighbor of a and c , while e is the neighbor of c (see Figure 11(vi)). Similarly, as before, the vertices a, c and d cannot have a neighbor in $V(G)\setminus H$, whereas e can have at most one neighbor in $V(G)\setminus H$. If d and e are adjacent, then e cannot have a neighbor in $V(G)\setminus H$. If there are no edges between the vertices in S_1 , the number of edges deleted is at most $12 + 1 + 1 = 14$. In the other case, the vertices a and c can be adjacent without any constraints. Thus, if there is an edge joining any two vertices in S_1 , the number of edges deleted is at most $12 + 2 + 1 = 15$. Without loss of generality, suppose d is the neighbor of a and c , while e is the neighbor of b (see Figure 11(vii)). Similarly, as before, the vertices a, b, c and d cannot have a neighbor in $V(G)\setminus H$, whereas e can have at most one neighbor in $V(G)\setminus H$. If d and e are adjacent, then e cannot have a neighbor in $V(G)\setminus H$. If there are no edges between the vertices in S_1 , the number of edges deleted is at most $12 + 1 = 13$. In the other case, the vertices a, b and c can be adjacent without any constraints. Hence, the number of edges deleted is at most $12 + 2 + 1 = 15$.

6. **Both the vertices d and e have two neighbors in S_1 .** Without loss of generality, suppose d is the neighbor of a and c , while e is the neighbor of b and c (see Figure 11(viii)). Similarly, as before, the vertices a, b, c, d and e cannot have a neighbor in $V(G)\setminus H$. The vertex c can be adjacent to a and b without any constraints. Hence, the number of edges deleted is at most $13 + 2 = 15$.

Thus, by induction

$$e(G) = e(G - H) + 16 \leq \frac{5}{2}(n - 7) - 2 + 16 \leq \frac{5}{2}n - 2,$$

and we are done. □

The following lemma completes the proof of the Theorem 1(v):

Lemma 7. *Let G be an $S_{3,3}$ -free plane graph on n vertices, then $e(G) \leq \frac{5}{2}n - 2$.*

Proof. Let $A = \{x \in V(G) \mid d(x) = 3\}$, $B = \{x \in V(G) \mid d(x) = 4 \text{ or } d(y) = 5\}$ and $C = \{x \in V(G) \mid d(x) \geq 6\}$.

Since there is no 3-3 edge, the vertices in A are independent. From Claims 10 and 11, there is no edge between the sets B and C . Moreover, C is independent by Claim 9. The distribution of the edges in G is shown in Figure 12.

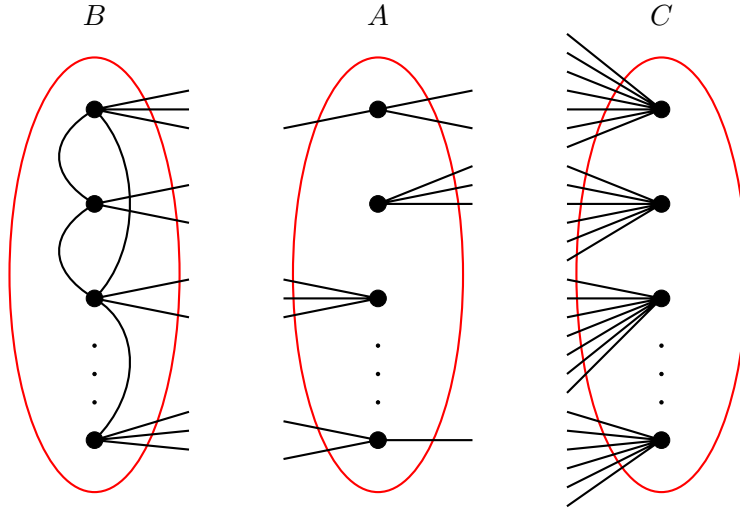


Figure 12: A graph showing the distribution of edges in G .

Let $|A|=a$, $|B|=b$ and $|C|=c$. Let x be the number of edges between the sets A and B , i.e., $e(A, B) = x$. Since the maximum degree in B is 5, we have $2e(G[B]) = \sum_{v \in B} d(v) - x$ which implies $e(G) \leq \frac{5b-x}{2}$. Each vertex in A has degree 3 and the vertices in A are independent, hence $e(A, C) = 3a - x$. Thus, the number of edges in G is

$$e(G) = e(G[B]) + e(A, B) + e(A, C) \leq \frac{5b-x}{2} + x + 3a - x = \frac{5}{2}a + \frac{5}{2}b + \frac{a-x}{2}.$$

On the other hand, since G is a plane graph and the graph induced by the vertices in A and the vertices in C is bipartite, $e(A, C) = 3a - x \leq 2(a+c) - 4$. This implies that $\frac{a-x}{2} \leq c-2 = \frac{5}{2}c - \frac{3}{2}c - 2$ for all $c \geq 0$. Therefore, using the inequality in (1), we get

$$e(G) \leq \frac{5}{2}a + \frac{5}{2}b + \frac{5}{2}c - \left(\frac{3}{2}c + 2\right) = \frac{5}{2}(a + b + c) - \left(\frac{3}{2}c + 2\right) \leq \frac{5}{2}n - 2. \quad (1)$$

The last inequality in (1) holds (and hence Lemma 7) if $a \neq 0$ and $c \neq 0$. To finish the proof, we distinguish the following two cases:

Case 1: $a \neq 0$ and $c = 0$. Observe that $e(G) \leq \frac{5(n-a)+3a}{2} = \frac{5}{2}n - a$. If $a \geq 2$, then we are done. Thus, $a = 1$. Let the number of degree 4 vertices in G be k . Hence, $e(G) = \frac{5(n-k-1)+4k+3}{2} = \frac{5}{2}n - \frac{k}{2} - 1$. If $k \geq 2$, then we are done.

Let the number of degree 4 vertices in G be at most 1. Let $A = \{x\}$ and $N(x) = \{x_1, x_2, x_3\}$. Let $d(x_i) = 5$, for every $i \in \{1, 2, 3\}$. Considering that there is at most one degree 4 vertex in G , it is easy to find a degree 5 vertex in $\cup_{i=1}^3 N(x_i)$, such that all its 5 neighboring vertices are of degree 5. Moreover, the same property holds if one vertex in $N(x)$ is of degree 4. Let v be a degree 5 vertex in G , such that all its 5 neighboring vertices are of degree 5. Let $N(v) = \{x_1, x_2, x_3, x_4, x_5\}$, such that a plane drawing of G results in a clockwise alignment of the vertices x_1, x_2, x_3, x_4, x_5 around v . Since G is an $S_{3,3}$ -free plane graph, every 5-5 edge in G must be contained in at least 3 triangles. Thus, an edge x_1v must be contained in at least 3 triangles. This implies, x_1 must be adjacent to at least one vertex in $\{x_3, x_4\}$. Without loss of generality, assume x_1 and x_3 are adjacent. Then the 5-5 edge x_2v is contained in at most 2 triangles, which results in an $S_{3,3}$ in G with x_2v as the backbone.

Case 2: $a = 0$. Let the number of degree 4 vertices in G be k . Thus, $e(G) = \frac{5(n-k)+4k}{2} = \frac{5}{2}n - \frac{k}{2}$. If the number of degree 4 vertices is at least 4, then $e(G) \leq \frac{5}{2}n - 2$ and we are done. Now assume that the number of degree 4 vertices in G is at most 3. Notice that, $v(G) \geq 8$. Otherwise, taking any maximal planar graph on n vertices, it can be checked that $3n - 6 < \frac{5}{2}n - 2$.

Let v be a degree 5 vertex in G , and $N(v) = \{x_1, x_2, x_3, x_4, x_5\}$. At least two vertices in $N(v)$ must be of degree 5. Otherwise, the number of degree 4 vertices is at least 4 and we are done. Let the plane drawing of G result in a clockwise alignment of the vertices x_1, x_2, x_3, x_4, x_5 around v . There are exactly 2 vertices in $N(v)$, which are of degree 5. Indeed, suppose that the number of degree 5 vertices is at least 3. We can assume that for some $i \in [5]$, $d(x_i) = d(x_{i+1}) = 5$. Without loss of generality, assume that these vertices are x_1 and x_2 . Since x_1v and x_2v are 5-5 edges, they must be contained in at least 3 triangles. Thus, both x_1 and x_2 must be adjacent to x_4 . On the other hand, it is easy to see that x_3v and x_5v are 4-5 edges. Thus, the vertex x_3 must be adjacent to x_2 and x_4 . Similarly, the vertex x_5 must be adjacent to x_1 and x_4 . Since $d(x_3) = 4$, there must be a vertex x_6 , such that $x_3x_6 \in E(G)$. If $d(x_6) = 5$, then x_6 must be adjacent to x_4 . This is impossible, as $d(x_4) = 5$. Hence, $d(x_6) = 4$. Similarly, we have another vertex x_7 adjacent to x_5

and $d(x_7) = 4$. This is a contradiction, as we found 4 vertices of degree 4, namely x_3, x_5, x_6 and x_7 .

Thus, we can assume that only two vertices in $N(v)$ are of degree 5. Moreover, the vertices are not consecutive with respect to the alignment in the clockwise direction. Without loss of generality, assume that the vertices are x_2 and x_4 . It can be checked that the vertices x_2 and x_4 are adjacent. Since x_1v and x_5v are 4-5 edges, then the edges x_1x_2, x_1x_5 and x_5x_4 are in G . Since $d(x_3) = 4$, there must exist a vertex x_6 adjacent to the vertex x_3 . If this vertex is of degree 4, then it is a contradiction as we found 4 vertices of degree 4, namely x_1, x_3, x_5 and x_6 . Hence, $d(x_6) = 5$ and the edges x_2x_6 and x_4x_6 are in G . Since $d(x_1)$ is 4, there must exist a vertex x_7 such that $x_1x_7 \in E(G)$. If $d(x_7)$ is 5, then x_7 is adjacent to x_2 and $d(x_2) \geq 6$, which is a contradiction. Hence, x_7 must be a vertex of degree 4. This is a contradiction, as we found 4 vertices of degree 4, namely x_1, x_3, x_5 and x_7 . This completes the proof of Claim 7, and subsequently the proof of Theorem 1(v). \square

7 Planar Turán number of $S_{3,4}$

Proof of the Theorem 1(vi). Let G be an n -vertex $S_{3,4}$ -free plane graph. Since $S_{3,4}$ contains 9 vertices, a maximal planar graph with $n \leq 8$ vertices, does not contain an $S_{3,4}$. Let $8|n$. Consider the plane graph consisting of $\frac{n}{8}$ disjoint copies of maximal planar graphs on 8 vertices. This graph does not contain an $S_{3,4}$. Hence, $\text{exp}(n, S_{3,4}) \geq \frac{9}{4}n$.

Claim 12. *Let G be an $S_{3,4}$ on n ($1 \leq n \leq 42$) vertices. The number of edges in G is at most $\frac{20}{7}n$.*

Proof. Recall that, an n -vertex maximal planar graph contains $3n - 6$ edges. Since $3n - 6 \leq \frac{20}{7}n$ for $n \leq 42$, $e(G) \leq \frac{20}{7}n$ holds for all n , $1 \leq n \leq 42$. \square

The following claims deal with the different cases of degree pairs in G :

Claim 13. *No vertex in G with a degree at least 8 is adjacent to a vertex of degree at least 4.*

Proof. Suppose not. Let xy be an edge in G such that $d(x) \geq 8$ and $d(y) \geq 4$. Obviously, there are three vertices in $V(G) \setminus \{x\}$, say y_1, y_2 and y_3 , which are adjacent to y . Since $|N(x) \setminus \{y\}| \geq 7$, there are four vertices x_1, x_2, x_3 and x_4 , not in $\{y, y_1, y_2, y_3\}$ which are adjacent to x . This implies we got an $S_{3,4}$ in G with backbone xy and leaf-sets $\{x_1, x_2, x_3, x_4\}$ and $\{y_1, y_2, y_3\}$, respectively, which is a contradiction. This completes the proof. \square

Claim 14. *If there is a 7-7, 6-7, 5-7 and 6-6 edge in G , then $e(G) \leq \frac{20}{7}n$.*

Proof. The proofs are similar to the Claims 9, 10, 11, and 6 respectively. We skip it here for conciseness, but it is provided in the Appendix A. \square

Take $x, y \in V(G)$. By the previous claims, if $d(x) + d(y) \geq 12$, we are done by induction. Assume that $d(x) + d(y) \leq 11$. Summing it over all the edge pairs in G , we have $11e \geq \sum_{xy \in E(G)} (d(x) + d(y)) = \sum_{x \in V(G)} (d(x))^2 \geq n\bar{d}^2 = n(\frac{2e}{n})^2$, where \bar{d} is the average degree in G . This gives us $e \leq \frac{11}{4}n \leq \frac{20}{7}n$ for $n \geq 1$. \square

8 Concluding remarks and Conclusions

Concerning the exact value of $\text{exp}(n, S_{3,3})$, we conjecture the following:

Conjecture 1.

$$\text{exp}(n, S_{3,3}) = \begin{cases} 3n - 6, & \text{if } 3 \leq n \leq 7, \\ 16, & \text{if } n = 8, \\ 18, & \text{if } n = 9, \\ \lfloor \frac{5}{2}n \rfloor - 5, & \text{otherwise.} \end{cases}$$

9 Acknowledgements

Győri's research was partially supported by the National Research, Development, and Innovation Office NKFIH, grants K132696, SNN135643 and K126853.

References

- [1] Chris Dowden. “Extremal C_4 -Free/ C_5 -Free Planar Graphs”. *J. Graph Theory* 83.3 (2016), pp. 213–230. DOI: 10.1002/jgt.21991.
- [2] Paul Erdős. “On the number of complete subgraphs contained in certain graphs”. *Publ. Math. Inst. Hung. Acad. Sci.* 7 (1962), pp. 459–464.
- [3] Paul Erdős. “On the structure of linear graphs”. *Israel Journal of Mathematics* 1 (1963), pp. 156–160. DOI: 10.1007/BF02759702.
- [4] Debarun Ghosh, Ervin Győri, Ryan Martin, Addisu Paulos, and Chuanqi Xiao. “Planar Turán number of the 6-cycle”. *arXiv:2004.14094* (2020).
- [5] Debarun Ghosh, Ervin Győri, Addisu Paulos, Chuanqi Xiao, and Oscar Zamora. “Planar Turán Number of the Θ_6 ”. *arXiv:2006.00994* (2020).
- [6] Yongxin Lan and Yongtang Shi. “Planar Turán Numbers of Short Paths”. *Graphs Comb.* 35.5 (2019), pp. 1035–1049. DOI: 10.1007/s00373-019-02055-w.
- [7] Yongxin Lan, Yongtang Shi, and Zi-Xia Song. “Extremal H -Free Planar Graphs”. *Electron. J. Comb.* 26.2 (2019), P2.11.

- [8] Yongxin Lan, Yongtang Shi, and Zi-Xia Song. “Extremal Theta-free planar graphs”. *Discret. Math.* 342.12 (2019). DOI: 10.1016/j.disc.2019.111610.
- [9] Pál Turán. “On an extremal problem in Graph Theory”. *Matematikai és Fizikai Lapok* 48 (Nov. 1940), pp. 436–452.
- [10] Alexander Aleksandrovich Zykov. “On some properties of linear complexes”. *Matematicheskii Sbornik* 66.2 (1949), pp. 163–188.

A Proof of Lemma 14

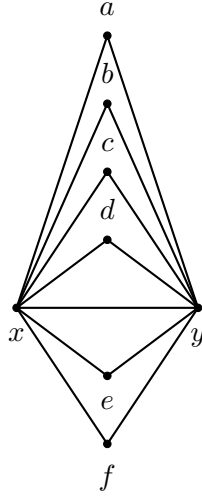


Figure 13: G has a 7-7 edge xy .

Lemma 8. *If there is a 7-7 edge in G , then $e(G) \leq \frac{20}{7}n$.*

Proof. Let $xy \in E(G)$ be a 7-7 edge. Since G is an $S_{3,4}$ -free plane graph, xy must be contained in 6 triangles. Let a, b, c, d, e and f be the vertices in G which are adjacent to both x and y , see Figure 13(i). Let $S_1 = \{a, b, c, d, e, f\}$ and $H = \{x, y, a, b, c, d, e, f\}$. Delete the vertices in H . Assume a has two neighbors in $V(G) \setminus H$. We immediately get an $S_{3,4}$ with xa or ya as the backbone. Thus, any vertex in the set S_1 can have at most 1 neighbor in $V(G) \setminus H$. If there are no edges between the vertices in S_1 , we deleted at most $13 + 6 = 19$ edges. Assume that there is an edge between the vertices in S_1 , say ab . If a (or b) has a neighbor in $V(G) \setminus H$, then xa (or xb) is the backbone of an $S_{3,3}$. Similarly, for the other edges in S_1 , both the vertices cannot have a neighbor in $V(G) \setminus H$. Thus, if there is an edge joining any two vertices in S_1 , the number of edges deleted is at most $13 + 5 = 18$. By the induction hypothesis, we get $e(G - H) \leq \frac{20}{7}(n - 8)$. Hence, $e(G) = e(G - H) + 19 \leq \frac{20}{7}(n - 8) + 19 \leq \frac{20}{7}n$. \square

Lemma 9. *If there is a 6-7 edge in G , then $e(G) \leq \frac{20}{7}n$.*

Proof. Let $xy \in E(G)$ be a 6-7 edge. Since G is an $S_{3,4}$ -free plane graph, xy must be contained in 5 triangles. Let a, b, c, d and e be the vertices in G which are adjacent to both x and y . Let f be the vertex adjacent to y but not to x , see Figure 14. Let $S_1 = \{a, b, c, d, e\}$ and $H = \{x, y, a, b, c, d, e, f\}$.

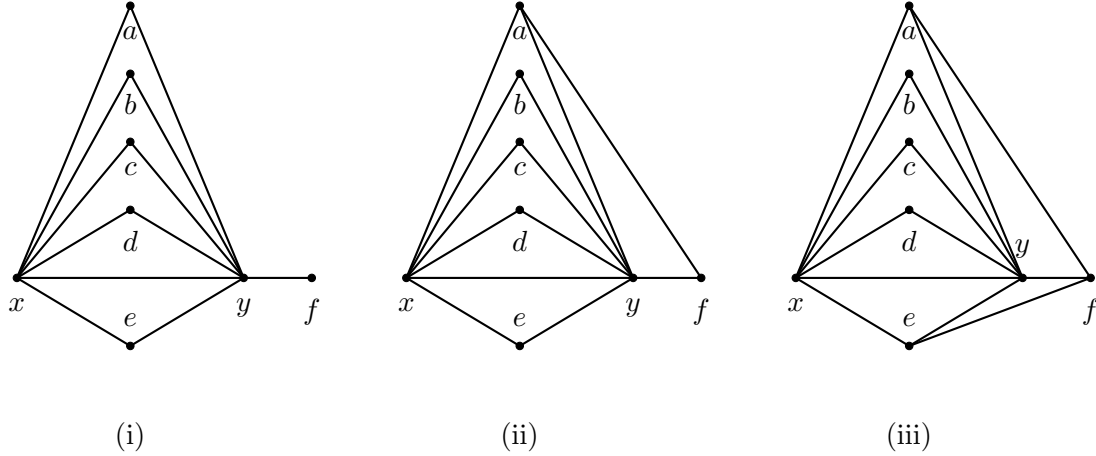


Figure 14: G has a 6 – 7 edge xy .

- (i) The vertex f has no neighbors in S_1 .
- (ii) The vertex f has one neighbor in S_1 .
- (iii) The vertex f has two neighbors in S_1 .

Delete the vertices in H . Any vertex in S_1 can have at most 1 neighbor in $V(G)\setminus H$. If there is an edge joining any two vertices in S_1 , say ab . Similarly, as before, the vertices a and b cannot have a neighbor in $V(G)\setminus H$. We further distinguish the cases based on the number of edges from f as follows:

1. **The vertex f has no neighbors in S_1** , see Figure 14(i). Clearly, the vertex f can have at most 2 neighbors in $V(G)\setminus H$. If there are no edges between the vertices in S_1 , we deleted at most $12 + 2 + 5 = 19$ edges. If there is an edge joining any two vertices in S_1 , the number of edges deleted is at most $12 + 2 + 4 = 18$.
2. **The vertex f has one neighbor in S_1** . Without loss of generality, suppose a is the neighbor of f , see Figure 14(ii). The vertex f can have at most one neighbor in $V(G)\setminus H$. If the vertex a has a neighbor in $V(G)\setminus H$, we have an $S_{3,4}$ with xa as the backbone. If there are no edges between the vertices in S_1 , we have deleted at most $13 + 4 + 1 = 18$ edges. If there is an edge joining any two vertices in S_1 , the number of edges deleted is at most $13 + 4 + 1 = 18$.
3. **The vertex f has two neighbors in S_1** . Without loss of generality, suppose f is the neighbor of a and e , see Figure 14(iii). The vertex f cannot have a neighbor in $V(G)\setminus H$,

otherwise we have an $S_{3,4}$ with yf as the backbone. If either a or e has a neighbor in $V(G)\setminus H$, we have an $S_{3,4}$ with xa or xe as the backbone, respectively. Suppose there is no edge between the vertices in S_1 . The total number of edges deleted is at most $14 + 3 = 17$. Suppose a and b are adjacent, then b cannot have a neighbor in $V(G)\setminus H$. Similarly, for the other edges in S_1 except ad , which is still possible without any extra restrictions. If there is an edge joining any two vertices in S_1 , the total number of edges deleted is at most $14 + 4 = 18$.

Thus, by induction

$$e(G) = e(G - H) + 19 \leq \frac{20}{7}(n - 8) + 19 < \frac{20}{7}n,$$

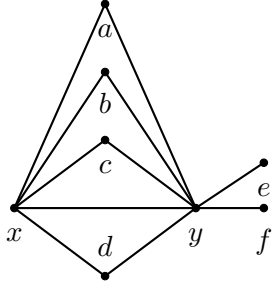
and we are done. □

Lemma 10. *If there is a 5-7 edge in G , then $e(G) \leq \frac{20}{7}n$.*

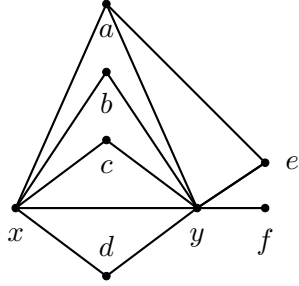
Proof. Let xy be a 5-7 edge in G . Since G is an $S_{3,4}$ -free plane graph, xy must be contained in 4 triangles. Let a, b, c and d be the vertices in G which are adjacent to both x and y . Let e and f be the vertices adjacent to y but not to x , see Figure 15. Let $S_1 = \{a, b, c, d\}$ and $H = \{x, y, a, b, c, d, e, f\}$. Delete the vertices in H .

The vertices e and f can have at most two neighbors in $V(G)\setminus H$ each. The vertices in S_1 can have at most one neighbor in $V(G)\setminus H$ each. If there is an edge joining any two vertices in S_1 , say ab . Similarly, as before, the vertices a and b cannot have a neighbor in $V(G)\setminus H$. We distinguish the cases based on the neighbors of e and f as follows:

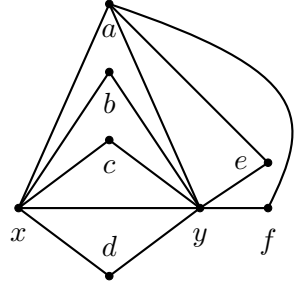
1. **The vertices e and f have no neighbors in S_1 ,** see Figure 15(i)). If the vertices e and f are adjacent, they can have at most one neighbor in $V(G)\setminus H$ each. Otherwise, we have an $S_{3,4}$ with ey (or fy) as the backbone. If there are no edges between the vertices in S_1 , the number of edges deleted is at most $11 + 4 + 4 = 19$. If there is an edge joining any two vertices in S_1 , the number of edges deleted is at most $11 + 3 + 4 = 18$.
2. **One of the vertices e or f has one neighbor in S_1 , while the other has none.** Without loss of generality, suppose e and a are adjacent (see Figure 15(ii)). The vertex a cannot have a neighbor in $V(G)\setminus H$, and e can have at most one neighbor in $V(G)\setminus H$. If the vertices e and f are adjacent, then e cannot have a neighbor in $V(G)\setminus H$ and f can have at most one neighbor in $V(G)\setminus H$. If there are no edges between the vertices in S_1 , the number



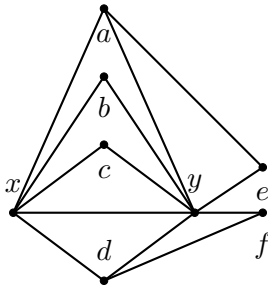
(i)



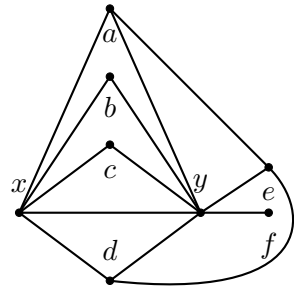
(ii)



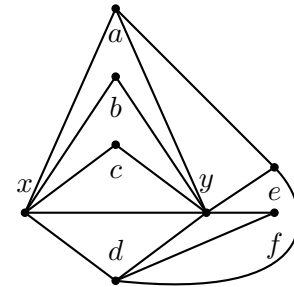
(iii)



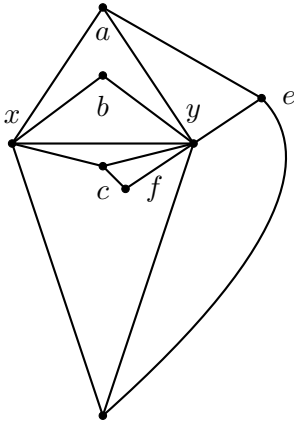
(iv)



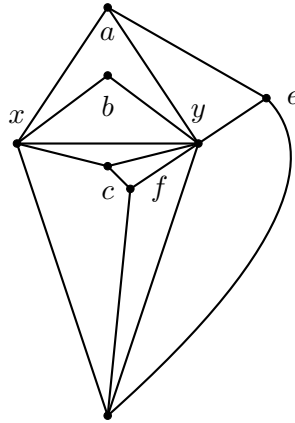
(v)



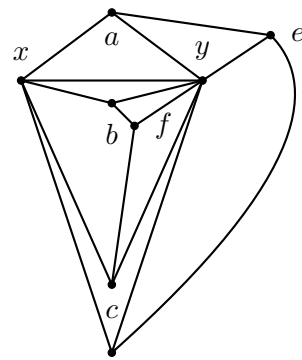
(vi)



(vii)



(viii)



(ix)

Figure 15: G has a $5 - 7$ edge xy .

- (i) The vertices e and f have no neighbors in S_1 .
- (ii) The vertex e has one neighbor in S_1 , and f has none.
- (iii) Both the vertices e and f have one common neighbor in S_1 .
- (iv) The vertices e and f have one neighbor in S_1 and they are distinct.
- (v) One of the vertices e or f has two neighbors in S_1 .
- (vi) Suppose e is neighbor of a and d , while f is neighbor of d .
- (vii) Suppose e is neighbor of a and d , while f is neighbor of c .
- (viii) Suppose e is neighbor of a and d , while f is neighbor of c and d .
- (ix) Suppose e is neighbor of a and d , while f is neighbor of b and c .

of edges deleted is at most $12 + 3 + 3 = 18$. If there is an edge joining any two vertices in S_1 , the number of edges deleted is at most $12 + 3 + 3 = 18$.

3. **Both the vertices e and f have one neighbor in S_1 .** There are two possibilities. In the first case, without loss of generality, suppose a is the common neighbor of e and f (see Figure 15(iii)). Similarly, as before, the vertex a cannot have a neighbor in $V(G)\setminus H$, and e and f can have at most one neighbor in $V(G)\setminus H$ each. If the vertices e and f are adjacent, e and f have no neighbors in $V(G)\setminus H$. If there are no edges between the vertices in S_1 , the number of edges deleted is at most $13 + 3 + 2 = 18$. If there is an edge joining any two vertices in S_1 , the number of edges deleted is at most $13 + 3 + 2 = 18$.

Without loss of generality, suppose a is the neighbor of e and d is the neighbor of f (see Figure 15(iv)). Similarly, as before, the vertices a and d cannot have a neighbor in $V(G)\setminus H$, and e and f can have at most one neighbor in $V(G)\setminus H$ each. If the vertices e and f are adjacent, then they have no neighbor in $V(G)\setminus H$. If there are no edges between the vertices in S_1 , the number of edges deleted is at most $13 + 2 + 2 = 17$. If a and b are adjacent, then b does not have a neighbor in $V(G)\setminus H$. Similarly, for the other edges in S_1 , except ad . The vertices a and d can be adjacent without any constraints. Thus, the number of edges deleted is at most $13 + 3 + 2 = 18$.

4. **One of the vertices e or f has two neighbors in S_1 , while the other has none.**

Without loss of generality, suppose e is the neighbor of a and d , while f has no neighbors in S_1 (see Figure 15(v)). The vertex e cannot have a neighbor in $V(G)\setminus H$. Similarly, as before, the vertices a and d cannot have a neighbor in $V(G)\setminus H$, whereas f can have at most two neighbors in $V(G)\setminus H$. If e and f are adjacent, then f can have at most one neighbor in $V(G)\setminus H$. If there are no edges between the vertices in S_1 , the number of edges deleted is at most $13 + 2 + 2 = 17$. If a and b are adjacent, then b does not have a neighbor in $V(G)\setminus H$. Similarly, for the other edges in S_1 , except ad . The vertices a and d can be adjacent without any constraints. Hence, the number of edges deleted is at most $13 + 3 + 2 = 18$.

5. **One of the vertices e or f has two neighbors in S_1 , while the other has one.**

There are two possibilities. In the first case, without loss of generality, suppose e is the neighbor of a and d , while f is the neighbor of d (see Figure 15(vi)). Similarly, as before, the vertices a, d and e cannot have a neighbor in $V(G)\setminus H$, whereas f can have at most one neighbor in $V(G)\setminus H$. If e and f are adjacent, then f cannot have a neighbor in $V(G)\setminus H$. If there are no edges between the vertices in S_1 , the number of edges deleted is at most $14 + 2 + 1 = 17$. In the other case, the vertices a and d can be adjacent without any constraints. Hence, the number of edges deleted is at most $14 + 3 + 1 = 18$.

Without loss of generality, suppose e is the neighbor of a and d , while f is the neighbor of c (see Figure 15(vii)). Similarly, as before, the vertices a, c, d and e cannot have a neighbor in $V(G)\setminus H$, whereas f can have at most one neighbor in $V(G)\setminus H$. If there are no edges between the vertices in S_1 , the number of edges deleted is at most $14 + 1 + 1 = 16$. In the other case, the vertices a, c and d can be adjacent without any constraints. Hence, the number of edges deleted is at most $14 + 3 + 1 = 18$.

6. **Both the vertices e and f have two neighbors in S_1 .**

There are two possibilities. In the first case, without loss of generality, suppose e is the neighbor of a and d , while f is the neighbor of c and d (see Figure 15(viii)). Similarly, as before, the vertices a, c, d, e and f cannot have a neighbor in $V(G)\setminus H$. If there are no edges between the vertices in S_1 , the number of edges deleted is at most $15 + 1 = 16$. In the other case, the vertices a, c and d can be adjacent without any constraints. Thus, the number of edges deleted is $15 + 3 = 18$.

Without loss of generality, suppose e is the neighbor of a and d , while f is the neighbor of

b and c (see Figure 15(ix)). Similarly, as before, the vertices a, b, c, d, e and f cannot have a neighbor in $V(G)\setminus H$. The vertices a, b, c and d can be a path of length 3 without any constraints. In this case, the number of edges deleted is $15 + 3 = 18$.

Thus, by induction

$$e(G) = e(G - H) + 19 \leq \frac{20}{7}(n - 8) + 19 < \frac{20}{7}n,$$

and we are done. □

Lemma 11. *If there is a 6-6 edge in G , then $e(G) \leq \frac{20}{7}n$.*

Proof. Let $xy \in E(G)$ be a 6-6 edge. There are at least 4 triangles sitting on the edge xy , otherwise G contains an $S_{3,4}$. We subdivide the cases based on the number of triangles sitting on the edge xy .

1. **There are 5 triangles sitting on the edge xy .** Let a, b, c, d and e be the vertices in G which are adjacent to both x and y , see Figure 6. Let $S_1 = \{a, b, c, d, e\}$, and $H = S_1 \cup \{x, y\}$. Delete the vertices in H . The vertices in S_1 can have at most one neighbor in $V(G)\setminus H$ each and can form a path of length 4 within S_1 . Hence, the number of edges deleted is $11 + 5 + 4 = 20$. By the induction hypothesis, we get $e(G - H) \leq \frac{20}{7}(n - 7)$. Hence, $e(G) = e(G - H) + 20 \leq \frac{20}{7}(n - 7) + 20 \leq \frac{20}{7}n$.
2. **There are 4 triangles sitting on the edge xy .** Let a, b, c and d be the vertices in G which are adjacent to both x and y . Let e be the vertex adjacent to x but not adjacent to y , and f be adjacent to y but not adjacent to x . Let $S_1 = \{a, b, c, d\}$ and $H = \{x, y\} \cup S_1 \cup \{e, f\}$. Delete the vertices in H . The vertices e and f can have at most two neighbors in $V(G)\setminus H$ each. We distinguish the cases based on the neighbors of e and f as follows:
 - (a) **The vertices e and f have no neighbors in S_1 ,** see Figure 7(i)). The vertices in S_1 can have at most one neighbor in $V(G)\setminus H$ each and can form a path of length 3 in S_1 . If the vertices e and f are adjacent, then both can have at most one neighbor in $V(G)\setminus H$. Otherwise, we have an $S_{3,4}$ with ex (or fy) as the backbone. Thus, the number of edges deleted is at most $11 + 3 + 4 + 4 = 22$.
 - (b) **One of the vertices e or f has one neighbor in S_1 , while the other has none.** Without loss of generality, assume that e and a are adjacent, see Figure 7(ii). The vertex

a cannot have a neighbor in $V(G)\setminus H$, and e can have at most one neighbor in $V(G)\setminus H$. Otherwise, if a has a neighbor in $V(G)\setminus H$, ya is the backbone of an $S_{3,4}$. If the vertices e and f are adjacent, then the vertex e cannot have a neighbor in $V(G)\setminus H$, and f can have at most one neighbor in $V(G)\setminus H$. Otherwise, we have an $S_{3,4}$ with ex (or fy) as the backbone. Similarly, as before, the vertices b, c and d can have at most one neighbor in $V(G)\setminus H$ each and the vertices $\{a, b, c, d\}$ can form a path of length 3 in S_1 . Thus, the number of edges deleted is at most $12 + 3 + 3 + 3 = 21$.

- (c) **The vertices e and f have one neighbor in S_1 .** There are two possibilities. In the first case, without loss of generality, suppose a is the common neighbor of e and f , see Figure 7(iii). Similarly, as before, a cannot have a neighbor in $V(G)\setminus H$, and e and f can have at most one neighbor in $V(G)\setminus H$ each. The vertices b, c and d can have at most one neighbor in $V(G)\setminus H$ each, and the vertices $\{a, b, c, d\}$ can form a path of length 3 in S_1 . If the vertices e and f are adjacent, then they cannot have a neighbor in $V(G)\setminus H$. Thus, the number of edges deleted is at most $13 + 3 + 3 + 2 = 21$.

Without loss of generality, suppose a is the neighbor of e , and d is the neighbor of f , see Figure 7(iv). Similarly, as before, the vertices a and d cannot have a neighbor in $V(G)\setminus H$, and e and f can have at most one neighbor in $V(G)\setminus H$ each. The vertices b and c can have at most one neighbor in $V(G)\setminus H$ each, and the vertices $\{a, b, c, d\}$ can form a path of length 3 in S_1 . If the vertices e and f are adjacent, then they cannot have a neighbor in $V(G)\setminus H$. Thus, the number of edges deleted is at most $13 + 3 + 2 + 2 = 20$. (In fact, it can be shown that if the vertices e and f are adjacent, there can only be a 2-path inside S_1 . However, this precision is unnecessary. We skip this in the following cases also.)

- (d) **One of the vertices e or f has two neighbors in S_1 , while the other has none.** Without loss of generality, suppose e is the neighbor of a and d , see Figure 7(v). Similarly, as before, a and d cannot have a neighbor in $V(G)\setminus H$, and e at most one neighbor in $V(G)\setminus H$. The vertices b and c can have at most one neighbor in $V(G)\setminus H$ each, and the vertices $\{a, b, c, d\}$ can form a path of length 3 in S_1 . If the vertices e and f are adjacent, then e cannot have a neighbor in $V(G)\setminus H$ and f can have at most one neighbor in $V(G)\setminus H$. Thus, the number of edges deleted is at most $13 + 3 + 2 + 3 = 21$.
- (e) **One of the vertices e or f has two neighbors in S_1 , while the other has one**

neighbor. There are two possibilities. In the first case, without loss of generality, suppose e is the neighbor of a and d , and f is the neighbor of d (see Figure 7(vi)). Similarly, as before, the vertices a and d cannot have a neighbor in $V(G)\setminus H$. The vertices e and f can have at most one neighbor in $V(G)\setminus H$ each. On the other hand, the vertices b and c can have at most one neighbor in $V(G)\setminus H$ each and the vertices $\{a, b, c, d\}$ can form a path of length 3 in S_1 . If the vertices e and f are adjacent, e and f cannot have a neighbor in $V(G)\setminus H$. Thus, the number of edges deleted is at most $14 + 3 + 2 + 2 = 21$.

Without loss of generality, assume that e is the neighbor of a and d , and f is the neighbor of b (see Figure 7(vii)). The vertices a, b and d cannot have a neighbor in $V(G)\setminus H$, but they along with c can form a path of length 3 in S_1 . The vertices c, e and f can have at most one neighbor in $V(G)\setminus H$ each. Thus, the number of edges deleted is at most $14 + 3 + 1 + 2 = 20$.

- (f) **Both the vertices e and f have two neighbors in S_1 .** There are three possibilities. In the first case, without loss of generality, suppose e and f are neighbors of a and d both, see Figure 7(viii). Similarly, as before, the vertices a and d cannot have a neighbor in $V(G)\setminus H$. The vertices e and f can have at most one neighbor in $V(G)\setminus H$ each. The vertices b and c can have at most one neighbor in $V(G)\setminus H$ each. The vertices $\{a, b, c, d\}$ can form a path of length 3 in S_1 . If the vertices e and f are adjacent, e and f cannot have a neighbor in $V(G)\setminus H$. Thus, the number of edges deleted is at most $15 + 3 + 2 + 2 = 22$.

On the other hand, without loss of generality, assume e is the neighbor of a and d both, while f is the neighbor of a and b (see Figure 7(ix)). The vertices a, b and d cannot have a neighbor in $V(G)\setminus H$, but they along with c can form a path of length 3 in S_1 . The vertices c, e and f can have at most one neighbor in $V(G)\setminus H$ each. Thus, the number of edges deleted is at most $15 + 3 + 1 + 2 = 21$.

In the last case, without loss of generality, assume e is the neighbor of a and d both, while f is the neighbor of b and c (see Figure 7(x)). The vertices a, b, c and d cannot have a neighbor in $V(G)\setminus H$, but they can form a path of length 3 in S_1 . The vertices e and f can have at most one neighbor in $V(G)\setminus H$ each. Thus, the number of edges deleted is at most $15 + 3 + 2 = 20$.

By the induction hypothesis, we get $e(G - H) \leq \frac{20}{7}(n - 8)$. Hence, $e(G) = e(G - H) + 22 \leq \frac{20}{7}(n - 8) + 22 \leq \frac{20}{7}n$.

□

This figure "S35L.png" is available in "png" format from:

<http://arxiv.org/ps/2110.10515v3>