


arXiv:1806.04481v2 [astro-ph.EP] 25 Jun 2019

The Atmosphere

A flipped course



Dorian S. Abbot

Contents

1	Introduction	1
1.1	Origin of These Notes	2
1.2	How to Use These Notes	3
1.3	Acknowledgements	4
2	Syllabus	5
2.1	A sample syllabus	6
3	Thermodynamics	8
3.1	Orientation and Estimation	9
3.2	More Orientation and Estimation	12
3.3	Pressure and Cyclones	14
3.4	Compositon and the Ideal Gas Law	17
3.5	Virtual Temperature	19
3.6	Hydrostatic Balance and the Scale Height	21
3.7	The Lapse Rate and Potential Temperature	24
3.8	Stability	27
3.9	Water Vapor in the Atmosphere	31
3.10	Moist Convection	35
3.11	The Carnot Cycle and Hurricanes	39
4	Radiation	42
4.1	Electromagnetic Radiation	43
4.2	Blackbody Emission	46
4.3	The Greenhouse Effect	48
4.4	Absorption and Scattering	51
4.5	Radiation and Vertical Structure	56
4.6	Global Energy Balance	59
5	Dynamics	63
5.1	Partial Derivatives and the Streamfunction	64
5.2	The Divergence	67
5.3	The Curl and Vorticity	74
5.4	The Coriolis Force	81
5.5	The Pressure Gradient Force	84
5.6	Geostrophic Balance 1	88
5.7	Geostrophic Balance 2	91
5.8	Potential Vorticity	93
5.9	Tornadoes	96
6	Bonus	100
6.1	Clouds	101

7	Problem Sets	103
7.1	Problem Set 1	104
7.2	Problem Set 2	105
7.3	Problem Set 3	106
7.4	Problem Set 4	107
7.5	Problem Set 5	108
7.6	Problem Set 6	110
7.7	Problem Set 7	111
7.8	Problem Set 8	112
7.9	Problem Set 9	114
7.10	Problem Set 10	117
8	Midterms	118
8.1	Midterm 1, 2017	119
8.2	Midterm 1, 2018	125
8.3	Midterm 1, 2019	133
8.4	Midterm 2, 2017	141
8.5	Midterm 2, 2018	150
8.6	Midterm 2, 2019	158
9	Finals	167
9.1	Final, 2017	168
9.2	Final, 2018	181
9.3	Final, 2019	194
10	References	212

1 Introduction

1.1 Origin of These Notes

In 2015 our department chair, Michael Foote, asked me to teach “The Atmosphere,” an introductory course in our department required for all Geophysical Sciences and Environmental Sciences majors. I taught it using “Atmospheric Science” by Wallace and Hobbs [1]. I had no idea what students learned in first-year calculus, so I asked them to stop me if I used something they didn’t understand. I used partial derivatives and vector calculus most days, and six weeks into the course a student asked me after class what the “ ∂ ” symbol meant. I realized I was not teaching effectively! The results on the exams bore this out. After two years, I decided to try something different.

In 2017 I started teaching the class as a flipped class, where students work on worksheets in class. I started going around and interacting with students, and it really helped me understand what they understood and where they needed extra help. I made notes motivated by Wallace and Hobbs, but much more informal and expanding on certain things. My notes also focus more on basic physical concepts and less on field-specific meteorology and jargon. Wallace and Hobbs is a great text though, and some students like to read it to go into more depth.

After trying it out, I’m a believer in flipped classes. Modern students are highly motivated and diligent. They don’t seem to have any trouble preparing for class. They also get more out of a class where they interact with their peers and learn by doing, rather than just sitting in a lecture. Think of how many times you’ve fallen asleep in a department seminar, versus how many times you’ve fallen asleep coding or bouncing ideas off your favorite colleagues!

1.2 How to Use These Notes

These notes are designed to be used as a flipped course. The students should read the introduction before every class and ask questions about anything they didn't understand at the start of class. During class they should work together in small groups. I encourage students to work with others, but don't force them if they prefer to work alone. Some groups start Google Documents where they all add answers to the exercises for the classes. Some students will finish faster than others. Remind them that extra class time is a good time to work on the problem set. Try to keep them from talking loudly about unrelated stuff, because it distracts other students. I have a teaching assistant go over the answers to the problems at the end of each class for 10-15 minutes.

At the University of Chicago we have 10 week-long quarters. My class meets 3 times per week for 50 minutes. The lessons in these notes cover these class meetings, minus days for midterms and holidays. Many universities have a 13 week long semester. If you want to use these notes for a semester, you have a few options. First, you could meet twice per week for 80 minutes and give a 30 minute long lecture on the reading at the start of each class. Second, you could add more material. I recommend adding material on clouds, cloud microphysics, basic atmospheric chemistry, and pollution. I have provided the Tex files, so this should be possible.

I have also provided 10 weekly problem sets that you can use. These take the students an average of 1.5-3 hours each, although there is a fair amount of variation among the students on a given problem set (I collected data on this one year). Finally, there are old midterms and finals with solutions that you can use for inspiration and the students can use to study. I always try to find something fun and hopefully related to recent research to put on these. The hope is to show the students that they've learned enough to start understanding real, current science. I've gone toward not allowing anything but a writing implement in exams. This forces students to practice order-of-magnitude thinking.

1.3 Acknowledgements

Daniel Koll and Jonah Bloch-Johnson were my teaching assistants for the first two years and helped develop many of the questions in the problem sets. Daniel was particularly good at suggesting questions. Jonah was my teaching assistant for four years, and has been extremely helpful in developing the flipped course. He has excellent physical insight and contributed to the descriptions in the lesson introductions in a number of places. Jade Checlair, David Plotkin, and Qi Zhou have also served as teaching assistants and helped me develop the course a great deal.

I would also like to acknowledge the undergraduate students at the University of Chicago who have taken the course. The students have been extremely bright and hard-working. It's been a pleasure to work with them and seeing them learn has made my work on this course worth it. Their questions have helped me improve my understanding of the course material and the descriptions in the lessons tremendously.

I used figures from a variety of sources in these notes: some from Wallace and Hobbs, some from papers, some from the internet, and some I made myself. To focus student attention on the most important references, I didn't reference the source for most figures. But I'd like to acknowledge the work people put into making them and say thanks!

Finally, I am grateful to Wallace and Hobbs for developing such an excellent textbook, which these notes are partially based on.

2 Syllabus

2.1 A sample syllabus

Overview: This course introduces the physics and phenomenology of the Earth's atmosphere, with an emphasis on the fundamental science that underlies atmospheric behavior and climate. Topics include (1) atmospheric composition, structure, and thermodynamics; (2) solar and terrestrial radiation in the atmospheric energy balance; (3) atmospheric dynamics and circulation.

This is a hard course. Understanding the concepts of the atmosphere requires mathematics. If you struggle with mathematics and abstraction, expect to devote extra time to this course. That said, no one who has ever shown up to every class, worked hard, and not cheated, has ever gotten less than a C. So passing this course is within all of your capabilities.

Prerequisites: MATH 13200 (math through basic calculus)

Format: This will be a “flipped” course. Before each class meeting you should read the introduction of the appropriate class worksheet. Note that the most important equations will be set out of the text in numbered equations. If you have any questions on the material, please ask them at the start of class. In class you will work in small groups on the problems in the worksheet, and we will be available for questions. At the end of each class we will discuss the problems together and give the answers. The worksheets will not be graded.

In this course we are opening the door to knowledge for you. We cannot force you through it. If you do not understand something, it is your responsibility to ask about it. If you didn't understand the reading, you need to raise your hand at the start of class. If your group is moving too quickly through a problem that you don't understand, you need to stop them. If you have questions about course material that aren't resolved in class, you need to come to office hours and ask them.

Problem Sets: There will be one problem set per week. These are designed to take the average student 1.5-3 hours per week. There is a fair amount of variation in the time it takes students, so you will have to calibrate for yourself. Also, some of the problem sets will take longer than others. Make sure to start all of them early, and go to office hours if you have questions.

You may discuss problems with each other, but you must each write up your own solutions separately. It is not appropriate to write up solutions in the presence of other students, to discuss your solutions with others as you write them up, or to share your written-up solutions with other students. Also, if you are asked to explain something, don't just Google it and copy the first thing that pops up. Problem set solutions will be due at the start of class on the specified due date, and will not be accepted late. This is necessary so that all problem sets can be graded and returned quickly.

Tests: There will be two midterms and a final. The notes provide example tests from previous years. The best way to use these is to print them out without looking at them, go to the library with only a pen, and take them for the appropriate amount of time. You can then grade them yourselves using the solutions, and use the results to determine how to focus your study.

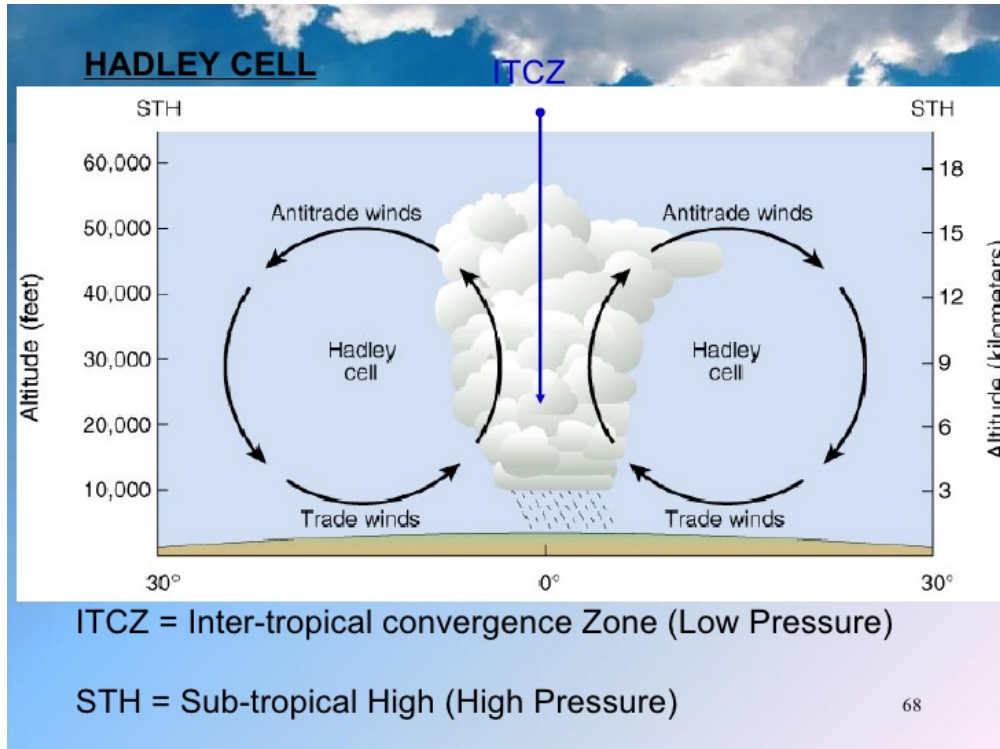
Grading: The problem sets will represent 50% of the final grade (5% each), the midterms will be worth 10% of the final grade, and the final will be worth 30% of the final grade. The grade scheme will be as follows: [90-100]:A, [85-90):A-, [80-85):B+, [75-80):B, [70-75):B-, [65-70):C+, [60-

65):C, [50-60):D, [0-50):F. In order to be fair to everyone and avoid biases I will not round up under any circumstances.

3 Thermodynamics

3.1 Orientation and Estimation

We're going to start with some exercises where you will look at observations to get oriented to the important features of Earth's atmosphere. You may not know all of the terms involved, but you can learn by doing the exercises. Here's a diagram of tropical atmospheric circulation that might be helpful:



An important skill that I hope you will learn a bit about in this class is the ability to estimate the answer to a problem quickly. Scientists use this when they encounter a problem to see if a potential solution is plausible before making a complex calculation. We also often make complicated calculations on computers nowadays, and estimation is a great way to check if the computer is telling you something crazy or maybe true. In this course I may either ask you to estimate the “order of magnitude” or the answer to “one significant digit.” For example, a typical man is about 1.75 m tall. The order of magnitude of his height is 1 m and his height is 2 m to one significant digit.

For an example, let's estimate the order of magnitude of the total mass of beard grown by a man per year. There are many ways to do this, but let's try the following. The total mass of beard, m , should be the number of beard hairs, N , multiplied by the cross-sectional area of a beard hair, σ , multiplied by the length each hair grows in a year, l , multiplied by the density of beard hair ρ :

$$m = N\sigma l\rho.$$

To get the answer now we just need to estimate each term in this equation. The spacing between hairs is about 1 mm, so there are $100 \text{ hairs cm}^{-2}$. Consider the head to be a sphere of radius 10 cm. The area of the beard is a quarter of the total surface area, or $\frac{1}{4} \times 4\pi r^2 = \pi \times 10^2 \text{ cm}^2$. So $N = (\pi \times 10^2 \text{ cm}^2) \times 10^2 \text{ hairs cm}^{-2} = \pi \times 10^4 \text{ hairs}$. The smallest thing the human eye can see is

about 0.1 mm (you can check this with a ruler). We can just make out the thickness of a beard hair, so its diameter must be about $0.1 \text{ mm} = 10^{-4} \text{ m}$. This means that $\sigma = \pi r^2 = \pi(0.5 \times 10^{-4} \text{ m})^2 \text{ hair}^{-1} \approx 10^{-8} \text{ m}^2 \text{ hair}^{-1}$. Notice that we set $\frac{\pi}{4} \approx 1$. This is appropriate since we are only trying to estimate the order of magnitude. Hair, including beard hair, grows about 0.5 in per month, or about 1 cm per month. Many of you probably know this. If you didn't, you probably know immediately that a beard grows faster than 1 mm per month and slower than 10 cm per month. When you come to something you really don't know how to estimate, one trick is to find a lower and upper limit, then take the geometric mean. In this case, it would give us 1 cm, which turns out to be the right answer. There are order of 10 months per year, so $l = 10 \text{ cm year}^{-1} = 0.1 \text{ m year}^{-1}$. Hair sinks in water (if it breaks the surface tension), but just barely. So the density of hair must be similar to that of water, or $\rho = 10^3 \text{ kg m}^{-3}$. We can put this all together to find: $m = (\pi \times 10^4 \text{ hairs}) \times (10^{-8} \text{ m}^2 \text{ hair}^{-1}) \times (10^{-1} \text{ m year}^{-1}) \times (10^3 \text{ kg m}^{-3}) = \pi \times 10^{-2} \text{ kg year}^{-1} \approx 30 \text{ g}$. For comparison, the mass of an adult hummingbird is about 3 g. So a typical man shaves off 10 hummingbirds worth of beard every year! See the picture below for an example of what happens if you let all that mass accumulate for multiple years. Notice that I kept track of the factor of π in this exercise, even though this isn't strictly necessary to estimate the order of magnitude. Two critical things to take away from this exercise are: (1) Always check your units and make sure they come out right, and (2) use scientific notation.



Exercises

(1) Watch this video (<https://youtu.be/gpKzp3Br6-k>) a couple times. It contains pictures of Earth from above taken by an orbiting satellite stitched together.

- A. Find the extratropical cyclones (eddies), which occur in the mid-latitudes. Notice that they are roughly symmetric between the northern and southern hemispheres. These are the storms that cause most weather in Chicago. Can you tell which direction they spin (clockwise or counter-clockwise) in each hemisphere? You can slow the video down to make it easier to see what's happening.
- B. The Inter-Tropical Convergence Zone (ITCZ) is the region where the northern and southern Hadley cells converge, near the equator. This causes convection, clouds, and precipitation. Can you find the ITCZ? Is it north or south of the equator?
- C. Tropical cyclones are called hurricanes, typhoons, or cyclones, depending on the ocean basin they occur in. Can you find some tropical cyclones? How do they compare with extratropical cyclones?
- D. This video goes through about one year. Find at least two ways to determine the season in Chicago as time progresses.

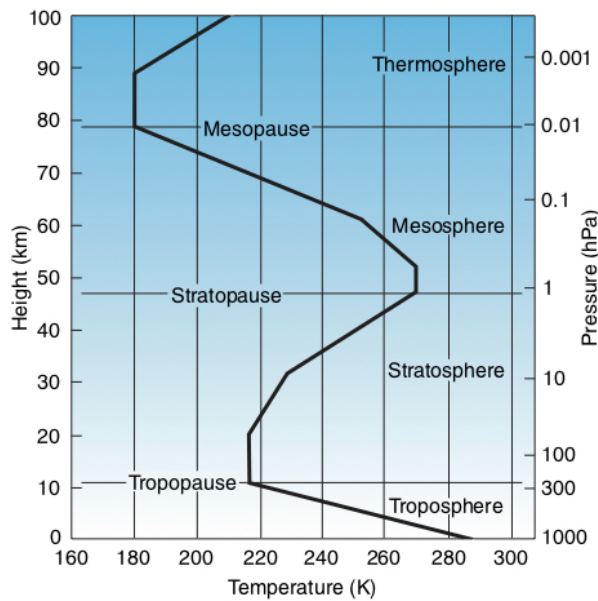
(2) Pressure is force per area. Weight is a force equal to the gravitational acceleration multiplied by the mass. The surface pressure of the atmosphere on Earth is about 10^5 Pa, where $1 \text{ Pa} = 1 \text{ N m}^{-2}$. Earth's radius is 6,400 km. Estimate the total mass of Earth's atmosphere without using a calculator. Keep only one significant digit. The total mass of Earth is 6×10^{24} kg and the mass of Earth's oceans is 10^{21} kg. How does the mass of Earth's atmosphere compare to the total mass and the mass of the oceans?

(3) As Caesar lay dying in the Theater of Pompey on the Ides of March 44 BC, he breathed one last breath. As you inhale now, how many molecules from Caesar's last breath do you breathe in? Again, make an "order-of-magnitude" estimate and do not use a calculator. Remember that Avogadro's number is 6×10^{23} molecules mol^{-1} . Air has a molecular mass of about 30 g mol^{-1} . Assume that Caesar's last breath has now been mixed throughout the entire atmosphere. You will have to estimate the volume of a breath, and you can assume that the density of air near the surface is 1 kg m^{-3} .

3.2 More Orientation and Estimation

Today we're going to continue our orientation to Earth's atmosphere and make some calculations to get a rough understanding of modern fossil fuel usage. Reread the introduction from last class to make sure you understand estimation. Remember to use scientific notation and pay careful attention to units for the estimation problems.

To build up vocabulary, take a look at the figure below. It shows an idealized typical "vertical temperature profile" of Earth's atmosphere. The lowest region, where we live, is called the troposphere. The surface is strongly heated by sunlight and transfers this heat to the lower atmosphere. This causes the air near the surface to become less dense and rise in a process called convection. Convection happens throughout the troposphere so that air in it is well-mixed. Above the troposphere is the stratosphere. The stratosphere is "stratified," with hotter air on top of colder air as a result of heating by absorption of sunlight by ozone. This makes vertical motion and mixing of air much harder in the stratosphere than in the troposphere. The tropopause separates the troposphere from the stratosphere. The troposphere and stratosphere contain 99.9% of the atmosphere, and will be the focus of this course. The other regions of the atmosphere only become important in certain specialized areas.



Exercises

(1) Watch this video (<https://youtu.be/KtwdaWIGFDQ>) of surface temperature from Jan/Feb 2014 and this video (<https://youtu.be/lm5jt3dyYxc>) of surface temperature from Jul/Aug 2014.

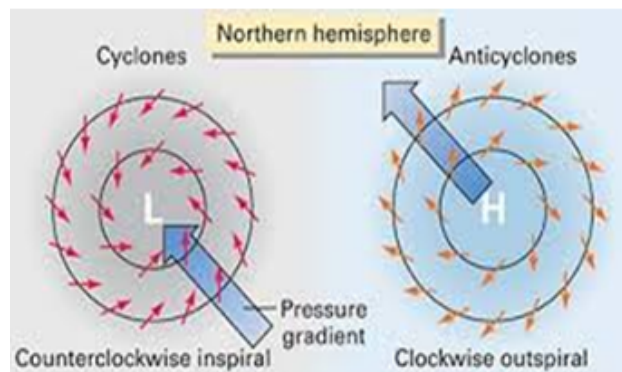
- A. For Jan/Feb, focus on the northern hemisphere, poleward of 30°N . Why are there two large cold regions?
- B. Why is there such a persistent blue spot at $(30^\circ\text{N}, 90^\circ\text{E})$?
- C. For Jul/Aug, focus on the northern hemisphere, poleward of 30°N . Why are the regions that were previously cold now warm?
- D. If you watch the two movies carefully you can detect large, eastwards moving swirls (weather systems) poleward of 30°N . When are the swirls most active in each hemisphere?

(2) What is the total mass of CO_2 put into the atmosphere by a 1-GW coal power plant per year? You may assume that the plant has an efficiency of $1/3$ and that burning coal releases 10^7 J kg^{-1} . Remember that coal is basically just carbon. Total world power consumption is 10^5 TW-h per year. How many 1-GW power stations would be needed to supply this power, assuming that they run continuously ($1 \text{ TW} = 10^3 \text{ GW}$)? The total mass of CO_2 in the atmosphere is $3 \times 10^{15} \text{ kg}$. Assuming the entire world's power supply is provided by coal, how many years would it take to double the amount of CO_2 in the atmosphere? Assume that no other process adds or removes CO_2 from the atmosphere and assume that humanity's power usage stays constant.

(3) What is the mass of CO_2 emitted by a typical car in the US per year? Assume it is driven 10^4 mi and gets 20 mpg. You may approximate gasoline as made entirely of carbon. If on average there is a car for every two people in the US, what is the total mass of CO_2 emitted by cars in the US per year?

3.3 Pressure and Cyclones

A cyclone is a relatively small part of the atmosphere (maybe on a scale of about 1000 km) that rotates around a region of low pressure (see the diagram below). This rotation is due to the Coriolis force, which we will learn about later in the course. The direction of rotation is counterclockwise in the Northern Hemisphere and clockwise in the Southern Hemisphere. In either case, this direction is referred to as “cyclonic.” Anticyclones, on the other hand, have high pressure at their center and rotate in the opposite direction. Cyclones have air converging near the surface, which generally leads to air rising, which causes precipitation and the formation of clouds. Extratropical cyclones, also called baroclinic eddies, are the storms we are familiar with in Chicago. They are particularly common in the winter. The reason is that the North-South gradient in surface temperature is ultimately what drives them, and this gradient is stronger in the winter. We usually get a new one coming through every 3–5 days. Tropical cyclones are driven by a different mechanism, which we will learn more about later. Tropical cyclones are called hurricanes in the Atlantic ocean and eastern Pacific, typhoons in the western Pacific, and cyclones in the Indian and South Pacific. Cyclones generally get blown around by the prevailing winds. There are also larger scale lows and highs in the atmosphere that persist in roughly the same place for entire seasons. These can deviate winds and lead to seasonal shifts in weather.



Exercises



(1)

- A. If the surface is roughly at 1000hPa (1 hPa=100 Pa), what percentage of the atmosphere's mass is above 500hPa?
- B. Watch this video (<https://youtu.be/skgiZhTFUH8>) of temperature at 500hPa from Jan/Feb 2014. Do you see anomalous blobs like we saw in the surface temperature videos from last class? Why, or why not?
- C. Now watch this video (<https://youtu.be/VpndGnLym8I>) of temperature at 500hPa from Jul/Aug 2014. Compare the two movies. What part of the atmosphere is coldest (at 500hPa)?

(2)

- A. Watch this video (<https://youtu.be/rXT8WaYXKtQ>) of surface pressure from Jan/Feb 2014. Why is most of the continental area distinctly blue?
- B. Now compare with this video (<https://youtu.be/hzQhbfuEyC0>) of surface pressure from Jul/Aug 2014. Over the ocean, which latitude generally has the lowest lows?
- C. Focus on the moving lows in the mid-latitudes in Jul/Aug. As they move eastwards they tend to rotate. Which direction do they rotate in? These lows are called cyclones and the direction they rotate in is called cyclonic.
- D. Can you identify persistent highs in Jul/Aug? At which latitude do you generally find them? Search on google to see what these are called.
- E. What are the two large lows in the northern hemisphere of the Jan/Feb movie called? (google them) How persistent are they in the movie?
- F. Focus on the Jul/Aug movie. You will occasionally see small lows (blue/white blobs) pop up equatorwards of 30°N which then move westwards and polewards. These are tropical cyclones. Find and track some of them through their life cycle.
- G. Watch the blob that hits Japan on July 9, 2014. This blob had a name - what is it?

(3) There are pictures of two tropical cyclones below. For each storm: Is the pressure at the center of the storm anomalously high or low? Which hemisphere is it in?



3.4 Composition and the Ideal Gas Law

The ideal gas law is

$$PV = nR^*T, \quad (1)$$

where P is the pressure in Pa, V is the volume in m^3 , n is the number of moles, $R^*=8.3 \text{ J mol}^{-1} \text{ K}^{-1}$ is the ideal gas constant, and T is the temperature in K. In atmospheric science we usually rewrite this equation as

$$P = \rho RT, \quad (2)$$

where $\rho = \frac{n^*M}{V}$ is the gas density in kg m^{-3} , M is the molecular mass of the gas mixture in kg mol^{-1} (you probably learned molecular masses in g mol^{-1} , so don't forget to convert to kg mol^{-1}), and

$$R = \frac{R^*}{M} \quad (3)$$

is called the gas constant. The gas constant, R , is measured in $\text{J kg}^{-1} \text{ K}^{-1}$, and is specific to the particular gas mixture under consideration (it depends on the molecular mass). If we are considering a mixture of gases, then the apparent molecular weight is the molar-fraction-weighted average of the molecular weights

$$M = \sum_i f_i M_i, \quad (4)$$

where f_i is the molar fraction of the i th component and M_i is the molecular weight of the i th component.

Exercises

(1) Stars increase their luminosity with time, such that the Sun was about 25% less luminous 4 billion years ago than it is today. Nevertheless, we have strong evidence that Earth's climate was fairly similar to how it is now, rather than completely frozen over. Carl Sagan, an alumnus of the University of Chicago, was one of the first people to point out that this is an interesting mystery, and to try to solve it [2]. Most people now think that the solution is that some greenhouse gases (CO_2 , CH_4 , and even H_2) had much higher concentrations on early Earth than they do today.

- A. The modern atmosphere is composed of about 80% N_2 and 20% O_2 by molar fraction or volume when dry. Calculate the mean molecular weight of dry air and the dry gas constant. You can use a calculator for this (you don't need to estimate).
- B. Early Earth had almost no O_2 . There may have been large amounts of CO_2 to keep the planet warm. Assume that Early Earth's dry atmosphere was composed of 80% N_2 and 20% CO_2 . Calculate the mean molecular weight of dry air and the dry gas constant.
- C. Assume that early Earth had a surface pressure of 1 bar= 10^5 Pa. What was the partial pressure of CO_2 at the surface? Remember that the partial pressure is equal to the total pressure times the molar fraction.
- D. Calculate the total mass in the entire column of air per unit area of this atmosphere.
- E. Using the mean molecular mass, calculate the number of moles in the entire column of air per unit area of this atmosphere.
- F. Calculate the number of moles of CO_2 in the entire column of air per unit area of this atmosphere.
- G. Calculate the mass of CO_2 in the entire column of air per unit area of this atmosphere. You should have found that the mass of CO_2 in the entire column of air per unit area is greater than the partial pressure of CO_2 at the surface divided by the surface gravity. The reason is that the partial pressure of CO_2 at the surface results from the weight of both N_2 and CO_2 throughout the atmosphere, and N_2 has a lower molecular mass.
- H. What is the mass fraction of CO_2 in the atmosphere?
 - I. Suppose we want to increase the amount of CO_2 so that it represents 50% of the atmosphere by molar fraction. What would the new partial pressure of CO_2 and total atmospheric pressure have to be?
 - J. What would the new the mass of CO_2 in the entire column of air per unit area be?
 - K. What would the new mass fraction of CO_2 in the atmosphere be?

3.5 Virtual Temperature

One issue that complicates a lot of things on Earth is that the atmosphere has a variable amount of water vapor, depending on the temperature and atmospheric motion. This means that the gas constant changes with time and as you move around. This makes it complicated to calculate the density, which we often need to figure out if air is going to convect, or mix vertically because denser air is above less dense air (atmospheric convection is slightly more complicated than this, but we'll get to that later). Here we'll try to deal with this. First, note that the ideal gas law applies to the dry component of air: $P_d = \frac{m_d}{V} R_d T$, where P_d is the partial pressure of dry air, m_d is the mass of dry air, and R_d is the dry air gas constant. The ideal gas law also applies to the moist component of air: $e = \frac{m_v}{V} R_v T$, where e is the partial pressure of water vapor, m_v is the mass of water vapor, and R_v is the gas constant of water vapor. By Daulton's law, we also know that the total pressure is the sum of the partial pressures: $P = P_d + e$. Finally, we can write the total density as: $\rho = \frac{m_d + m_v}{V}$. If we solve these equations for density we get:

$$\rho = \frac{P_d}{R_d T} + \frac{e}{R_v T} = \frac{P - e}{R_d T} + \frac{e}{R_v T} = \frac{P}{R_d T} \left(1 - \frac{e}{P} + \frac{R_d e}{R_v P} \right) = \frac{P}{R_d T_v},$$

where we have defined the virtual temperature, T_v , as:

$$T_v = \frac{T}{1 - \frac{e}{P}(1 - \epsilon)}, \quad (5)$$

where $\epsilon = \frac{R_d}{R_v} = \frac{M_v}{M_d}$. Using the virtual temperature allows us to use the ideal gas law with a constant gas constant (R_d) rather than a variable gas constant (that depends on the amount of water vapor) in order to calculate the air density. The cost is that we have to define a new temperature, the virtual temperature, which depends on the amount of water vapor. Physically, the virtual temperature is the temperature dry air would need in order to have the same density as the moist air under consideration. On modern Earth $M_v < M_d$, so adding moisture to air makes it less dense. This means that on modern Earth the virtual temperature is always greater than or equal to the temperature.

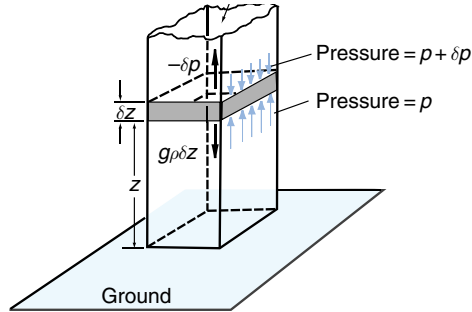
Exercises

(1) Let's think a bit about virtual temperature.

- A. Explain how the virtual temperature relates to density. If air at a constant pressure has a higher virtual temperature, does that mean it is more or less dense?
- B. On modern Earth $\epsilon = \frac{M_w}{M_d} = 0.622$. The molecular weight of water vapor is less than the molecular weight of dry air. Use this fact to explain why at a constant temperature adding moisture to the atmosphere should increase the virtual temperature.
- C. Something we will learn soon is that the amount of water vapor that can be present in the atmosphere increases exponentially with temperature via the Clausius-Clapeyron equation. Use this fact to explain why there are two reasons that the virtual temperature should increase with temperature on modern Earth. Use this to explain why Kris Bryant is more likely to hit a ball onto Waveland Avenue (out of Wrigley to left) in August than in April.
- D. Suppose that early Earth was composed of a mixture of 40% N_2 and 60% H_2 . Calculate the new dry gas constant and ϵ . You can use a calculator for this.
- E. Assuming that there is surface water on early Earth, explain why now as the temperature increases, the virtual temperature can either increase or decrease. Explain why this is counterintuitive.
- F. Suppose that early Earth was composed of a fraction χ of N_2 and $1 - \chi$ of H_2 . For large χ , virtual temperature always increases as temperature increases. For small χ , virtual temperature can either increase or decrease as temperature increases. There is a critical value of χ , χ_c , that demarcates these two regions. Calculate χ_c .

3.6 Hydrostatic Balance and the Scale Height

First let's derive the hydrostatic equation. This works for an atmosphere in hydrostatic balance (not accelerating vertically). It describes a balance between a net effect of pressure pushing up and the weight (force due to gravity) of air pulling down. Consider the diagram below:



Let's do a force balance on the darkened slice of the column of air. The bottom of this slice has a pressure force pushing up of $P(z) \times A$, where A is the horizontal area of the column. The slice has a pressure force pushing down on it of $-P(z + \delta z) \times A$. The gravitational force of the air pushes down and is $-\rho \times A \times \delta z \times g$ (mass times gravitational acceleration). So assuming that there is no net vertical acceleration, the vertical force balance is:

$$P(z) \times A - P(z + \delta z) \times A - \rho \times A \times \delta z \times g = 0.$$

We can cancel A and rearrange this equation as $\frac{P(z+\delta z)-P(z)}{\delta z} = -\rho g$, or in the infinitesimal limit

$$\frac{dP}{dz} = -\rho g. \quad (6)$$

This is the hydrostatic equation and it describes a force balance between the vertical gradient of pressure and the weight of the air. Since the pressure goes to zero as the height goes to infinity, we can integrate vertically to find that

$$P(z) = \int_z^{\infty} \rho(z) g dz. \quad (7)$$

A related concept is the geopotential, Φ , which is defined as the work that must be done against Earth's gravitational field to raise a mass of 1 kg from sea level to the height under consideration. $d\Phi = g dz$, and we can integrate to find that

$$\Phi(z) = \int_0^z g dz \approx gz, \quad (8)$$

since g is roughly constant throughout the atmosphere. We will hear more about the geopotential later in the course.

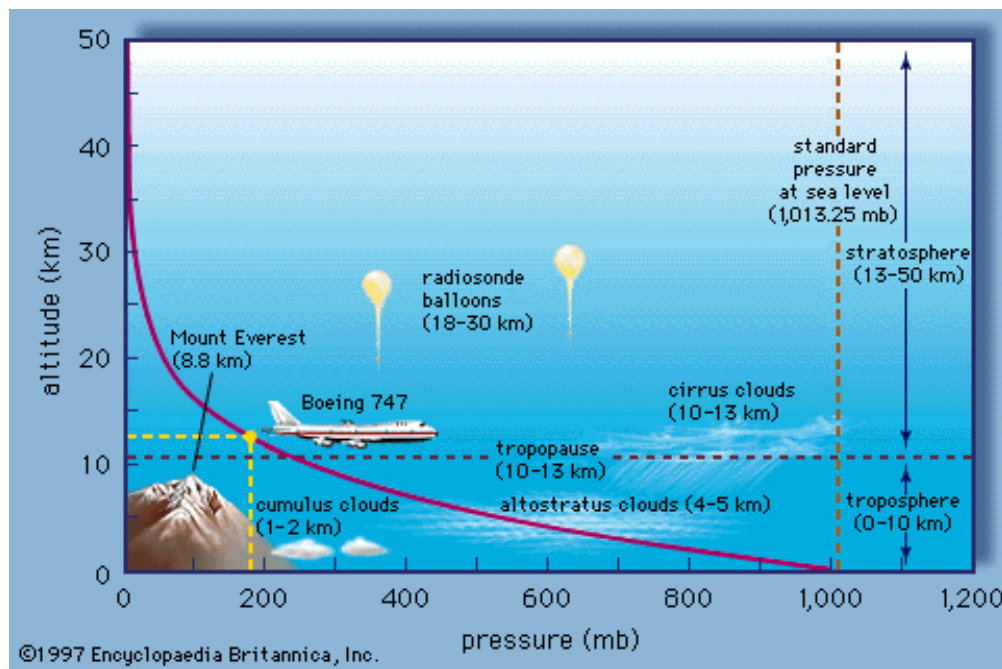
Finally, let's derive an equation for how the pressure decays with height. We can combine the hydrostatic equation ($\frac{dP}{dz} = -\rho g$) and the ideal gas law ($P = \rho RT$) to eliminate ρ : $\frac{dP}{dz} = -\frac{g}{RT} P$. If we assume that T is constant, we can define

$$H = \frac{RT}{g} \quad (9)$$

and integrate this equation to find

$$P(z) = P(z = 0) \exp\left(-\frac{z}{H}\right). \quad (10)$$

So we can see that pressure decays exponentially in height with a scale of H , as shown in the diagram below. H is therefore called the atmospheric scale height. We can understand the scale height physically by noting that the scale height is reached when $gH \approx RT$. In other words a scale height is where thermal energy roughly equals gravitational potential energy. The scale height is telling us about how well a planet can hold onto it's atmosphere. If the scale height is small then the planet is holding it's atmosphere tightly, but if the scale height is large it is holding it only loosely. Notice that since R depends on M , the molecular mass, the scale height depends on the molecular mass of the atmosphere.



Exercises

- (1) Show that the units of H are meters.
- (2) Estimate the scale height, H , in Earth's lower atmosphere to one significant digit.
- (3) The Colorado Rockies play at Coors Field in Denver, the "Mile High City." Estimate the ratio of the air density at Coors Field to that at sea level. Explain why the average baseball game played at Coors Field has about 11 total runs scored, whereas the average major league baseball game has about 8 total runs scored.
- (4) A normal human being will become nauseous and may lose consciousness if oxygen levels drop below 50% of those at sea level and is likely to die if oxygen levels drop below 30%. The summit of Mount Everest is at 8.85 km. Is it possible for a human to reach the summit of Mount Everest without an artificial oxygen supply?
- (5) Olympus Mons on Mars stands 22 km above local relief. If Earth had a mountain with a summit 22 km above sea level, would it be possible for a human to climb it without an artificial oxygen supply?

3.7 The Lapse Rate and Potential Temperature

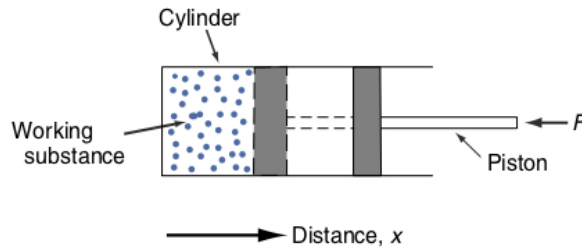
Energy comes in different flavors. The first law of thermodynamics says that energy is conserved. If you lose some in one flavor, you have to gain it in another flavor. One of the flavors is internal energy. Even if a parcel of air seems motionless on a large scale, its molecules still have kinetic and potential energy, which we call internal energy. Temperature characterizes the kinetic internal energy of molecules. Other flavors of energy are heat added to the system and work done by the system. We can write energy conservation in differential form for a parcel of air as follows

$$dq = du + dw, \quad (11)$$

where dq is the heat added to the air parcel, du is the change in internal energy of the air parcel, and dw is the work done by the air parcel. This equation says that if we add heat to an air parcel, it goes into some combination of increasing the temperature of the parcel or allowing the parcel to do work on its surrounding environment.

To think about work done by an air parcel, let's consider the air in the piston shown in the figure below. The work done by the air in the chamber is the external force it is pushing against multiplied by the distance it pushes ($dW = Fdx$). If we assume that the force pushing in on the chamber is from the pressure of the air outside, then we find that $F = pA$, where A is the area of the stopper. The change in volume of the parcel is just its area multiplied by the distance moved perpendicular to the stopper ($dV = Adx$), so we can write $dW = pdV$. We won't prove it here, but this also works for an air parcel that isn't in a chamber. If w is the work per unit mass and $\alpha = \frac{1}{\rho}$ is the specific volume of the air, or volume per unit mass, then we can also write this as $dw = pd\alpha$ and we can rewrite the 1st law of thermodynamics as

$$dq = du + pd\alpha. \quad (12)$$



The specific heat is the amount of heat we have to add to a substance to increase its temperature by 1 K. The specific heat at constant volume is $c_v = \left(\frac{dq}{dT}\right)_v$, where the subscript v means we take the derivative at constant volume. At constant volume $dq = du$ (all the heat goes into increasing the temperature, and none goes into doing work) so that $c_v = \left(\frac{du}{dT}\right)_v$. For an ideal gas u depends only on T (we didn't show this, but trust me), so we can drop the constant volume assumption and get $c_v = \frac{du}{dT}$, or $du = c_v dT$. This means we can rewrite the 1st law as

$$dq = c_v dT + pd\alpha. \quad (13)$$

The specific heat at constant pressure is defined as $c_p = \left(\frac{dq}{dT}\right)_p$. It is often more useful than the specific heat at constant volume in atmospheric sciences because gases in the atmosphere tend

to be at constant pressure rather than volume. Using the product rule we can rewrite the 1st law as $dq = c_v dT + d(p\alpha) - \alpha dp$. Using the ideal gas law, $d(p\alpha) = d(\frac{p}{\rho}) = d(RT) = R dT$, so that $dq = (c_v + R)dT - \alpha dp$. Or at constant pressure ($dp = 0$), $dq = (c_v + R)dT$, which means that $c_p = (\frac{dq}{dT})_p = c_v + R$. This means we can also write the 1st law as

$$dq = c_p dT - \alpha dp. \quad (14)$$

Now let's think about the temperature lapse rate, or decrease in temperature with height in the atmosphere. Let's consider an air parcel that changes height with no heat added or subtracted ($dq = 0$), which means the motion is an "adiabatic process." We now have the tools to infer the lapse rate in this situation, which is called the "dry adiabatic lapse rate" and is written $\Gamma_d = -(\frac{dT}{dz})_{q=0}$. We use the word "dry" because the condensation of moisture releases a lot of heat. The atmosphere tends to roughly follow this dry adiabatic lapse rate at least sometimes in regions that are dry like deserts, and cold regions at the poles or high in the atmosphere. With $dq = 0$, we have $0 = c_p dT - \alpha dp$. Using the hydrostatic equation ($dp = -\rho g dz = -\frac{g}{\alpha} dz$) we find that $0 = c_p dT + g dz$ so that we can write the dry adiabatic lapse rate as

$$\Gamma_d = -(\frac{dT}{dz})_{q=0} = \frac{g}{c_p}. \quad (15)$$

Note that deriving the dry adiabatic lapse rate required the 1st law of thermodynamics (conservation of energy), the ideal gas law, and the hydrostatic equation. In Earth's atmosphere, $c_p \approx 10^3 \text{ J K}^{-1} \text{ kg}^{-1}$ and $g \approx 10 \text{ m s}^{-2}$, so that $\Gamma_d \approx 10^{-2} \text{ K m}^{-1} = 10 \text{ K km}^{-1}$.

Finally, let's define a new quantity called potential temperature. Potential temperature is nice because an air parcel has constant potential temperature if no heat is added or subtracted from it. Let's return to the 1st law with no heat exchange ($0 = c_p dT - \alpha dp$). The ideal gas law tells us that $\alpha = \frac{RT}{p}$ so that $0 = c_p \frac{dT}{T} - R \frac{dp}{p}$. Integrating we find that $const. = c_p \log(T) - R \log(p)$ which we can exponentiate to rewrite as $T = (const.) p^{\frac{R}{c_p}}$. This equation tells us that for an adiabatic process the temperature and pressure have to be related in this way for some constant that we can find. At surface pressure ($p = p_0$), we will define the temperature as $T = \theta$, which will be the potential temperature. So the constant equals $\theta p_0^{-\frac{R}{c_p}}$. Notice that since p_0 is a constant, θ needs to be a constant as well. We can rearrange to find

$$\theta = T \left(\frac{p_0}{p}\right)^{\frac{R}{c_p}}, \quad (16)$$

which defines the potential temperature. The bottom line is that any air parcel that moves adiabatically will have a constant potential temperature (θ). If it goes to lower pressure and decompresses, its temperature will decrease, but its potential temperature will stay constant. If it goes to higher pressure and compresses, its temperature will increase, but its potential temperature will stay constant.

Exercises

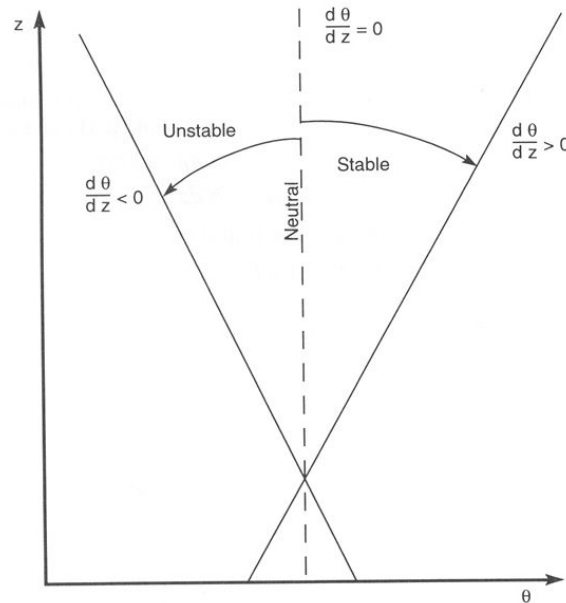
(1) Explain the following:

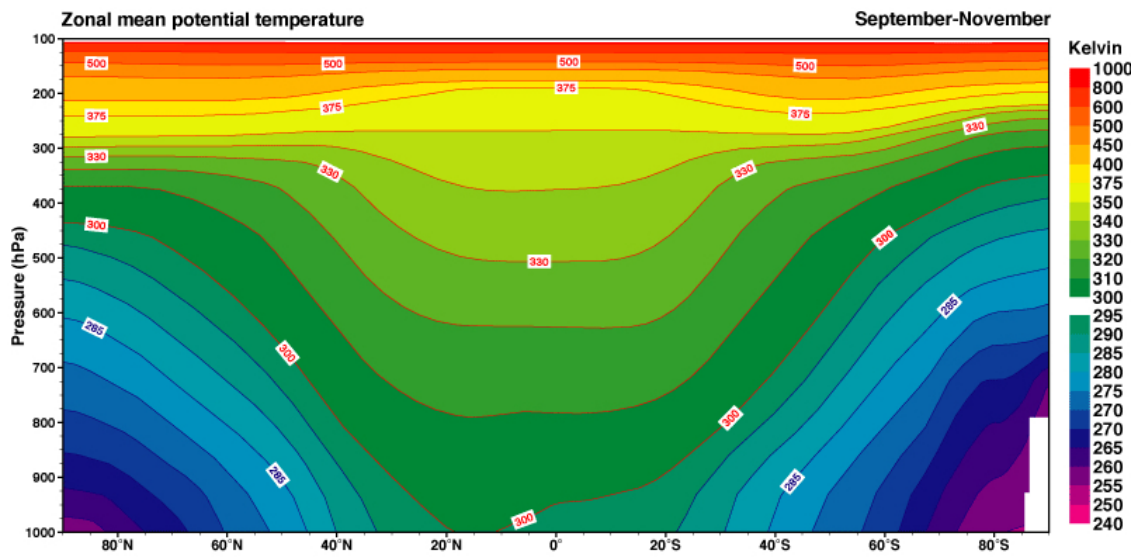
- A. Air released from a tire is cooler than its surroundings.
- B. The potential temperature in a dry convecting atmosphere is constant.
- C. In Greek mythology, Icarus falls from the sky because he flew too high and close to the Sun so the wings his father, Daedalus, made for him get too hot and melt. Assuming that Icarus was flying in the troposphere, does this make sense?
- D. Students are taught that when air is heated it expands. Then they are taught (but not in the same lesson) that when air expands it cools. Some students find these two explanations to be contradictory. Please resolve the apparent contradiction.
- E. An airplane flies in the troposphere of a dry atmosphere. The air outside the airplane is very cold. When this air is brought into the pressurized cabin of the airplane, it has the same pleasant temperature for the passengers that they experienced on the ground before taking off.
- F. How does the potential temperature of air at the surface, in the atmosphere at the plane's altitude, and inside the pressurized cabin compare?

3.8 Stability

The lapse rate and potential temperature are important concepts, so we're going to continue learning about them today. The problems will continue to focus on these general issues, and these notes will focus on how you can use the lapse rate and potential temperature to think about atmospheric stability, or whether vertical convection will occur.

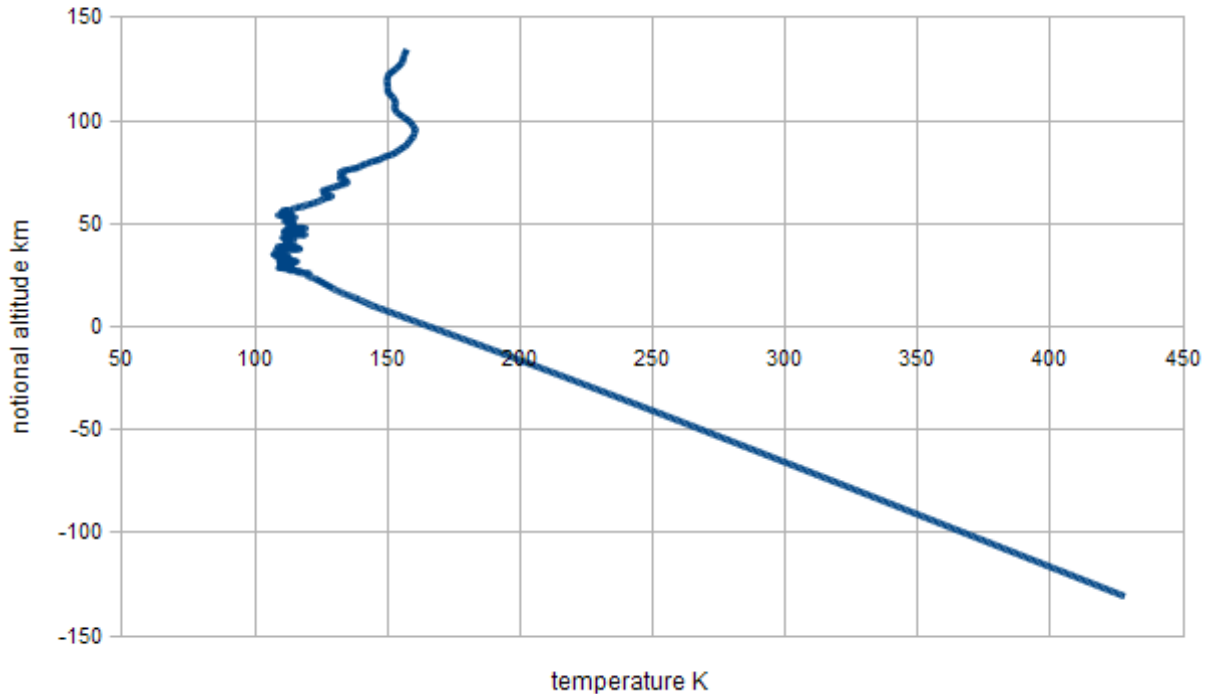
If an air parcel moves adiabatically vertically, it will follow the dry adiabatic lapse rate and have a constant potential temperature. If the actual atmosphere has a lapse rate that is greater than the dry adiabatic lapse rate, then a parcel lifted from the surface will have a higher potential temperature than the surrounding atmosphere at height (and therefore a higher temperature). This means it will be bouyant (less dense than the surroundings). This is an unstable situation and convection (strong vertical mixing) will occur until the lapse rate is equal to the dry adiabatic lapse rate. This means that an atmosphere cannot sustain a lapse rate higher than the dry adiabatic lapse rate, or such an atmosphere is unstable (see first figure below). During the day in the troposphere the Sun is continually heating the surface, increasing the lapse rate and destabilizing the atmosphere so that convection occurs. On the other hand, if an atmosphere has a lapse rate less than the dry adiabatic lapse rate, as it does in the stratosphere, this is a stable situation and no convection needs to occur. The tropical troposphere can also have a lapse rate less than the dry adiabatic lapse rate because of water vapor condensation, which we will learn about soon. As the second figure below shows, we can see this as an increase in the potential temperature with height in the zonal mean (averaged over longitude) potential temperature profile. This means it is stable to dry convection, and the potential temperature increases with height. As we will learn, the tropical troposphere can still be unstable to moist convection in this configuration. The figure shows that the extratropics are also generally stable to dry convection, which results from atmospheric heat transport from lower latitudes and altitudes to higher latitudes and altitudes.





Exercises

(1) The Galileo probe descended into Jupiter's atmosphere in July, 1995 [3]. The figure below shows temperature data (blue line) retrieved from the probe's descent. The data start when the probe entered Jupiter's atmosphere. The data end at the bottom right of the plot because the probe failed. The pressure was about 23 bar and the temperature was about 425 K when the probe failed. The notional altitude is taken to be zero at a temperature of 166 K in this plot. The pressure at this altitude is equal to Earth's surface pressure.



- Notice that Jupiter has a stratosphere and a troposphere. At roughly what temperature and notional altitude is the tropopause located?
- Jupiter's atmosphere is composed mainly of H_2 . What is the dry gas constant for Jupiter's atmosphere?
- The gravitational acceleration in this region of Jupiter's atmosphere is 25 m s^{-2} . Estimate the scale height of Jupiter's atmosphere at Earth's surface pressure. Compare this to the scale height of Earth's atmosphere near Earth's surface. Also compare to the scale height of Jupiter's atmosphere where the probe failed.
- Notice that we can rewrite the equation for the scale height as $MgH = R^*T$, where M is the molecular mass and R^* is the ideal gas law constant in $\text{J mol}^{-1} \text{ K}^{-1}$. What types of energy do the left and right sides of this equation represent? Does this help you understand what the scale height represents better?

- E. Estimate the pressure at Jupiter's tropopause. How does this compare to the pressure of Earth's tropopause?
- F. The heat capacity at constant pressure (C_p) of an ideal diatomic gas in this temperature range is $3.5R$, where R is the (compound specific) gas constant in $\text{J K}^{-1} \text{kg}^{-1}$. Make a prediction for the temperature lapse rate on Jupiter. Now estimate the temperature lapse rate from the plot and compare to your prediction.

3.9 Water Vapor in the Atmosphere

Today we're going to think more about water vapor in the atmosphere. Water vapor is important because it affects the air density and the ability of humans to lose excess heat through sweating. It is highly variable in the atmosphere and we need to define variables to keep track of it.

The partial pressure of water vapor in the atmosphere, or vapor pressure, is often denoted e . The mass of water vapor (m_v) divided by the mass of dry air (m_d) is called the mixing ratio of water vapor (w),

$$w = \frac{m_v}{m_d}. \quad (17)$$

The specific humidity (q) is the ratio of water vapor mass to total air mass, including both dry air and water vapor,

$$q = \frac{m_v}{m_d + m_v} = \frac{w}{1 + w}. \quad (18)$$

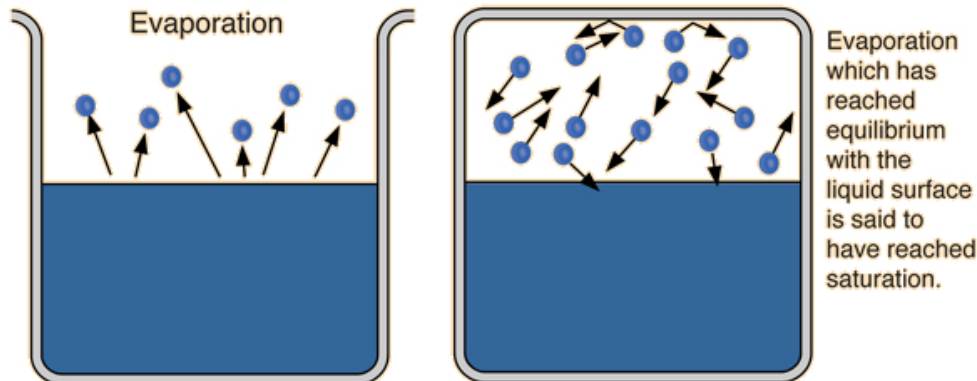
If the air is fairly dry, then $q \approx w$. The vapor pressure is the molar fraction of water vapor multiplied by the total pressure (p), or $e = \frac{n_v}{n_d + n_v} p$. Using the masses (little m) and molecular masses (big M),

we can rewrite this as $e = \frac{\frac{m_v}{M_v}}{\frac{m_d}{M_d} + \frac{m_v}{M_v}} p = \frac{\frac{m_v}{M_d}}{\frac{m_d}{M_d} + \frac{m_v}{M_d}} p$, or

$$e = \frac{w}{w + \epsilon} p, \quad (19)$$

where $\epsilon = \frac{M_v}{M_d}$.

Liquid water molecules are in constant motion. This kinetic energy is measured by temperature. Sometimes the molecules burst across the liquid surface into the surrounding air, which is a process we call evaporation (left panel of figure below). On the other hand, water molecules in gaseous form also have kinetic energy, which sometimes causes them to bash into the liquid water and join it. If we put liquid water in an enclosed container, these two processes will eventually balance each other (right panel of figure below). In other words in any given amount of time, as many liquid water molecules will be crossing the liquid threshold and becoming gaseous as gaseous water molecules will be crashing into the liquid and becoming liquid. The water vapor partial pressure when this equilibrium is established is called the saturation vapor pressure (e_s).



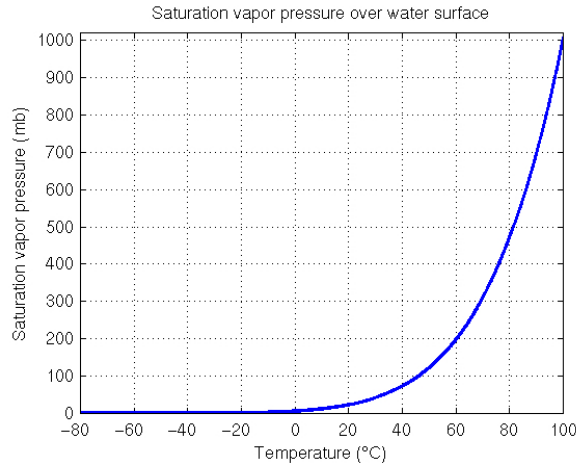
The general term for this type of phase transition boundary is a Clausius-Clapeyron relationship, and this term is used for the water vapor pressure in Earth's atmosphere. The Clausius Clapeyron relationship tells us that the saturation vapor pressure is a strong function of temperature (figure below). For temperatures below 0°C, e_s is very close to zero, and the air is almost completely dry. For a temperature of 100°C, e_s is equal to the standard atmospheric surface pressure. In fact, this is what defines the boiling point of water. At normal temperatures on Earth's surface, the saturation vapor pressure increases about 7% per degree Celcius of warming. Another way to measure water is in terms of the relative humidity,

$$RH = 100 \frac{w}{w_s}, \quad (20)$$

or the percentage of water vapor mixing ratio relative to the saturation water vapor mixing ratio.

Water vapor and dry atmosphere satisfy the ideal gas law idependently, so $w = \frac{\rho_v}{\rho_d} = \frac{\frac{e}{R_v T}}{\frac{p-e}{R_d T}} = \frac{R_d}{R_v} \frac{e}{p-e} = \varepsilon \frac{e}{p-e}$, where we have used $\varepsilon = \frac{R_d}{R_v} = \frac{M_v}{M_d}$. This means we can rewrite the relative humidity as

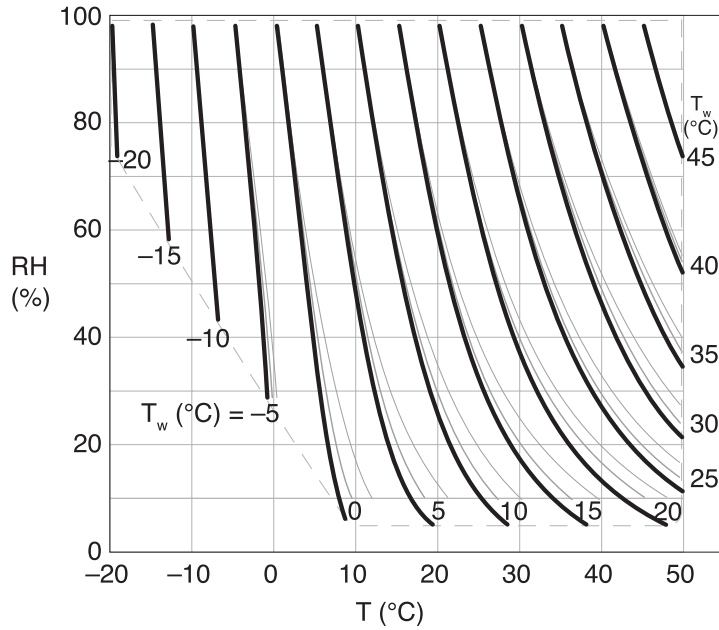
$$RH = 100 \frac{\frac{e}{p-e}}{\frac{e_s}{p-e_s}} = 100 \frac{e}{e_s} \frac{p-e_s}{p-e} \approx 100 \frac{e}{e_s}. \quad (21)$$



The dew point (T_d) is the temperature to which air must be cooled at constant pressure in order for it to be saturated in water vapor. So for air with a water vapor mixing ratio of w ,

$$w = w_s(T_d). \quad (22)$$

The wet bulb temperature (T_w) is the temperature measured by a thermometer with a wet cloth covering its bulb. If there is enough circulation for the ambient air to pass through the cloth, water will evaporate into the ambient air until it is saturated, lowering the air temperature. So the wet bulb temperature is the temperature of a parcel of air cooled to saturation by the evaporation of water into it. In other words, the wet bulb temperature is the lowest temperature that can be achieved by evaporative cooling of a surface into ambient air (notice the analogy with human cooling via sweat). The dark lines in the figure below show contours of the wet bulb temperature at surface pressure for different ambient temperatures and relative humidities. As you can see, the drier the



air, the lower the wet bulb temperature. The lower left of this plot is cut off because the fit being used is unstable in that region, not for any physical reason.

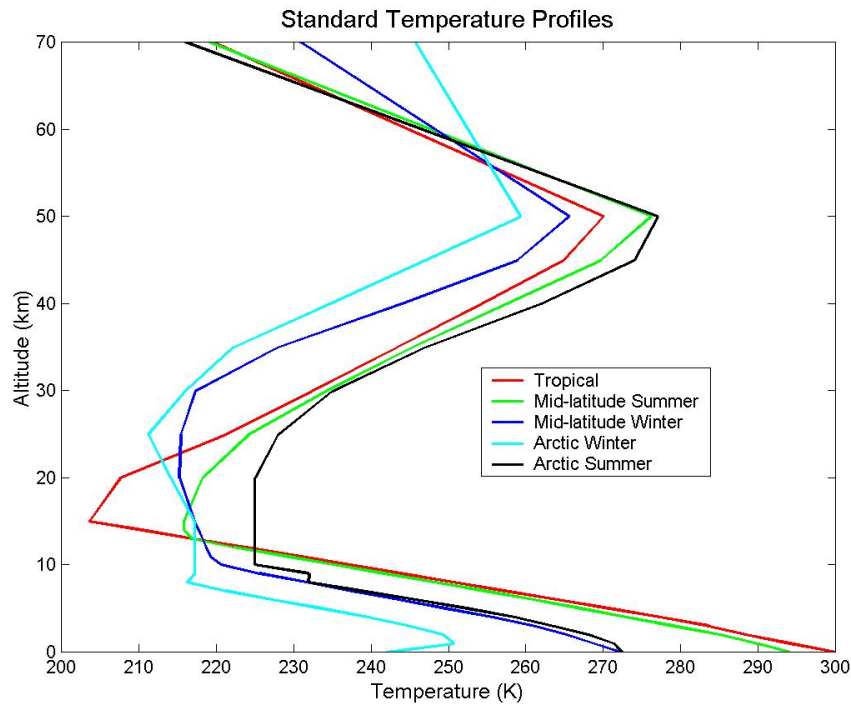
To understand the relationship between the dew point and the wet bulb temperature, let's imagine air with temperature T and a mixing ratio (w_0) that is less than saturation approaching a wet cloth. The dew point is defined by $w_0 = w_s(T_d)$. If the air passes slowly through the cloth, it reaches saturation via evaporation of water into it, and has a new mixing ratio (w_f). Note that $w_0 < w_f$. The new temperature of the air is the wet bulb temperature, which is defined by $w_f = w_s(T_w)$. Since $w_0 < w_f$, $T_d < T_w$. Both the dew point and the wet bulb temperatures must be less than the initial temperature, so $T_d < T_w < T$. In the special case where the air was initially saturated, $T_d = T_w = T$.

Exercises

- (1) Explain why hot weather causes more human discomfort when the air is humid than when it is dry.
- (2) How much liquid water must evaporate to lower the temperature of a person by 5°C ? Give your answer as a percentage of the mass of the person and assume that the latent heat of evaporation of water is $2.5 \times 10^6 \text{ J kg}^{-1}$ and the specific heat of the human body is $4.2 \times 10^3 \text{ J kg}^{-1} \text{ K}^{-1}$.
- (3) Solve for vapor pressure in terms of relative humidity, total pressure, and saturation vapor pressure. Use this to write the virtual temperature ($T_v = \frac{T}{1 - \frac{e}{p}(1 - \epsilon)}$) in terms of relative humidity and saturation vapor pressure, instead of in terms of vapor pressure. Do this exactly, then make an approximation assuming air with a low specific humidity.

3.10 Moist Convection

Let's consider an air parcel with water vapor in it that rises and experiences colder temperatures as it does. The vapor pressure is such a strong function of temperature that this will eventually lead to condensation if the parcel rises enough. Condensation releases heat, so the adiabatic assumption we used to derive the dry adiabatic lapse rate will be violated. In such a situation the actual lapse rate will be less than the dry adiabatic lapse rate because the heat released by condensation will raise the temperature of the air aloft where condensation occurs. We can see this in the plot below, which shows typical atmospheric temperature profiles in different regions of Earth and seasons. In all cases the observed lapse rate is less than the dry adiabatic lapse rate (10 K km^{-1}). We call the lapse rate in an atmosphere where the only non-adiabatic process we allow is the condensation of water vapor the moist adiabatic lapse rate. The moist adiabatic lapse rate is smaller if the water vapor mixing ratio is higher because more condensation and heating occurs when the air is lifted.



Now let's derive a moist analog to the potential temperature. We will call it the equivalent potential temperature, and it will be roughly constant in an atmosphere experiencing moist convection. Based on Lesson 06, we know that the 1st law of thermodynamics can be written as $\frac{dq}{T} = c_p \frac{dT}{T} - R \frac{dp}{p}$. From $\theta = T \left(\frac{p_0}{p}\right)^{\frac{R}{c_p}}$ we can find that $c_p \frac{d\theta}{\theta} = c_p \frac{dT}{T} - R \frac{dp}{p}$ so that $\frac{dq}{T} = c_p \frac{d\theta}{\theta}$. If the heat is released by condensation of water vapor, then $dq = -L_v dw_s$, where L_v is the latent heat, so that $\frac{d\theta}{\theta} = -\frac{L_v}{c_p T} dw_s$. Now notice that $d\left(\frac{w_s}{T}\right) = \frac{w_s}{T} \left(\frac{dw_s}{w_s} - \frac{dT}{T}\right) \approx \frac{dw_s}{T}$, using $\frac{dT}{T} \ll \frac{dw_s}{w_s}$ because a small fractional change in temperature causes a large fractional change in mixing ratio along the saturation curve. Therefore, assuming that L_v and c_p are constant, we can write $\frac{d\theta}{\theta} = -d\left(\frac{L_v w_s}{c_p T}\right)$, which we can integrate to find $\log \theta + const. = -\frac{L_v w_s}{c_p T}$. We choose the constant to be $\log \theta_e$, where

θ_e is the equivalent potential temperature, using the fact that the $\theta_e = \theta$ if $w_s = 0$. Now we can solve for the equivalent potential temperature as

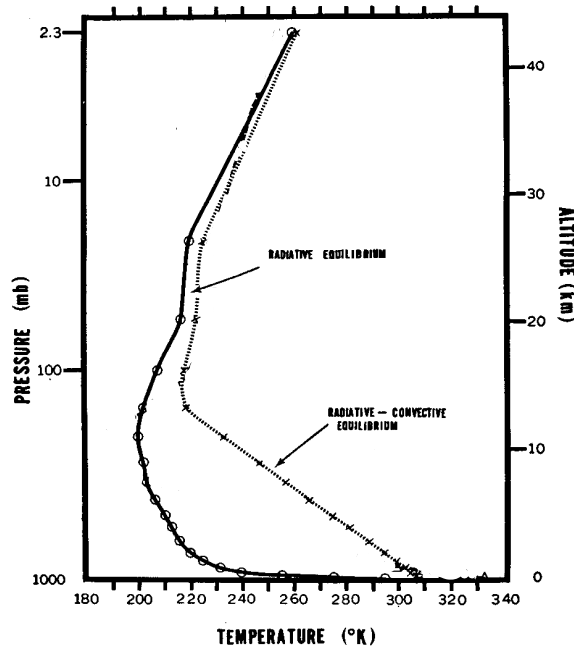
$$\theta_e = \theta \exp\left(\frac{L_v w_s}{c_p T}\right). \quad (23)$$

The equivalent potential temperature is the potential temperature that an air parcel would have if all of the water vapor it contains were condensed and the heat from the condensation used to heat the parcel. It is also the temperature that an air parcel would have if it were slowly raised in the atmosphere to a low enough temperature that essentially all of the water vapor in it had condensed, such that it retained all the heat that the condensation released, then slowly and adiabatically lowered to the surface.

Exercises

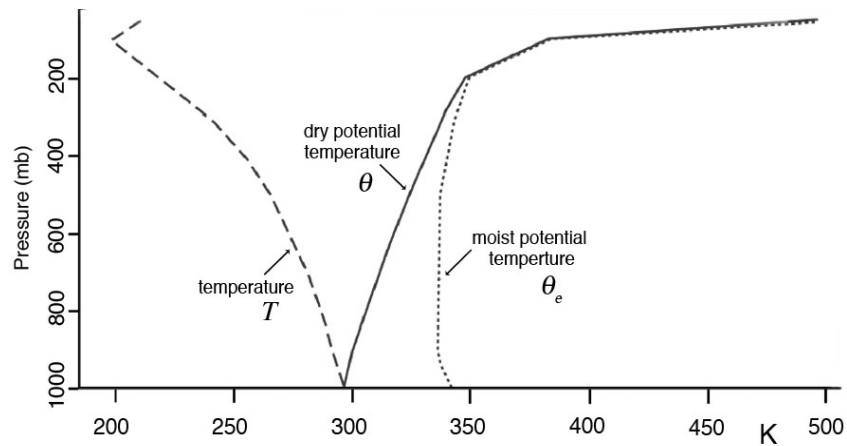
(1) The plot below shows results from numerical calculations using a one dimensional (vertical) model of the atmosphere [4]. The model can be run with convection artificially repressed, even if a real atmosphere would be convectively unstable. This is called radiative equilibrium. The model can also be run including a simple parameterization of moist convection. This is called radiative-convective equilibrium.

- A. Is the temperature lapse rate larger in the lowest few km with or without convection?
- B. Would it be possible for an atmosphere to exist in the radiative equilibrium state?
- C. For the atmosphere with convection, estimate the lapse rate from the plot. Is the lapse rate larger or smaller than the dry adiabatic lapse rate? Why?



(2) The figure below shows average profiles of temperature variables in the tropics.

- A. Explain why the moist potential temperature is roughly constant within the troposphere.
- B. Explain why the dry potential temperature increases with height.
- C. Explain why the moist potential temperature is always at least as large as the dry potential temperature.
- D. Explain why the moist potential temperature is equal to the dry potential temperature above a pressure of about 200 mb.
- E. Is the atmosphere stable or unstable to dry convection?



3.11 The Carnot Cycle and Hurricanes

A heat engine is a mechanism that does work by taking heat from a hot source (Q_1) and dumping it in a cold sink (Q_2). Heat engines work through cycles, and all the quantities in this paragraph are averaged over a cycle. By the conservation of energy, if the internal energy of the heat engine stays constant, the work it does has to be equal to the heat it takes from the source minus the heat it dumps into the sink ($W = Q_1 - Q_2$). The efficiency of a heat engine is the work it can do divided by the heat it takes from the source ($\eta = \frac{W}{Q_1} = \frac{Q_1 - Q_2}{Q_1}$).

Carnot imagined an idealized heat engine with the components shown in the figure below. The upper panel is a cylinder with a conducting base and insulating sides and top. It has a piston on top that can move without friction and can either be pushed down or pulled up. There is a gas inside the cylinder that can expand or contract. The bottom three panels are a hot reservoir at temperature T_1 , an insulating stand that doesn't allow heat transfer, and a cold reservoir at temperature T_2 . The reservoirs are so large that their temperature doesn't change if heat is taken out or put into them.

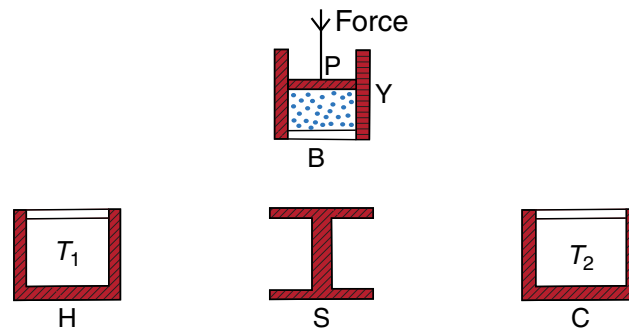


Fig. 3.19 The components of Carnot's ideal heat engine. Red-shaded areas indicate insulating material, and white areas represent thermally conducting material. The working substance is indicated by the blue dots inside the cylinder.

The Carnot cycle is shown in pressure-volume space in the diagram below. Imagine that we start at point B with the gas compressed (low volume). We place the cylinder on the hot reservoir, and it expands isothermally (at a constant temperature T_1) to point C, drawing heat Q_1 . We then place it on the insulating platform and allow it to expand adiabatically (no heat exchange) to point D, when it has temperature T_2 . Then we move it to the cold reservoir and it contracts isothermally at temperature T_2 , dumping heat Q_2 to the cold reservoir. Finally, we move it back to the insulating platform and it contracts adiabatically until it has temperature T_1 . We can then repeat the cycle if we want to. We already saw that $dW = pdV$, so the work done by or to the cylinder on each component is $W = \int pdV$. This means that the total work done by the cylinder over the cycle is represented by the blue area in the diagram. It turns out that the Carnot cycle represents the most efficient heat engine possible. That means that the efficiency of the Carnot cycle is the theoretical maximum efficiency of a heat engine.

Now let's calculate the efficiency of the Carnot cycle. The ideal gas law can be written $pV =$

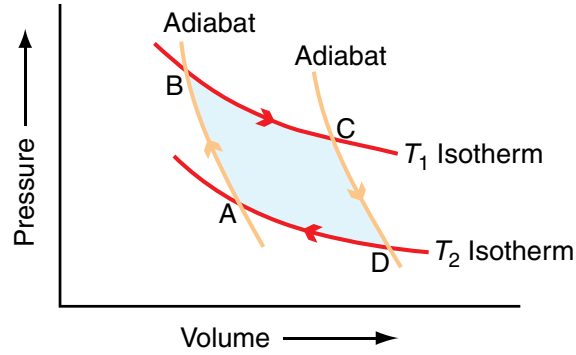


Fig. 3.20 Representations of a Carnot cycle on a p - V diagram. Red lines are isotherms, and orange lines are adiabats.

mRT , where m is the mass of gas in the cylinder and we have used $\rho = \frac{m}{V}$. Two components of the cycle occur at constant temperature (isothermal), and the mass of gas in the cylinder is constant. This means that the quantity pV is constant for the isothermal components of the cycle, so that $p_B V_B = p_C V_C$ and $p_A V_A = p_D V_D$. On the adiabatic components of the cycle the potential temperature, θ , is a constant. So $\theta = T \left(\frac{p_0}{p} \right)^{\frac{R}{c_p}} = \left(\frac{p}{\rho R} \right) \left(\frac{p_0}{p} \right)^{\frac{R}{c_p}}$ is constant, where we have used the ideal gas law. Since the density is inversely proportional to the volume ($V = \frac{\text{const.}}{\rho}$) for a constant amount of gas, $V p^{1-\frac{R}{c_p}} = V p^{\frac{c_v}{c_p}}$ is constant, where we have used $c_p = c_v + R$. We can rewrite this to find that pV^γ is constant, with $\gamma \equiv \frac{c_p}{c_v}$. This means $p_A V_A^\gamma = p_B V_B^\gamma$ and $p_C V_C^\gamma = p_D V_D^\gamma$. We now have four equations that we can use to eliminate the pressures and find that $\frac{V_C}{V_B} = \frac{V_D}{V_A}$.

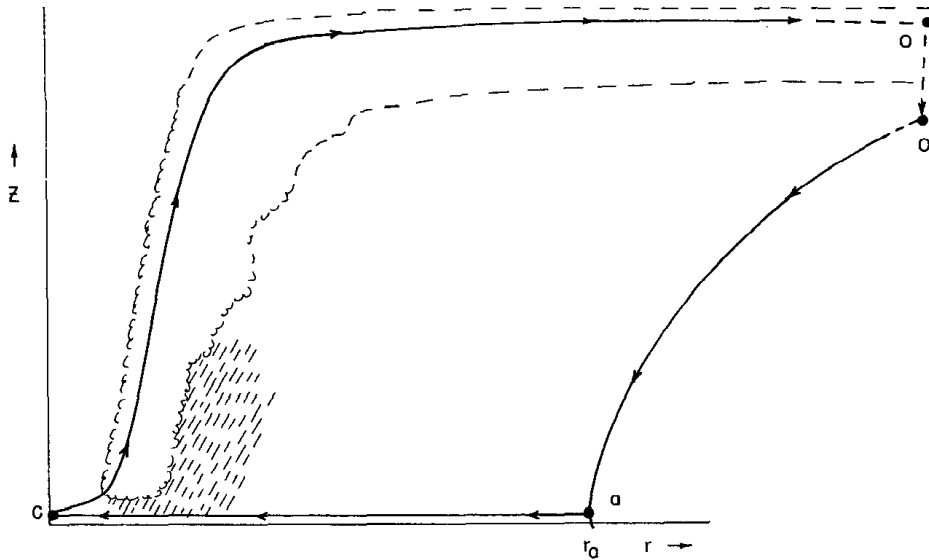
Returning to the 1st law of thermodynamics, $dq = c_v dT + dW$, we note that for the isothermal components of the cycle $dq = dW$. This means $Q_1 = \int_{V_B}^{V_C} p dV = \frac{RT_1}{m} \int_{V_B}^{V_C} \frac{1}{V} dV$. We can integrate to find $Q_1 = \frac{RT_1}{m} \log \left(\frac{V_C}{V_B} \right)$ and similarly $Q_2 = \frac{RT_2}{m} \log \left(\frac{V_D}{V_A} \right)$. Since $\frac{V_C}{V_B} = \frac{V_D}{V_A}$, $\frac{Q_2}{Q_1} = \frac{T_2}{T_1}$. So the efficiency of the Carnot cycle is

$$\eta = 1 - \frac{Q_2}{Q_1} = 1 - \frac{T_2}{T_1}. \quad (24)$$

This is the maximum possible efficiency of a heat engine, and it is not 100% efficient. The smaller the temperature of the cold reservoir (T_2) and the larger the temperature of the hot reservoir (T_1), the more efficient the Carnot cycle is.

Exercises

The Carnot cycle can be used as a model to understand hurricane strength [5]. The diagram below shows the radial motion of air in a hurricane. Imagine that the hurricane is axially symmetric like a doughnut. The diagram is a slice through the doughnut from the center to the outside. The horizontal axis is radius and the vertical axis is height. The clouds at small radius in the diagram represent the hurricane eye wall.

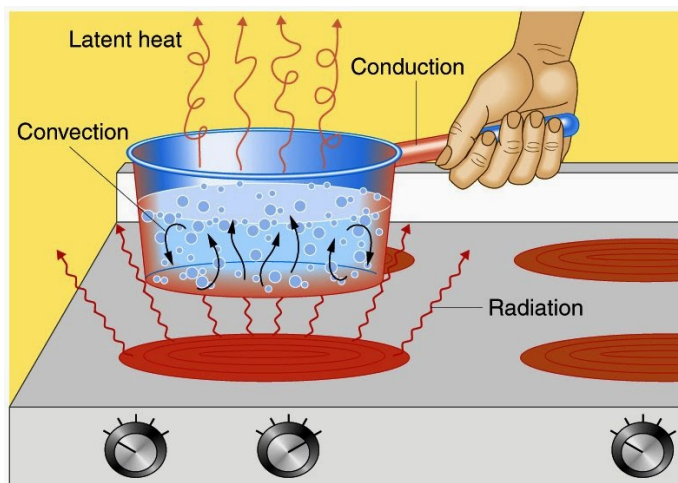


- Assume this hurricane is in the northern hemisphere. Based on your study of cyclones in the first week, will the surface winds of the storm be into or out of the page?
- The steps of the Carnot cycle are represented by the lines with arrows on them connecting the letters c , o , o' , and a . Identify which steps are approximately adiabatic and which are approximately isothermal.
- During which stage of the cycle is energy added to the hurricane? Can you guess the way energy is transferred to the hurricane? This is hard, but try guessing.
- During which stage of the cycle is energy taken away from the hurricane? Can you guess the way energy is taken from the hurricane?
- Carnot engines produce work. What happens to the work produced by the hurricane?
- Assume that the colder isothermal stage of the cycle stays at the same temperature during global warming. Based on the Carnot efficiency, what does this imply about how much work can be done by the hurricane? What does this say about how we should expect hurricanes to change as a result of global warming?

4 Radiation

4.1 Electromagnetic Radiation

Energy can be transferred between objects by a variety of mechanisms. The diagram below shows four types of energy transfer that occur when a pot is heated on a stove. We've learned about convection and latent heat in the context of the atmosphere. If you don't know what conduction is, look it up online now. We're going to start talking about electromagnetic radiation now.

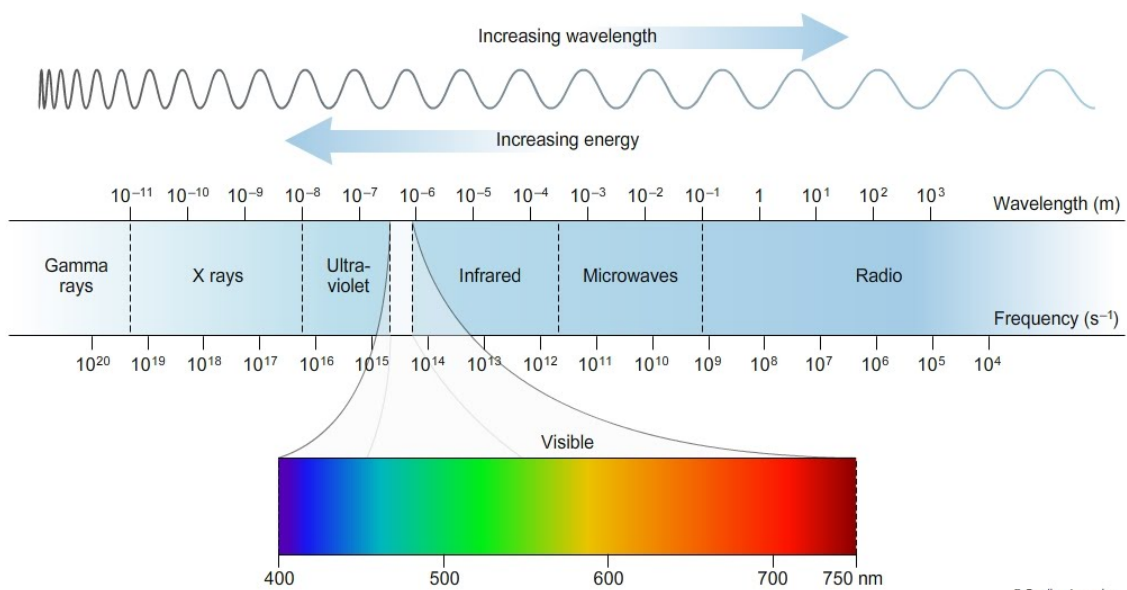


Electromagnetic radiation is propagating oscillations in electric and magnetic fields. As we will learn over the next few weeks, everything emits electromagnetic radiation all the time. The amount and type of electromagnetic radiation that an object emits depend on its temperature and radiative properties. Electromagnetic radiation has a frequency (ν) and a wavelength (λ). In a vacuum, it travels at a constant speed of

$$c = \lambda \nu = 3.0 \times 10^8 \text{ m s}^{-1}. \quad (25)$$

There are many types of electromagnetic radiation (see figure below). We can use the wavelength of electromagnetic radiation, or light, to classify it. Visible light has a wavelength of 400–750 nm. Ultraviolet radiation has a shorter wavelength and infrared radiation has a longer wavelength. The Sun's radiation is mainly in the visible and near infrared (almost visible) part of the spectrum, and is often referred to as shortwave radiation in Earth science. The radiation Earth emits is mainly in the infrared part of the spectrum, and is often referred to as longwave radiation in Earth science.

Quantum mechanics tells us that we can also think of electromagnetic radiation as a particle, a photon, in addition to as a wave. The energy of a photon is proportional to its frequency. Thinking in terms of photons with discrete energy will be necessary for us to understand the greenhouse effect.



© Sapling Learning

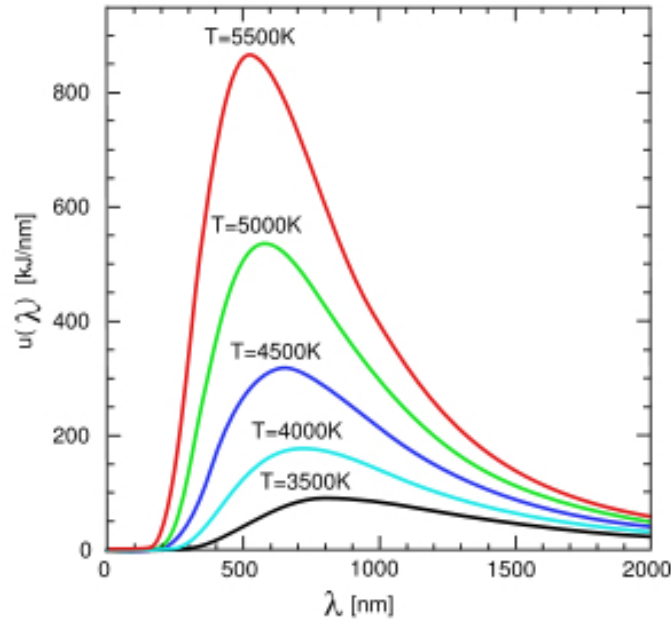
Exercises

(1) This question concerns the pot in the first figure of this handout.

- A. What is the difference between conduction and convection?
- B. The pot is being heated from below and convection in the water is moving this heat upward. If the pot were heated from above, would it move energy downward through conduction or convection? Why?
- C. Is the troposphere or the stratosphere more like a pot being heated from above?
- D. The right hand of the person holding the pot experiences heat by conduction through the metal of the handle. Suppose the person puts their left hand over the pot. Describe mechanically how heat can be moved from the hot pot to the left hand.
- E. In the picture heat is leaving the burners via radiation. If the person stuck their left hand over a burner, would they sense heat? Explain qualitatively how radiation can move energy between two objects that don't touch each other.
- F. Given that we can see a red color coming from the burners, in what part of the spectrum are they emitting radiation?
- G. If you touch the ground on a typical day, does it feel hotter or colder than the burner?
- H. The part of the spectrum that something emits in is related to the temperature it emits at. We can see the ground on a typical day in various colors. Combine this fact with your answer from the previous part to argue whether we can see direct emission of radiation from the ground. If we can't see direct emission from the ground, how do we see it?
- I. Is the radiation emitted by the ground considered longwave or shortwave? Is the radiation you see from the ground considered longwave or shortwave?

4.2 Blackbody Emission

A blackbody is a perfect emitter and absorber of electromagnetic radiation. A blackbody emits electromagnetic radiation at different wavelengths according to the Planck function, as shown in the diagram below. The most important things to remember about the Planck function is that hotter bodies emit more radiation and have a peak emission at a shorter wavelength.



The decrease in the wavelength of peak emission (λ_m) as a function of temperature is captured in Wein's displacement law, which states that

$$\lambda_m T = 2897 \mu\text{m} \cdot \text{K}. \quad (26)$$

You can use the figure above to check that this works (just remember to convert between nm and μm). The radiative flux emitted by an object is the integral over wavelength of the Planck curves shown in the figure above. The increase in radiative flux (F , in W m^{-2}) emitted as a function of temperature is captured in the Stefan-Boltzmann law,

$$F = \sigma T^4, \quad (27)$$

where $\sigma = 5.67 \times 10^{-8} \text{ W m}^{-2} \text{ K}^{-4}$. Notice that the radiative flux increases with the fourth power of temperature, so hotter objects emit much more radiation. To use both of these laws, always remember to convert the temperature into degrees Kelvin.

Most objects are not blackbodies. Instead they emit and absorb radiation less efficiently than a blackbody. At a given wavelength, a real object emits a fraction ϵ_λ of the radiation a blackbody would emit. ϵ_λ is called the emissivity. Similarly, at a given wavelength a real object absorbs a fraction a_λ of the radiation a blackbody would absorb. a_λ is called the absorptivity. Something called Kirchoff's law tells us that the absorptivity equals the emissivity at every wavelength

$$\epsilon_\lambda = a_\lambda. \quad (28)$$

Exercises

(1)

- A. Your body's skin temperature is about 95°F. Using Wien's displacement law, what wavelength of electromagnetic radiation do you tend to give off the most (in meters)?
- B. Using the Stefan-Boltzmann law (assuming you, like most liquids/solids, have an emissivity of approximately 1), estimate the radiative energy flux emitted by your body in W m^{-2} .
- C. Estimate the surface area of your body.
- D. Based on your previous two answers, what is the power you are losing, in W, all the time?
- E. How does the power you are losing compare to the power consumption of a typical incandescent light bulb? What about a typical fluorescent light bulb? What about your laptop?
- F. A human typically consumes about 2000 Cal per day. 1 Cal=1000 cal=4184 J. Estimate the power produced by a human due to food consumption, which ultimately is radiated away as heat. How does this compare to the total power lost by a human. If you get a value that is larger or smaller, how is energy balance (and a roughly constant temperature) maintained?
- G. Earth has an emission temperature of 255 K and a radius of 6,400 km. What is the radiative energy flux of Earth and the total power emitted by Earth?
- H. How does the power emitted by Earth compare to the power emitted by all of the human beings on planet Earth?

4.3 The Greenhouse Effect

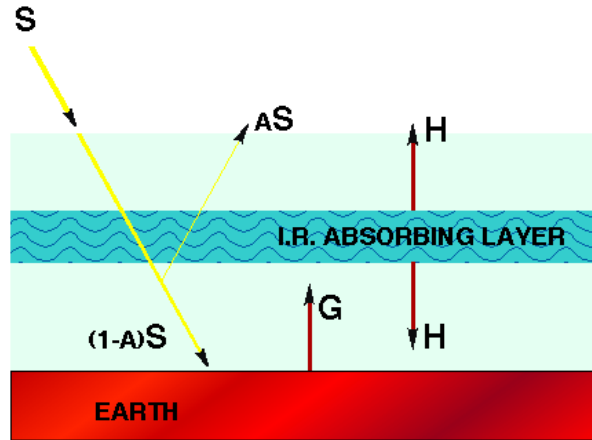
This is a link to a cool video (<https://www.youtube.com/watch?v=c-AHtUsO6Wc>) that demonstrates a lot about radiation. It is filmed with infrared cameras that are super-cooled so they don't measure themselves. The cameras measure infrared as black and white and the colors are added falsely. The dancers are in a cold barn during winter to maximize the temperature contrast between their bodies and the surroundings.

Watch the video and try to notice as many interesting things as you can. Here are some observations I made: You can see hot and cold areas of their bodies. I think the hot corresponds to areas where blood is near the skin surface. Muscle and fat deposits show up as cold. You can also see the arms get progressively colder toward the hand, reflecting cooling as the blood flows out from the heart. There are a couple times when the dancers lay on the floor and when they move the floor stays hot for a while. The walls of the barn are lined with aluminum foil, which reflects infrared. At some point they dance near the walls and you can see their heat reflected off the crinkly surface. I think the "trippy tracers" are due to an extended exposure rather than a physical effect. I think the vertical reflections are a post-processing effect, rather than due to an infrared mirror. Let me know if you see anything else cool worth mentioning.

Exercises

Today we're going to build a simple model for Earth's greenhouse effect. This is a long, but important worksheet. The figure below is a simple schematic of a one-layer model of the greenhouse effect. S is the solar flux, A is the surface albedo, G is the ground thermal flux, and H is the thermal flux emitted by the one atmospheric layer. The ground directly absorbs a solar flux of $(1-A)S$. All fluxes are in units of W m^{-2} .

A SIMPLE MODEL OF THE GREENHOUSE EFFECT



(1)

- A. Find a formula for G in terms of T_s , the surface temperature. Assume that the ground has an emissivity of 1.
- B. Assume the atmospheric layer has an emissivity of ϵ and a temperature of T_a . Find a formula for H .
- C. S is the solar flux in W m^{-2} at the distance of Earth's orbit. So S Watts pass through 1 m^2 of area oriented perpendicular to the Sun's rays at Earth's distance from the Sun. Write the total amount of solar energy absorbed by Earth's surface (S_{abs} , in W) in terms of S , the surface albedo (A), and Earth's radius (R). Hint: Think about the area of sunlight that the Earth blocks (Earth's shadow), not the surface area of Earth.
- D. Write the total amount of energy emitted by Earth's surface (E_{em}) in terms of T_s , σ , and R .
- E. Earth's surface can also absorb energy from the atmospheric layer (flux H). This is the Greenhouse effect. Write the total amount of atmospheric radiation energy absorbed by Earth's surface (E_{abs}) in terms of ϵ , T_a , σ , and R .
- F. For Earth to be in equilibrium we must have $S_{abs} + E_{abs} = E_{em}$. Plug in your formulas for each of these terms to determine a formula for the surface energy balance. R should cancel, but a geometric factor of $\frac{1}{4}$ should remain on one of the terms.

- G. Calculate the total energy emitted by the atmospheric layer in terms of ϵ , T_a , σ , and R .
- H. Calculate the total energy absorbed by the atmospheric layer in terms of ϵ , T_s , σ , and R . You must use Kirchhoff's law, which states that the emissivity of a material equals its absorptivity. Also, notice that we are assuming that solar energy passes directly through the atmospheric layer without being absorbed.
- I. For Earth to be in equilibrium the energy emitted and absorbed by the atmospheric layer must be equal. Use this to find a formula for the atmospheric energy balance. R should cancel.
- J. Combine your formulas for surface and atmospheric energy balance to eliminate T_a and solve for T_s .
- K. If the CO_2 is increased, which term in your solution for T_s does this effect, and how? Use your model to predict what will happen to Earth's surface temperature if the CO_2 is increased.

4.4 Absorption and Scattering

As light passes through the atmosphere, it can be absorbed, scattered in different directions, or transmitted unaffected. Often some combination of the three occurs. Atmospheric gases, clouds, and aerosols (solids and liquids floating in the atmosphere) can all lead to absorption and scattering of light. Absorption by a particular species (a gas, cloud, or aerosol) at a particular wavelength is characterized by the mass absorption coefficient (κ_λ^a), which is measured in $\text{m}^2 \text{kg}^{-1}$. You can think of κ_λ^a as the area that 1 kg of the particles of the material would take up if they were laid out in a single layer on a flat surface. This isn't exactly right because individual particles can weirdly cast a shadow that is not always equal to their geometric cross section, but it's approximately correct. What's important to remember is that the higher κ_λ^a is, the more that species absorbs at that wavelength. Similarly, scattering by a particular species at a particular wavelength is characterized by the mass scattering coefficient (κ_λ^s). For either absorption or scattering, we can define something called optical thickness for each species (labeled i)

$$\tau_{\lambda i} = \kappa_{\lambda i} M_i, \quad (29)$$

where M_i is the mass path length, or total amount of mass of the species in the way of the light. We have also indexed $\kappa_{\lambda i}$ to make it clear that absorption and scattering coefficients are different for different species. M_i is measured in kg m^{-2} and we can calculate it between two heights as

$$M_i = \int_{z_1}^{z_2} \rho_i dz. \quad (30)$$

ρ_i here is the density of the species under consideration, not the total air density. If we wanted to consider the mass path length of the entire atmosphere, then we would write $M = \int_0^\infty \rho_i dz$. Now suppose we are considering the special case of a well-mixed gas (such as CO_2) with a mass fraction of r , so that at any level $\rho_i = r\rho$, where ρ is the total density of air. The total path of this gas over the entire atmosphere is

$$M = \int_0^\infty r\rho dz = -r \int_{P_s}^0 \frac{1}{g} dp = r \frac{P_s}{g}, \quad (31)$$

where we have used the hydrostatic relation ($dp = -\rho g dz$) and P_s is the surface pressure. If there are multiple species that can absorb and/or scatter, we just have to add up the individual optical thicknesses to get the total optical thickness

$$\tau_\lambda = \sum_i \tau_{\lambda i}. \quad (32)$$

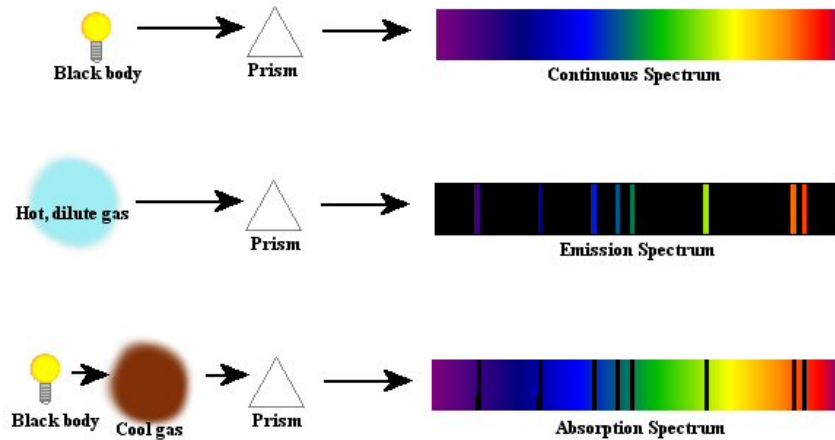
We use the optical thickness in something called Beer's law,

$$T_\lambda = e^{-\tau_\lambda}, \quad (33)$$

where T_λ is the fraction of light transmitted. In words, the fraction of light transmitted through the atmosphere at a particular wavelength is an exponentially decaying function of optical thickness at that wavelength.

Absorption by gases depends strongly on wavelength. Quantum mechanics tells us that gases can only absorb and emit electromagnetic radiation at certain discrete energies. We can think of

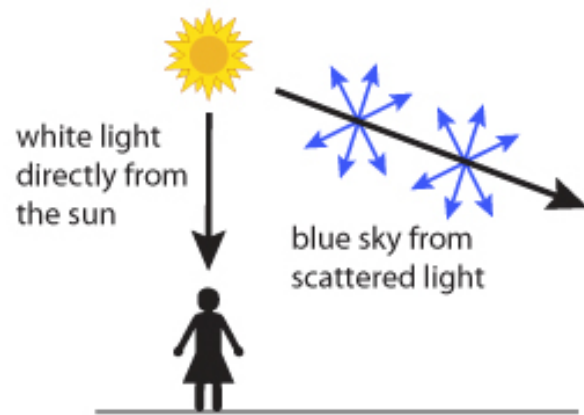
electromagnetic radiation as particles (photons) in addition to waves. The energy of photons is proportional to their frequency. This means that only particular frequencies, and wavelengths, of light can interact with a particular gas. We can see this in the diagram below. If we take light from a blackbody and shine it through a prism, the colors are separated out. If we heat up a gas to the same temperature as the blackbody and shine the light it emits through a prism, only certain colors will be visible. The wavelengths of the colors we see in this case correspond to the energies that the gas can emit at. This is how neon lights work (different gas mixtures are used to make different colors). If instead we shine the original blackbody through the same gas at a colder temperature and then through the prism, we see absorption features at the same wavelengths where we previously saw emission in the resulting spectrum. Absorption by clouds and aerosols tends to not have as fine structure in wavelength as absorption by gases, although there are often broad differences between absorption of longwave and shortwave radiation.



Scattering by particles much smaller than the wavelength of electromagnetic radiation is called Rayleigh scattering. Atmospheric gases Rayleigh scatter sunlight. Rayleigh scattering is proportional to the inverse of the wavelength of light to the fourth power

$$\kappa_{\lambda}^{Rayleigh} \propto \lambda^{-4}. \quad (34)$$

This means that light at shorter wavelengths is scattered much more than light at longer wavelengths. Given that blue light has a wavelength of about 400 nm and red light has a wavelength of about 700 nm, this means that the atmosphere should scatter blue light about $(\frac{7}{4})^4 = 9.4$ times more than red light. As the diagram below shows, this is why the sky appears blue. Sunlight that is not pointed directly at us can be scattered toward us by the atmosphere. This scattering is much more efficient for blue light than red light, so we see the atmosphere as blue. Larger particles, such as those that make up clouds and aerosols, scatter light through a process called Mie scattering. The dependence of Mie scattering on wavelength and direction is much more complicated than Rayleigh scattering, and is not something we have time to get into. Just remember that it exists and that scattering by clouds and aerosols can have a large effect on the climate of a planet.



Exercises

(1) The figure on the next page shows absorption coefficients for CO_2 and H_2O as a function of wavenumber (one divided by wavelength). It also shows a blackbody curve at 260 K, which gives you a sense of which wavenumbers are important for terrestrial radiation.

- A. An atmosphere is generally considered optically thick at a given wavenumber if $\tau \gtrsim 1$ (optically thick means the atmosphere interacts strongly with radiation). Approximately what fraction of radiation makes it through an atmosphere if $\tau = 1$?
- B. On a typical day water vapor represents on the order of 1% of the mass of Earth's atmosphere. Use this to estimate the order of magnitude of M , in kg m^{-2} for water vapor. What value of κ is necessary for water vapor to make Earth's atmosphere optically thick at a given wavenumber?
- C. The mass fraction of CO_2 in the atmosphere is about 6×10^{-4} . What value of κ is necessary for CO_2 to make Earth's atmosphere optically thick at a given wavenumber?
- D. Based on these calculations and the figure, do you think CO_2 or H_2O provides more greenhouse warming for Earth?
- E. Use the figure to explain why CO_2 is an important greenhouse gas on Earth.

(2) Explain why the Sun appears red during sunrise and sunset.

(3) Large, explosive volcanic eruptions loft sulfate aerosols into the stratosphere. Particularly vibrant sunsets are often observed around the world after such events. Explain this.

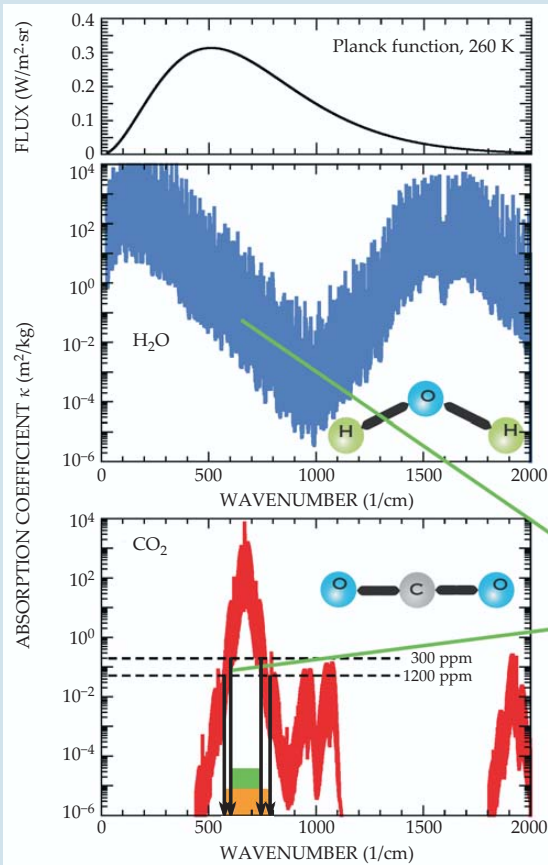
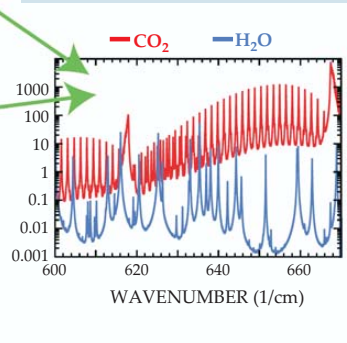


Figure 2. Absorption coefficients for water vapor and carbon dioxide as a function of wavenumber are synthesized here from spectral line data in the HITRAN database. The upper panel gives the Planck function $B(\nu, T)$ for a 260-K surface, which indicates the spectral regions that are important for planetary energy balance. The wavenumber, defined as the reciprocal of the wavelength, is proportional to frequency. If a layer of atmosphere contains M kilograms of absorber for each square meter at the base of the layer, then light is attenuated by a factor $\exp(-\kappa M)$ when crossing the layer, where κ is the absorption coefficient. The horizontal dashed lines on the CO_2 plot give the value of absorption coefficient above which the atmosphere becomes very strongly absorbing for CO_2 concentrations of 300 ppm and 1200 ppm; the green rectangle shows the portion of the spectrum in which the atmosphere is optically thick for the lower concentration, and the orange rectangle indicates how the optically thick region expands as the concentration increases. The inset shows fine structure due to rotational levels.



4.5 Radiation and Vertical Structure

We can measure electromagnetic radiation emitted by a planet as a function of wavelength to produce a spectrum. We might do this for Earth using a satellite instrument, or another planet in the solar system using an instrument on a fly-by mission or that we have put into orbit around that planet. We can even make crude measurements of the electromagnetic spectra of extrasolar planets orbiting stars light years away using fancy space telescopes. Last time we saw how the electromagnetic spectrum of a planet can reveal crucial information about the gases present in the planet's atmosphere. Today we are going to learn how we can use the electromagnetic spectrum of a planet to learn about its vertical temperature structure.

The mass absorption/emission coefficients (κ_λ^a) of the gases in a planet's atmosphere depend strongly on wavelength. This means that the mass necessary for an atmosphere to be optically thick ($\tau \approx 1$) depends strongly on wavelength. Emission to space is dominated by the region of the atmosphere where $\tau \approx 1$. At higher altitudes there isn't enough of the emitting gas for much emission to space. At lower altitudes almost all of the emitted radiation is absorbed by the atmosphere before it reaches space. The emitted radiation we measure from space at a given wavelength ends up looking like blackbody emission with a temperature corresponding to the atmospheric temperature where $\tau \approx 1$. We call this equivalent blackbody temperature the brightness temperature, and it is very important to remember that it depends on wavelength. At wavelengths where the atmosphere absorbs well (large κ_λ^a), $\tau \approx 1$ will occur high up in the atmosphere and the brightness temperature will correspond to the atmospheric temperature at these high altitudes. At wavelengths where the atmosphere absorbs poorly (small κ_λ^a), $\tau \approx 1$ will occur low in the atmosphere and the brightness temperature will correspond to the atmospheric temperature at these low altitudes. There may even be regions of the spectrum where the atmosphere absorbs so poorly ($\kappa_\lambda^a \approx 0$) that we can see emission from the planet's surface. In this way we can use a measurement of the electromagnetic spectrum of a planet to infer things such as its vertical temperature lapse rate and whether it has a stratosphere.

Exercises

(1) The figure below shows measured radiative emission as a function of wavenumber for Earth, Mars, and Venus as well as reference blackbody curves.

- A. Why does Earth's emission in the main CO₂ band overlap with the 220 K blackbody?
- B. Between about 800–1000 1/cm, why does Earth's emission overlap with the 285 K blackbody?
- C. Why does Earth's emission in regions where H₂O absorbs correspond to a higher brightness temperature than in regions where CO₂ absorbs?
- D. If you were going to design an efficient greenhouse gas to add to Earth's atmosphere, at what wavenumbers would you want it to absorb?
- E. At the very center of the CO₂ and O₃ bands in Earth's emission spectrum the brightness temperature abruptly increases. This is marked by arrows in the top panel. Can you explain this? Note that the absorption/emission coefficient is much stronger right at the center of a band than a little bit off the center. Also think carefully about the vertical temperature structure in Earth's atmosphere.
- F. Why do Mars's and Venus's infrared emission spectrums look so similar even though Mars has a mean surface temperature of about 220 K and Venus has a mean surface temperature of about 735 K?
- G. In 1960, as part of his PhD thesis at the University of Chicago, Carl Sagan estimated the surface temperature of Venus [6]. He did this using observations of the planet in the microwave part of the electromagnetic spectrum. Explain why microwave emission might be different for Venus and Mars, despite the fact that infrared emission is so similar.

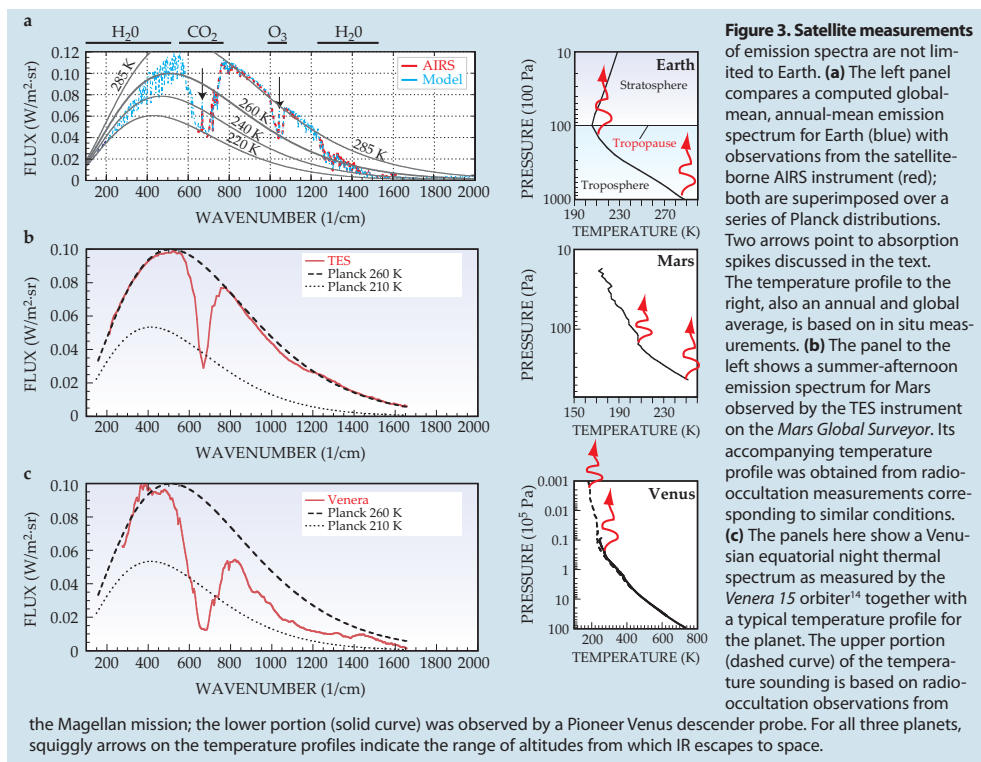
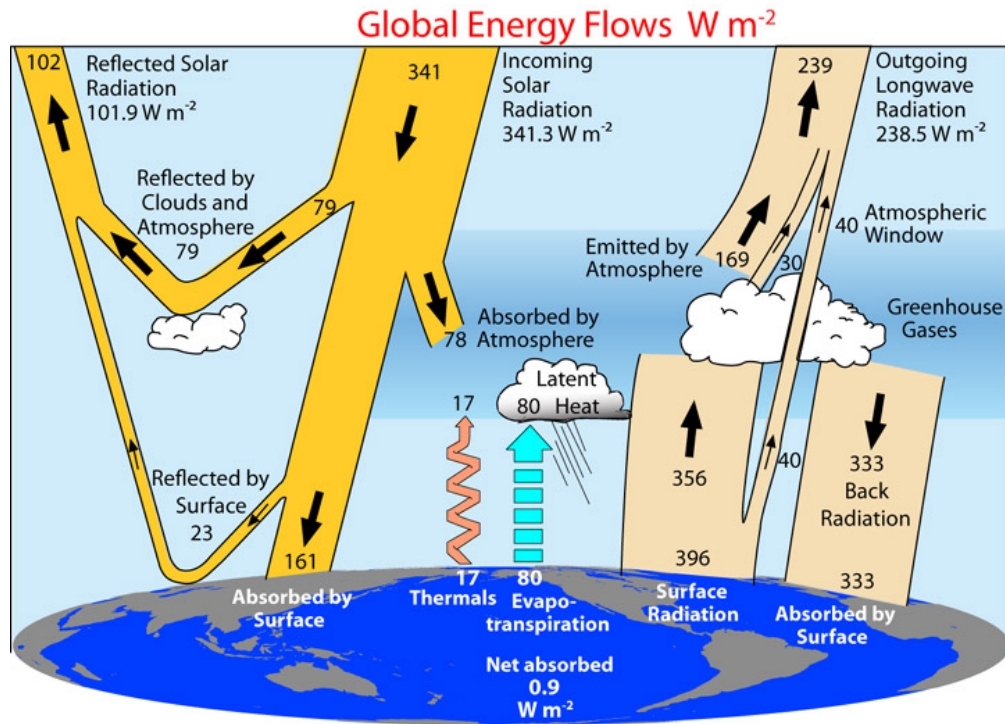


Figure 3. Satellite measurements

of emission spectra are not limited to Earth. **(a)** The left panel compares a computed global-mean, annual-mean emission spectrum for Earth (blue) with observations from the satellite-borne AIRS instrument (red); both are superimposed over a series of Planck distributions. Two arrows point to absorption spikes discussed in the text. The temperature profile to the right, also an annual and global average, is based on in situ measurements. **(b)** The panel to the left shows a summer-afternoon emission spectrum for Mars observed by the TES instrument on the *Mars Global Surveyor*. Its accompanying temperature profile was obtained from radio-occultation measurements corresponding to similar conditions. **(c)** The panels here show a Venusian equatorial night thermal spectrum as measured by the *Venera 15* orbiter¹⁴ together with a typical temperature profile for the planet. The upper portion (dashed curve) of the temperature sounding is based on radio-occultation observations from

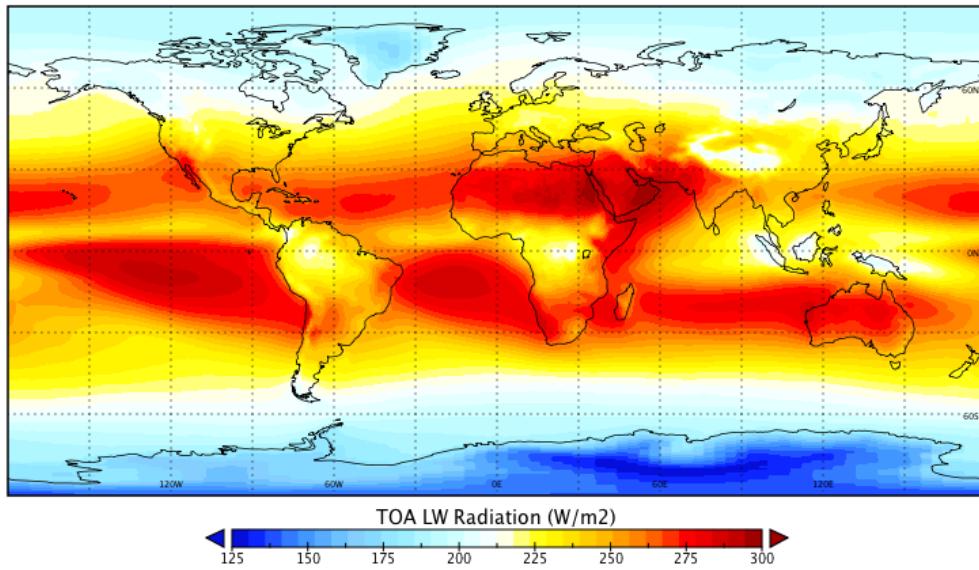
4.6 Global Energy Balance

The figure below is a diagram of Earth's global-mean energy budget both at the surface and at the top-of-atmosphere (TOA). This budget was put together through a painstaking compilation of available surface, aircraft, balloon, and satellite measurements. Study the diagram a bit to get a sense of what the big players in Earth's energy budget are.

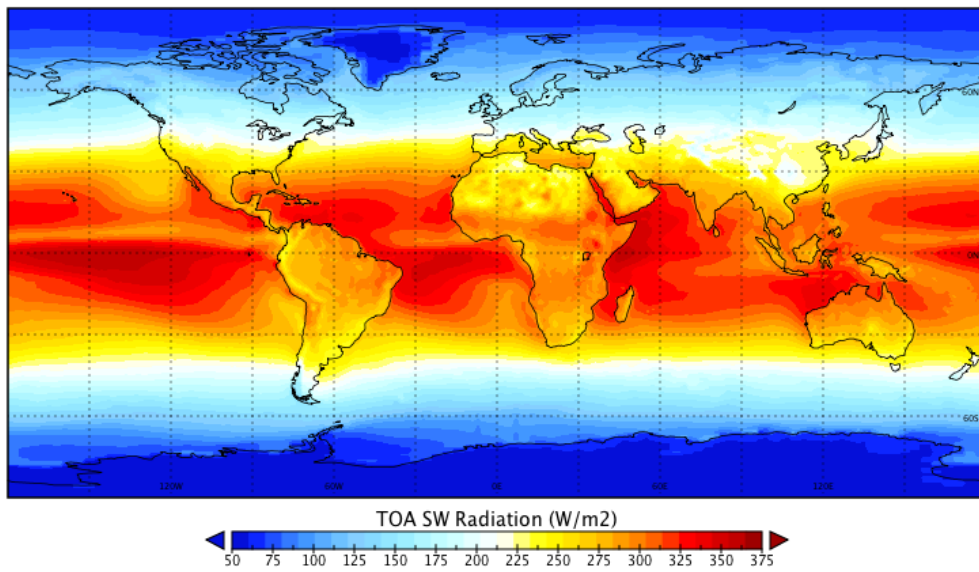


Today we're going to think about annual-mean maps of TOA radiation measurements from the CERES satellite instrument. We can look at these maps to understand a lot about Earth. The maps show longwave emission, net shortwave (downward minus upward), and net radiation (net shortwave minus longwave). Longwave radiation is directly emitted by terrestrial sources. Shortwave radiation is emitted by the Sun and impinges on Earth. Some shortwave radiation is reflected back to space, and the plot shows the net shortwave. The net radiation tells us about the overall impact of both shortwave and longwave radiation. Where the net radiation is positive, radiation has a warming effect on the planet in the annual-mean. Where the net radiation is negative, radiation has a cooling effect on the planet in the annual mean.

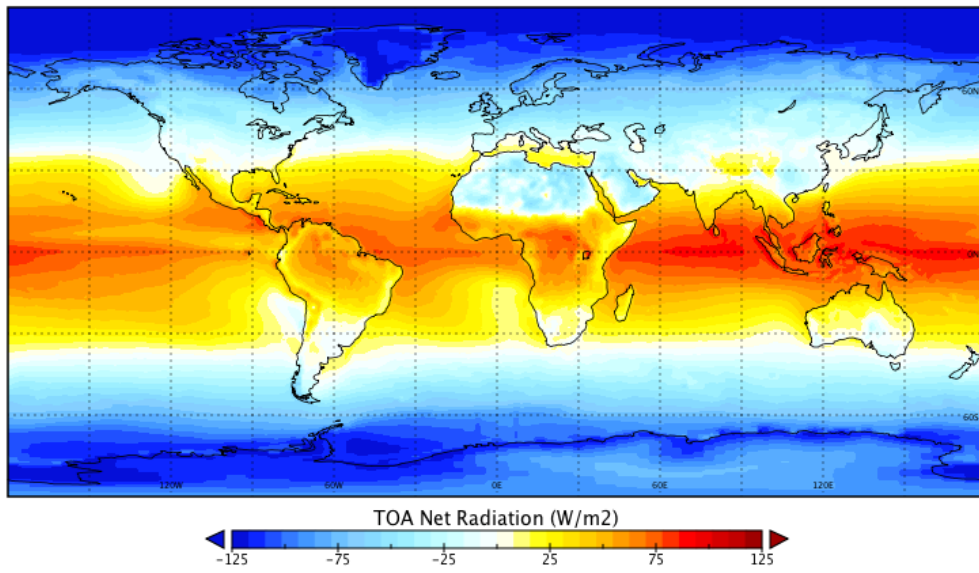
Top-of-Atmosphere Longwave Radiation (CERES, 2003–2014)



Top-of-Atmosphere Shortwave Radiation (CERES, 2003–2014)



Top-of-Atmosphere Net Radiation (CERES, 2003–2014)



Exercises

(1) Consider the maps of annual-mean top-of-atmosphere (TOA) radiation measured by the CERES satellite instrument.

- A. If we take a broad average, does longwave emission tend to be higher in the tropics or near the poles? Why?
- B. Why is the longwave emission over Indonesia small even though the surface temperature is high?
- C. The annual mean incoming shortwave does not depend on longitude. The annual mean TOA shortwave plotted here does depend on longitude. Explain.
- D. The TOA Net map shows that if we take a broad average, energy enters the planet in the tropics and leaves it near the poles. Explain why this means there must be heat continually transported from the tropics to the poles.
- E. What are two reasons the Sahara and the Arabian Peninsula might tend to give off more energy than they receive? Using the longwave and shortwave maps, which effect do you think is dominant? (Hint: what is the most powerful greenhouse gas in Earth's atmosphere, and how does it show up in these maps?)
- F. Why are there blobs of net radiation loss to the west off Baja California and Peru? Why don't these blobs show up on the longwave map?

5 Dynamics

5.1 Partial Derivatives and the Streamfunction

Today we will start thinking about atmospheric dynamics. In order to understand atmospheric dynamics we will need to review some concepts from calculus. The partial derivative is the derivative of a function of multiple variables with respect to just one of them. For example, if we have a function of two variables $f(x, y)$, we can write the partial derivative with respect to x as $\frac{\partial f(x, y)}{\partial x}$ and the partial derivative with respect to y as $\frac{\partial f(x, y)}{\partial y}$. When we take $\frac{\partial f(x, y)}{\partial x}$, we treat y as if it were just another constant. Similarly, when we take $\frac{\partial f(x, y)}{\partial y}$, we treat x as if it were just another constant.

One useful place partial derivatives come up is with something called the streamfunction. Under certain conditions a streamfunction can be found for a two-dimensional flow. The streamfunction (ψ) is defined such that

$$u = -\frac{\partial \psi}{\partial y}, \quad (35)$$

$$v = \frac{\partial \psi}{\partial x}, \quad (36)$$

where u is the velocity in the x direction and v is the velocity in the y direction. The velocity vector points along contours of a streamfunction (lines in (x, y) space where the streamfunction is constant), so the streamfunction is a scalar field that can be used to represent a vector field.

An analogy to help you think about the streamfunction is as follows. Imagine a wanderer wandering in hilly terrain. If we choose the way she walks carefully, then the topography would be the streamfunction of her flow. In particular, imagine that the wanderer always wanders at constant altitude, or at a constant value of the streamfunction in this analogy. She always wanders with her right hand facing the slope, and she moves with a speed proportional to the steepness of the slope. If she moves like this, then the topography is her streamfunction. You have probably seen a topographic map before. A topographic map is an example of a contour plot, and we will be working with contour plots of the streamfunction below.

Exercises

(1) Let's practice taking partial derivatives.

A. $f(x,y) = x^2y^3$, calculate $\frac{\partial f}{\partial x}$ and $\frac{\partial f}{\partial y}$.

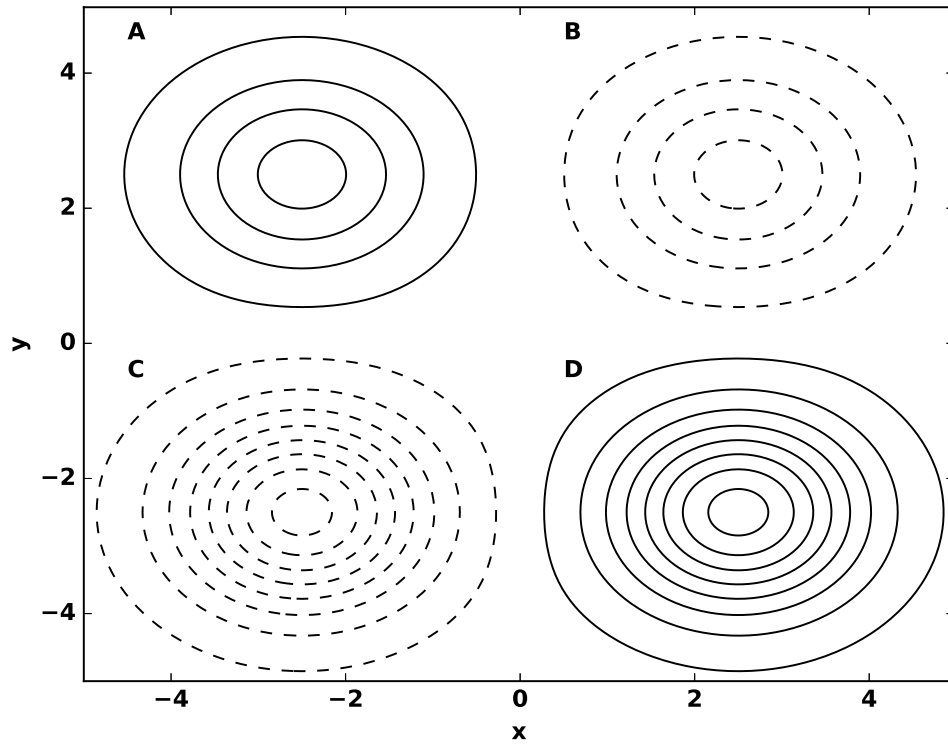
B. $f(x,y) = \frac{\cos(x)}{y^2 + \sin(x)}$, calculate $\frac{\partial f}{\partial x}$ and $\frac{\partial f}{\partial y}$.

C. $u(x,y) = x \sin(xy)$ and $v(x,y) = \sin(x) \cos(y)$, calculate $\frac{\partial u}{\partial x} + \frac{\partial v}{\partial y}$.

D. $u(x,y) = x \sin(xy)$ and $v(x,y) = \sin(x) \cos(y)$, calculate $\frac{\partial v}{\partial x} - \frac{\partial u}{\partial y}$.

(2) The figure on the next page is a contour plot of the streamfunction (ψ) of a flow. You may have seen a topographic map before, and this contour plot is kind of like that. Positive contours are represented by solid lines (and you can imagine them coming out of the page) and negative contours are represented by dotted lines (and you can imagine them going into the page). Remember, the velocity points along the direction of constant ψ , or along the streamfunction contours. There are four maximums or minimums of the streamfunction, which are labeled by letters. Each maximum and minimum in the streamfunction represents a vortex with velocity vectors pointing around it in either the clockwise or counterclockwise direction.

- A. Using the definition of the streamfunction, you can infer the direction of flow around the vortices. Which vortices represent clockwise flow?
- B. Which vortices represent counterclockwise flow?
- C. The speed is the magnitude of the velocity vector. Is the speed larger in vortex **A** or vortex **C**?
- D. Is the speed larger in vortex **A** or vortex **B**?



5.2 The Divergence

The divergence is an operator on a vector field that tells us about the source of the field. We will consider two-dimensional flow, so we can think of a velocity vector \vec{v} with two components (u, v) . The divergence can be written as

$$\vec{\nabla} \cdot \vec{v} = \frac{\partial u}{\partial x} + \frac{\partial v}{\partial y}. \quad (37)$$

If $\vec{\nabla} \cdot \vec{v} > 0$ at a point then the field is diverging and we can think of the flow as spreading out from that point. If $\vec{\nabla} \cdot \vec{v} < 0$ at a point then the field is converging and we can think of the flow as flowing toward that point.

To consider a concrete example, let's think about the bathtub pictured below. Consider the horizontal, two-dimensional flow of water in the bathtub. If the drain is plugged and we turn the spigot on, the horizontal flow will have to diverge from where the water from the spigot enters the tub because this is a source of water. The divergence of the horizontal flow will be positive where the water enters the tub. Now imagine we fill the tub and turn the spigot off. If we unplug the drain, the drain will be a sink of water, and the horizontal flow will have to converge toward it. The divergence of the horizontal flow will be negative where the water enters the drain.

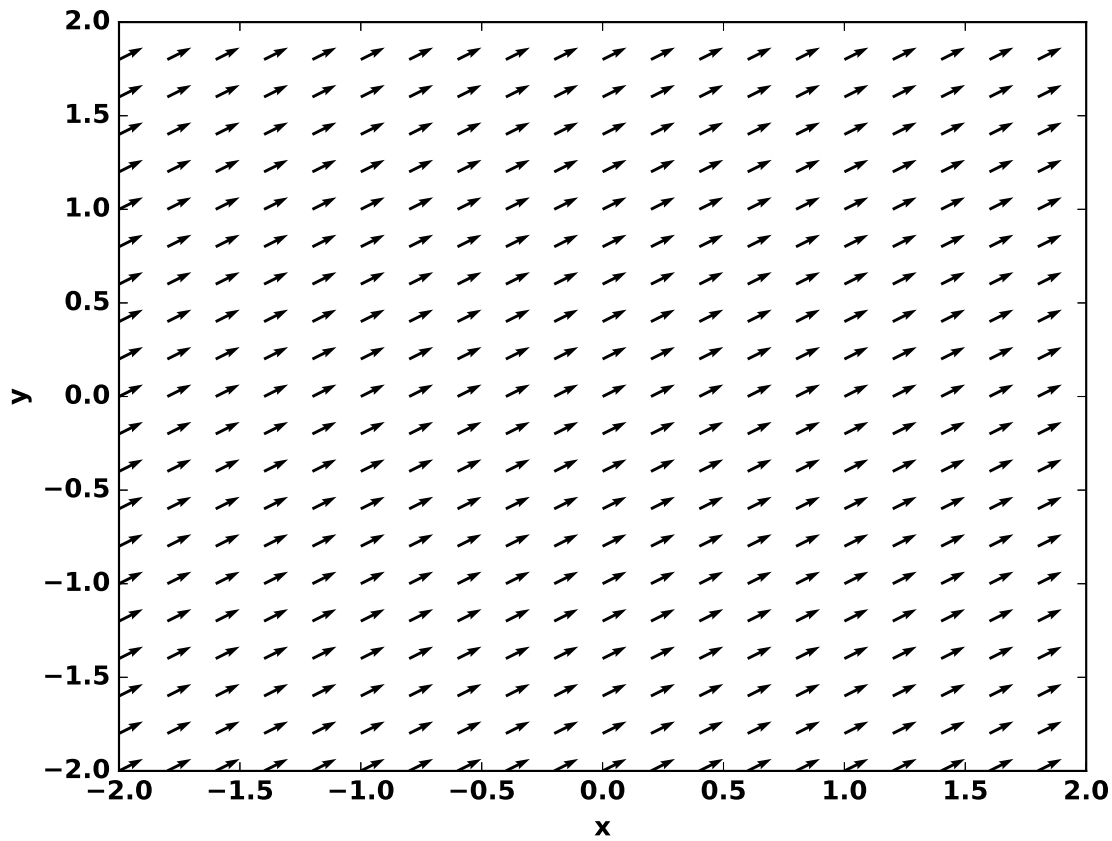


Exercises

(1) The plot below shows the 2D velocity vector field $\vec{v} = (u, v) = (4, 2)$.

A. From looking at the plot, is $\vec{\nabla} \cdot \vec{v}$ positive, negative, or zero at $(x, y) = (0, 0)$?

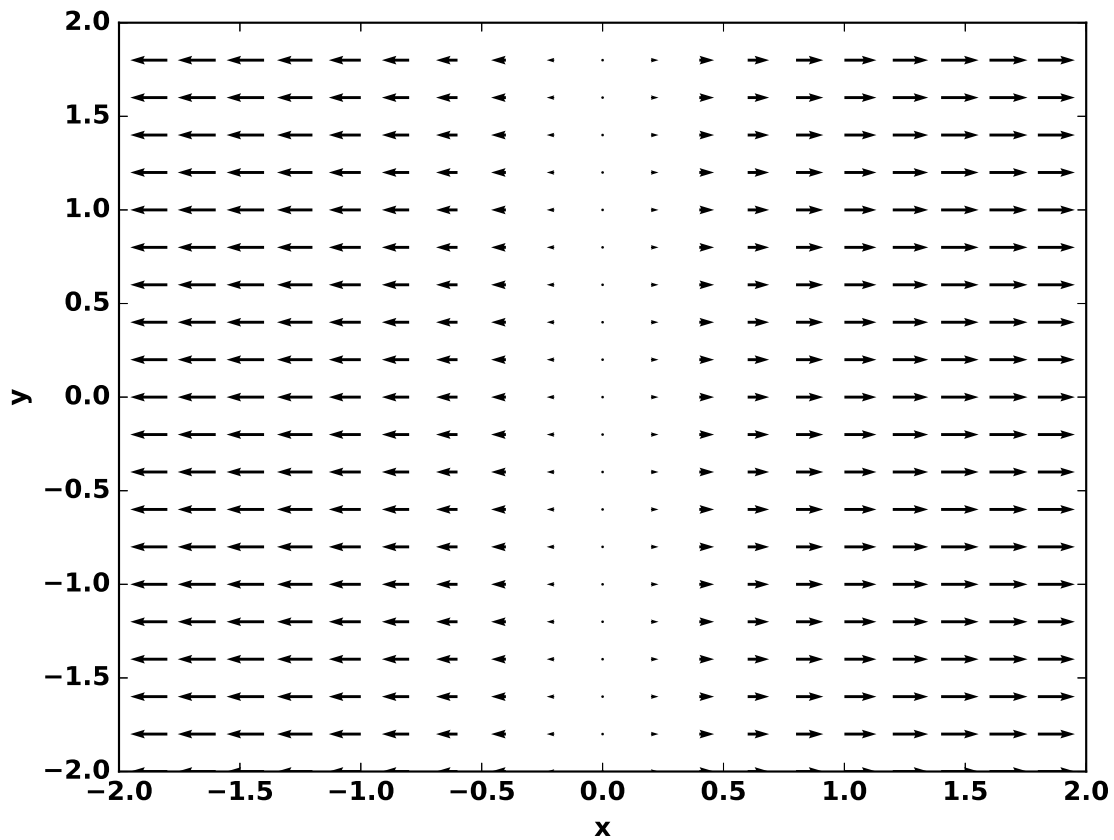
B. Calculate $\vec{\nabla} \cdot \vec{v}$ at $(x, y) = (0, 0)$.



(2) The plot below shows the 2D velocity vector field $\vec{v} = (u, v) = (\sin(x), 0)$.

A. From looking at the plot, is $\vec{\nabla} \cdot \vec{v}$ positive, negative, or zero at $(x, y) = (0, 0)$?

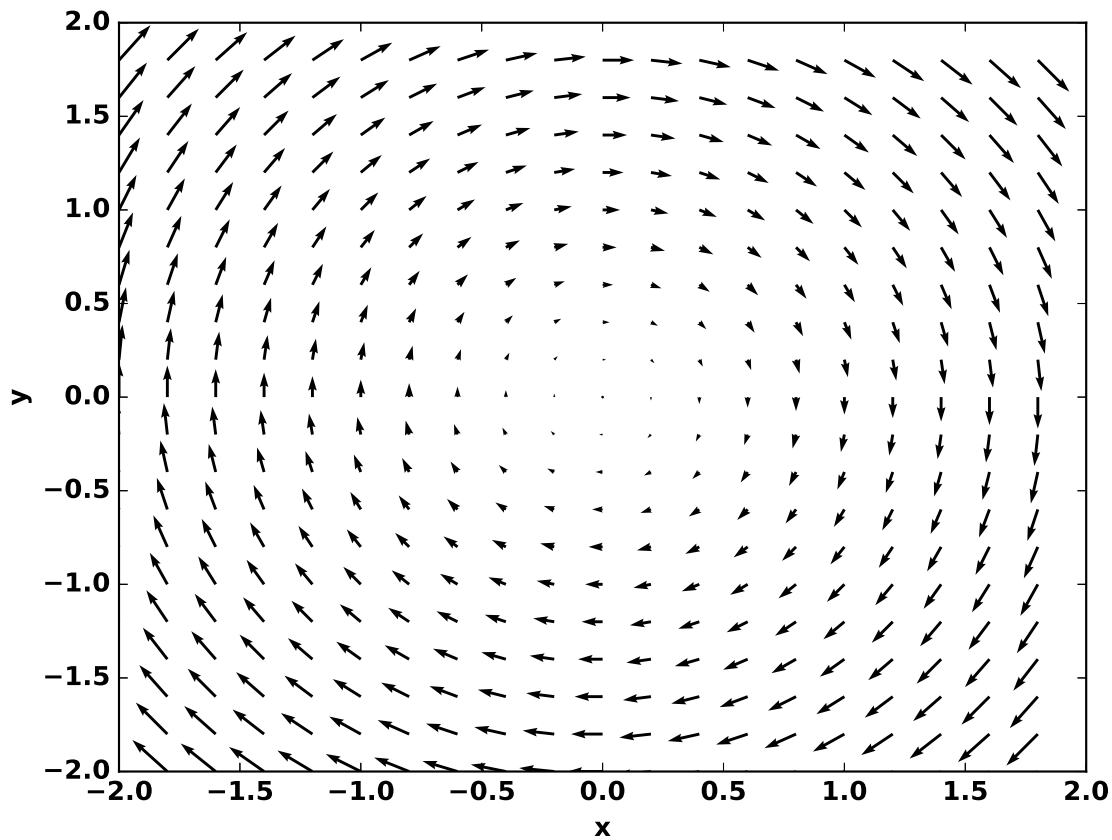
B. Calculate $\vec{\nabla} \cdot \vec{v}$ at $(x, y) = (0, 0)$.



(3) The plot below shows the 2D velocity vector field $\vec{v} = (u, v) = (y, -x)$.

A. From looking at the plot, is $\vec{\nabla} \cdot \vec{v}$ positive, negative, or zero at $(x, y) = (0, 0)$?

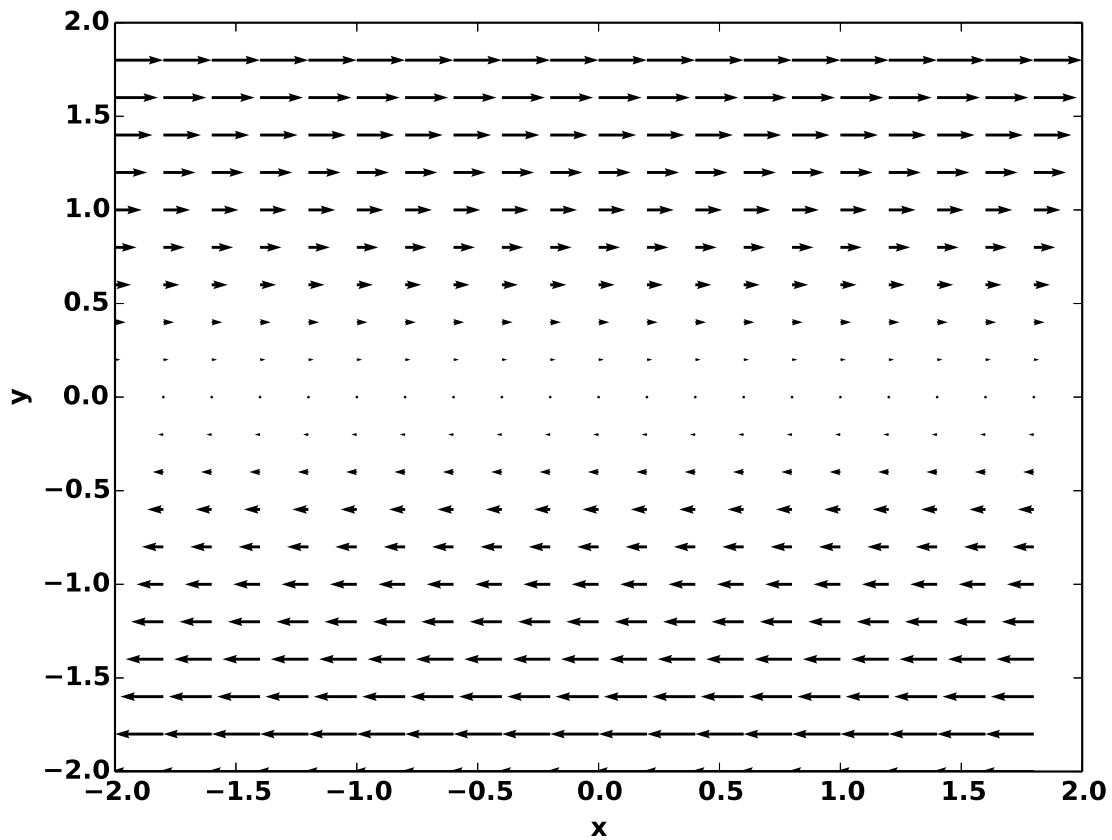
B. Calculate $\vec{\nabla} \cdot \vec{v}$ at $(x, y) = (0, 0)$.



(5) The plot below shows the 2D velocity vector field $\vec{v} = (u, v) = (y, 0)$.

A. From looking at the plot, is $\vec{\nabla} \cdot \vec{v}$ positive, negative, or zero at $(x, y) = (0, 0)$?

B. Calculate $\vec{\nabla} \cdot \vec{v}$ at $(x, y) = (0, 0)$.



(6) In the last class we learned that for certain flows we can define a streamfunction (ψ) such that $u = -\frac{\partial\psi}{\partial y}$ and $v = \frac{\partial\psi}{\partial x}$. Calculate the divergence $\vec{\nabla} \cdot \vec{v}$ in terms of the streamfunction, ψ . Your answer should indicate that flows for which we can define a streamfunction have a special property. What is it?

5.3 The Curl and Vorticity

The curl is an operator on a vector field that tells us about the infinitesimal rotation at different points in the field. Qualitatively, the curl of a velocity field at a particular point tells us how much “spinniness” or “whirling” there is at that point. If we imagine putting a tiny water wheel or turnstyle into the velocity field at a given point, the curl of the velocity field would tell us which direction and how fast the water wheel would turn. The curl of a velocity field is also called the vorticity. The vorticity is incredibly important for understanding atmospheric circulation because cyclones are clumps of spinniness in the flow. We will consider two-dimensional flow, so we can think of a velocity vector \vec{v} with two components (u, v) . For two-dimensional flow, the curl of the velocity vector can be written

$$\vec{\nabla} \times \vec{v} = \frac{\partial v}{\partial x} - \frac{\partial u}{\partial y}. \quad (38)$$

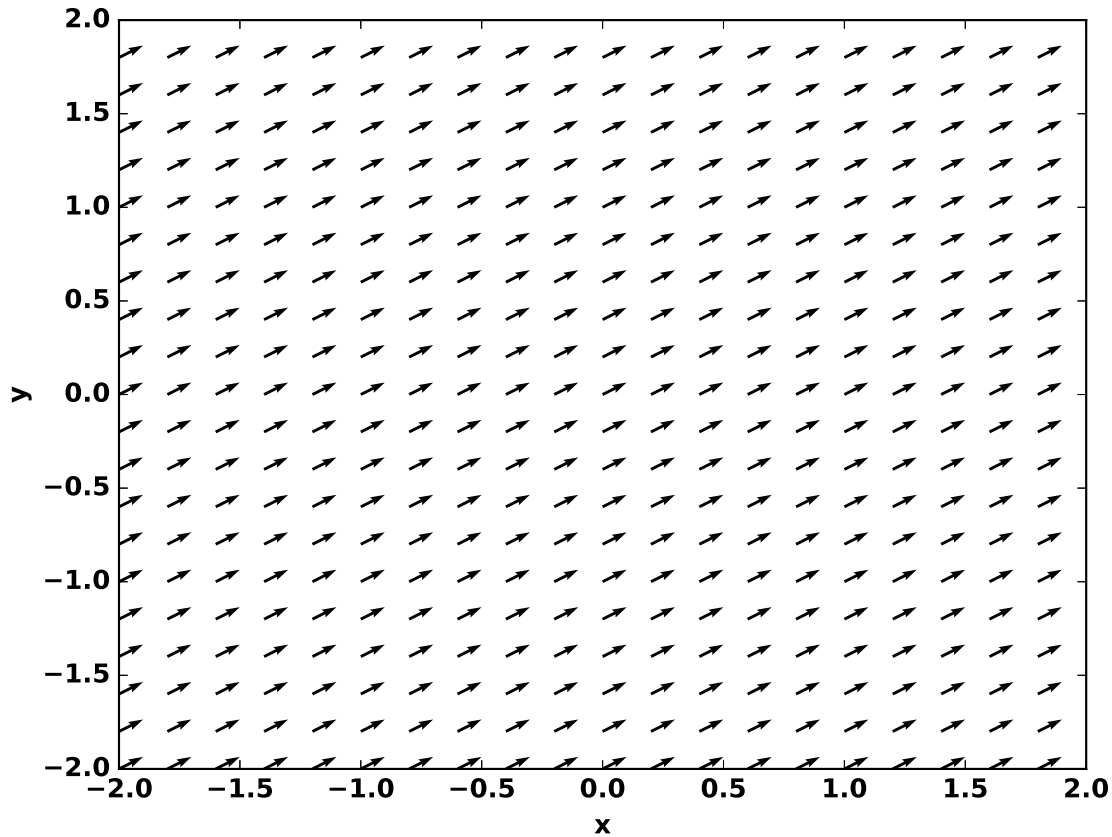
A trick we can use to assess the sign of the vorticity is the “right-hand rule.” To use the right-hand rule, start with a vector plot of velocity. Put your right hand down where you want to assess the vorticity. Fold your fingers toward the palm of your hand in the direction that the velocity is swirling. If your thumb is pointed away from the page, then the vorticity is positive. If your thumb is pointed toward the page, then the vorticity is negative. If the velocity isn’t swirling, then the vorticity is zero.

Exercises

(1) The plot below shows the 2D velocity vector field $\vec{v} = (u, v) = (4, 2)$.

A. From looking at the plot, is $\vec{\nabla} \times \vec{v}$ positive, negative, or zero at $(x, y) = (0, 0)$?

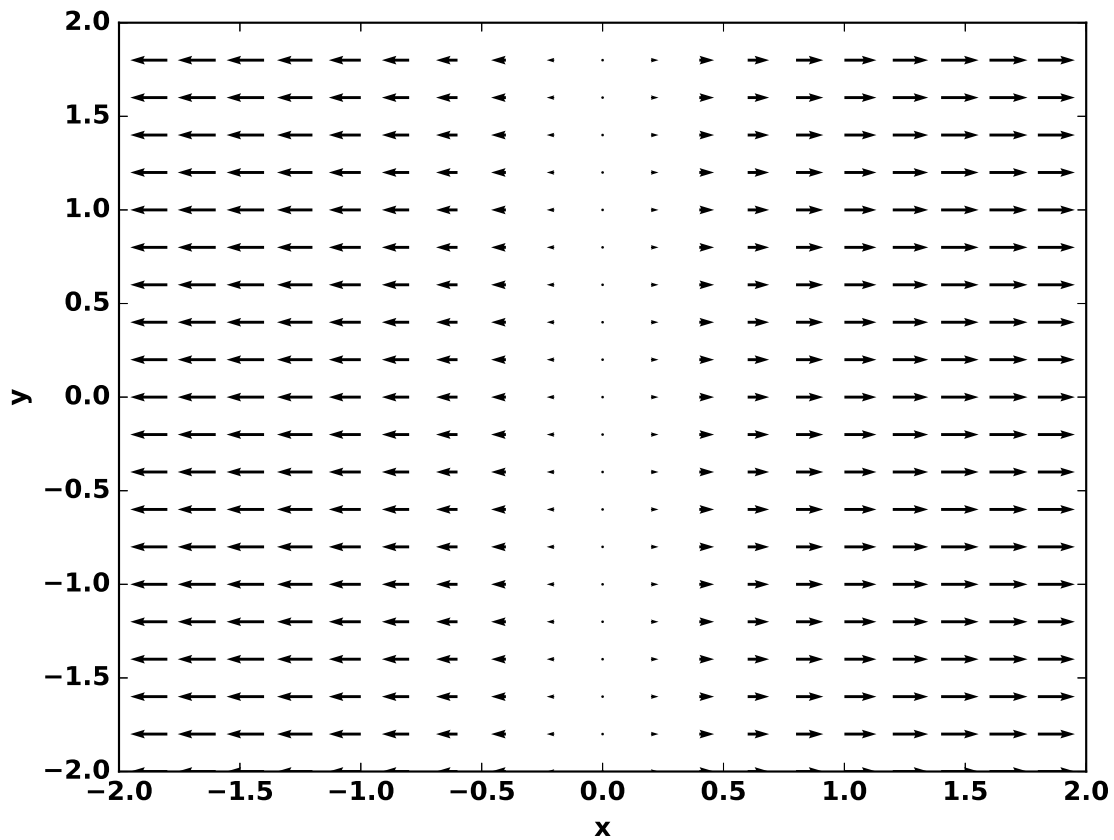
B. Calculate $\vec{\nabla} \times \vec{v}$ at $(x, y) = (0, 0)$.



(2) The plot below shows the 2D velocity vector field $\vec{v} = (u, v) = (\sin(x), 0)$.

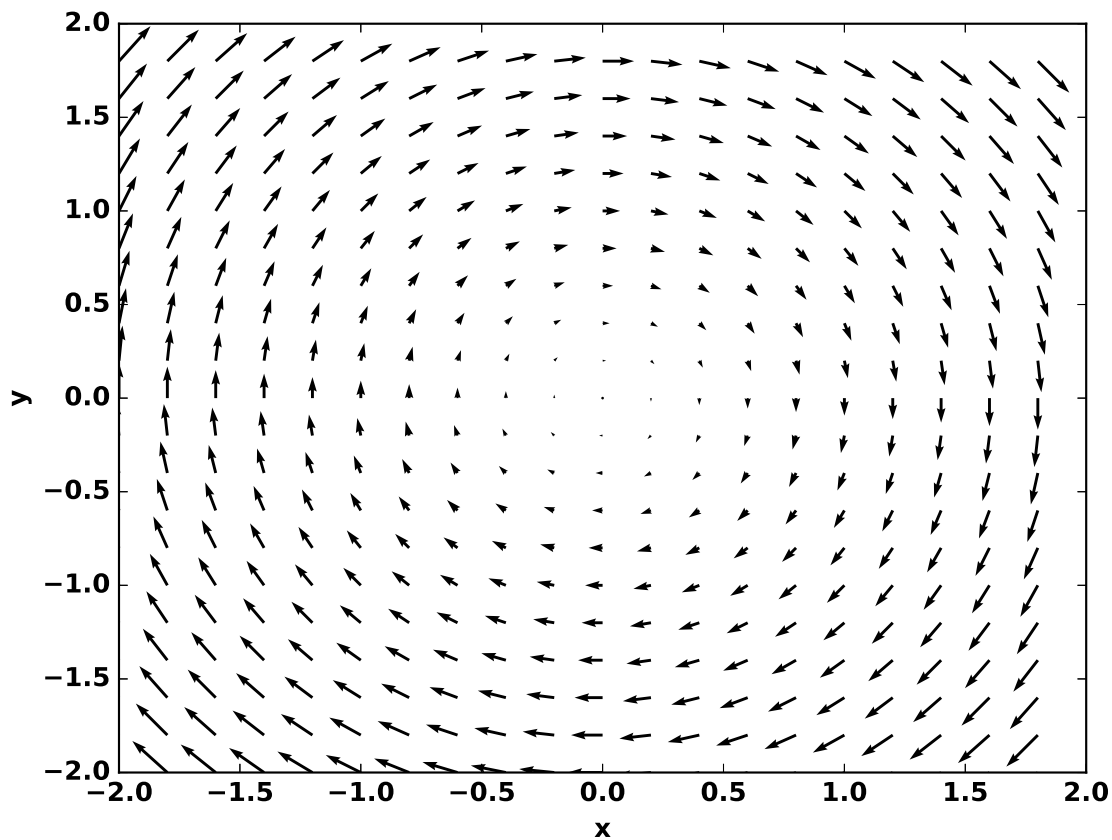
A. From looking at the plot, is $\vec{\nabla} \times \vec{v}$ positive, negative, or zero at $(x, y) = (0, 0)$?

B. Calculate $\vec{\nabla} \times \vec{v}$ at $(x, y) = (0, 0)$.



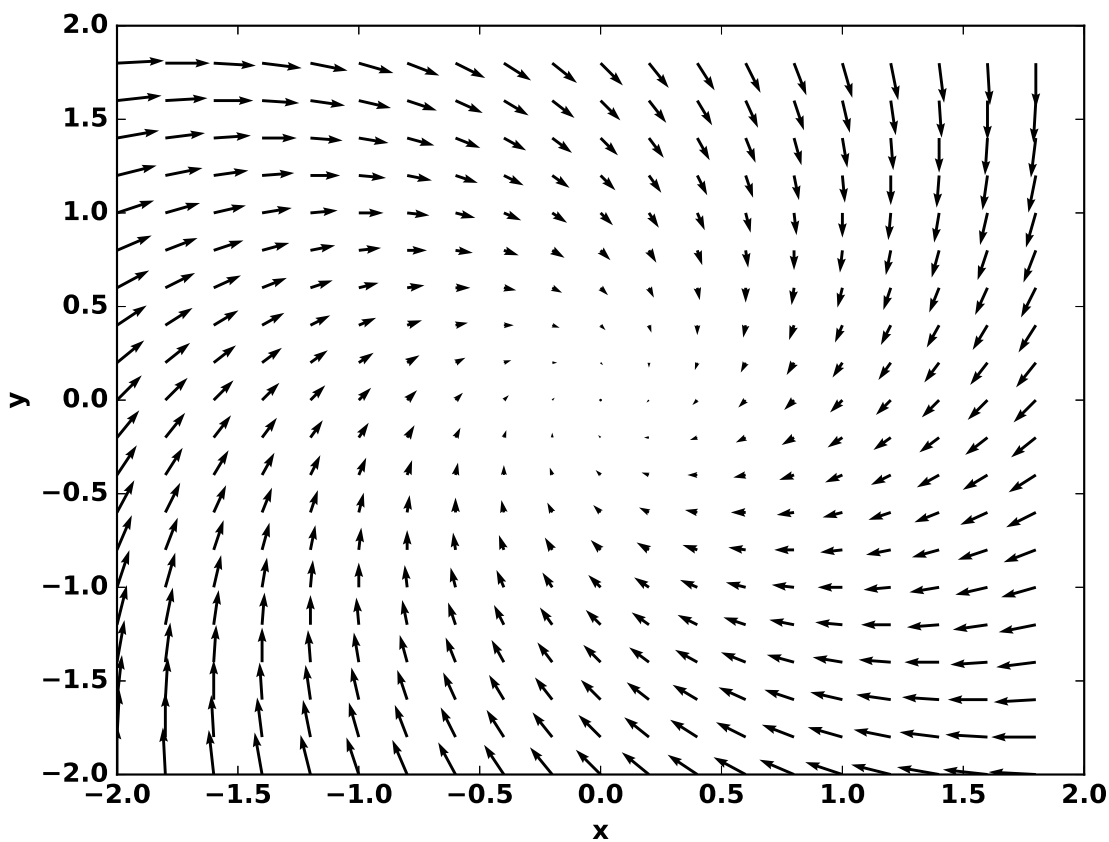
(3) The plot below shows the 2D velocity vector field $\vec{v} = (u, v) = (y, -x)$.

- A. From looking at the plot, is $\vec{\nabla} \times \vec{v}$ positive, negative, or zero at $(x, y) = (0, 0)$?
- B. Calculate $\vec{\nabla} \times \vec{v}$ at $(x, y) = (0, 0)$.
- C. Calculate $\vec{\nabla} \times \vec{v}$ at $(x, y) = (1, 1)$. Does it make sense from the plot why it is the same or different as $\vec{\nabla} \times \vec{v}$ at $(x, y) = (0, 0)$?



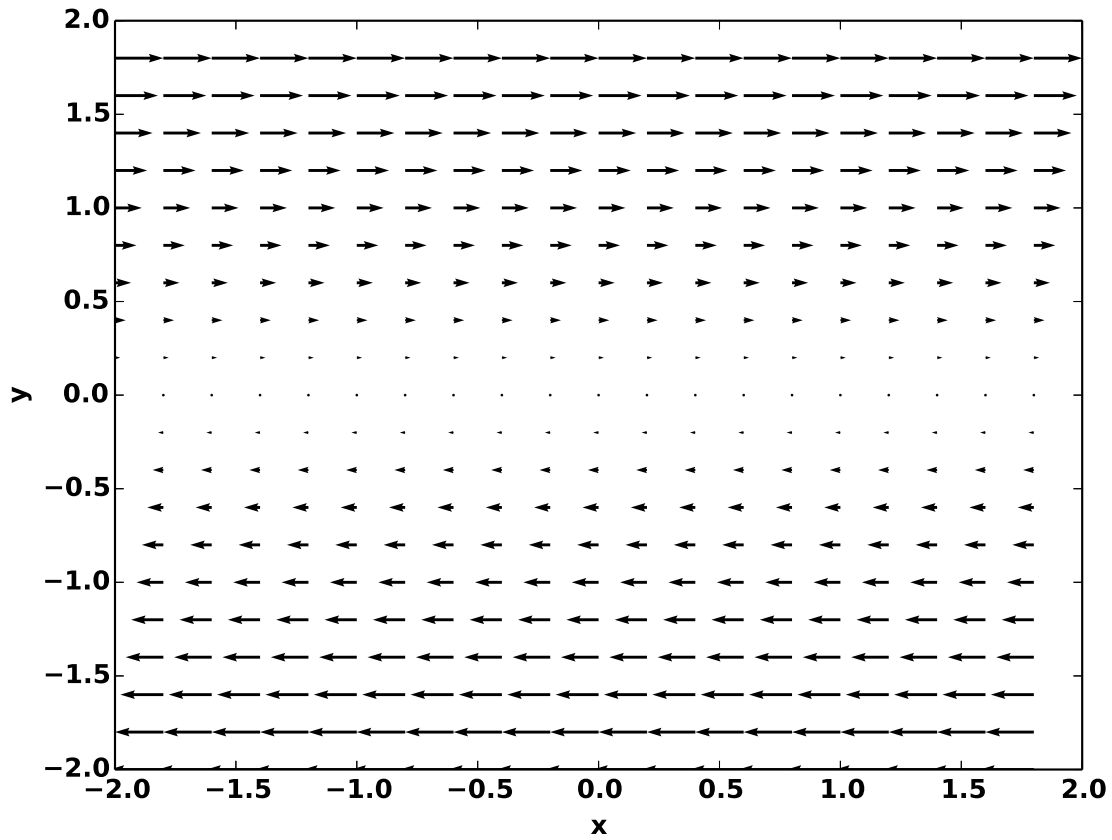
(4) The plot below shows the 2D velocity vector field $\vec{v} = (u, v) = (y - x, -x - y)$.

- A. From looking at the plot, is $\vec{\nabla} \times \vec{v}$ positive, negative, or zero at $(x, y) = (0, 0)$?
- B. Calculate $\vec{\nabla} \times \vec{v}$ at $(x, y) = (0, 0)$.
- C. Calculate $\vec{\nabla} \times \vec{v}$ at $(x, y) = (1, 1)$. Does it make sense from the plot why it is the same or different as $\vec{\nabla} \times \vec{v}$ at $(x, y) = (0, 0)$?



(5) The plot below shows the 2D velocity vector field $\vec{v} = (u, v) = (y, 0)$.

- A. From looking at the plot, is $\vec{\nabla} \times \vec{v}$ positive, negative, or zero at $(x, y) = (0, 0)$?
- B. Calculate $\vec{\nabla} \times \vec{v}$ at $(x, y) = (0, 0)$.



(6) Our old friend the streamfunction (ψ) is defined such that $u = -\frac{\partial\psi}{\partial y}$ and $v = \frac{\partial\psi}{\partial x}$. Calculate the vorticity in terms of the streamfunction, ψ .

(7) Consider a cyclonic storm in the midlatitudes of the northern hemisphere. Is the vorticity positive or negative?

5.4 The Coriolis Force

The Coriolis force is an apparent force felt in a rotating reference frame. Watch this video (https://youtu.be/dt_XJp77-mk) to understand the Coriolis force better. The Coriolis force is equal to

$$\vec{F}_c = -f\hat{k} \times \vec{v} \quad (39)$$

on a planet, where \hat{k} represents the vertical direction,

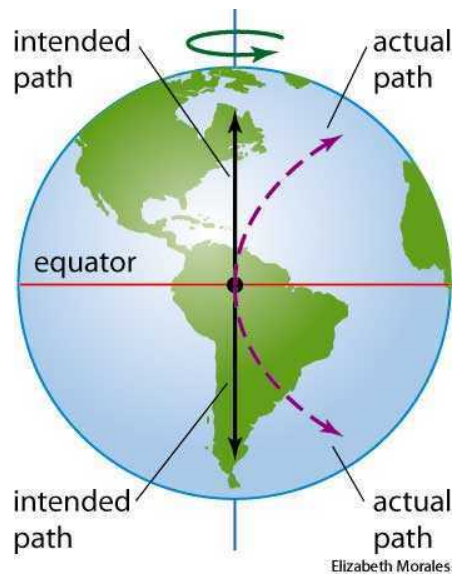
$$f = 2\Omega \sin \phi \quad (40)$$

is the Coriolis parameter, ϕ is the latitude, and $\Omega = 2\pi \text{ rad day}^{-1} = 7.3 \times 10^{-5} \text{ s}^{-1}$ on Earth. We can write the Coriolis force in the x direction (F_c^x) and the y direction (F_c^y) as

$$F_c^x = fv, \quad (41)$$

$$F_c^y = -fu. \quad (42)$$

Notice that a positive velocity in the x direction, u , causes a Coriolis force in the negative y direction (as long as we are in the Northern Hemisphere, so f is positive). Also, a positive velocity in the y direction, v , causes a Coriolis force in the positive x direction. Notice that the Coriolis force is always perpendicular and to the right of the flow in the Northern Hemisphere (see the diagram below). In the Southern Hemisphere the Coriolis force is always perpendicular and to the left of the flow, since f is negative.



We can also use the right-hand rule and the formula for the Coriolis force ($\vec{F}_c = -f\hat{k} \times \vec{v}$) to determine the direction it acts in. To use the right-hand rule for a cross product ($\vec{A} \times \vec{B} = \vec{C}$), point the fingers of your right hand toward vector \vec{A} and curl them toward vector \vec{B} . Your thumb will now point in the direction of vector \vec{C} . In the Northern Hemisphere, f is positive, so the right-hand rule tells us that the Coriolis force pushes an object to the right of its direction of travel (see the diagram above, and remember the negative sign in the formula for the Coriolis force). In the

Southern Hemisphere, f is negative and the Coriolis force bends an object to the left of its direction of travel.

The Rossby number (Ro) is used to characterize the importance of the Coriolis force in atmospheric flows.

$$Ro = \frac{U}{fL}, \quad (43)$$

where U is the typical speed of air or the object under consideration and L is the typical length scale of the flow. The Coriolis force is dominant if $Ro \ll 1$ and the Coriolis force can be neglected if $Ro \gg 1$. If $Ro \approx 1$, then the Coriolis force is important, but not dominant.

The Rossby number is extremely important. It is named after Carl-Gustaf Rossby, one of the most important atmospheric scientists of all time. He was so amazing that he appeared on the cover of Time magazine! Rossby was the chair of the Department of Meteorology at the University of Chicago in the 1940's. The Department of Meteorology merged with the Department of Geology in the 1960's to form the Department of the Geophysical Sciences, and Hinds building was built to house it.



Exercises

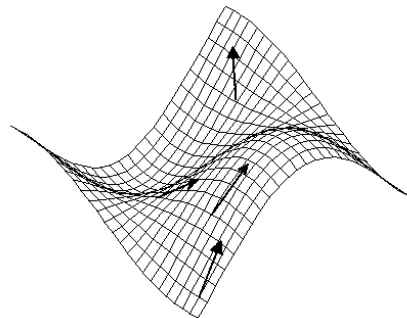
- (1) Jon Lester pitches a fastball to Willson Contreras in Wrigley field. Estimate the Rossby number. Will the Coriolis force significantly affect how Jon aims his pitch?
- (2) Suppose you are crossing the Equator headed directly south at 10 m s^{-1} . How much of a Coriolis force would you feel, and in what direction? What about if you are headed south from the North Pole?
- (3) Suppose you try to travel in a straight line a distance of L on Earth's surface at a velocity of U . As a result of the Coriolis force, you would deviate to the right (in the Northern Hemisphere) by a distance d by the time you have traveled forward by a distance of L , assuming that friction with the ground doesn't keep you from deviating side-to-side. Let's assume that $d \ll L$, so that we can approximate the path traveled as always in the same direction, even though the true path deviates to the right. Calculate the time (T) it takes to travel the distance L .
- (4) Calculate the Coriolis force acting on you as you move. Note that what we have been calling the Coriolis "force" is really an acceleration.
- (5) Calculate d , the distance you would deviate to the right based on the acceleration you feel to the right and the amount of time you feel it. How does your answer relate to the Rossby number? Why does this make sense?
- (6) How far off course would you be if you jog at 3 m s^{-1} in a straight line from the University of Chicago to the Bean statue downtown (about 10 km)? What if you drive at 30 m s^{-1} ?
- (7) How far off course would you be if you drive at 30 m s^{-1} in a straight line from Chicago to Little Rock (about 1000 km)? What about if you fly at 300 m s^{-1} ?

5.5 The Pressure Gradient Force

Today we're going to talk about the pressure gradient force. The pressure gradient force is the force that pushes from high pressures toward low pressures. First, we'll derive a formula for the pressure gradient force in one dimension, then we'll apply our knowledge of the pressure gradient force to weather maps. To do this, we'll need to use the gradient operator. The gradient is the multivariable version of the derivative. It points in the direction of the steepest slope and its magnitude is the magnitude of the steepest slope (see the diagram below). The gradient of the function $f(x,y)$ is defined as

$$\vec{\nabla}f(x,y) = \left(\frac{\partial f}{\partial x}, \frac{\partial f}{\partial y} \right). \quad (44)$$

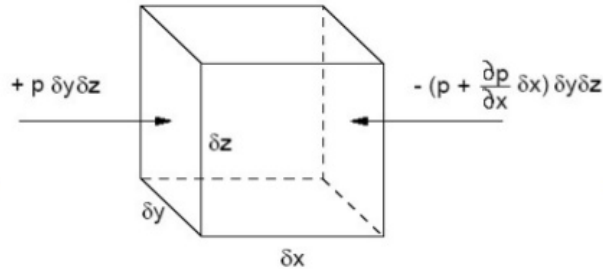
In words, the gradient of $f(x,y)$ is a vector that has a magnitude of $\frac{\partial f}{\partial x}$ in the x-direction and a magnitude of $\frac{\partial f}{\partial y}$ in the y-direction.



Gradient Vectors Shown at Several Points on the Surface of $\cos(x)\sin(y)$

Exercises

(1) Let's derive the pressure gradient force in the x direction. The diagram below shows an infinitesimal cube of air with pressure pushing on it from the right and left. The left face of the cube is at x , and the right face is at $x + \delta x$.



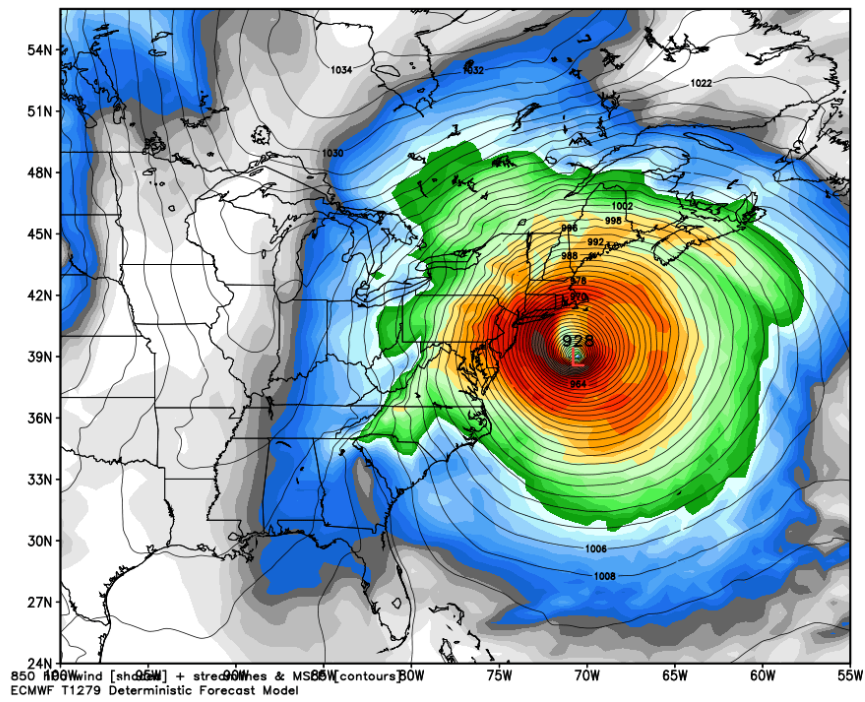
- Show that the force pushing on the cube from the left in the x direction is $P(x)\delta y\delta z$.
- Show that the force pushing on the cube from the right in the x direction is $-P(x + \delta x)\delta y\delta z$.
- The total force on the cube in the x direction is $F_x = P(x)\delta y\delta z - P(x + \delta x)\delta y\delta z$. Simplify F_x using $P(x + \delta x) \approx P(x) + \frac{\partial P}{\partial x}\delta x$.
- Show that the total mass of the cube is $m = \rho\delta x\delta y\delta z$, where ρ is the density of air in the cube.
- Using Newton's second law ($F = ma$), show that $\frac{du}{dt} = -\frac{1}{\rho}\frac{\partial P}{\partial x}$, where u is the velocity in the x direction.
- We call $-\frac{1}{\rho}\frac{\partial P}{\partial x}$ the pressure gradient force, even though it is really the force per unit mass. Explain why there is a negative sign in the pressure gradient force.

(2) Now let's think about the pressure gradient force in two dimensions. The pressure gradient force can operate both in the x direction and the y direction. We can write $\vec{F}_p = \left(-\frac{1}{\rho}\frac{\partial P}{\partial x}, -\frac{1}{\rho}\frac{\partial P}{\partial y}\right) = -\frac{1}{\rho}\vec{\nabla}P$. The figure below shows a surface pressure contour map of hurricane Sandy as it approaches New York City, as well as colored contours of surface wind speed.

- The low located at the "L" at roughly 70W, 39N is the center of hurricane Sandy. Does the pressure gradient point toward or away from the center of hurricane Sandy?
- Does the pressure gradient force point toward or away from the center of hurricane Sandy?
- Is the pressure gradient force larger near Chicago or near New York City?

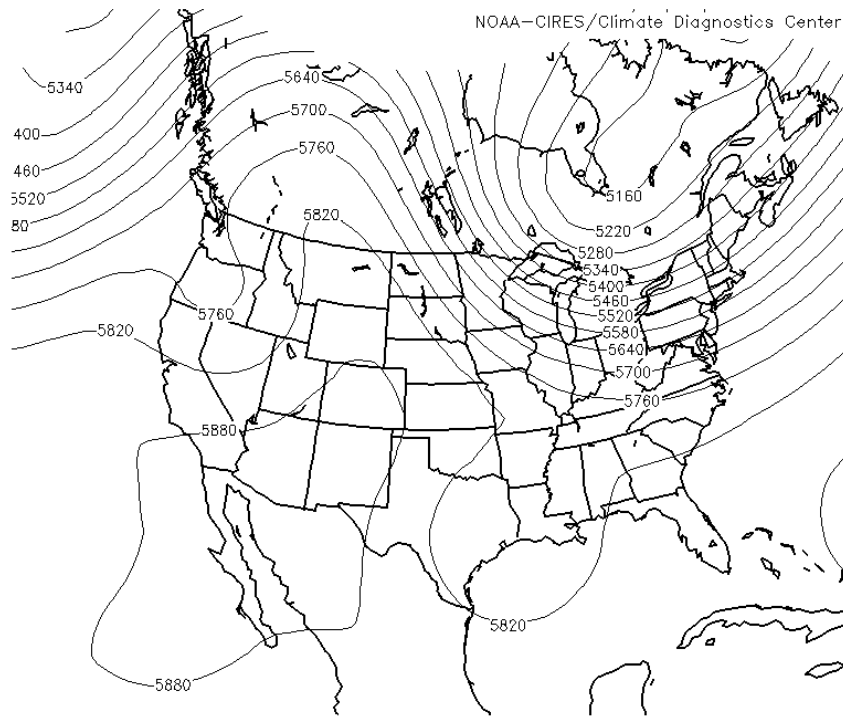
ECMWF 850 hPa Wind Speed [knots] and MSLP [hPa]
Init: 12Z22OCT2012 -- [216] hr --> Valid Wed 12Z31OCT2012

Min|Max SLP: 927.8 hPa | 1036.6 hPa
MaxWind: 97.0 knots



(3) Through a coordinate transformation, we can rewrite the pressure gradient force as $\vec{F}_p = -g\vec{\nabla}_z = -\vec{\nabla}\Phi$, where Φ is the geopotential. z is the height of a given pressure level, sometimes called the geopotential height. The plot below shows the climatological mean geopotential height at a pressure of 500 mb over North America in the month of October.

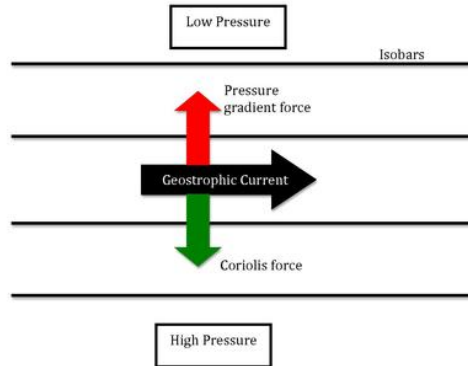
- A. Over the US and Canada, does the pressure gradient force tend to point more toward the north or more toward the south?
- B. What is the direction of the pressure gradient force at the border of North Dakota and Canada?
- C. Is the magnitude of the pressure gradient force larger over Miami or Toronto?



500mb Geopotential Height (m) Composite Mean
 10/19/52 to 10/19/52
 NCEP/NCAR Reanalysis

5.6 Geostrophic Balance 1

Above the atmospheric boundary layer friction and acceleration are generally negligible. The dominant horizontal force balance is between the pressure gradient force and the Coriolis force. In this limit the Rossby number is small. This is called “geostrophic balance” and it is an extremely important concept in atmospheric science. Remember, the pressure gradient force flows down gradient from high to low pressure, and the Coriolis force points 90° to the right of the velocity vector in the Northern Hemisphere. This means that geostrophic balance is established with the velocity flowing at right angles to the pressure gradient (see the figure below)!



Mathematically, we can write the pressure gradient force in the x direction as $-\frac{1}{\rho} \frac{\partial P}{\partial x}$ or as $-\frac{\partial \Phi}{\partial x}$, where $\Phi = gz$ is the geopotential ($g=9.8 \text{ m s}^{-2}$). We can write the Coriolis force in the x direction as $f v$, where $f = 2\Omega \sin \phi$ is the Coriolis parameter, ϕ is the latitude, and $\Omega = 2\pi \text{ rad day}^{-1} = 7.3 \times 10^{-5} \text{ s}^{-1}$ on Earth. To check that we have the sign right, consider a northward flow (positive v) in the Northern Hemisphere. The Coriolis force should point to the right of this flow, or in the positive x direction, so we have the sign right. In order for the Coriolis force to balance the pressure gradient force, we need their sum to be zero: $0 = f v - \frac{\partial \Phi}{\partial x}$, where we are using the geopotential version of the pressure gradient force. This can also be written as $f v = \frac{\partial \Phi}{\partial x}$. Similarly, we can perform a force balance in the y direction to find that $f u = -\frac{\partial \Phi}{\partial y}$. f depends on latitude, and therefore on y , but let's only consider small enough deviations in latitude that f is roughly constant. We can therefore define a streamfunction,

$$\psi = \frac{\Phi}{f} = \frac{gz}{f}, \quad (45)$$

such that

$$u = -\frac{\partial \psi}{\partial y}, \quad (46)$$

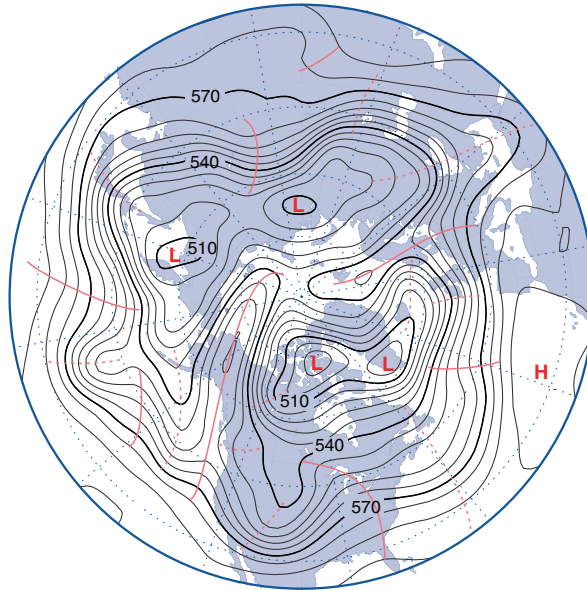
$$v = \frac{\partial \psi}{\partial x}, \quad (47)$$

This is why we can infer velocities from maps of geopotential height! As a reminder, notice that if we want u , the velocity in the x direction, we need to look at the derivatives of the streamfunction

in the y direction. Similarly, if we want v , the velocity in the y direction, we need to look at derivatives in the x direction. That's how a streamfunction works, and it ultimately works for our particular streamfunction, which is proportional to pressure, because the Coriolis force points to the right of the velocity.

Exercises

(1) The figure below is the weather map from Problem Set 07. The solid contours show the geopotential height (z) of the 500 hPa pressure surface on a particular day at a particular time. The numbers are contour levels in decameters (570 decameters = 5700 meters) and the contour spacing is 60 m. Bands of latitude and longitude are shown as dotted lines.



- A. Estimate the speed of the jet stream over the North Atlantic. You may use the fact that the latitude bands are in 15° increments and that one degree of latitude corresponds to 111 km.
- B. Convert your estimate from m s^{-1} to mph.
- C. The distance from Chicago to Berlin is about 4400 mi. A Boeing 747 has a cruising speed of 550 mph through the air. Assume a flight from Chicago to Berlin has a constant tail wind equal to your estimate of the jet stream speed. How many hours does the flight take?
- D. Assume a flight from Berlin to Chicago has a constant head wind equal to your estimate of the jet stream speed. How many hours does the flight take?

5.7 Geostrophic Balance 2

Geostrophic balance is really important for understanding atmospheric flow in the midlatitudes. It's so important that we're going to spend another class getting familiar with it! Last time we found that we can define a geostrophic streamfunction as $\psi = \frac{\Phi}{f} = \frac{gz}{f}$ such that $u = -\frac{\partial\psi}{\partial y}$ and $v = \frac{\partial\psi}{\partial x}$, where z is the geopotential height. Alternatively, we can write the pressure gradient force as $\vec{F}_p = \left(-\frac{1}{\rho} \frac{\partial P}{\partial x}, -\frac{1}{\rho} \frac{\partial P}{\partial y}\right) = -\frac{1}{\rho} \vec{\nabla}P$. Performing a force balance between the pressure gradient force and the Coriolis force leads to the definition of an alternative streamfunction,

$$\psi = \frac{P}{\rho f}. \quad (48)$$

This streamfunction assumes that the density is approximately constant horizontally at a given level, and again neglects variations in f , the Coriolis parameter, in the y direction.

Exercises

(1) Watch this movie (<https://youtu.be/n4rJX4IIRaU>). Focus on the extratropical cyclone above Chicago. Estimate the pressure differential between the storm center and far away from the center. How big is this differential compared to standard sea level pressure? Hints: You may assume an air density of 1 kg m^{-3} . You will need to estimate the distances involved and read the video caption to estimate the amount of time that elapses over the course of the video.

(2) Consider an intense tropical cyclone located at 15° latitude. Its maximum azimuthal wind speed is 60 m s^{-1} , which occurs just outside the eyewall (10 km from the storm center).

- A. Calculate the Coriolis force (really an acceleration) experienced by the air as it rotates around the cyclone's center. In which direction (toward or away from the center) does the Coriolis force point?
- B. Calculate the centrifugal acceleration ($\frac{v^2}{r}$) experienced by the air as it rotates around the cyclone's center. In which direction (toward or away from the center) does the centrifugal acceleration point?
- C. Is one of these accelerations larger than the other? What is it balanced by?
- D. How is this different from the situation for the extratropical cyclone in the last question?

5.8 Potential Vorticity

Today we're going to learn about the "potential vorticity." It is a conserved quantity for fluid in a rotating reference frame. Potential vorticity conservation is the fluid equivalent of angular momentum conservation for solids. To remember how the conservation of angular momentum works, watch this video (<https://youtu.be/FmnkQ2ytlO8>). Conservation of angular momentum allows the skater in the video to increase her angular velocity (spininess) by pulling her legs and arms into her body.

For fluids we can define a quantity called the potential vorticity,

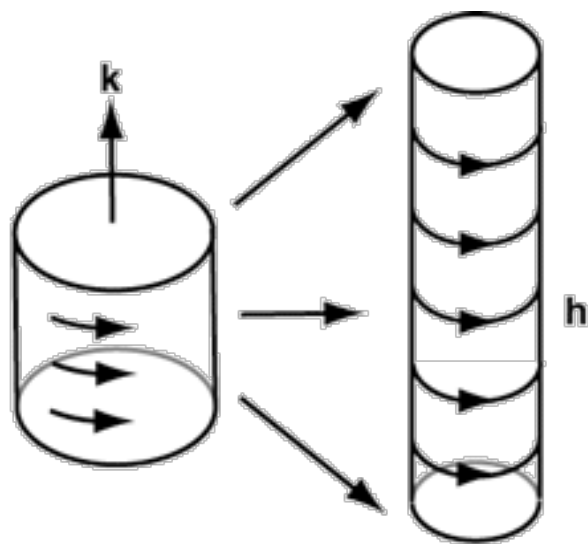
$$Q = \frac{f + \zeta}{H}, \quad (49)$$

where f is the Coriolis parameter and represents planetary vorticity,

$$\zeta = \hat{k} \cdot \vec{\nabla} \times \vec{v} = \frac{\partial v}{\partial x} - \frac{\partial u}{\partial y}, \quad (50)$$

is the relative vorticity (the vorticity of the fluid itself, also ζ is pronounced "zeta"), and H is the thickness of the fluid (the vertical distance, or height). Technically this definition applies for a constant density fluid, but it gives us a good qualitative picture of what happens in the atmosphere, and can be generalized to the atmospheric case with a bit more math. The point is that the potential vorticity, Q , is conserved (constant) during flow. This is a very powerful statement because it allows us to predict aspects of the flow easily. Atmosphere geeks get so excited about potential vorticity, or PV, that they even write songs about it (<https://youtu.be/g2-RpvGGQU4>). To use potential vorticity in the atmosphere, we just have to think about the thickness, H , as the thickness between two layers of constant potential temperature.

The figure below shows how potential vorticity conservation works. Assume we have a parcel of air with some vorticity and thickness associated with it. For now let's assume that all of it's vorticity is relative and none of it is planetary (say the parcel is at the equator), so you can see all of the spinning directly. This air parcel is represented on the left of the figure below. Now let's assume that the air is stretched vertically. To conserve mass it will have to squeeze in toward its center. Just like how the skater spun up as she pulled her arms and legs toward her center, the air spins up as it stretches vertically and pulls in toward its center. This is represented by the right diagram in the figure below. The higher vorticity on the right is represented by more lines curling around the air parcel. The fact that the two parcels have the same potential vorticity, even though they have different vorticities, is the statement of potential vorticity conservation that we can use to understand atmospheric flow. We just have to remember that $Q = \frac{f + \zeta}{H}$ is conserved.



Exercises

(1) A cylindrical column of air with a radius of 100 km starts at the equator at rest. It moves northward to Chicago maintaining a constant height.

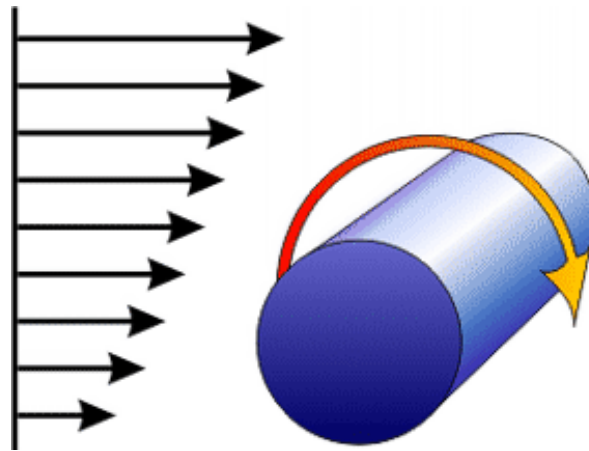
- A. Is the relative vorticity, $\zeta = \frac{\partial v}{\partial x} - \frac{\partial u}{\partial y}$, of the air positive or negative when it reaches Chicago?
- B. Does the column of air spin clockwise or counter-clockwise when it reaches Chicago?
- C. Explain physically how the conservation of potential vorticity leads to the column spinning in the direction it does. Hint: Consider a column of fluid in a frictionless jar at rest on top of a turntable record player. How does its rotation change if you turn the record player on so that it starts spinning?
- D. Let's assume that the column has a tangential velocity of U in the counter-clockwise direction at its radius, R . The tangential velocity is zero at the center of the column. Show that we can approximate $\frac{\partial v}{\partial x} \approx \frac{U}{R}$ and $\frac{\partial u}{\partial y} \approx -\frac{U}{R}$.
- E. Use this to estimate the mean tangential velocity at the perimeter of the air column when it reaches Chicago.

(2) An air column with zero relative vorticity ($\zeta = 0$) stretches from the surface to the tropopause, which we assume is a rigid lid, at 10 km. The column follows the jet stream and moves zonally onto the Rocky Mountains, which we idealize as a big plateau.

- A. Which direction does the column start spinning in?
- B. Assume that the air column starts at 60° N and moves directly eastward onto the plateau, which is 2.5 km high. What is its relative vorticity once it moves onto the plateau?
- C. Suppose it then moves southwards to 30° N while still on the plateau. What is its relative vorticity now?

5.9 Tornadoes

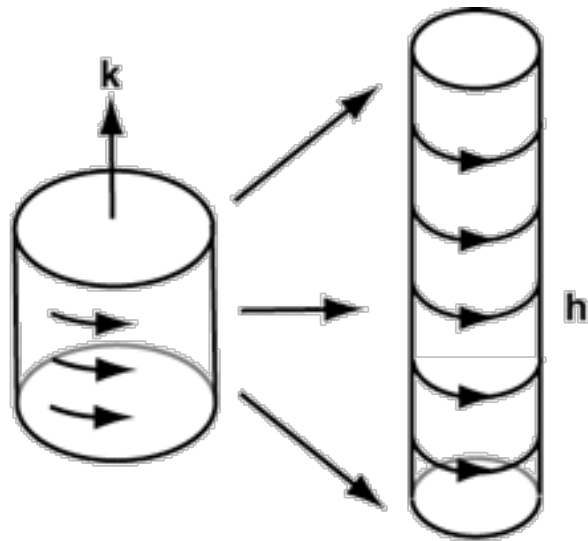
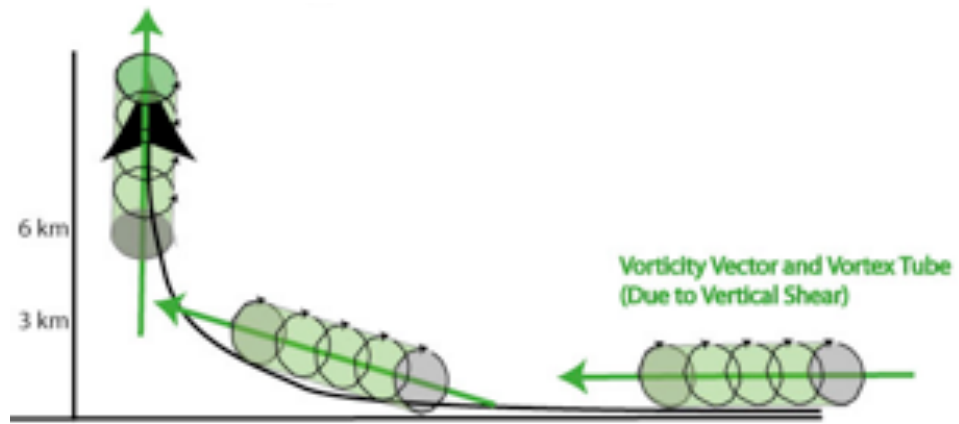
Today we're going to learn how tornadoes form using our knowledge of potential vorticity. The relative vorticity is so high in tornadoes that we can neglect the planetary vorticity in this discussion. There are three steps to the formation of tornadoes. First, a large amount of vorticity needs to be generated. This is done by a wind shear (winds that are higher up in the atmosphere than at the surface). It is natural for a wind shear to develop near the surface because surface friction brings the wind to near zero right at the surface. The special condition we need is a large wind shear, so really fast horizontal winds relatively close to the surface. The diagram below shows how a wind shear leads to vorticity. Notice that it is horizontal vorticity.

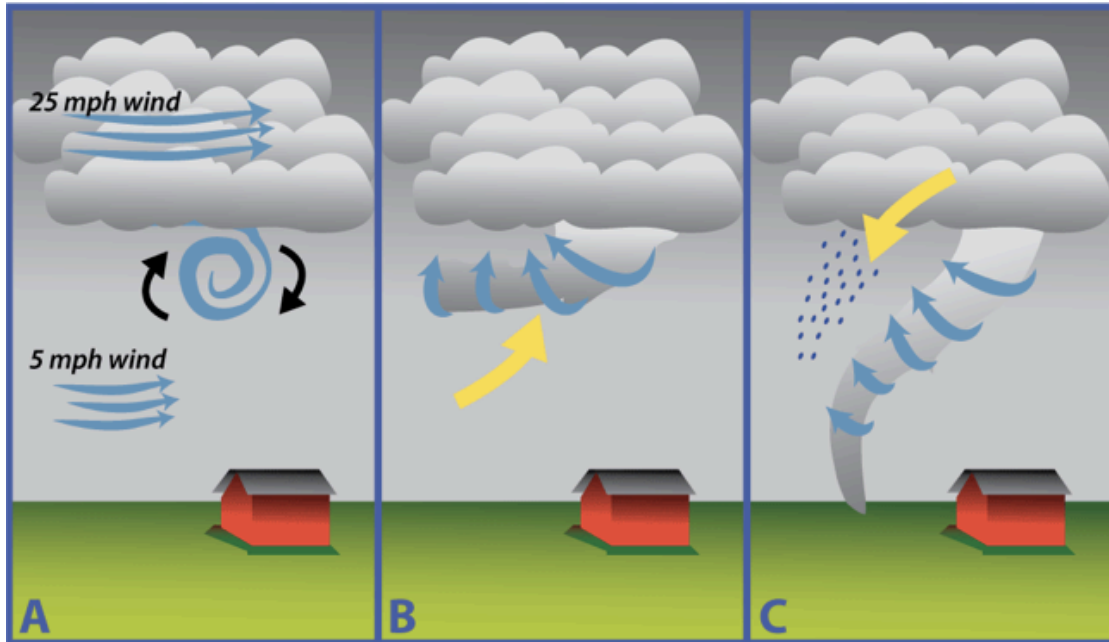


Next this horizontal vorticity is tilted vertically. This is accomplished by convection. See the diagram below. To understand how this works, watch this video (<https://youtu.be/sb82tVOq2dY>) of high divers. At the start of most of these jumps the high divers cause rotation of their body around the axis from their feet to their head. They then allow this axis to tilt in a range of directions. The body keeps spinning around the axis of the trunk, but the trunk can be pointed in different directions. A similar thing is happening when horizontal vorticity is tilted upward by convection to become vertical vorticity.

Finally, the air column is stretched vertically, which increases its vorticity. We can understand this through the conservation of potential vorticity (see the diagram below, which is from last class). The convection that caused the tilting also causes the stretching.

The diagram below puts the three steps together. In panel A wind shear generates horizontal vorticity. In panel B vertical convection transforms the horizontal vorticity into vertical vorticity. In panel C the convection stretches the vertical vorticity, which causes the vertical vorticity to increase drastically, which we observe as a tornado.





Finally, you may have heard of the “Fujita scale,” which is used to measure tornado intensity. It is named after Ted Fujita, who was a member of the Department of Meteorology and later the Department of the Geophysical Sciences at the University of Chicago from the 1950’s until his death just before the turn of the century. Fujita was a young professor in Japan during the second World War in the mid-20th century. After the United States dropped an atomic bomb on the city of Hiroshima, Japan, as part of that war, the Japanese government sent Fujita in to figure out what had happened. By carefully analyzing burn marks on objects such as gravestones around the city, he was able to reconstruct the three-dimensional location and power of the explosion fairly accurately. He later used similar methods to study tornadoes in North America by analyzing the wreckage they create. This led to the development of his famous scale, as well as his nickname, “Mr. Tornado.” You can see Mr. Tornado in action (and some vintage footage of Hinds building as well as 20th century technology) in this video (<https://youtu.be/YGrhw1YSWUU>).

Exercises

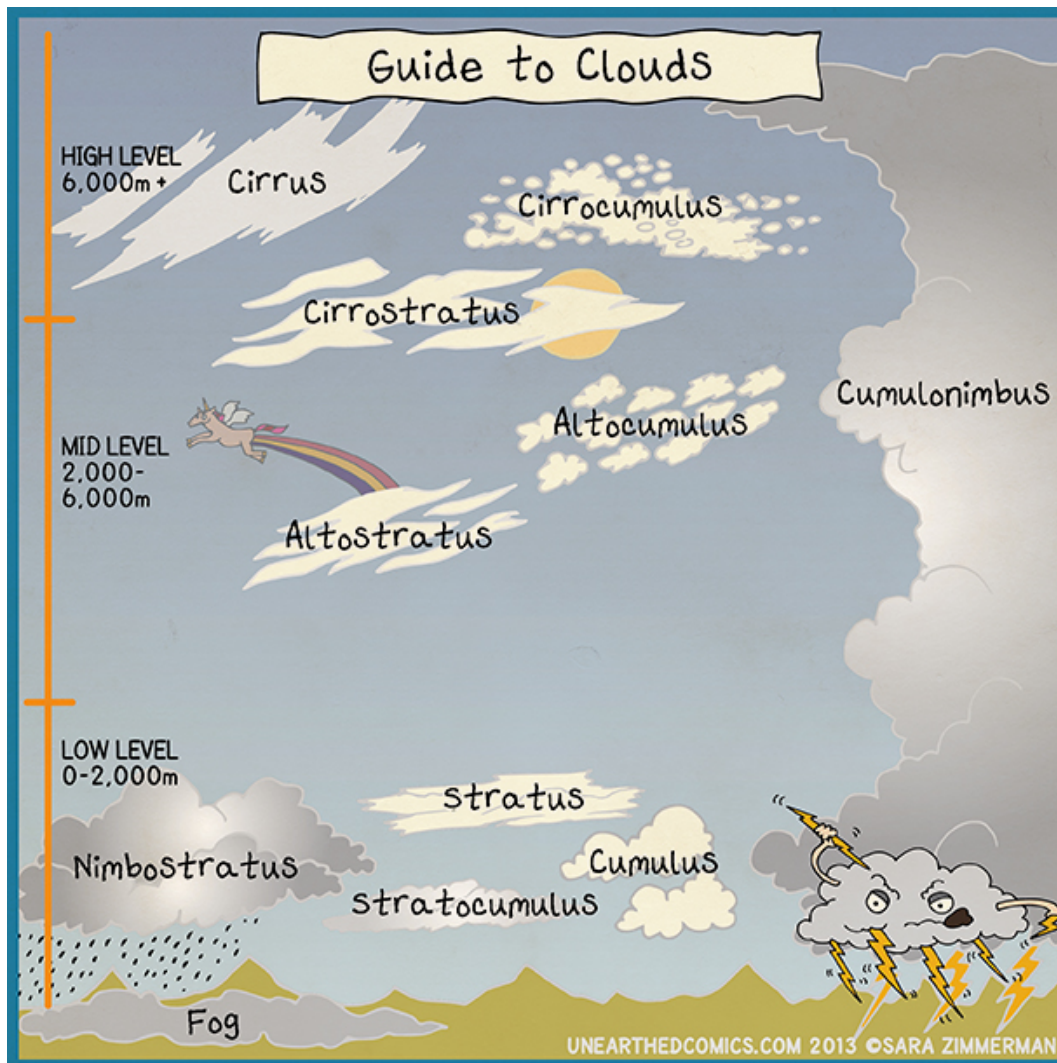
(1) Let's try to put some numbers on the qualitative explanation above.

- A. Suppose we are out in the Great Plains and there is a strong wind shear. The wind (u) is 0 m s^{-1} at the surface and linearly increases to 50 m s^{-1} at a height of 1 km, above which it has a constant value of 50 m s^{-1} . Calculate the horizontal vorticity, which in this case will be $\frac{\partial u}{\partial z}$.
- B. Now suppose that a 400 m long stretch of this rotating air is tilted vertically by convection to form a column of rotating air. What is the radius of the column of rotating air?
- C. What is the vertical (relative) vorticity (ζ) of the column of rotating air?
- D. The potential vorticity is $Q = \frac{f+\zeta}{H}$. Compare f to ζ to show that we can drop f .
- E. Suppose that now convection stretches the air vertically by a factor 10, so that the height of our rotating column increases from 400 m to 4 km. What is the vertical vorticity now?
- F. If we approximate the air as constant density, then the volume of an air column must be conserved as it is stretched. What is the new radius of the column of rotating air after it has been stretched vertically by a factor of 10?
- G. What is the tangential velocity at the perimeter of the rotating column of air, which we now recognize as a tornado?
- H. Calculate the Coriolis acceleration ($f v$) at the perimeter of the tornado.
- I. Calculate the centrifugal acceleration ($\frac{v^2}{r}$) at the perimeter of the tornado.
- J. Using the symbolic formulas for centrifugal and Coriolis accelerations, what is the ratio of the centrifugal to the Coriolis acceleration?
- K. This formula has a special name. What is it?
- L. Use this to again argue that planetary rotation is not important for the tornado.

6 Bonus

6.1 Clouds

Today is going to be a fun day where we learn about the types of clouds. **Cirrus** clouds are high wispy clouds that can precede storms but do not lead to precipitation themselves. Cirrus means lock of hair. **Stratus** clouds are low clouds that form at a constant layer and stretch for large horizontal distances and can be associated with light rain. Stratus means layer. **Cumulus** clouds are usually at low levels, look like cotton balls, are not associated with rain, and often (but not always) come in 1D or 2D patterns. Cumulus means pile. Some clouds appear to be combinations of two types, so we just merge the names. We can also add **alto**, means high, or **nimbus**, which means rainstorm, to the name of a cloud as appropriate. See the diagram below for schematic examples.



Exercises

- (1) Play the game at this link (<https://www.purposegames.com/game/cloud-types-quiz>). Keep playing until you can consistently get 100%.
- (2) Now try this game (<http://www.mnn.com/earth-matters/climate-weather/quiz/can-you-name-these-clouds>), which shows some real cloud pictures. There are some weird ones in there that are cool and rare.
- (3) Let's go outside and try to identify some clouds!

7 Problem Sets

7.1 Problem Set 1

(1) Watch this movie (<https://youtu.be/KSzEITYS9qM>), which shows two satellite movies side-by-side.

- A. One of the movies shows pictures of Earth during Jan/Feb, the other shows Earth during Jul/Aug. Which of the movies corresponds to which season, and why? Name several reasons.
- B. Over the continents, which regions/countries are associated with the downwelling branch of the Hadley circulation? Based on the movies, which vegetation patterns do you find in these regions and why?

(2) Watch these movies of surface winds from Jan/Feb (<https://youtu.be/YveJAU5sQiI>) and Jul/Aug (<https://youtu.be/u2g0X1mDjW0>).

- A. Where are surface winds generally stronger - over the ocean or over land? Why?
- B. Look at India. For each season, does the surface wind blow from ocean to land, or the opposite? Why?
- C. The Pacific Ocean got its name from Ferdinand Magellan, who reached it after passing through the Strait of Magellan at the end of 1520. In your opinion, why did Magellan call the ocean “Pacific”?
- D. Now compare the surface wind movies with the surface pressure movies from class. Are the mid-latitude blobs of high surface winds associated with high or low surface pressure?

7.2 Problem Set 2

(1) Estimate the mass of CO_2 that a new forest can remove from the atmosphere per year per square kilometer.

(2) Estimate the mass of CO_2 humans have added to the atmosphere through deforestation throughout history. Compare this to the mass of CO_2 added to the atmosphere by cars in the US each year.

7.3 Problem Set 3

(1) This problem is based on a method that has been used to reconstruct the atmospheric pressure on ancient Earth [7]. Vesicles in crystallized lava flows form because air bubbles were trapped in the lava as it crystallized. The figure shows a schematic diagram of this.

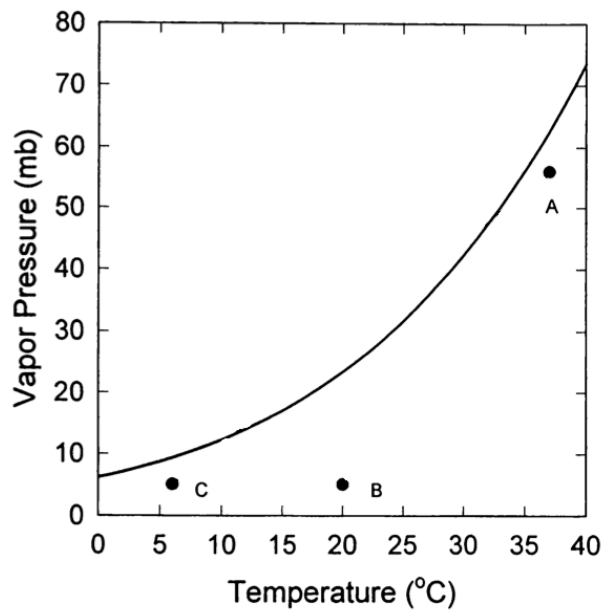


- A. The diagram shows that vesicles near the top of a lava flow will tend to have a larger volume than vesicles near the bottom. Explain physically why this is.
- B. Suppose that the atmospheric pressure is P_a and the lava density is ρ_l . Derive a formula for the pressure felt by the air bubbles when the vesicles are formed as a function of depth (z) in the lava.
- C. You can apply your formula from part B to determine the air pressure inside a bubble near the top of a lava flow and near the bottom (at a depth of d). Use this to find an equation that yields atmospheric pressure as a function of the ratio of vesicle volume near the top of the lava flow (V_t) to that near the bottom of the lava flow (V_b). You may assume that the number of moles of air per bubble is constant and that the temperature at which crystallization occurs is the same near the top and bottom of the lava flow.
- D. Let the atmospheric scale height be H and the atmospheric surface pressure be P_s . Derive a formula for altitude as a function of the atmospheric pressure.
- E. Suppose that we wish to calibrate this methodology by studying recent lava flows on an active volcano, such as Mauna Loa in Hawaii. Combine your results from (C) and (D) to derive a formula for the altitude of a lava flow as a function of the ratio $\frac{V_t}{V_b}$, which we can measure. For lava flows of equal depth, how will $\frac{V_t}{V_b}$ change as you consider flows of increasingly large altitudes?

7.4 Problem Set 4

(1) Explain why a liquid boils when its saturation vapor pressure equals ambient atmospheric pressure. Imagine we bring water to a boil in a pot in Chicago and in Denver. We then put an egg into the boiling water. In which city will the egg be fully cooked (hard boiled) first? Why?

(2) The figure below shows the saturation vapor pressure of water as a function of temperature. When you exhale, the air coming from your lungs is at body temperature and close to being saturated (point “A”). Now you go outside on a warm day (when ambient air is at point “B”), and on a cold day (when ambient air is at point “C”). Do you expect to see your breath on either day? Why? Hint: consider what the mixing of two parcels of air would look like on this plot.

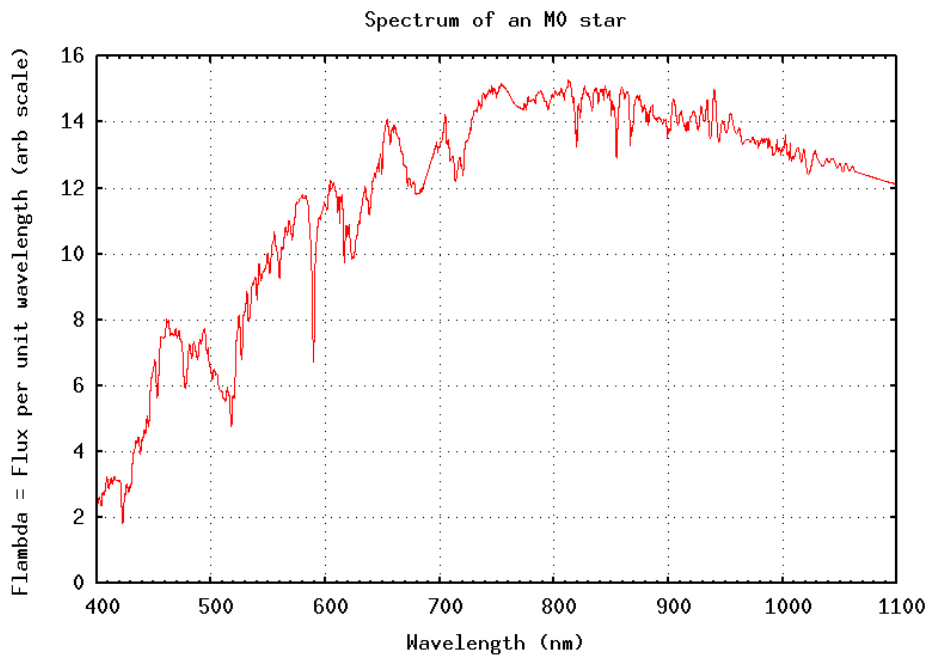
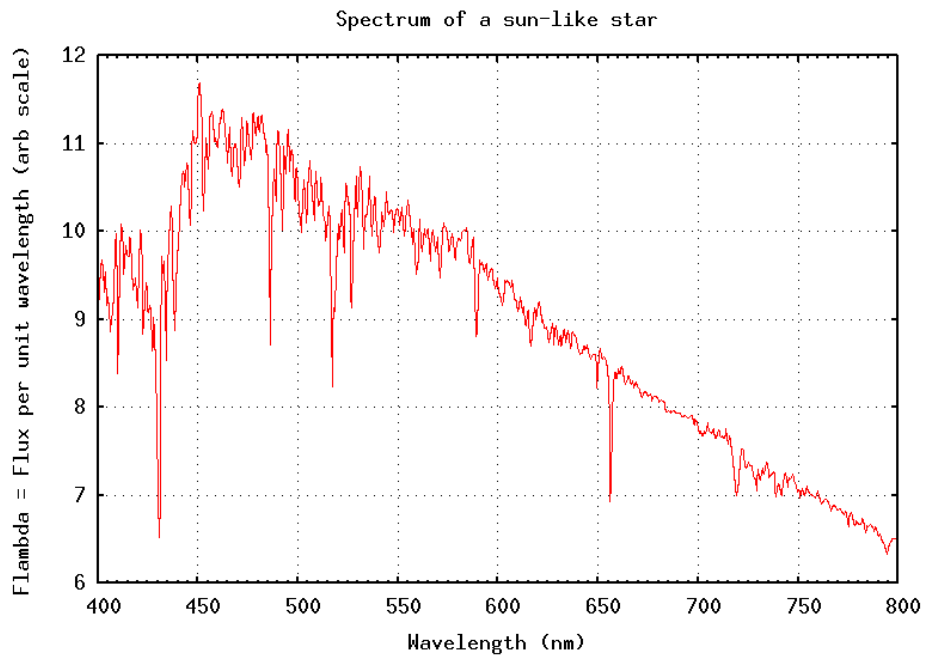


(3) A modern, pressurized jet airplane is flying in the upper troposphere in the tropics. Air is brought into the cabin from the atmosphere outside the airplane. For the passengers to experience a similar cabin air temperature to the surface air temperature, does the air brought into the cabin from outside need to be cooled, heated, or neither? If you think the air needs to be cooled or heated, estimate by how many degrees to one significant digit.

7.5 Problem Set 5

(1) The figures on the next page show the spectrums of a Sun-like star (a G-star) and a smaller M-star. M-stars represent about 75% of stars in the galaxy, and possible terrestrial planets in the habitable zone of nearby M-stars (Proxima Centauri and TRAPPIST-1) have been found recently. The spectrums are only approximate black bodies because of non-uniform absorption and emission by gases in the upper atmospheres of the stars. For this problem, however, you can assume that the spectrums are blackbodies.

- A. Estimate the photospheric (where the light is emitted to space) temperatures of the Sun-like star and the M-star.
- B. Estimate the energy flux emitted by each star.
- C. Estimate the power emitted by each star (the luminosity). You may assume that the Sun-like star has a radius of 700,000 km and the M-star has a radius of 430,000 km.
- D. The Sun has a habitable planet (Earth) orbiting it at a distance of 1 astronomical unit. For a planet orbiting the M-star to receive the same amount of stellar radiation (in W m^{-2}) as Earth, at what distance (in astronomical units) would it need to be orbiting the M-star? Compare this to the distances of planets in the solar system to the Sun. *Hint:* A star emits a roughly constant amount of energy per unit time (it's luminosity). As you go to larger distances from the star, this energy is spread out over the surface of an imaginary sphere of larger radius.



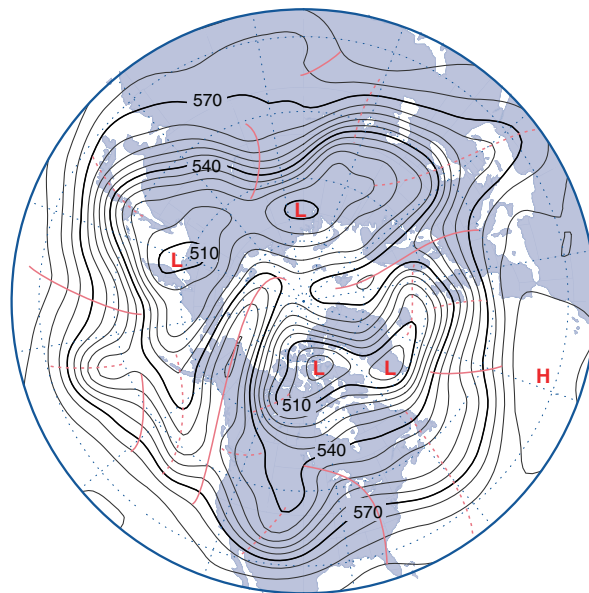
7.6 Problem Set 6

(1) The flux of sunlight that strikes both the Earth and the Moon when the Sun is directly overhead is about 1360 W m^{-2} . The moon has a very low albedo (about .1), very little thermal inertia, and very little ability to move energy horizontally, so that every point on the surface immediately comes into equilibrium with the sunlight that is striking it. The Earth's surface has a large thermal inertia, and the oceans and atmosphere have the ability to transport heat horizontally. As a result, it can smooth out differences in incoming sunlight between different locations. One example of this is the fact that the temperature on Earth only drops a little over night even though no sunlight is being absorbed, so that the equilibrium nighttime temperature is near absolute zero.

- A. What temperature do you expect the hottest point of the Moon to have (in K and in °F)?
- B. Why do Astronauts wear space suits that are white?
- C. Suppose it's currently noon, and that we're considering the equinox. Roughly what flux of sunlight (in W m^{-2}) strikes the Earth over Chicago ($\approx 42^\circ\text{N}$)? How about for noon on the winter and summer solstices (given that the Earth's obliquity is $\approx 23^\circ$)?
- D. What's the flux of sunlight (in W m^{-2}) hitting the Earth when averaged over Earth's entire surface?
- E. If the Earth had no greenhouse gases and a uniform surface temperature, what surface temperature would the planet approach to balance this incoming sunlight, assuming the planet absorbed all incoming sunlight? What would the surface temperature be if the planet had an average albedo of 0.3?
- F. Consider a model in which the Earth is surrounded by a single-layer atmosphere with emissivity ϵ in the longwave, but completely transparent in the shortwave. Assume an albedo of 0.3. What value of ϵ would the atmosphere need to have to give Earth its current surface temperature of 287 K?
- G. Using Kirchhoff's law, what is the longwave absorptivity of this single-layer atmosphere? Assuming no longwave scattering, what is the longwave transmissivity? Using Beer's law what is the optical thickness of this atmosphere?

7.7 Problem Set 7

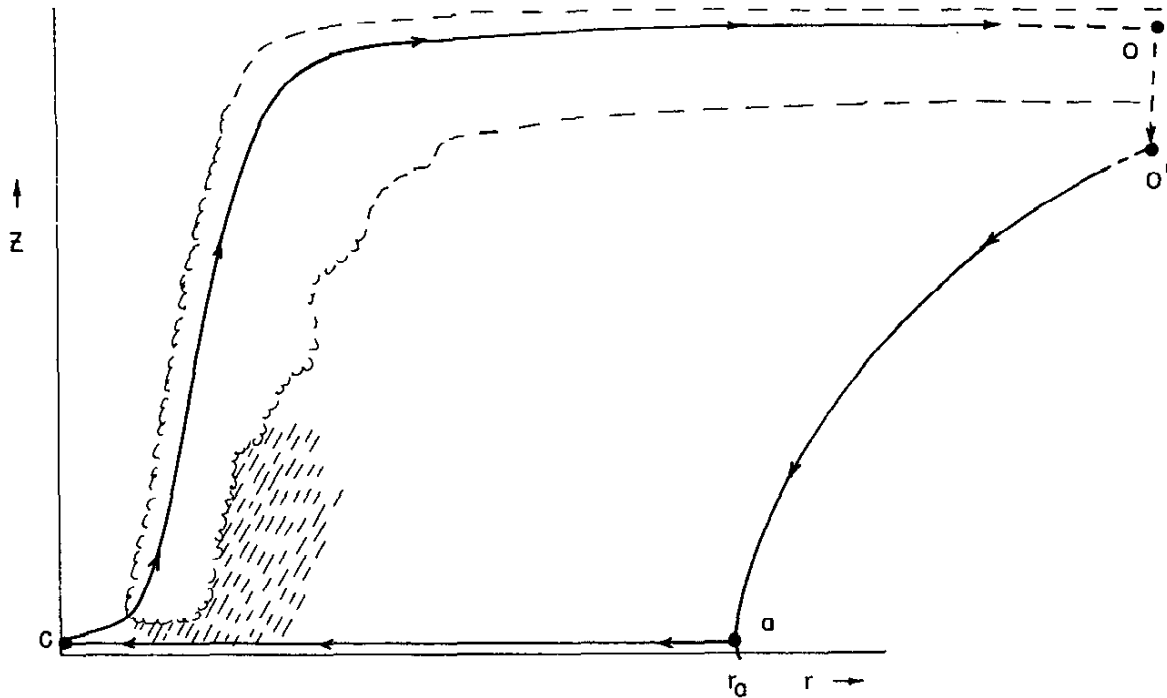
(1) The figure below is the type of map used in weather forecasting. It is a contour plot of the geopotential height of the 500 hPa pressure surface on a particular day at a particular time. If we imagine a surface through the atmosphere that has a constant pressure of 500 hPa, sometimes this surface will go up and sometimes it will go down as we move horizontally. The plot shows the height of this surface above sea level. To orient you, the plot is a polar projection, with the north pole at the center. Continents are shown in blue and oceans in white. *The reason this plot is useful is that the 500 hPa geopotential height is approximately a streamfunction of the atmospheric flow.* So we can directly infer atmospheric velocities by looking at it. The numbers are contour levels in decameters (570 decameters = 5700 meters) and the contour spacing is 60 m. “H” represents a local maximum of the height field and “L” represents a local minimum.



- The jet stream is the strong upper level (e.g., 500 hPa) flow in the midlatitudes. What feature of this plot tells us where the jet stream is? Hint: what feature of a streamfunction tells you that the speed is high?
- The jet stream meanders north and south, but on average is the flow “westerly” (from the west) or “easterly” (from the east)?
- Over the western United States, does the jet stream appear to be meandering northward or southward? How should this affect the temperature in that region?
- Over the eastern United States, does the jet stream appear to be meandering northward or southward? How should this affect the temperature in that region?
- Is the circulation around the lows clockwise or counterclockwise?
- Is the circulation around the highs clockwise or counterclockwise?

7.8 Problem Set 8

(1) The figure below is a diagram of a northern hemisphere tropical cyclone, and the winds within it, viewed in a radial cross section.



- A. Is the divergence of the horizontal velocity field near the surface at the center of the tropical cyclone positive, negative, or zero?
- B. Is the divergence of the horizontal velocity field at the center and top of the tropical cyclone positive, negative, or zero?
- C. In the eyewall air is mostly convecting vertically. Use the conservation of air mass to argue that the sign of the divergence at the center and top of the cyclone must be opposite of that at the center near the surface.
- D. What are the units of the divergence of the horizontal velocity field?
- E. Suppose that the diameter of the eye of this tropical cyclone is 50 km and the radial wind speed in the eyewall is 1 m s^{-1} . Calculate the divergence of the velocity field near the surface at the center of the tropical cyclone.
- F. Is the vorticity at the center of the tropical cyclone positive, negative, or zero?
- G. What are the units of the vorticity?

- H. Suppose that the diameter of the eye of this tropical cyclone is 50 km and the cyclonic wind speed in the eyewall is 60 m s^{-1} . Calculate vorticity at the center of the tropical cyclone.
- I. The vorticity due to the rotation of the planet can be calculated as $2\Omega \sin(\theta_l)$, where θ_l is the latitude. Suppose that the hurricane is at a latitude of 20°N . Calculate the planetary vorticity and compare it to the local, relative vorticity of the tropical cyclone, which you calculated in the last part.
- J. A streamfunction can be found for the non-divergent component of the velocity field in a tropical cyclone. To a good approximation, this streamfunction is $\psi = 2u_0 r_0^{\frac{1}{2}} (x^2 + y^2)^{\frac{1}{4}}$, where u_0 is the cyclonic wind speed in the eyewall and r_0 is the radius of the eye. Calculate the horizontal components of the non-divergent wind velocity, u and v .
- K. If we define r as the radius from the center of tropical cyclone and θ as the counter-clockwise angle from the x -axis, then $x = r \cos(\theta)$ and $y = r \sin(\theta)$. Rewrite u and v in terms of r and θ .
- L. How do the velocities decay as a function of the distance from the center of the tropical cyclone (r)?

7.9 Problem Set 9

(1) A major attraction in Nanyuki, Kenya, is watching water drain out of a bucket on both sides of the equator and observing which way the water spins. Watch this video (<https://youtu.be/X0GLILQck-g>).

- A. Estimate the Rossby number of the flow in the bucket of water. Is the Coriolis force strong enough to influence the direction the bucket drains?
- B. Estimate how slowly the water would have to spin to ensure that the flow is definitely influenced by the Coriolis force.
- C. Would it matter if you did this experiment at the North Pole instead of near the equator?

(2) Cyclone Yasi hit Australia on February 3, 2011 and caused \$3.6 billion in damage. Consider the map of Australia and the surface pressure map of Yasi just before it hit Australia on the following pages. In this problem you may assume that air near the surface has a density of about 1 kg m^{-3} and use the fact that a degree of latitude measures 111 km.

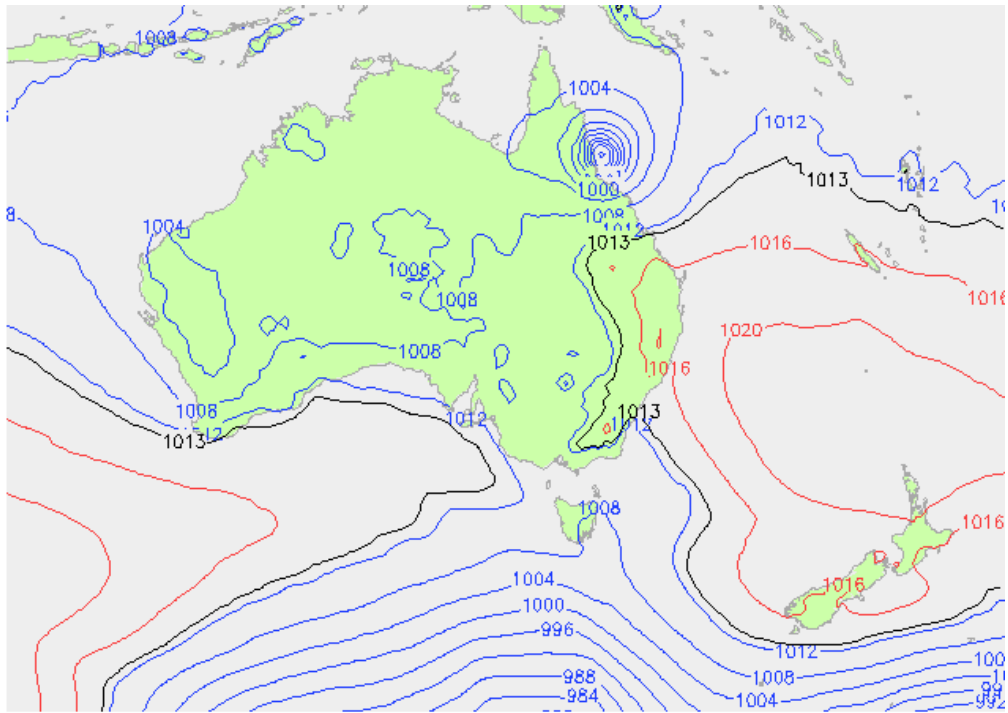
- A. Did the air rotate clockwise or counterclockwise in Cyclone Yasi?
- B. Estimate the wind speed assuming geostrophic balance. Compare your answer to the speed of sound at sea level (340 m s^{-1}). Is your answer reasonable?
- C. Now estimate the wind speed by balancing both the Coriolis and centrifugal accelerations against the pressure gradient force.



George Philip & Son, Ltd.

London: G Bell & Sons, Ltd

The London Geographical Institute



Surface Pressure ECMWF (hPa)

Wed 02/02/11 12GMT (Mon 12+48)
©weatheronline.co.uk

7.10 Problem Set 10

(1) A cylindrical column of air at 30° latitude with radius 100 km expands horizontally to twice its original radius. The air is initially at rest. You can assume that the volume of the air column is conserved.

- A. After the expansion, what is the mean tangential velocity at the perimeter?
- B. The air column that was initially at rest now has relative vorticity. Where did this vorticity come from?
- C. Calculate the Rossby number for the flow.
- D. Is planetary rotation important for this flow?

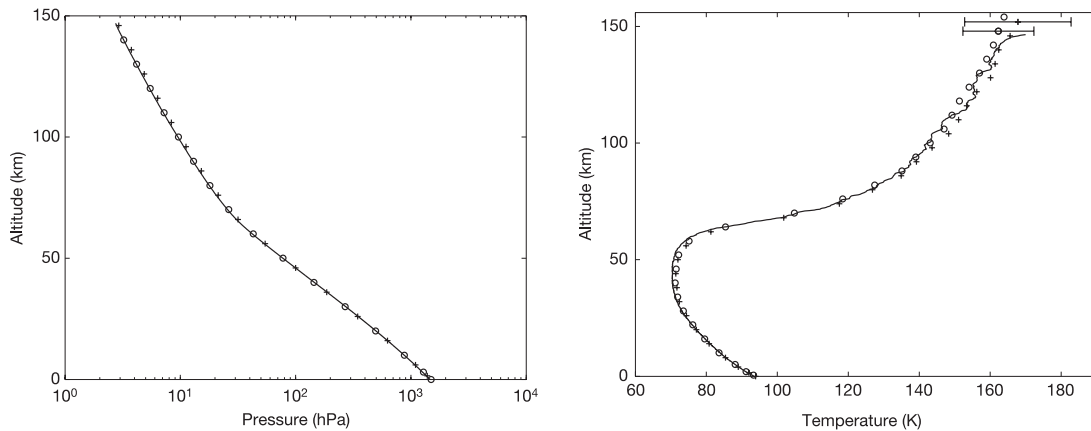
(2) Assume there is a tornado in Kansas.

- A. Calculate the Rossby number if the tornado has a tangential velocity of 50 m s^{-1} at a radius of 100 m. Will planetary rotation be important for the flow?
- B. Now suppose the tornado has a tangential velocity of 70 m s^{-1} at a radius of 1 km. What is the Rossby number?
- C. For this stronger storm, how small would the velocity have to be for planetary rotation to significantly affect the flow? Would this be a tornado?

8 Midterms

8.1 Midterm 1, 2017

Titan is a moon of Saturn that has a thick atmosphere composed primarily of N_2 with a small amount of CH_4 . Because of the cold temperatures on Titan, CH_4 has a condensation cycle similar to water on Earth. There are seas of methane on the surface which can evaporate and condense in the atmosphere, leading to methane clouds and methane precipitation. On January 14, 2005, the Huygens probe parachuted into Titan's atmosphere making measurements along the way [8]. The plots below show data for pressure and temperature as a function of height in Titan's lower atmosphere as measured by the Huygens probe.



(1) Estimate the scale height in the lowest 50 km of Titan's atmosphere from the probe data.

(2) Use your scale height and the fact that $g = 1.3 \text{ m s}^{-2}$ on Titan to estimate the average molecular mass of Titan's atmosphere. Is your estimate roughly consistent with N_2 being the dominant atmospheric constituent?

(3) Calculate the dry adiabatic temperature lapse rate using $C_p = 3.5R$. Estimate the lapse rate in the lowest 25 km of Titan's atmosphere from the probe data. Is your calculation roughly correct?

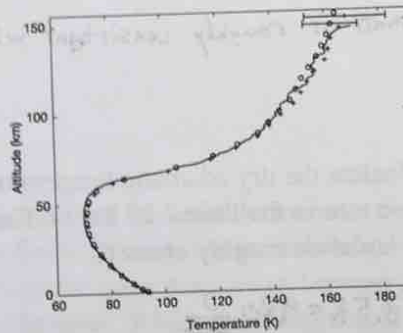
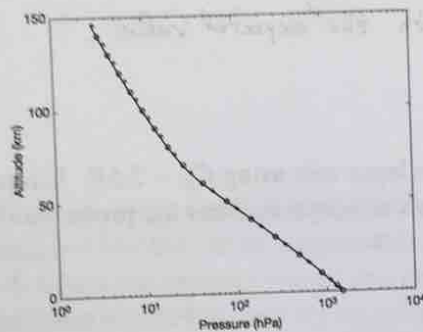
(4) Notice that the temperature lapse rate in the probe data appears to be somewhat less than the dry adiabatic lapse rate, particularly above the lowest 5-10 km of the atmosphere. Explain how condensation of CH_4 in the atmosphere could produce a lapse rate lower than the dry adiabatic lapse rate.

(5) We could define a virtual temperature to account for variable amounts of CH_4 on Titan, just like the virtual temperature on Earth accounts for variable amounts of H_2O . Suppose we compare two air parcels with the same pressure and temperature, but one has a higher CH_4 mixing ratio than the other. Which air parcel would have a higher value of Titan's virtual temperature? Which air parcel would be more dense?

Name: Dorian

Midterm 1 for 133

Titan is a moon of Saturn that has a thick atmosphere composed primarily of N_2 with a small amount of CH_4 . Because of the cold temperatures on Titan, CH_4 has a condensation cycle similar to water on Earth. There are seas of methane on the surface which can evaporate and condense in the atmosphere, leading to methane clouds and methane precipitation. On January 14, 2005, the Huygens probe parachuted into Titan's atmosphere making measurements along the way. The plots below show data for pressure and temperature as a function of height in Titan's lower atmosphere as measured by the Huygens probe.



(1) Estimate the scale height in the lowest 50 km of Titan's atmosphere from the probe data.

$$P(z=0) \approx 1500 \text{ hPa}$$

$$P(z=50 \text{ km}) \approx 80 \text{ hPa}$$

$$P = P_0 e^{-\frac{z}{H}} \rightarrow H = \frac{z}{\ln\left(\frac{P(z=0)}{P(z)}\right)} \approx \frac{50 \text{ km}}{\ln\left(\frac{1500 \text{ hPa}}{80 \text{ hPa}}\right)} \approx 17 \text{ km}$$

(2) Use your scale height and the fact that $g = 1.3 \text{ m s}^{-2}$ on Titan to estimate the average molecular mass of Titan's atmosphere. Is your estimate roughly consistent with N_2 being the dominant atmospheric constituent?

$$H = \frac{RT}{g} \rightarrow R = \frac{gH}{T} = \frac{(1.3 \frac{\text{m}}{\text{s}^2})(1.7 \times 10^4 \text{ m})}{80 \text{ K}} = 280 \frac{\text{J}}{\text{kgK}} \quad (1 \frac{\text{J}}{\text{kg}} = 1 \frac{\text{m}^2}{\text{s}^2})$$

$$R = \frac{R^*}{M} \rightarrow M = \frac{R^*}{R} = \frac{8.3 \frac{\text{J}}{\text{molK}}}{280 \frac{\text{J}}{\text{kgK}}} = 0.030 \frac{\text{kg}}{\text{mol}} = 30 \frac{\text{g}}{\text{mol}}$$

The molecular mass of N_2 is $28 \frac{\text{g}}{\text{mol}}$, so the estimate is roughly consistent with the expected value.

(3) Calculate the dry adiabatic temperature lapse rate using $C_p = 3.5R$. Estimate the lapse rate in the lowest 25 km of Titan's atmosphere from the probe data. Is your calculation roughly correct?

$$C_p = 3.5R = 980 \frac{\text{J}}{\text{kgK}}$$

$$\Gamma = \frac{g}{C_p} = \frac{1.3 \frac{\text{m}}{\text{s}^2}}{980 \frac{\text{J}}{\text{kgK}}} = 0.0013 \frac{\text{K}}{\text{m}} = 1.3 \frac{\text{K}}{\text{km}}$$

$$T(z=0) \approx 95 \text{ K} \quad T(z=25 \text{ km}) \approx 70 \text{ K} \quad \left. \vphantom{T(z=0)} \right\} \leftarrow \text{from probe data}$$

$$\therefore \Gamma = -\frac{\Delta T}{\Delta z} \approx \frac{25 \text{ K}}{25 \text{ km}} \approx 1 \frac{\text{K}}{\text{km}}$$

The predicted lapse rate is similar to the observed lapse rate, but slightly larger.

(4) Notice that the temperature lapse rate in the probe data appears to be somewhat less than the dry adiabatic lapse rate, particularly above the lowest 5-10 km of the atmosphere. Explain how condensation of CH_4 in the atmosphere could produce a lapse rate lower than the dry adiabatic lapse rate.

As air rises in convection, it experiences colder temperatures. As a result, some CH_4 condenses. This releases heat, which increases the temperature of the air. Because of this heat release, the decrease in temperature with height is less than it would be if no CH_4 were present.

(5) We could define a virtual temperature to account for variable amounts of CH_4 on Titan, just like the virtual temperature on Earth accounts for variable amounts of H_2O . Suppose we compare two air parcels with the same pressure and temperature, but one has a higher CH_4 mixing ratio than the other. Which air parcel would have a higher value of Titan's virtual temperature? Which air parcel would be more dense?

$$P = \rho R T \quad \text{and} \quad P = \rho R_d T_v$$

With more CH_4 , M decreases. This means R increases. This means T_v increases. The parcel w/ more CH_4 has a higher virtual temperature. $\rho = \frac{P}{R_d T_v}$, so at constant pressure, this means the parcel w/ less CH_4 is denser.

8.2 Midterm 1, 2018

Super-Earths are Earth-like planets that are larger. Suppose a different star has a super-Earth named Chill Zone 274b orbiting it with super-Earthlings living on it. Assume that Chill Zone 274b has: (1) the same surface temperature as Earth ($T_{s-cz} = 290\text{ K}$), (2) the same atmospheric composition as Earth, (3) an atmospheric surface pressure that is twice as large as Earth's surface pressure ($P_{s-cz} = 2P_{s\oplus}$), and (4) a radius twice as large as Earth's ($R_{cz} = 2R_{\oplus}$). The symbol \oplus means Earth.

(1) Chill Zone 274b's surface air density has a strong impact on the usage of wind power and friction acting on machines of locomotion that the super-Earthlings employ. What is the surface air density on Chill Zone 274b (ρ_{s-cz}) in terms of Earth's surface air density ($\rho_{s\oplus}$)?

(2) We can assume that Chill Zone 274b has the same interior density as Earth and is roughly spherical (as is Earth). Under these assumptions, the surface gravitational acceleration is proportional to the volume of a planet divided by its surface area. If Earth's surface gravitational acceleration is $g_{\oplus} = 10\text{ m s}^{-2}$, what is Chill Zone 274b's (g_{cz})?

(3) Let's assume that the height of typical large-scale topography on a planet is inversely proportional to the surface gravitational acceleration because gravity squeezes the topography downward. This would mean that if a planet had 10 times higher surface gravitational acceleration, the height of its typical large-scale topography would be 10 times smaller. The Tibetan Plateau, with a height of 4 km, is the typical scale of large-scale topography on planet Earth. The equivalent feature on Chill Zone 274b is the Bob Marley Mount. What is the height of the Bob Marley Mount?

(4) The scale height in Earth's atmosphere is $H = 8$ km. What is the scale height in Chill Zone 274b's atmosphere?

(5) What is the air pressure on the Tibetan Plateau? Write your answer in terms of Earth's surface pressure, $P_{s\oplus}$. Leave transcendental functions unevaluated (e.g., $\sin(2)$).

(6) The heat capacity of dry air on Earth is $10^3 \text{ J kg}^{-1}\text{K}^{-1}$. Assuming that Earth's atmosphere is dry and that topographic features have the same temperature as surrounding atmospheric air, what is the temperature on the Tibetan Plateau?

(7) What is the air pressure on the Bob Marley Mount? Again, write your answer in terms of $P_{s\oplus}$ and leave transcendental functions unevaluated.

(8) Assuming that Chill Zone 274b's atmosphere is dry and that topographic features have the same temperature as surrounding atmospheric air, what is the temperature on the Bob Marley Mount?

Humans need to lose the heat they are continually creating to the surrounding environment, or else they would overheat. An important way that they do this is through the evaporation of sweat from the surface of the skin. The skin surface has a temperature of about 35°C . If the ambient air has some form of temperature higher than the skin surface temperature, humans will not be able to lose heat, so they will overheat and die in a few hours. If humans continue to emit CO_2 on current projections, many regions of Earth would be in this regime and we would have to go live on Chill Zone 274b instead.

(9) Which type of temperature (temperature, potential temperature, virtual temperature, dew point, wet bulb temperature) is the relevant one to compare the skin surface to in order to determine whether humans will overheat?

(10) The latent heat of evaporation of water is about $3 \times 10^6 \text{ J kg}^{-1}$. A typical human loses 100 W of power. Let's assume that this power is lost exclusively through evaporation of sweat. If a year's worth of this sweat were condensed and collected, what would its volume be in multiples of the volume of a typical human? Useful facts: There are about $3 \times 10^7 \text{ s}$ in a year. A typical human has a volume of 100 L or 0.1 m^3 .

Name: DORIAN

Midterm 1 for 133

Super-Earths are Earth-like planets that are larger. Suppose a different star has a super-Earth named Chill Zone 274b orbiting it with super-Earthlings living on it. Assume that Chill Zone 274b has: (1) the same surface temperature as Earth ($T_{s-cz} = 290 \text{ K}$), (2) the same atmospheric composition as Earth, (3) an atmospheric surface pressure that is twice as large as Earth's surface pressure ($P_{s-cz} = 2P_{s\oplus}$), and (4) a radius twice as large as Earth's ($R_{cz} = 2R_{\oplus}$). The symbol \oplus means Earth.

(1) Chill Zone 274b's surface air density has a strong impact on the usage of wind power and friction acting on machines of locomotion that the super-Earthlings employ. What is the surface air density on Chill Zone 274b (ρ_{s-cz}) in terms of Earth's surface air density ($\rho_{s\oplus}$)?

$$\begin{aligned} \rho_{s-cz} R_{cz} T_{s-cz} &= P_{s-cz} & \rho_{s\oplus} R_{\oplus} T_{s\oplus} &= P_{s\oplus} \quad (\text{ideal gas law}) \\ R_{cz} &= R_{\oplus} \quad (\text{same composition}) & T_{s-cz} &= T_{s\oplus} \\ \therefore \frac{\rho_{s-cz}}{\rho_{s\oplus}} &= \frac{P_{s-cz}}{P_{s\oplus}} \rightarrow \rho_{s-cz} = \left(\frac{P_{s-cz}}{P_{s\oplus}}\right) \rho_{s\oplus} = 2\rho_{s\oplus} \end{aligned}$$

(2) We can assume that Chill Zone 274b has the same interior density as Earth and is roughly spherical (as is Earth). Under these assumptions, the surface gravitational acceleration is proportional to the volume of a planet divided by its surface area. If Earth's surface gravitational acceleration is $g_{\oplus} = 10 \text{ m s}^{-2}$, what is Chill Zone 274b's (g_{cz})?

$$\begin{aligned} V &= \frac{4}{3}\pi R^3 & A &= 4\pi R^2 \rightarrow \frac{V}{A} = \frac{1}{3}R \\ g &\propto \frac{V}{A} \propto R \rightarrow \frac{g_{cz}}{g_{\oplus}} = \frac{R_{cz}}{R_{\oplus}} = 2 \rightarrow g_{cz} = 2g_{\oplus} \end{aligned}$$

(3) Let's assume that the height of typical large-scale topography on a planet is inversely proportional to the surface gravitational acceleration because gravity squeezes the topography downward. This would mean that if a planet had 10 times higher surface gravitational acceleration, the height of its typical large-scale topography would be 10 times smaller. The Tibetan Plateau, with a height of 4 km, is the typical scale of large-scale topography on planet Earth. The equivalent feature on Chill Zone 274b is the Bob Marley Mount. What is the height of the Bob Marley Mount?

$$z_{\text{BMM}} = \left(\frac{g_{\oplus}}{g_{\text{CZ}}} \right) (4 \text{ km}) = \left(\frac{1}{2} \right) (4 \text{ km}) = 2 \text{ km}$$

(4) The scale height in Earth's atmosphere is $H = 8 \text{ km}$. What is the scale height in Chill Zone 274b's atmosphere?

$$H = \frac{RT}{g} \quad R_{\text{CZ}} = R_{\oplus} \quad \text{and} \quad T_{\text{CZ}} = T_{\oplus} \rightarrow Hg = \text{const.}$$

$$\therefore H_{\text{CZ}} = \left(\frac{g_{\oplus}}{g_{\text{CZ}}} \right) H_{\oplus} = \left(\frac{1}{2} \right) (8 \text{ km}) = 4 \text{ km}$$

(5) What is the air pressure on the Tibetan Plateau? Write your answer in terms of Earth's surface pressure, $P_{\text{S}\oplus}$. Leave transcendental functions unevaluated (e.g., $\sin(2)$).

$$P = P_s e^{-\frac{z}{H}}$$

$$P_{\text{TP}} = P_{\text{S}\oplus} e^{-\frac{z_{\text{TP}}}{H_{\oplus}}} = P_{\text{S}\oplus} e^{-\frac{4 \text{ km}}{8 \text{ km}}}$$

$$P_{\text{TP}} = P_{\text{S}\oplus} e^{-\frac{1}{2}}$$

(6) The heat capacity of dry air on Earth is $10^3 \text{ J kg}^{-1} \text{ K}^{-1}$. Assuming that Earth's atmosphere is dry and that topographic features have the same temperature as surrounding atmospheric air, what is the temperature on the Tibetan Plateau?

$$\Gamma_d = \frac{g_0}{c_p} = \frac{10 \frac{\text{m}}{\text{s}^2}}{10^3 \frac{\text{J}}{\text{kg K}}} = 10^{-2} \frac{\text{K}}{\text{m}} = 10 \frac{\text{K}}{\text{km}}$$

$$T_{\text{TP}} = T_{\text{S0}} - \Gamma_d z_{\text{TP}} = 290 \text{ K} - (10 \frac{\text{K}}{\text{km}})(4 \text{ km}) = 290 \text{ K} - 40 \text{ K}$$

$$T_{\text{TP}} = 250 \text{ K}$$

(7) What is the air pressure on the Bob Marley Mount? Again, write your answer in terms of P_{S0} and leave transcendental functions unevaluated.

$$P_{\text{BMM}} = P_{\text{S0}} e^{-\frac{z_{\text{BMM}}}{H_{\text{CE}}}} = 2 P_{\text{S0}} e^{-\frac{2 \text{ km}}{4 \text{ km}}}$$

$$P_{\text{BMM}} = 2 P_{\text{S0}} e^{-1/2}$$

(8) Assuming that Chill Zone 274b's atmosphere is dry and that topographic features have the same temperature as surrounding atmospheric air, what is the temperature on the Bob Marley Mount?

$$\Gamma_d = \frac{g_{\text{CZ}}}{c_p} = \frac{20 \text{ m/s}^2}{10^3 \frac{\text{J}}{\text{kg K}}} = 20 \frac{\text{K}}{\text{km}}$$

$$T_{\text{BMM}} = T_{\text{S-CZ}} - \Gamma_d z_{\text{BMM}} = 290 \text{ K} - (20 \frac{\text{K}}{\text{km}})(2 \text{ km})$$

$$T_{\text{BMM}} = 250 \text{ K}$$

Humans need to lose the heat they are continually creating to the surrounding environment, or else they would overheat. An important way that they do this is through the evaporation of sweat from the surface of the skin. The skin surface has a temperature of about 35°C . If the ambient air has some form of temperature higher than the skin surface temperature, humans will not be able to lose heat, so they will overheat and die in a few hours. If humans continue to emit CO_2 on current projections, many regions of Earth would be in this regime and we would have to go live on Chill Zone 274b instead.

(9) Which type of temperature (temperature, potential temperature, virtual temperature, dew point, wet bulb temperature) is the relevant one to compare the skin surface to in order to determine whether humans will overheat?

Wet bulb temperature

(10) The latent heat of evaporation of water is about $3 \times 10^6 \text{ J kg}^{-1}$. A typical human loses 100 W of power. Let's assume that this power is lost exclusively through evaporation of sweat. If a year's worth of this sweat were condensed and collected, what would its volume be in multiples of the volume of a typical human? Useful facts: There are about $3 \times 10^7 \text{ s}$ in a year. A typical human has a volume of 100 L or 0.1 m^3 .

$$P = \frac{L_v \rho_w V_w}{T} \rightarrow V_w = \frac{P \cdot T}{L_v \rho_w}$$

$$V_w = \frac{(100 \frac{\text{J}}{\text{s}})(3 \times 10^7 \text{ s})}{(3 \times 10^6 \frac{\text{J}}{\text{kg}})(10^3 \frac{\text{kg}}{\text{m}^3})} = 1 \text{ m}^3 \quad V_h = 0.1 \text{ m}^3$$

$$\therefore \boxed{\frac{V_w}{V_h} = 10}$$

8.3 Midterm 1, 2019

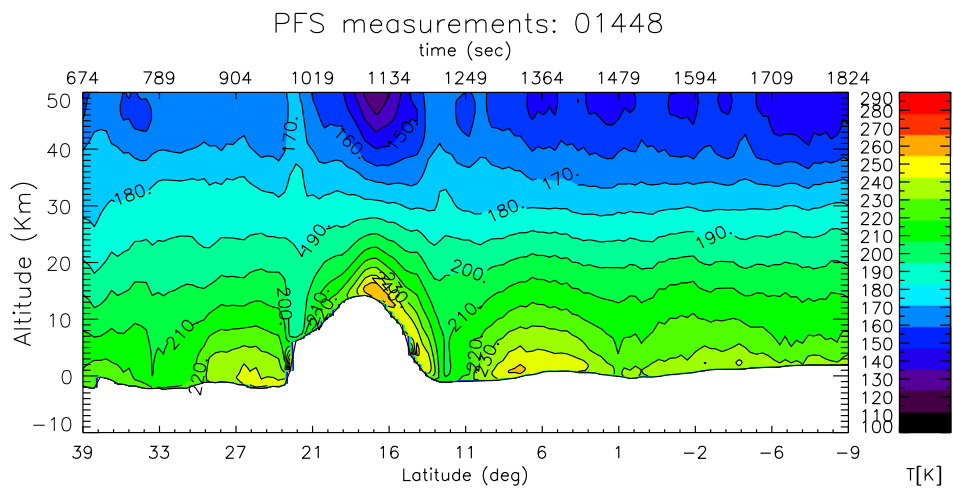
In this midterm we will be considering the Martian atmosphere. We will use observations made by a Mars-orbiting satellite [9]. We will look at one slice through the atmosphere measured during one orbit. It will be useful for you to know that the Martian atmosphere is composed primarily of CO_2 , which has molecular mass of 44 g/mol. CO_2 is a triatomic molecule, so its heat capacity is related to its gas constant by $C_p = 4.5R$. The ideal gas law constant is $8.3 \text{ J mol}^{-1} \text{ K}^{-1}$ and the gravitational acceleration at the surface of Mars is 3.7 m s^{-1} . The Martian atmosphere is fairly dusty, even when a global dust storm is not occurring. Dust is a good absorber of sunlight.

(1) Estimate the gas constant of the Martian atmosphere.

(2) Estimate the heat capacity of the Martian atmosphere.

(3) Estimate the dry adiabatic lapse rate on Mars.

(4) The figure below shows measurements of the temperature of the Martian atmosphere. Estimate the lapse rate from the figure at a latitude of 1N.



(5) Is the Martian atmosphere stable, unstable, or neutral to convection?

(6) At 1N, is the potential temperature of the Martian atmosphere higher or lower at an altitude of 20 km than at the surface?

(8) Why does the Martian atmosphere have the potential temperature profile that it does?

(7) Based on your answer to the last two questions, is the Martian atmosphere more like Earth's troposphere or stratosphere?

(9) Estimate the scale height of the Martian atmosphere.

(10) Roughly estimate the air density at the top of the topographic feature at 18N (part of Olympus Mons) relative to the air density at the surface near 1N.

Name: Dorian

Midterm 1 for 133

In this midterm we will be considering the Martian atmosphere. We will use observations made by a Mars-orbiting satellite [1]. We will look at one slice through the atmosphere measured during one orbit. It will be useful for you to know that the Martian atmosphere is composed primarily of CO_2 , which has molecular mass of 44 g/mol. CO_2 is a triatomic molecule, so its heat capacity is related to its gas constant by $C_p = 4.5R$. The ideal gas law constant is $8.3 \text{ J mol}^{-1} \text{ K}^{-1}$ and the gravitational acceleration at the surface of Mars is 3.7 m s^{-1} . The Martian atmosphere is fairly dusty, even when a global dust storm is not occurring. Dust is a good absorber of sunlight.

(1) Estimate the gas constant of the Martian atmosphere.

$$R = \left(8.3 \frac{\text{J}}{\text{mol K}}\right) \left(\frac{1 \text{ mol}}{44 \times 10^{-2} \text{ kg}}\right) = 200 \frac{\text{J}}{\text{kg K}}$$

(2) Estimate the heat capacity of the Martian atmosphere.

$$C_p = 4.5 R = 4.5 \left(8.3 \frac{\text{J}}{\text{mol K}}\right) \left(\frac{1 \text{ mol}}{44 \times 10^{-2} \text{ kg}}\right) \approx 830 \frac{\text{J}}{\text{kg K}}$$

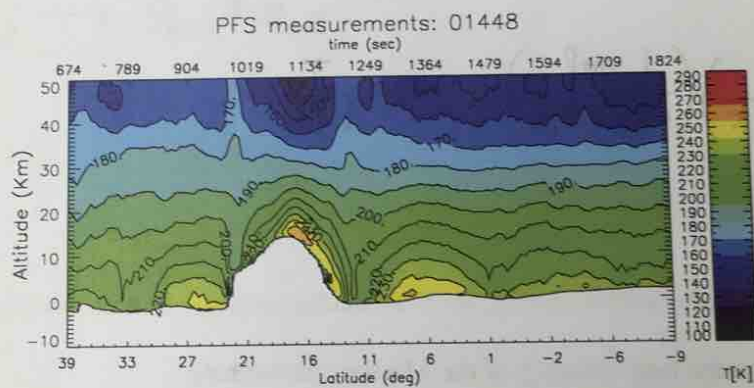
(3) Estimate the dry adiabatic lapse rate on Mars.

$$\Gamma_d = \frac{g}{c_p} = \left(3.7 \frac{\text{m}}{\text{s}^2}\right) \left(\frac{\text{Ks}^2}{830 \text{m}^2}\right) = \frac{3.7}{8.3} \times 10^{-2} \frac{\text{K}}{\text{m}}$$

$$\approx 0.5 \times 10^{-2} \frac{\text{K}}{\text{m}} = 5 \frac{\text{K}}{\text{km}}$$

note: $\frac{\text{J}}{\text{kg}} = \frac{\text{m}^2}{\text{s}^2}$

(4) The figure below shows measurements of the temperature of the Martian atmosphere. Estimate the lapse rate from the figure at a latitude of 1N.



$$T(z=0) = 230 \text{K}$$

$$T(z=20 \text{km}) = 200 \text{K}$$

$$\therefore \Gamma \approx \frac{-\Delta T}{\Delta z} = \frac{30 \text{K}}{20 \text{km}} = 1.5 \frac{\text{K}}{\text{km}}$$

(5) Is the Martian atmosphere stable, unstable, or neutral to convection?

$$\Gamma < \Gamma_d \rightarrow \text{stable}$$

(6) At 1N, is the potential temperature of the Martian atmosphere higher or lower at an altitude of 20 km than at the surface?

$$\Gamma < \Gamma_d \rightarrow \theta_{20\text{km}} > \theta_{\text{surf}}$$

(8) Why does the Martian atmosphere have the potential temperature profile that it does?

Absorption of sunlight by dust heats the air that is higher up.

(7) Based on your answer to the last two questions, is the Martian atmosphere more like Earth's troposphere or stratosphere?

stratosphere b/c it is stable to convection

(9) Estimate the scale height of the Martian atmosphere.

$$H = \frac{RT}{g} = \frac{(200 \frac{\text{J}}{\text{kg K}})(230 \text{ K})}{(3.7 \frac{\text{m}}{\text{s}^2})} \approx 1.2 \times 10^4 \text{ m} = 12 \text{ km}$$

(10) Roughly estimate the air density at the top of the topographic feature at 18N (part of Olympus Mons) relative to the air density at the surface near 1N.

$$z \approx 12 \text{ km}$$

$$\frac{P}{P_s} = e^{-\frac{z}{H}} \approx e^{-1} \approx 0.4 \quad \text{at const. } T, \rho \propto P$$


$$\therefore \frac{\rho}{\rho_s} \approx 0.4$$

References

- [1] Wolkenberg, P., Formisano, V., Rinaldi, G. & Geminale, A. The atmospheric temperatures over Olympus Mons on Mars: An atmospheric hot ring. *Icarus* 207, 110–123 (2010).

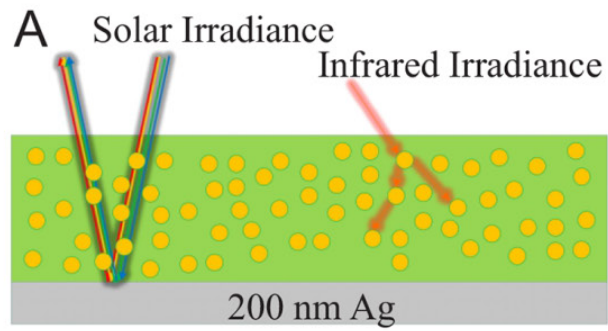
8.4 Midterm 2, 2017

In a paper published in the journal *Science* this year, Zhai et al. described a new material they had invented that might lead to a cheaper and more efficient way to cool homes [10]. The material consists of SiO_2 microspheres embedded in a thin layer of polymethylpentene (TPX) (see figure below).



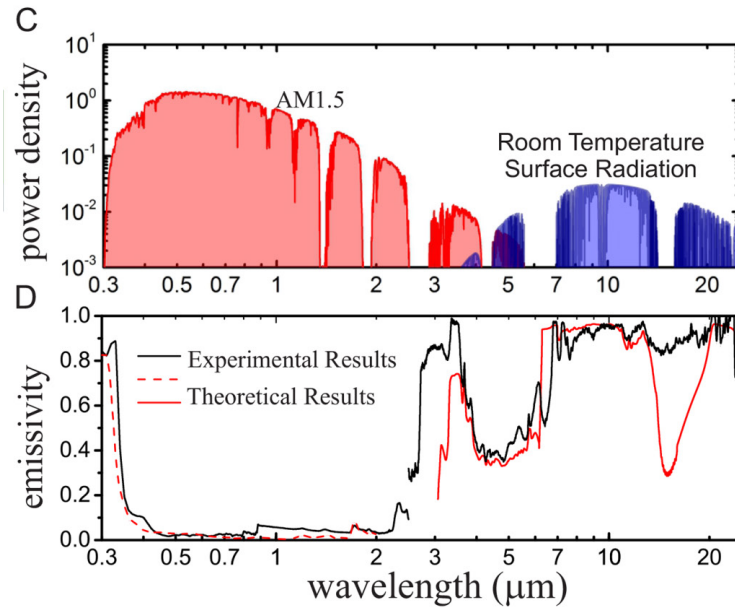
TPX is nearly transparent to solar radiation and the SiO_2 microspheres have a size and distribution chosen so that they interact strongly with terrestrial radiation. The material is then coated with a thin (200 nm) layer of silver on the bottom side. The material would be used by placing it on roofs with the silver side pointing down.

In the diagram below green represents TPX, the yellow circles represent SiO₂ microspheres, and gray represents the silver (Ag) layer.



(1) Based on the diagram (and Zhai et al.'s objective), why was the thin layer of silver added to the bottom of the material?

The top panel of the diagram below shows the typical solar radiation reaching the surface (red) and the typical surface terrestrial radiation from a blackbody reaching space (blue). The bottom panel shows the emissivity of the TPX/SiO₂ microsphere mixture as a function of wavelength, both theoretically and as measured experimentally.

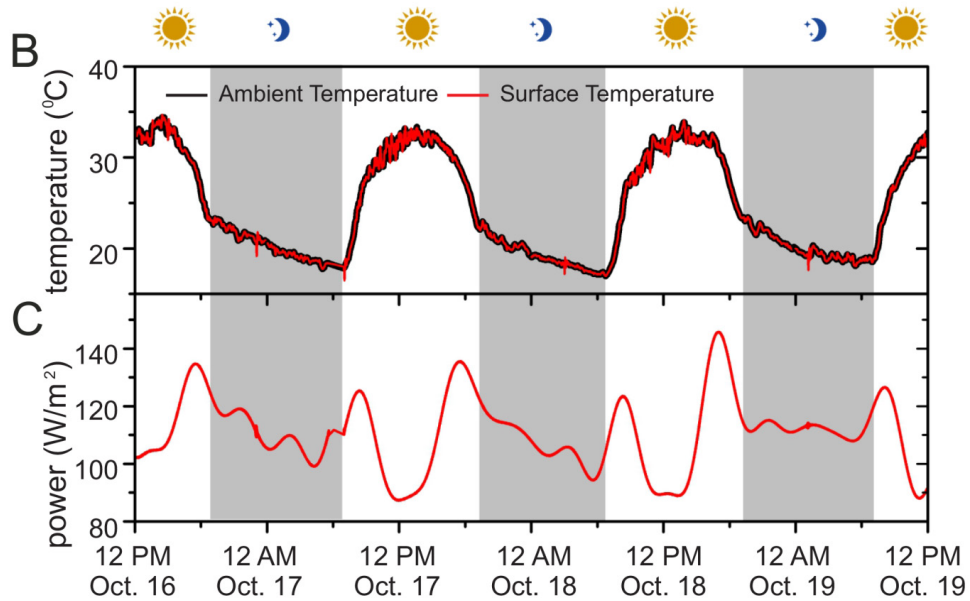


(2) Why is the solar radiation generally at shorter wavelengths than the terrestrial radiation?

(3) Why is the surface terrestrial emission from a blackbody that reaches space nearly zero at certain wavelengths?

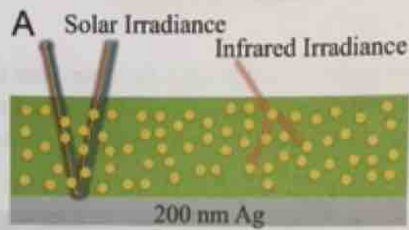
(4) Why has the material been chosen to have as small an emissivity as possible for wavelengths shorter than about $3 \mu\text{m}$ and an emissivity as close to one as possible for wavelengths larger than about $3 \mu\text{m}$?

The diagram below shows the temperature and power emitted by the material in testing as a function of time when it was put outside and exposed to the diurnal cycle in sunlight and ambient atmospheric conditions.



(5) The air conditioner in a typical house draws on the order of 1000 W. If the roof of a typical house were covered with this new material, would it be able to keep the house cool without running an air conditioner? Only an order of magnitude estimate is required to answer this question.

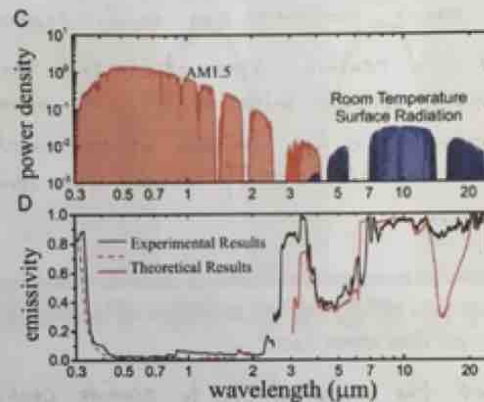
In the diagram below green represents TPX, the yellow circles represent SiO_2 microspheres, and gray represents the silver (Ag) layer.



(1) Based on the diagram (and Zhai et al.'s objective), why was the thin layer of silver added to the bottom of the material?

Silver is highly reflective at most wavelengths. The silver was added to reflect sunlight, which otherwise could be absorbed and lead to heating.

The top panel of the diagram below shows the typical solar radiation reaching the surface (red) and the typical surface terrestrial radiation from a blackbody reaching space (blue). The bottom panel shows the emissivity of the TPX/SiO₂ microsphere mixture as a function of wavelength, both theoretically and as measured experimentally.



(2) Why is the solar radiation generally at shorter wavelengths than the terrestrial radiation?

The Sun emits at a temperature of ~5800K. Typical temperatures in Earth's atmosphere and on its surface are 220-300K. The Planck function tells us that emission will be clustered around a peak wavelength. Wien's displacement law ($\lambda_m = \frac{2897 \mu\text{m}\cdot\text{K}}{T}$) tells us that the peak wavelength is inversely proportional to the emission temperature. Since the sun is much hotter than the Earth, solar radiation is generally at shorter wavelengths than terrestrial radiation.

(3) Why is the surface terrestrial emission from a blackbody that reaches space nearly zero at certain wavelengths?

Greenhouse gases such as CO_2 , O_3 , and H_2O in Earth's atmosphere absorb strongly at characteristic wavelengths.

CO_2 and O_3 ~~are~~ in particular can really decrease the terrestrial radiation reaching space at certain wavelengths because they become optically thick high in the atmosphere where the temperature is low. Emission at these wavelengths occurs at a low temp. and b/c $F \propto T^4$, is near zero compared to surface emission.

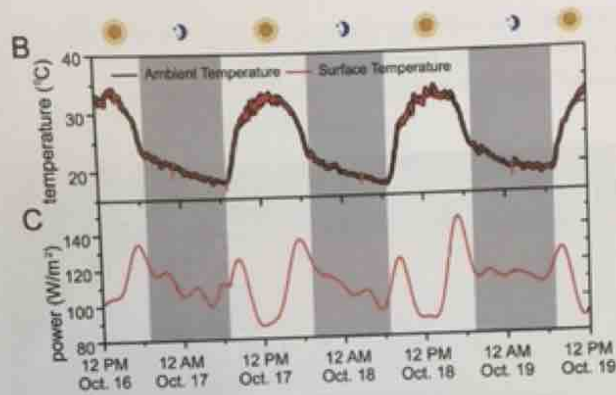
(4) Why has the material been chosen to have as small an emissivity as possible for wavelengths shorter than about $3 \mu\text{m}$ and an emissivity as close to one as possible for wavelengths larger than about $3 \mu\text{m}$?

The goal of the material is to provide cooling. It therefore has a high albedo and low emissivity at short wavelengths so that the Sun cannot heat it much. It has a high emissivity at long wavelengths so that it can efficiently emit heat and cool off.

By Kirchhoff's law, absorptivity(λ) = emissivity(λ).

A low emissivity at short wavelengths ensures the material won't absorb ^{much} solar radiation, which would heat it.

The diagram below shows the temperature and power emitted by the material in testing as a function of time when it was put outside and exposed to the diurnal cycle in sunlight and ambient atmospheric conditions.



(5) The air conditioner in a typical house draws on the order of 1000 W. If the roof of a typical house were covered with this new material, would it be able to keep the house cool without running an air conditioner? Only an order of magnitude estimate is required to answer this question.

AC units actually get a bit more cooling capacity than the input wattage (2-3 times), but let's neglect this. The roof of a house is about $10\text{m} \times 10\text{m} = 100\text{m}^2$. The new material provides 100 W/m^2 of cooling, or $\sim 10^4\text{ W}$ if the entire roof is coated. So the new material could easily replace the AC.

8.5 Midterm 2, 2018

Consider the following news article, which appeared in the science section of the esteemed national newspaper, *The Onion* on 4/20/18:

“WASHINGTON-In an effort to make the solar system’s central star look as badass as possible, NASA officials announced Friday the agency’s plans to place a 864,600-mile-wide pair of shades on the sun. “With this mission, we’ll be taking a great leap forward in our understanding of how cool and chilled-out our sun really is,” said NASA acting administrator Robert M. Lightfoot Jr., noting that the eyewear’s design was based in part on a 1588 drawing by Galileo, who was branded a heretic at the time for suggesting the sun wasn’t as laid-back as previously thought. “For generations to come, every time we look up at the sky, we’ll be reminded that the sun is this super rad celestial body that’s rocking a sweet pair of American-built shades.” Lightfoot added that if the mission was a success, NASA would expedite its plans to launch a giant, ice-cold glass of lemonade for the sun to sip.”

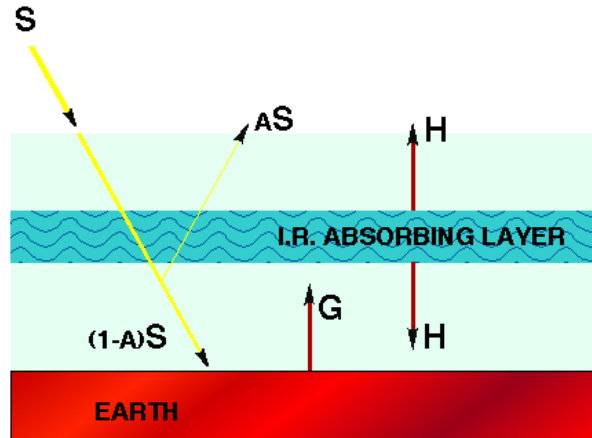


The article doesn't specify this, but a friend at NASA told me that the shades will be set up to rotate so that they will always be pointed directly at Earth as it orbits the Sun. She also told me that the shades will transmit 20% of light that hits them, equally at all wavelengths.

Interestingly, we may have already observed an example of an alien civilization trying to increase the dankitude of its star with some shades. The star KIC 8462852, also known as Boyajian's Star, is famous for having strange dips in its lightcurve. This means that it gets much darker sometimes for unknown reasons, possibly because of an alien superstructure such as some sweet shades.

We'll be using the simple energy balance model of climate from class to understand the effects of NASA's mission on planet Earth. To remind you, the model has a surface and one atmospheric layer. The surface has a longwave emissivity of 1 and a shortwave albedo of A . The atmosphere has a longwave emissivity of ϵ and is transparent to shortwave radiation. Here is the diagram of the model:

A SIMPLE MODEL OF THE GREENHOUSE EFFECT



In class we rewrote this model in terms of the solar flux (S , in W m^{-2}), the surface temperature (T_s , in K), the atmospheric temperature (T_a , in K), and the Stefan-Boltzmann constant ($\sigma = 5.67 \times 10^{-8} \text{ W m}^{-2}$).

(1) Solve the energy balance model for T_s in terms of S , A , ε , and σ .

(2) Assume that the shades can be represented by two circles, each with a radius of R_{sh} , and that the Sun has a radius of R_{sun} . Assume that $R_{sh} \leq \frac{1}{2}R_{sun}$. Use this information to calculate the solar flux, S_{sh} , that Earth will receive after NASA installs the shades.

(3) In addition to making the Sun as badass as possible, the shades have the added benefit of being able to counteract global warming. Let's assume that the preindustrial Earth has a surface temperature T_{s0} and an emissivity ϵ_0 , which are related by the formula you derived in question (1). Assume that as a result of global warming ϵ_0 increases to ϵ_w . What value should R_{sh} take in order to keep Earth's temperature constant despite the increase in emissivity? Assume that Earth's albedo stays constant.

(4) It is possible to estimate the surface temperature of an object by measuring its electromagnetic radiation emission spectrum. After NASA puts the shades in place, will our estimate of the Sun's temperature using this method change?

(5) If for some reason NASA's shade plan fails, an alternative plan for counteracting global warming with geoengineering is to put sulfate aerosols into the stratosphere, either with big guns or airplanes. These sulfate aerosols would scatter incoming sunlight, cooling the planet. Estimate the total mass of sulfate aerosols that would have to be put into the stratosphere to counteract global warming. Give your answer in multiples of the mass of full 747 airplanes ($\approx 4 \times 10^5$ kg). You may assume that global warming alters radiative balance by 4 W m^{-2} , the solar constant is 1365 W m^{-2} , the mass scattering coefficient for sulfate aerosols is about $\kappa \approx 4 \text{ m}^2 \text{ g}^{-1}$, the planetary albedo is about 0.3, and the planetary radius is about 6,300 km. You may also find the following expansion useful: $e^{-\tau} \approx 1 - \tau$.

(1) Solve the energy balance model for T_s in terms of S , A , ϵ , and σ .

surf bal: $\frac{1}{4}(1-A)S = \epsilon\sigma T_a^4 + \sigma T_s^4$
 ↑
 geometric factor

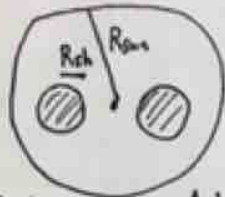
atm bal: $2\epsilon\sigma T_a^4 = \epsilon\sigma T_s^4$

$\therefore T_a^4 = \frac{1}{2} T_s^4$

$\therefore \frac{1}{4}(1-A)S = \left(1 - \frac{\epsilon}{2}\right)\sigma T_s^4$

$\therefore T_s = \left(\frac{\frac{1}{4}(1-A)S}{\left(1 - \frac{\epsilon}{2}\right)\sigma} \right)^{\frac{1}{4}}$

(2) Assume that the shades can be represented by two circles, each with a radius of R_{sh} , and that the Sun has a radius of R_{sun} . Assume that $R_{sh} \leq \frac{1}{2}R_{sun}$. Use this information to calculate the solar flux, S_{sh} , that Earth will receive after NASA installs the shades.



$$A_{sun} = \pi R_{sun}^2$$

$$A_{sh} = 2\pi R_{sh}^2$$

$$S_{sh} = S \left(\frac{A_{sun} - A_{sh}}{A_{sun}} \right) + 0.25 \frac{A_{sh}}{A_{sun}} \leftarrow \text{weighted mean}$$

$$S_{sh} = S \left(1 - 2 \left(\frac{R_{sh}}{R_{sun}} \right)^2 \right) + 0.25 \cdot 2 \left(\frac{R_{sh}}{R_{sun}} \right)^2$$

$$S_{sh} = \left[1 - 1.6 \left(\frac{R_{sh}}{R_{sun}} \right)^2 \right] S$$

(3) In addition to making the Sun as badass as possible, the shades have the added benefit of being able to counteract global warming. Let's assume that the preindustrial Earth has a surface temperature T_{s0} and an emissivity ϵ_0 , which are related by the formula you derived in question (1). Assume that as a result of global warming ϵ_0 increases to ϵ_w . What value should R_{sh} take in order to keep Earth's temperature constant despite the increase in emissivity? Assume that Earth's albedo stays constant.

$$T_s' = \left(\frac{\frac{1}{4}(1-A)S_{sh}}{(1-\frac{\epsilon_w}{2})\sigma} \right)^{\frac{1}{4}}$$

$$T_{s0} = \left(\frac{\frac{1}{4}(1-A)S}{(1-\frac{\epsilon_0}{2})\sigma} \right)^{\frac{1}{4}}$$

$$T_s' = T_{s0} \rightarrow S_{sh} \left(1 - \frac{\epsilon_w}{2} \right) = S \left(1 - \frac{\epsilon_0}{2} \right) \rightarrow 1 - 1.6 \left(\frac{R_{sh}}{R_{sun}} \right)^2 = \frac{1 - \frac{\epsilon_w}{2}}{1 - \frac{\epsilon_0}{2}}$$

$$\therefore R_{sh} = R_{sun} \sqrt{\frac{5}{8} \left(1 - \frac{1 - \frac{\epsilon_w}{2}}{1 - \frac{\epsilon_0}{2}} \right)} = R_{sun} \sqrt{\frac{5}{8} \left(\frac{\Delta \epsilon}{2 - \epsilon_0} \right)} \quad \Delta \epsilon \equiv \epsilon_w - \epsilon_0$$

(4) It is possible to estimate the surface temperature of an object by measuring its electromagnetic radiation emission spectrum. After NASA puts the shades in place, will our estimate of the Sun's temperature using this method change?

No, the spectral energy distribution will be the same because shade transmission doesn't depend on wavelength. This means the temperature estimate will be the same by Wein's displacement law.

(5) If for some reason NASA's shade plan fails, an alternative plan for counteracting global warming with geoengineering is to put sulfate aerosols into the stratosphere, either with big guns or airplanes. These sulfate aerosols would scatter incoming sunlight, cooling the planet. Estimate the total mass of sulfate aerosols that would have to be put into the stratosphere to counteract global warming. Give your answer in multiples of the mass of full 747 airplanes ($\approx 4 \times 10^5$ kg). You may assume that global warming alters radiative balance by 4 W m^{-2} , the solar constant is 1365 W m^{-2} , the mass scattering coefficient for sulfate aerosols is about $\kappa \approx 4 \text{ m}^2 \text{ g}^{-1}$, the planetary albedo is about 0.3, and the planetary radius is about 6,300 km. You may also find the following expansion useful: $e^{-\tau} \approx 1 - \tau$.

m - mass path length M - total mass F - radiative forcing

$$\frac{1}{4}(1-A)S \underbrace{(1-e^{-\tau})}_{\approx \tau} = F$$

$$\tau = \kappa M = \frac{\kappa M}{4\pi R^2}$$

$$4 \frac{\text{m}^2}{\text{s}} \cdot 10^3 \frac{\text{g}}{\text{kg}} = 4 \times 10^3 \frac{\text{m}^2}{\text{kg}}$$

$$\therefore \frac{1}{4}(1-A)S \kappa M = F(4\pi R^2) \rightarrow M = \frac{4\pi R^2 F}{\frac{1}{4}(1-A)S \kappa}$$

$$(1-A)S \approx 10^3 \frac{\text{W}}{\text{m}^2}$$

$$R^2 = (6.3 \times 10^6 \text{ m})^2 \approx \pi \times 10^{13} \text{ m}^2$$

$$\pi^2 \approx 10$$

$$M = \frac{4 \cdot 10 \cdot (10^{13} \text{ m}^2) (4 \frac{\text{W}}{\text{m}^2})}{\frac{1}{4} (10^3 \frac{\text{W}}{\text{m}^2}) (4 \times 10^3 \frac{\text{m}^2}{\text{kg}})} \left(\frac{1 \cdot 747}{4 \times 10^5 \text{ kg}} \right)$$

$$\approx \pi \times 10^3 \cdot 747_s$$

8.6 Midterm 2, 2019

The Starshot Breakthrough Initiative has the goal of sending spacecraft to the nearest stellar system (Proxima Centauri) with a travel time of 20 years or less within the next 50 years. The current plan is to build very light spacecraft with large lightsails and to accelerate them using lasers based on Earth (see the diagram below). The lasers would accelerate the spacecraft via photon momentum transfer. A large number of spacecraft would be launched because of the dangers of interstellar dust particles and the potential failure of instrumentation.

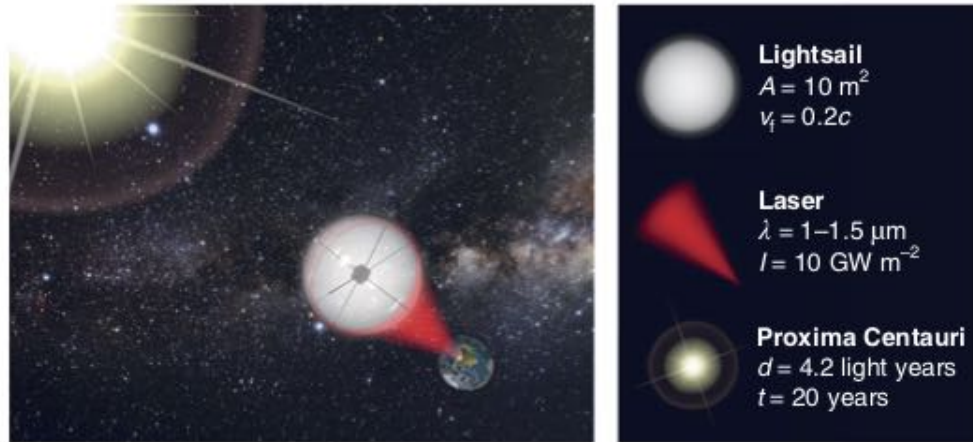


Fig. 1 | Vision for the Starshot nanocraft. A phased array of lasers, or a light beamer, will propel the nanocraft towards Proxima Centauri. The nanocraft consists of the lightsail, discussed in this Perspective, and a nanochip that will collect data to transmit back to Earth.

Recently a team of CalTech materials scientists and physicists considered the practical engineering issues related to the Starshot Breakthrough Initiative plan [11]. In this midterm we will be thinking through some of the results from their paper. Here are some quantities that may be of interest to you: Proxima Centauri is 4.2 light years from Earth. The speed of light is $c=3 \times 10^8 \text{ m s}^{-1}$ and the Stefan-Boltzmann constant is $\sigma=6 \times 10^{-8} \text{ W m}^{-2} \text{ K}^{-4}$. The spacecraft will travel at a speed of approximately 20% of the speed of light and it will take approximately 150 s for the laser to accelerate them to this speed. The laser will emit electromagnetic radiation in the wavelength range of 1–1.5 μm with an intensity of $I=10 \text{ GW m}^{-2}$, where $1 \text{ GW}=10^9 \text{ W}$. The average penetration depth of hydrogen and helium atoms is about 1 mm at a speed of 0.2c. Interstellar dust particles have a typical mass of about $m=10^{-16} \text{ kg}$. The light sail will have an area of 10 m^2 , be made out of a material with density of $5 \times 10^3 \text{ kg m}^{-3}$, and have a total mass of 1 gram. The diameter of an atom of the lightsail material is $2 \times 10^{-10} \text{ m}$. The lightsail material has an absorption coefficient of $\kappa=0.5 \text{ cm}^{-1}$ and a melting temperature of 1000 K.

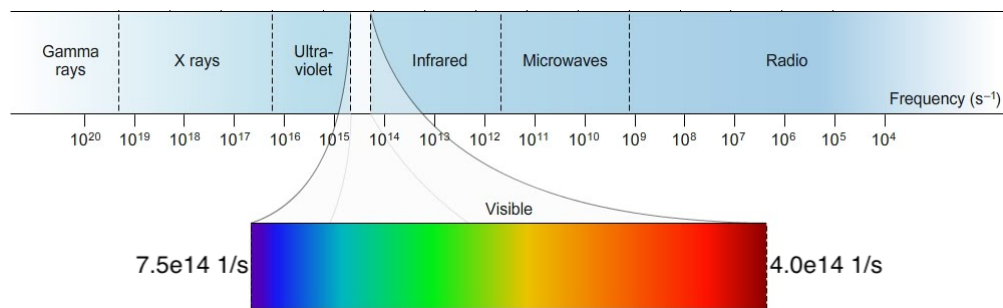
(1) Should the lightsail material have a high or low reflectivity in the wavelength range of the laser? Why?

(2) Should the lightsail material have a high or low emissivity in the wavelength range of the laser? Why?

(3) Should the lightsail have a high or low emissivity at all other wavelengths than the wavelength range of the laser? Why?

(4) The Breakthrough Starshot laser will have a wavelength of 1–1.5 μm . What frequency range does this correspond to?

(5) Using the chart below, what part of the electromagnetic spectrum will the Breakthrough Starshot laser be in?



(6) Approximately how many atomic layers thick will the lightsail be?

(7) What fraction of the laser light will the lightsail absorb?

(8) Assume that the lightsail has an emissivity of ϵ at all wavelengths except for the very narrow range of the laser. Write down a formula for the equilibrium temperature of the lightsail when laser light is hitting it.

(9) Assume $\varepsilon = 0.1$. What is the equilibrium temperature of the lightsail? Would the lightsail melt?

(10) Assume $\varepsilon = 0.001$. What is the equilibrium temperature of the lightsail? Would the lightsail melt?

of $I=10 \text{ GW m}^{-2}$, where $1 \text{ GW}=10^9 \text{ W}$. The average penetration depth of hydrogen and helium atoms is about 1 mm at a speed of $0.2c$. Interstellar dust particles have a typical mass of about $m=10^{-16} \text{ kg}$. The light sail will have an area of 10 m^2 , be made out of a material with density of $5 \times 10^3 \text{ kg m}^{-3}$, and have a total mass of 1 gram . The diameter of an atom of the lightsail material is $2 \times 10^{-10} \text{ m}$. The lightsail material has an absorption coefficient of $\kappa=0.5 \text{ cm}^{-1}$ and a melting temperature of 1000 K .

(1) Should the lightsail material have a high or low reflectivity in the wavelength range of the laser? Why?

High reflectivity to maximize photon momentum transfer.

(2) Should the lightsail material have a high or low emissivity in the wavelength range of the laser? Why?

Low emissivity \rightarrow low absorptivity \rightarrow less likely to overheat and melt

(3) Should the lightsail have a high or low emissivity at all other wavelengths than the wavelength range of the laser? Why?

High emissivity so it can radiate efficiently and stay cool

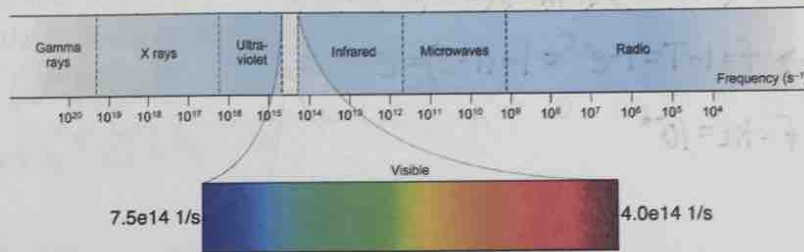
(4) The Breakthrough Starshot laser will have a wavelength of 1–1.5 μm . What frequency range does this correspond to?

$$c = \lambda v \rightarrow v = \frac{c}{\lambda}$$

$$v_2 = \frac{3 \times 10^8 \frac{\text{m}}{\text{s}}}{10^{-6} \text{ m}} = 3 \times 10^{14} \text{ s}^{-1}$$

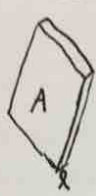
$$v_1 = \frac{3 \times 10^8 \frac{\text{m}}{\text{s}}}{\frac{3}{2} \times 10^{-6} \text{ m}} = 2 \times 10^{14} \text{ s}^{-1}$$

(5) Using the chart below, what part of the electromagnetic spectrum will the Breakthrough Starshot laser be in?



Near Infrared

(6) Approximately how many atomic layers thick will the lightsail be?



$$m = \rho V = \rho AL$$

$$\therefore L = \frac{m}{\rho A} = \frac{(1 \text{ g}) \left(\frac{1 \text{ kg}}{10^3 \text{ g}} \right)}{(5 \times 10^3 \frac{\text{kg}}{\text{m}^3}) (10 \text{ m}^2)} = \frac{1}{5} \times 10^{-7} \text{ m} = 2 \times 10^{-8} \text{ m}$$

$$\text{atoms} = (2 \times 10^{-8} \text{ m}) \left(\frac{1 \text{ atom}}{2 \times 10^{-10} \text{ m}} \right) = 100 \text{ atoms}$$

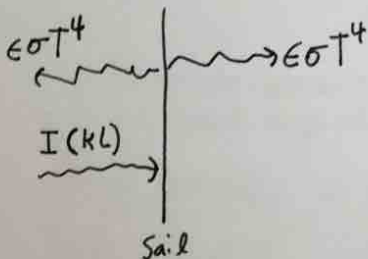
(7) What fraction of the laser light will the lightsail absorb?

$$\tau = KL = (0.5 \text{ cm}^{-1}) \left(\frac{10^2 \text{ cm}}{\text{m}} \right) (2 \times 10^{-8} \text{ m}) = 10^{-6}$$

$$T = e^{-\tau} \rightarrow f = 1 - T = 1 - e^{-\tau} \approx 1 - (1 - \tau) = \tau$$

$$\therefore f = KL = 10^{-6}$$

(8) Assume that the lightsail has an emissivity of ϵ at all wavelengths except for the very narrow range of the laser. Write down a formula for the equilibrium temperature of the lightsail when laser light is hitting it.



$$I KL = 2\epsilon\sigma T^4$$

$$T = \left(\frac{I KL}{2\epsilon\sigma} \right)^{1/4}$$

(9) Assume $\varepsilon = 0.1$. What is the equilibrium temperature of the lightsail? Would the lightsail melt?

$$T = \left(\frac{(10^{10} \frac{\text{W}}{\text{m}^2})(10^{-6})}{2 \cdot 10^{-1} \cdot 6 \times 10^{-8} \text{W m}^{-2} \text{K}^{-4}} \right)^{1/4} = (10^{12})^{1/4} \text{K} = 1000 \text{K}$$

$T \approx T_m$, so might melt

(10) Assume $\varepsilon = 0.001$. What is the equilibrium temperature of the lightsail? Would the lightsail melt?

$$T = \left(\frac{(10^{10} \frac{\text{W}}{\text{m}^2})(10^{-6})}{2 \cdot 10^{-3} \cdot 6 \times 10^{-8} \text{W m}^{-2} \text{K}^{-4}} \right)^{1/4} = (10^{14})^{1/4} \text{K} = 10^{3.5} \text{K} = 10^{3.5} \text{K} = \pi \cdot 10^3 \text{K}$$

$T > T_m \rightarrow$ would melt

References

- [1] Atwater, H. A. *et al.* Materials challenges for the Starshot lightsail. *Nature materials* 1 (2018).

9 Finals

9.1 Final, 2017

Gliese 1214b (GJ1214b) is an extrasolar planet orbiting the star Gliese 1214 that is located 42 light years (4.0×10^{17} m) from the Sun [12]. GJ1214b is a transiting planet, which means it passes between Gliese 1214 and us as it orbits Gliese 1214. It has a size between Earth and Neptune, and is closer to its star than Earth is. GJ1214b is extremely exciting because it allows us to test methods for observing the atmosphere of a relatively small and not super hot planet. The hope is that we can refine our techniques so that over the next twenty years as technology develops we will be able to measure the atmospheres of more Earth-like planets, and possibly detect signs of life. Using the material you have learned in this course, you can now understand interesting aspects of the atmosphere of GJ1214b! This final will walk you through this. Here is some information about the star Gliese 1214 and the planet GJ1214b that may be useful:

Gliese 1214 is a small, M4.5 star with an emission temperature of about 3000 K, which compares to the Sun's value of 5800 K, and a luminosity of 0.33% of the Sun's ($L_{\odot} = 3.8 \times 10^{26}$ W). Gliese 1214 also has a mass of 16% of the Sun's ($M_{\odot} = 2.0 \times 10^{30}$ kg) and a radius of 21% of the Sun's ($R_{\odot} = 7.0 \times 10^8$ m). It is about 6 billion years old, whereas the Sun is about 4.5 billion years old. The \odot symbol means the Sun's value.

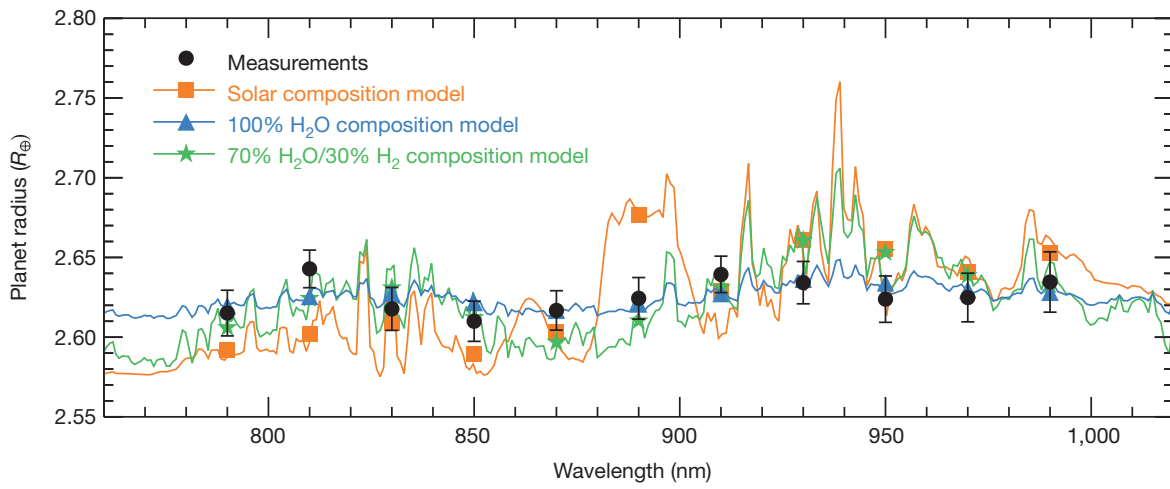
GJ1214b has an orbital period of 1.5 Earth days and a mean orbital distance of 0.014 AU (1 AU = 1.5×10^{11} m is the distance between the Earth and the Sun). The planet is tidally locked so that it rotates once per orbit and always shows the same side to its star (like the Moon does to Earth). Its mass is approximately 6.5 times Earth's mass ($M_{\oplus} = 6.0 \times 10^{24}$ kg) and its radius is approximately 2.65 times Earth's radius ($R_{\oplus} = 6.3 \times 10^6$ m), so that its surface gravity is approximately 0.9 times Earth's surface gravity ($g_{\oplus} = 9.8 \text{ m s}^{-2}$). The \oplus symbol means Earth's value.

(1) If you were on a spaceship that traveled to the Gliese 1214 system and you looked out the window at the star, what color would it be? Make a calculation to support your answer.

(2) Calculate the flux of stellar radiation GJ1214b receives from its star in terms of multiples of the insolation Earth receives ($S_0 = 1360 \text{ W m}^{-2}$).

(3) Assume that GJ1214b has an albedo of zero. Calculate GJ1214b's emission temperature. You may use this emission temperature later any time you need a temperature in a calculation.

In 2010 Jacob Bean, who is now a professor of astronomy at the University of Chicago, published a famous paper measuring composition of the atmosphere GJ1214b using a technique called transit spectroscopy [13]. Transit spectroscopy involves looking at the planet as the light from the star it is orbiting passes through the planet's atmosphere on its way to us. The plot below shows Jacob's transit measurements (black dots with error bars) of the planetary radius as a function of wavelength compared to what would be predicted by models incorporating various atmospheric compositions. The wiggles in the models represent absorption by atmospheric constituents, which change the apparent radius of the planet.



(4) Suppose we are looking at a wavelength where GJ1214b's atmosphere strongly absorbs the stellar light passing through it. Will the planetary radius appear relatively large or relatively small at this wavelength?

(5) Which model fits Jacob's measurements best?

(6) Calculate the gas constant of GJ1214b's atmosphere assuming the model that best fits the data. You can assume that the "solar composition" model is composed entirely of H_2 . Remember that the molecular mass of H is 1 g mol^{-1} , the molecular mass of O is 16 g mol^{-1} , and the ideal gas constant is $8.3 \text{ J mol}^{-1} \text{ K}^{-1}$.

(7) We can define a planetary Rossby number using the radius as the length scale and the Coriolis parameter at the North Pole. The lowest speed we can expect in GJ1214b's atmosphere is about $U_{min} = 1 \text{ m s}^{-1}$. Calculate the planetary Rossby number for GJ1214b corresponding to a characteristic atmospheric speed of U_{min} . Do you expect that geostrophic balance would prevail in most of GJ1214b's atmosphere if the true characteristic atmospheric speed is U_{min} ?

(8) The highest speed we can expect in GJ1214b's atmosphere is the speed of sound, which we can calculate as $U_{max} = \sqrt{RT}$. Calculate the planetary Rossby number for GJ1214b corresponding to a characteristic atmospheric speed of U_{max} . Do you expect that geostrophic balance would prevail in most of GJ1214b's atmosphere if the true characteristic atmospheric speed is U_{max} ?

(9) In Jacob's measurements the apparent radius of GJ1214b at different wavelengths is given in terms of multiples of the radius of Earth, R_{\oplus} . Estimate to one significant digit the size of variations in planetary radius (in m) for the "solar composition" model and for the "H₂O composition" model from the figure.

(10) The size of variations in the apparent radius of a planet due to transit spectroscopy should be of the same order as the scale height of the atmosphere. Estimate to one significant digit the scale height for the "solar composition" model and for the "H₂O composition" model. Compare your answers with the variations in the apparent planetary radius that you found for these models.

(1) If you were on a spaceship that traveled to the Gliese 1214 system and you looked out the window at the star, what color would it be? Make a calculation to support your answer.

$$\lambda_{\max} = \frac{2900 \mu\text{m}\cdot\text{K}}{3000 \text{ K}} = 0.97 \mu\text{m} = 970 \text{ nm}$$

The visible spectrum is 400-700 nm. Gliese 1214 actually emits most strongly at longer wavelengths, in the infrared. This means it will emit more at the red end of the spectrum than the blue, so the star will appear red.

(2) Calculate the flux of stellar radiation GJ1214b receives from its star in terms of multiples of the insolation Earth receives ($S_0 = 1360 \text{ W m}^{-2}$).

$$S = \frac{L}{4\pi D^2} \rightarrow \frac{S_{63}}{S_0} = \left(\frac{L_{63}}{L_0}\right) \left(\frac{D_0}{D_{63}}\right)^2$$

$$\frac{S_{63}}{S_0} = (0.0033) \left(\frac{1}{0.014}\right)^2 = 17$$

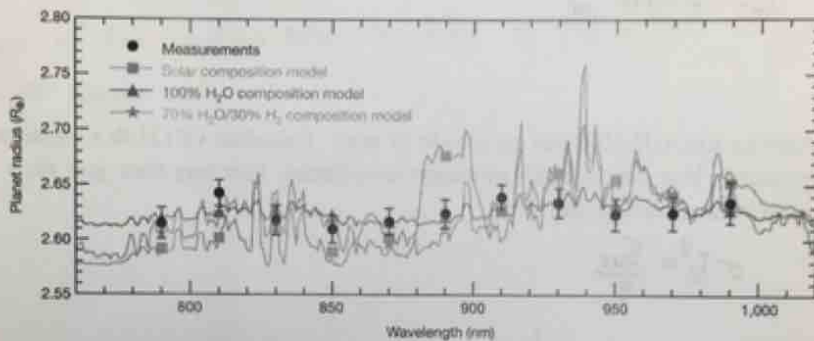
$$S_{63} = 2.3 \times 10^4 \frac{\text{W}}{\text{m}^2}$$

(3) Assume that GJ1214b has an albedo of zero. Calculate GJ1214b's emission temperature. You may use this emission temperature later any time you need a temperature in a calculation.

$$\sigma T_e^4 = \frac{S_{63}}{4}$$

$$T_e = \left(\frac{2.3 \times 10^4 \frac{\text{W}}{\text{m}^2}}{4 \cdot 5.67 \times 10^{-8} \frac{\text{W}}{\text{m}^2 \text{K}^4}} \right)^{1/4} = 560 \text{ K}$$

In 2010 Jacob Bean, who is now a professor of astronomy at the University of Chicago, published a famous paper measuring composition of the atmosphere GJ1214b using a technique called transit spectroscopy. Transit spectroscopy involves looking at the planet as the light from the star it is orbiting passes through the planet's atmosphere on its way to us. The plot below shows Jacob's transit measurements (black dots with error bars) of the planetary radius as a function of wavelength compared to what would be predicted by models incorporating various atmospheric compositions. The wiggles in the models represent absorption by atmospheric constituents, which change the apparent radius of the planet.



(4) Suppose we are looking at a wavelength where GJ1214b's atmosphere strongly absorbs the stellar light passing through it. Will the planetary radius appear relatively large or relatively small at this wavelength?

At wavelengths where GJ1214b absorbs strongly you need very little atmosphere in order to block transmission of light. This means light can only pass through the upper regions of the atmosphere so the planetary radius will appear relatively large.

(5) Which model fits Jacob's measurements best?

100% H₂O

(6) Calculate the gas constant of GJ1214b's atmosphere assuming the model that best fits the data. You can assume that the "solar composition" model is composed entirely of H₂. Remember that the molecular mass of H is 1 g mol⁻¹, the molecular mass of O is 16 g mol⁻¹, and the ideal gas constant is 8.3 J mol⁻¹ K⁻¹.

$$M_{\text{H}_2\text{O}} = 18 \text{ g/mol} = 0.018 \text{ kg/mol}$$

$$R_{\text{H}_2\text{O}} = (8.3 \text{ J mol}^{-1} \text{ K}^{-1}) \left(\frac{1 \text{ mol}}{0.018 \text{ kg}} \right) = 460 \text{ J kg}^{-1} \text{ K}^{-1}$$

(7) We can define a planetary Rossby number using the radius as the length scale and the Coriolis parameter at the North Pole. The lowest speed we can expect in GJ1214b's atmosphere is about $U_{min} = 1 \text{ m s}^{-1}$. Calculate the planetary Rossby number for GJ1214b corresponding to a characteristic atmospheric speed of U_{min} . Do you expect that geostrophic balance would prevail in most of GJ1214b's atmosphere if the true characteristic atmospheric speed is U_{min} ?

$$R_o = \frac{U}{fL} \quad f = 2\Omega \sin\theta = 2\Omega = \frac{2}{1.5 \text{ days per orbit/rotation}} \cdot \frac{2\pi}{86400 \text{ s}} = 10^{-4} \frac{1}{\text{s}}$$

$$L = (2.65)(6.3 \times 10^6 \text{ m}) = 1.7 \times 10^7 \text{ m}$$

$$R_o = \frac{1 \frac{\text{m}}{\text{s}}}{(10^{-4} \frac{1}{\text{s}})(1.7 \times 10^7 \text{ m})} \approx 10^{-3} \quad R_o \ll 1 \therefore \text{geostrophic balance should be a very good approximation}$$

(8) The highest speed we can expect in GJ1214b's atmosphere is the speed of sound, which we can calculate as $U_{max} = \sqrt{RT}$. Calculate the planetary Rossby number for GJ1214b corresponding to a characteristic atmospheric speed of U_{max} . Do you expect that geostrophic balance would prevail in most of GJ1214b's atmosphere if the true characteristic atmospheric speed is U_{max} ?

$$U_{max} = \left((460 \text{ J kg}^{-1} \text{ K}^{-1}) (560 \text{ K}) \right)^{1/2} = 510 \frac{\text{m}}{\text{s}}$$

$$R_o = \frac{510 \frac{\text{m}}{\text{s}}}{(10^{-4} \frac{1}{\text{s}})(1.7 \times 10^7 \text{ m})} = 0.3$$

R_o is small, but not very small. Geostrophic balance will be pretty good (remember $R_o \sim 0.1$ in most of Earth's atmosphere), but not perfect.

(9) In Jacob's measurements the apparent radius of GJ1214b at different wavelengths is given in terms of multiples of the radius of Earth, R_{\oplus} . Estimate to one significant digit the size of variations in planetary radius (in m) for the "solar composition" model and for the "H₂O composition" model from the figure.

$$\text{Solar: } \Delta R \approx 0.1 R_{\oplus} \approx 6 \times 10^5 \text{ m}$$

$$\text{H}_2\text{O: } \Delta R \approx 0.01 R_{\oplus} \approx 6 \times 10^4 \text{ m}$$

(10) The size of variations in the apparent radius of a planet due to transit spectroscopy should be of the same order as the scale height of the atmosphere. Estimate to one significant digit the scale height for the "solar composition" model and for the "H₂O composition" model. Compare your answers with the variations in the apparent planetary radius that you found for these models.

$$H = \frac{RT}{g} \Rightarrow H_{\text{H}_2\text{O}} = \frac{(460 \text{ J kg}^{-1} \text{ K}^{-1})(560 \text{ K})}{0.9 \cdot 9.8 \frac{\text{m}}{\text{s}^2}} = 3 \times 10^4 \text{ m}$$

$$\text{Solar: } R_{\text{H}_2} = (8.3 \text{ J mol}^{-1} \text{ K}^{-1}) \left(\frac{1 \text{ mol}}{0.002 \text{ kg}} \right) = 4200 \text{ J kg}^{-1} \text{ K}^{-1}$$

$$H_{\text{H}_2} = \frac{(4200 \text{ J kg}^{-1} \text{ K}^{-1})(560 \text{ K})}{0.9 \cdot 9.8 \frac{\text{m}}{\text{s}^2}} = 3 \times 10^5 \text{ m}$$

For each model ΔR is about two scale heights.

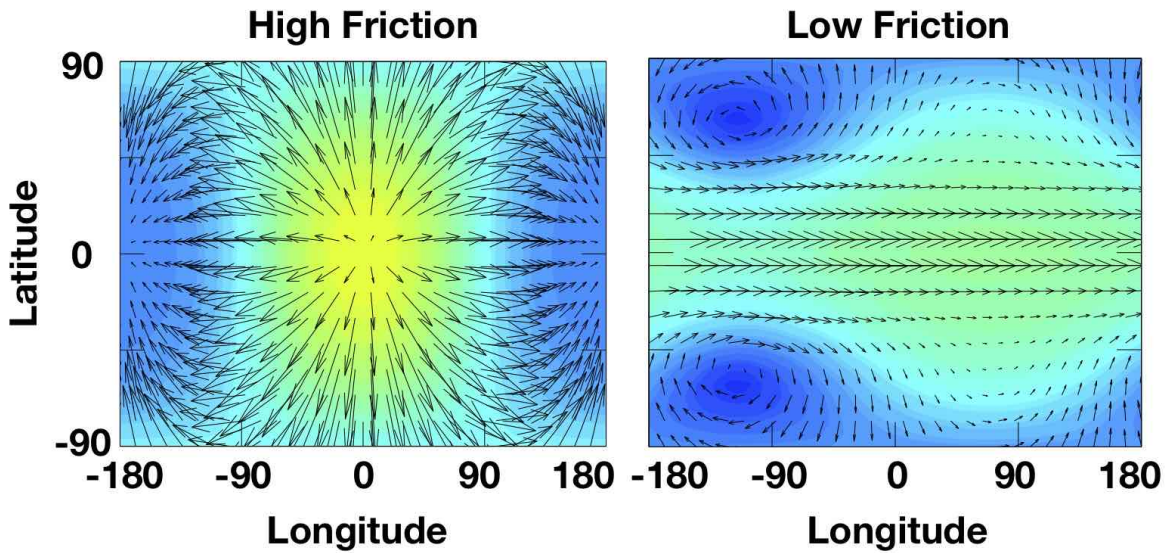
9.2 Final, 2018

Hot Jupiters are gas giant exoplanets that orbit very close to their host star. One such planet, WASP-33b, was discovered in 2010 [14] and is located 380 light years from planet Earth. In this fun final we're going to demonstrate our knowledge of the atmosphere by investigating WASP-33b. WASP-33b orbits the star WASP-33, which has a luminosity of $L = 6.14L_{\odot}$, where L_{\odot} is the luminosity of the Sun, a mass of $M = 1.50M_{\odot}$, and a radius of $R = 1.44R_{\odot}$. WASP-33b orbits WASP-33 at a distance of 0.026 AU, where an AU is an astronomical unit, or the average distance from the Sun to Earth, and is tidally locked, such that both its orbital and rotational periods are 1.22 days. WASP-33b has a radius that is 1.6 times Jupiter's radius, which is 71,500 km, or 11.2 times Earth's radius, and a mass of 2.1 times Jupiter's mass, which is 318 times Earth's mass. For this final, you may assume that the typical speed of WASP-33b's atmosphere is 50 m s^{-1} and that it has an albedo of zero. You may also need the Stefan-Boltzmann constant, $\sigma = 5.67 \times 10^{-8} \text{ W m}^{-2} \text{ K}^{-4}$. Finally, it may be useful to know that Earth's rotation rate is $\Omega = 7.3 \times 10^{-5} \text{ rad s}^{-1}$, that Earth's solar constant, the solar radiative flux at Earth's distance from the Sun, is 1367 W m^{-2} , that Earth's average albedo is 0.31, that Earth's surface gravity is 9.81 m s^{-2} , that Earth's mean density is 5.51 g cm^{-3} , that Earth's radius is 6,370 km, and that Earth's mass is $5.97 \times 10^{24} \text{ kg}$. You may also need to know that the surface gravity of a planet or star scales like its mass divided by its surface area.

(1) We can use a planetary Rossby number to estimate whether rotation, and the Coriolis force, is important for the atmospheric circulation of a planet. For the planetary Rossby number, we use the radius of the planet for the length scale, and we use the value of the Coriolis parameter at the pole. Remember that $f = 2\Omega \sin \phi$, where ϕ is the latitude. Estimate the planetary Rossby number of WASP-33b.

(2) Does rotation strongly affect the atmospheric dynamics of WASP-33b?

Tad Komacek graduated from the Department of the Geophysical Sciences in 2013, and recently defended his PhD thesis at the University of Arizona. As part of his PhD thesis, he simulated the atmospheric circulation of idealized planets like WASP-33b [15]. The plots below show output from two of these simulations assuming either high atmospheric friction or low atmospheric friction. The plots show velocity vectors and colormaps of atmospheric temperature (yellow is hot and blue is cold). The sub-stellar point (directly under the central star) is located at (longitude,latitude)=(0,0). The anti-stellar point is located at (longitude,latitude)=($\pm 180,0$).



(3) Is the divergence of the flow in the high friction case positive, negative, or zero at the substellar point?

(4) Is the divergence of the flow in the high friction case positive, negative, or zero at the anti-stellar point?

(5) The circulation in the low friction case has a feature at the equator. What is this type of feature called?

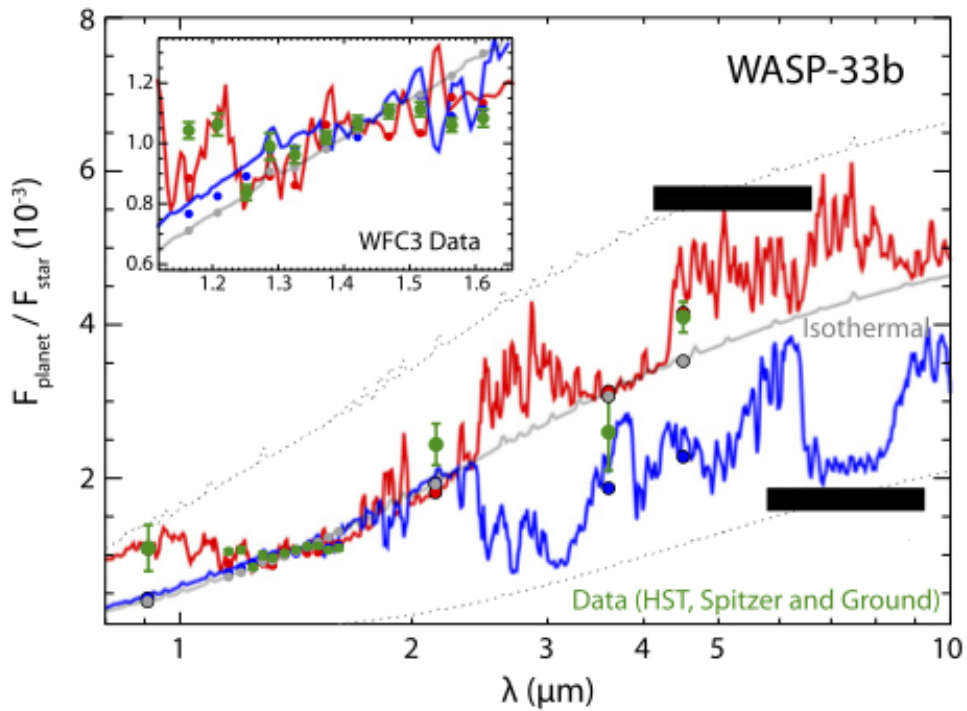
(6) There is a vortex in the low friction case located at approximately (longitude,latitude)=(-120,+60). Is the vorticity associated with this vortex positive or negative?

(7) Is the flow associated with the vortex at (longitude,latitude)=(-120,+60) in the low friction case cyclonic or anti-cyclonic?

(8) Estimate the emission temperature of WASP-33b, or the temperature that it would have if it were a spherical blackbody with an emissivity of one that received spatially uniform irradiation from its star.

(9) WASP-33b is made mostly of H_2 gas. Estimate the scale height of WASP-33b's atmosphere near the emission level.

The figure below shows measurements and models of planetary radiative emission normalized by stellar emission as a function of wavelength for WASP-33b [16].



(10) The grey curve shows a modeled spectrum with an isothermal temperature profile. Either the red or the blue curve shows a modeled spectrum including a stratosphere, and the other one doesn't have a stratosphere (the temperature just decreases as you go up). The green dots are the data and the other colored dots are the models averaged over the same bins as the data. Does the model that produced the red or the blue curve include a stratosphere?

(1) We can use a planetary Rossby number to estimate whether rotation, and the Coriolis force, is important for the atmospheric circulation of a planet. For the planetary Rossby number, we use the radius of the planet for the length scale, and we use the value of the Coriolis parameter at the pole. Remember that $f = 2\Omega \sin \phi$, where ϕ is the latitude. Estimate the planetary Rossby number of WASP-33b.

$$Ro = \frac{U}{fL} + 2 \quad U = 50 \text{ m/s} + 2$$

$$f = 2\Omega \sin 90^\circ = 2\Omega = 2 \cdot 7.3 \times 10^{-5} \frac{\text{rad}}{\text{s}} / 1.22 \approx 10^{-4} \frac{1}{\text{s}} + 2$$

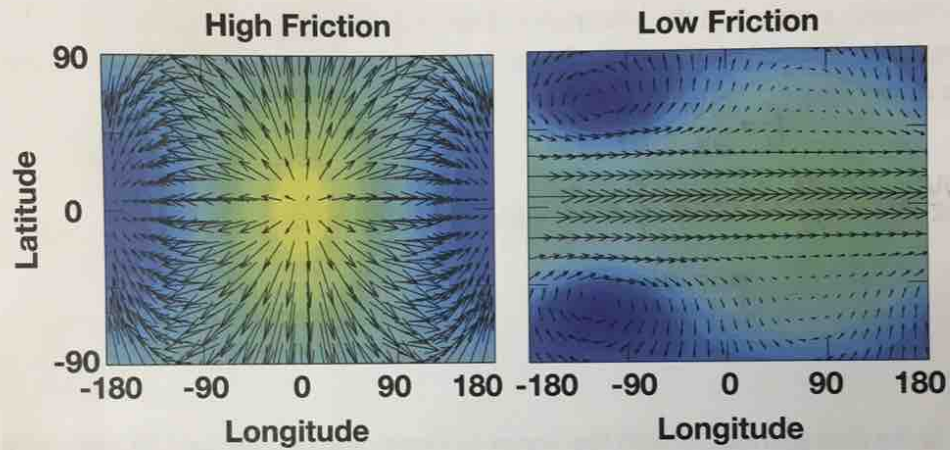
$$L = R = 1.6 \cdot 71,500 \text{ km} \cdot \left(\frac{10^3 \text{ m}}{\text{km}}\right) \approx 10^5 \text{ km} \cdot \frac{10^3 \text{ m}}{\text{km}} = 10^8 \text{ m} + 2$$

$$\therefore Ro = \frac{50 \frac{\text{m}}{\text{s}}}{(10^8 \text{ m})(10^{-4} \frac{1}{\text{s}})} = \frac{5 \times 10^1 \frac{\text{m}}{\text{s}}}{10^4 \frac{\text{m}}{\text{s}}} = 5 \times 10^{-3} + 2$$

(2) Does rotation strongly affect the atmospheric dynamics of WASP-33b?

$Ro \ll 1 \rightarrow$ yes, rotation should be important

Tad Komacek graduated from the Department of the Geophysical Sciences in 2013. He recently defended his PhD thesis at the University of Arizona. As part of his PhD thesis he simulated the atmospheric circulation of idealized planets like WASP-33b [2]. The plots below show output from two of these simulations assuming either high atmospheric friction or low atmospheric friction. The plots show velocity vectors and colormaps of atmospheric temperature (yellow is hot and blue is cold). The sub-stellar point (directly under the central star) is located at (longitude,latitude)=(0,0). The anti-stellar point is located at (longitude,latitude)=($\pm 180,0$).



(3) Is the divergence of the flow in the high friction case positive, negative, or zero at the substellar point?

positive

(4) Is the divergence of the flow in the high friction case positive, negative, or zero at the anti-stellar point?

negative

(5) The circulation in the low friction case has a feature at the equator. What is this type of feature called?

a jet

(6) There is a vortex in the low friction case located at approximately (longitude,latitude)=(-120,+60). Is the vorticity associated with this vortex positive or negative?

$$\zeta = \frac{\partial v}{\partial x} - \frac{\partial u}{\partial y}$$

$$\frac{\partial v}{\partial x} > 0, \frac{\partial u}{\partial y} < 0 \rightarrow \zeta > 0$$

positive

(7) Is the flow associated with the vortex at (longitude,latitude)=(-120,+60) in the low friction case cyclonic or anti-cyclonic?

counter-clockwise, Northern Hemisphere \rightarrow cyclonic

(8) Estimate the emission temperature of WASP-33b, or the temperature that it would have if it were a spherical blackbody with an emissivity of one that received spatially uniform irradiation from its star.

$$4\sigma T_e^4 = S(1-A) \quad A=0$$

$$S = \left(\frac{L}{L_\odot}\right) \left(\frac{d_\oplus}{d}\right)^2 \cdot S_\oplus = (6.14) \left(\frac{1}{0.026}\right)^2 \left(1365 \frac{\text{W}}{\text{m}^2}\right)$$

$$\therefore T_e = \left(\frac{(6.14) (1365 \frac{\text{W}}{\text{m}^2})}{4 \cdot (2.6 \times 10^{-3})^2 (5.67 \times 10^{-8} \text{W m}^{-2} \text{K}^{-4})} \right)^{1/4}$$

$$\approx \left(\frac{1365}{4 \cdot 6} \cdot 10^{12} \text{K}^4 \right)^{1/4}$$

$$\approx \left(\frac{1.4 \times 10^3}{2.4 \times 10^1} \cdot 10^{12} \text{K}^4 \right)^{1/4} \approx \left(\frac{1}{4} 500 \right)^{1/4} \cdot 10^3 \text{K}$$

$$\therefore T_e \approx 2500 \text{K}$$

(9) WASP-33b is made mostly of H_2 gas. Estimate the scale height of WASP-33b's atmosphere near the emission level.

$$H = \frac{RT}{g} \quad T = T_e = 2500 \text{ K}$$

$$R = \frac{R^*}{M} = \frac{8.3 \frac{\text{J}}{\text{mol K}}}{2 \times 10^{-2} \frac{\text{kg}}{\text{mol}}} = 4 \times 10^3 \frac{\text{J}}{\text{kg K}}$$

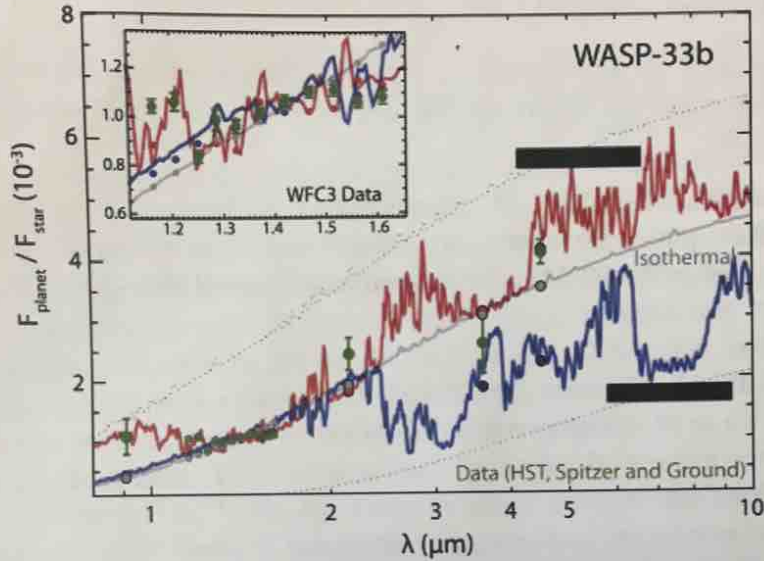
$$g = \left(\frac{M}{M_\oplus} \right) \left(\frac{R_\oplus}{R} \right)^2 g_\oplus = (318 \cdot 2.1) \left(\frac{1}{1.6 \cdot 11.2} \right)^2 \left(10 \frac{\text{m}}{\text{s}^2} \right)$$

$$= \frac{650}{(18)^2} \cdot 10 \frac{\text{m}}{\text{s}^2} = \frac{650}{324} \cdot 10 \frac{\text{m}}{\text{s}^2} \approx 20 \frac{\text{m}}{\text{s}^2}$$

$$\therefore H = \frac{(4 \times 10^3 \frac{\text{m}^2}{\text{s}^2 \text{K}}) (2500 \text{ K})}{(20 \frac{\text{m}}{\text{s}^2})} = 5 \cdot 10^3 \text{ m}$$

$$\therefore H = 5 \times 10^5 \text{ m} = 500 \text{ km}$$

The figure below shows measurements and models of planetary radiative emission normalized by stellar emission as a function of wavelength for WASP-33b [3].

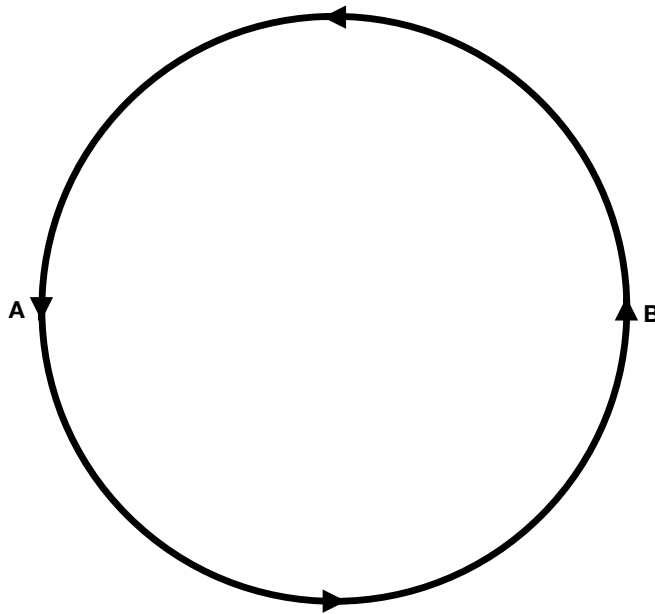


(10) The grey curve shows a modeled spectrum with an isothermal temperature profile. Either the red or the blue curve shows a modeled spectrum including a stratosphere, and the other one doesn't have a stratosphere (the temperature just decreases as you go up). The green dots are the data and the other colored dots are the models averaged over the same bins as the data. Does the model that produced the red or the blue curve include a stratosphere?

Where the opacity is high, the red curve flux is relatively high and the blue curve flux is relatively low. This means that the red curve model includes a stratosphere.

9.3 Final, 2019

This final concerns an effect on tropical cyclone motion called “ β drift.” Consider the tropical cyclone represented schematically by the diagram below. You can imagine that the diagram represents winds in the eyewall of the tropical cyclone as we look down on it from above, and that circulation extends outward from it. The arrow in the upper left of the diagram shows the direction of North. For this problem we will assume that there are no background winds, which is to say that the only wind in the system is associated with the tropical cyclone. We’ll assume that absolute vorticity is conserved, or that the thickness of the atmosphere in this region is roughly constant. This is a reasonable approximation since tropical cyclones mostly occur over oceans, where there are no mountains.



(1) Do the near-surface winds converge or diverge at the center of the tropical cyclone?

(2) What is the sign of the divergence of the near-surface winds at the center of the tropical cyclone?

(3) Do the winds near the tropopause converge or diverge at the center of the tropical cyclone?

(4) What is the sign of the divergence of the winds near the tropopause at the center of the tropical cyclone?

(5) What is the sign of the relative vorticity, ζ , associated with the tropical cyclone.

(6) What hemisphere is the tropical cyclone in?

(7) What is the sign of the planetary vorticity, f ?

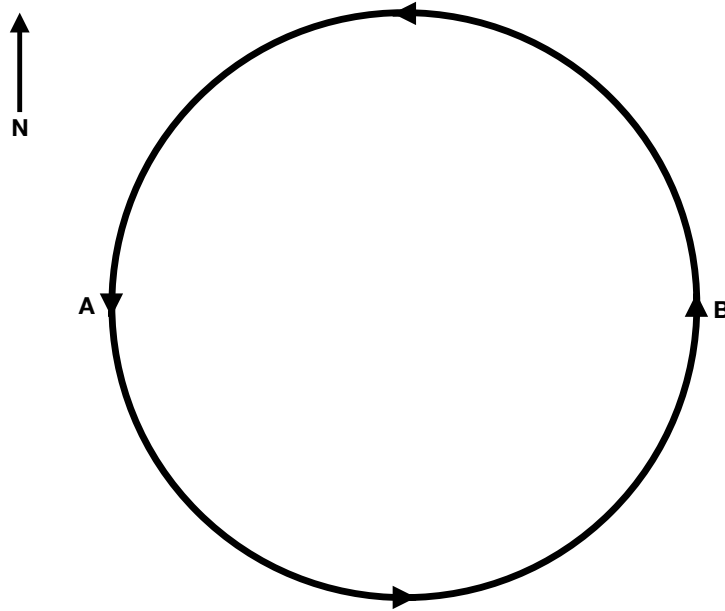
(8) At the point marked "A," air is being advected southward. Is the planetary vorticity of an air parcel at point A increasing or decreasing?

(9) Is the planetary vorticity of an air parcel at point B increasing or decreasing?

(10) Is the relative vorticity of an air parcel at point A increasing or decreasing?

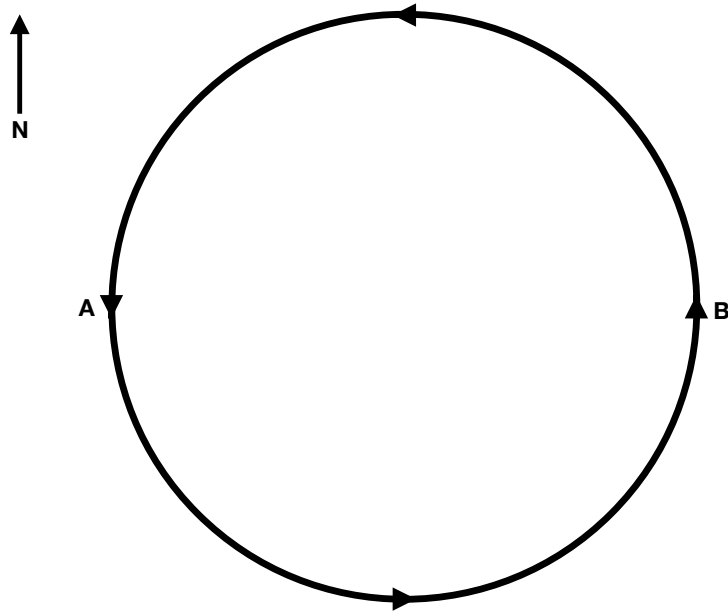
(11) Is the relative vorticity of an air parcel at point B increasing or decreasing?

(12, double points) On the diagram below, write $f \uparrow$, $f \downarrow$, $\zeta \uparrow$, and $\zeta \downarrow$ in the appropriate places next to points A and B. $f \uparrow$ indicates an increase in f , for example.



(13) The center of the tropical cyclone is a maximum or minimum in relative vorticity. The changes in relative vorticity on the west side (represented by point A) and the east side (represented by point B) of the tropical cyclone change the relative vorticity pattern so that the maximum or minimum is advected horizontally. Notice that this occurs even though there are no background winds. Based on the changes in relative vorticity we have figured out so far, in which direction will the tropical cyclone be advected?

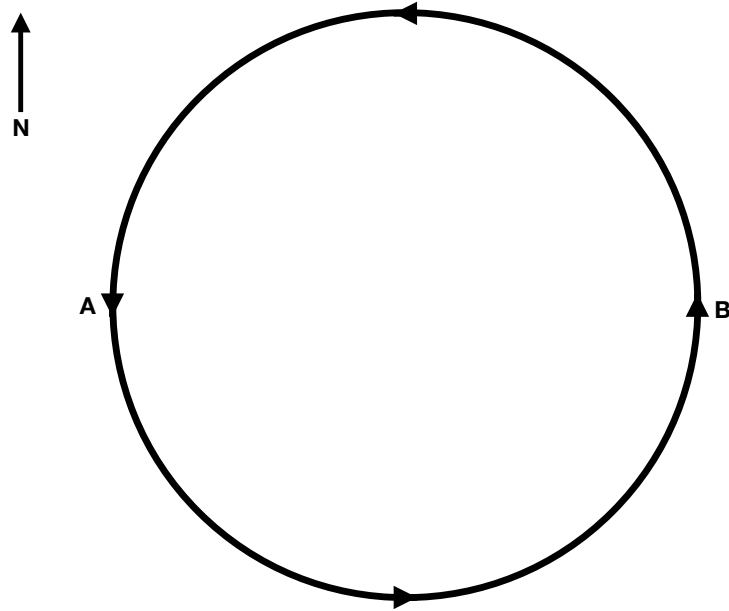
(14) On the diagram below, draw an arrow through the center of the tropical cyclone representing the direction of the advection due to changes in relative vorticity that we have figured out so far and label it v_1 .



(15) As a result of the change in relative vorticity, will the air at point A get additional clockwise or counterclockwise motion?

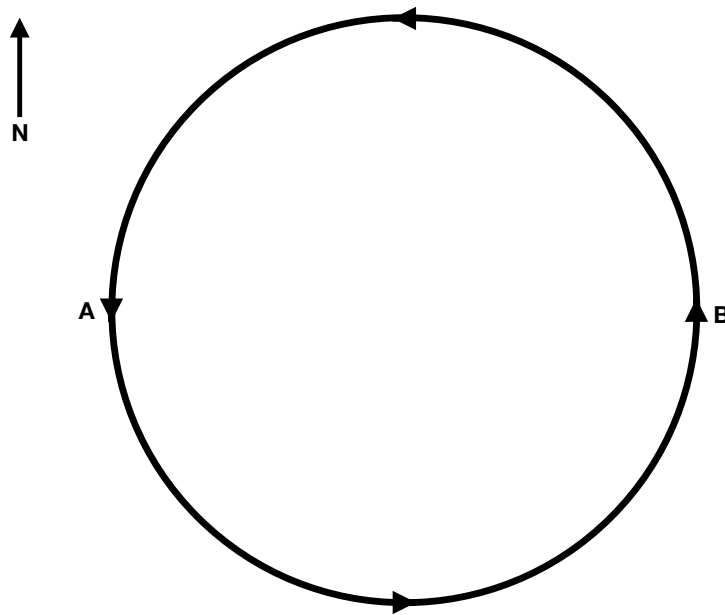
(16) As a result of the change in relative vorticity, will the air at point B get additional clockwise or counterclockwise motion?

(17) On the diagram below, draw circles around points A and B with arrows to represent the additional vorticity that they get simply from advection around the center of the tropical cyclone.

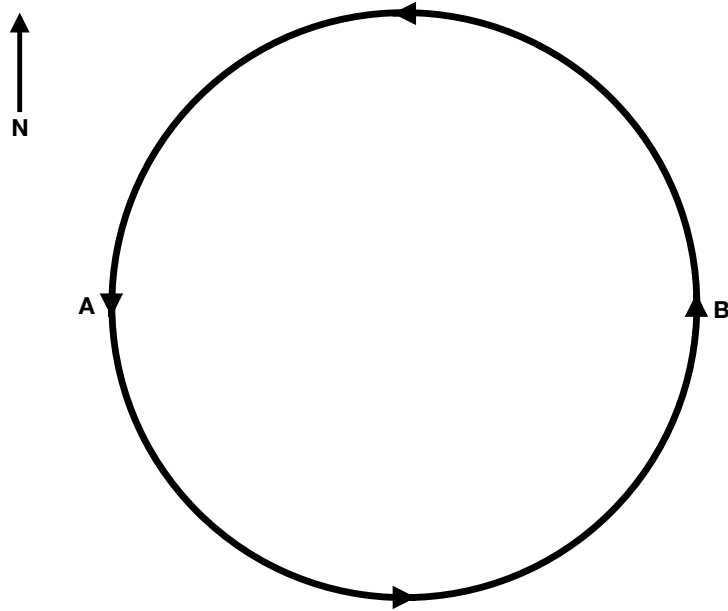


(18) These vorticity diagrams you have drawn should both be pushing air at the center of the tropical cyclone in the same direction. What direction is this?

(19) On the diagram below, draw an arrow through the center of the tropical cyclone representing the direction of advection due to this second result of changes in relative vorticity and label it v_2 .



(20) On the diagram below, draw v_1 , v_2 , and $v_T = v_1 + v_2$. v_T is the total advection of the tropical cyclone simply due to its swirling motion.



(21) In which direction is v_T pointing?

(22) If a tropical cyclone forms in the tropical Atlantic ocean and there are no background winds, will it tend to move towards the USA or away from the USA?

(23) Would the drift we have worked out occur if the planetary vorticity were constant?


(24) The northward gradient of the planetary vorticity is often referred to mathematically as β . Explain why the drift in tropical cyclone we have worked out here is called " β drift."

Name: Dorian

Final for 133

This final concerns an effect on tropical cyclone motion called “ β drift.” Consider the tropical cyclone represented schematically by the diagram below. You can imagine that the diagram represents winds in the eyewall of the tropical cyclone as we look down on it from above, and that circulation extends outward from it. The arrow in the upper left of the diagram shows the direction of North. For this problem we will assume that there are no background winds, which is to say that the only wind in the system is associated with the tropical cyclone. We’ll assume that absolute vorticity is conserved, or that the thickness of the atmosphere in this region is roughly constant. This is a reasonable approximation since tropical cyclones mostly occur over oceans, where there are no mountains.

$$\underline{f + \zeta = \text{const.}}$$



(1) Do the near-surface winds converge or diverge at the center of the tropical cyclone?

Converge

(2) What is the sign of the divergence of the near-surface winds at the center of the tropical cyclone?

negative

(3) Do the winds near the tropopause converge or diverge at the center of the tropical cyclone?

diverge

(4) What is the sign of the divergence of the winds near the tropopause at the center of the tropical cyclone?

positive

(5) What is the sign of the relative vorticity, ζ , associated with the tropical cyclone.

positive

(6) What hemisphere is the tropical cyclone in?

northern

(7) What is the sign of the planetary vorticity, f ?

positive

(8) At the point marked "A," air is being advected southward. Is the planetary vorticity of an air parcel at point A increasing or decreasing?

decreasing

(9) Is the planetary vorticity of an air parcel at point B increasing or decreasing?

increasing

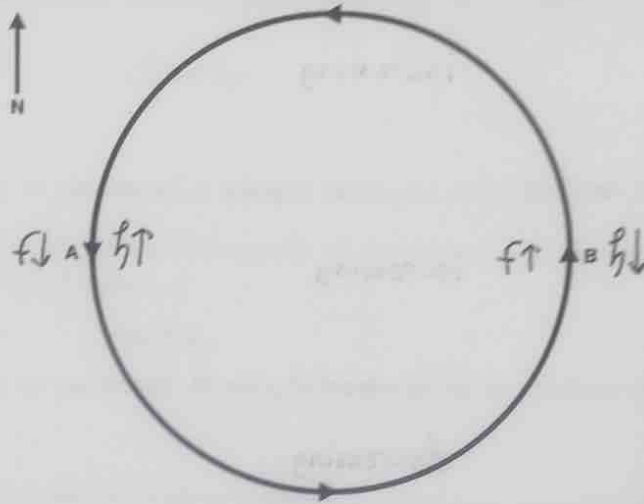
(10) Is the relative vorticity of an air parcel at point A increasing or decreasing?

increasing

(11) Is the relative vorticity of an air parcel at point B increasing or decreasing?

decreasing

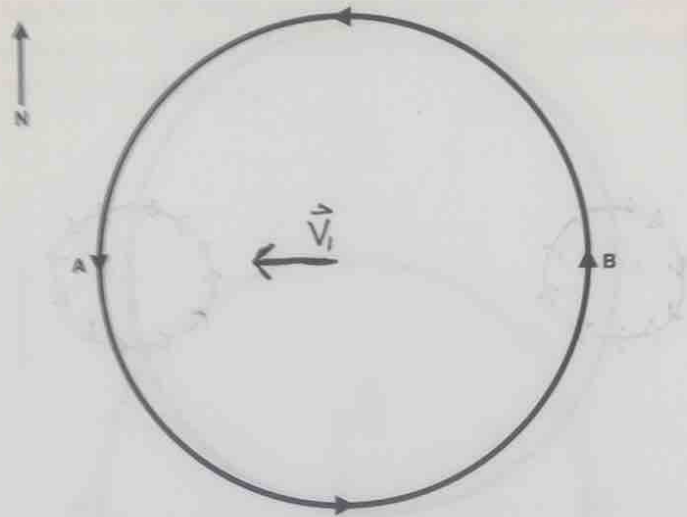
(12, double points) On the diagram below, write $f \uparrow$, $f \downarrow$, $\zeta \uparrow$, and $\zeta \downarrow$ in the appropriate places next to points A and B. $f \uparrow$ indicates an increase in f , for example.



(13) The center of the tropical cyclone is a maximum or minimum in relative vorticity. The changes in relative vorticity on the west side (represented by point A) and the east side (represented by point B) of the tropical cyclone change the relative vorticity pattern so that the maximum or minimum is advected horizontally. Notice that this occurs even though there are no background winds. Based on the changes in relative vorticity we have figured out so far, in which direction will the tropical cyclone be advected?

Westward

(14) On the diagram below, draw an arrow through the center of the tropical cyclone representing the direction of the advection due to changes in relative vorticity that we have figured out so far and label it v_1 .



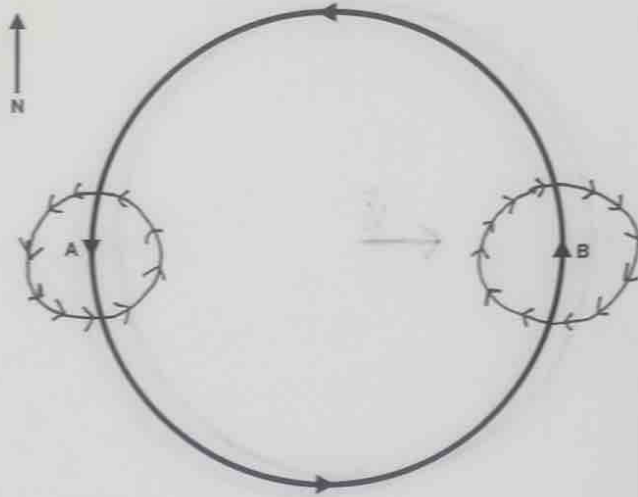
(15) As a result of the change in relative vorticity, will the air at point A get additional clockwise or counterclockwise motion?

counterclockwise

(16) As a result of the change in relative vorticity, will the air at point B get additional clockwise or counterclockwise motion?

clockwise

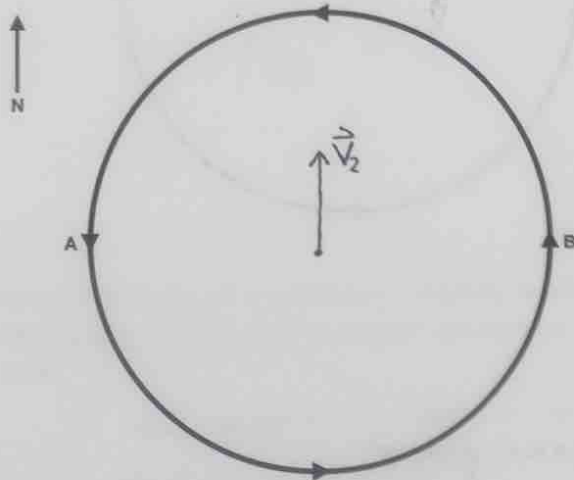
(17) On the diagram below, draw circles around points A and B with arrows to represent the additional vorticity that they get simply from advection around the center of the tropical cyclone.



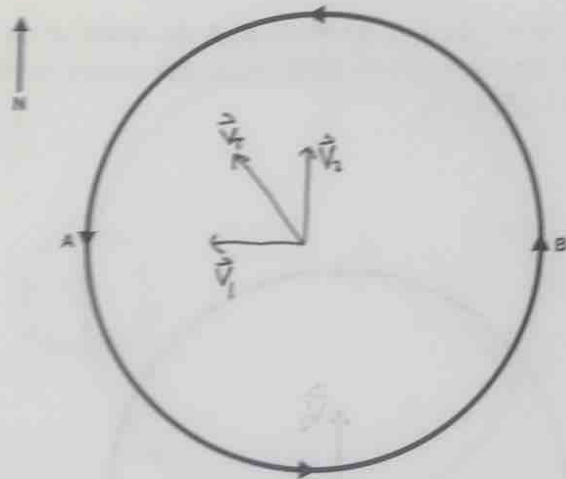
(18) These vorticity diagrams you have drawn should both be pushing air at the center of the tropical cyclone in the same direction. What direction is this?

North

(19) On the diagram below, draw an arrow through the center of the tropical cyclone representing the direction of advection due to this second result of changes in relative vorticity and label it v_2 .



(20) On the diagram below, draw v_1 , v_2 , and $v_T = v_1 + v_2$. v_T is the total advection of the tropical cyclone simply due to its swirling motion.



(21) In which direction is v_T pointing?

Northwest

(22) If a tropical cyclone forms in the tropical Atlantic ocean and there are no background winds, will it tend to move towards the USA or away from the USA?

towards the USA

(23) Would the drift we have worked out occur if the planetary vorticity were constant?

No

(24) The northward gradient of the planetary vorticity is often referred to mathematically as β . Explain why the drift in tropical cyclone we have worked out here is called " β drift."

It only happens if there is a gradient in planetary vorticity or β .

10 References

- [1] Wallace, J. M. & Hobbs, P. V. *Atmospheric science: an introductory survey* (Elsevier, 2006).
- [2] Sagan, C. & Mullen, G. Earth and Mars - evolution of atmospheres and surface temperatures. *Science* **177**, 52–56 (1972).
- [3] Seiff, A. *et al.* Structure of the atmosphere of Jupiter: Galileo probe measurements. *Science* **272**, 844–845 (1996).
- [4] Manabe, S. & Wetherald, R. T. Thermal equilibrium of the atmosphere with a given distribution of relative humidity. *Journal of the Atmospheric Sciences* **24**, 241–259 (1967).
- [5] Emanuel, K. A. An air-sea interaction theory for tropical cyclones. Part i: Steady-state maintenance. *Journal of the Atmospheric Sciences* **43**, 585–605 (1986).
- [6] Sagan, C. *Physical Studies of Planets*. Ph.D. thesis, The University of Chicago (1960). https://drive.google.com/open?id=1d84ILZz1K7Gn_nFCOo7j08z5QUk5O7A0.
- [7] Som, S. M. *et al.* Earth’s air pressure 2.7 billion years ago constrained to less than half of modern levels. *Nature Geoscience* **9**, 448 (2016).
- [8] Fulchignoni, M. *et al.* In situ measurements of the physical characteristics of Titan’s environment. *Nature* **438**, 785 (2005).
- [9] Wolkenberg, P., Formisano, V., Rinaldi, G. & Geminale, A. The atmospheric temperatures over Olympus Mons on Mars: An atmospheric hot ring. *Icarus* **207**, 110–123 (2010).
- [10] Zhai, Y. *et al.* Scalable-manufactured randomized glass-polymer hybrid metamaterial for daytime radiative cooling. *Science* **355**, 1062–1066 (2017).
- [11] Atwater, H. A. *et al.* Materials challenges for the Starshot lightsail. *Nature materials* **1** (2018).
- [12] Charbonneau, D. *et al.* A super-Earth transiting a nearby low-mass star. *Nature* **462**, 891 (2009).
- [13] Bean, J. L., Kempton, E. M.-R. & Homeier, D. A ground-based transmission spectrum of the super-Earth exoplanet GJ 1214b. *Nature* **468**, 669 (2010).
- [14] Cameron, A. C. *et al.* Line-profile tomography of exoplanet transits–II. A gas-giant planet transiting a rapidly rotating A5 star. *Monthly Notices of the Royal Astronomical Society* **407**, 507–514 (2010).
- [15] Komacek, T. D. & Showman, A. P. Atmospheric circulation of Hot Jupiters: Dayside–nightside temperature differences. *The Astrophysical Journal* **821**, 16 (2016).
- [16] Haynes, K., Mandell, A. M., Madhusudhan, N., Deming, D. & Knutson, H. Spectroscopic evidence for a temperature inversion in the dayside atmosphere of hot Jupiter WASP-33b. *The Astrophysical Journal* **806**, 146 (2015).